

Q1. Please underline the correct answer for the following questions below

10

1. Which among the following country was the host of 2018 Commonwealth Games?
[A] Canada [B] England [C] Australia [D] India

2. Kunwar Bai, the brand ambassador of Swachh Bharat has passed away. The word "Agricultural Shot" is known to be used sometimes in which among the following sports?
[A] Cricket [B] Hockey [C] Golf [D] Polo

3. Which of the following is the leading E-commerce company based in China?
[A] Amazon [B] Alibaba [C] Flipkart [D] EBay

4. The first digital village belongs to which state of India?
[A] Maharashtra [B] Gujarat [C] Kerala [D] Madhya Pradesh

5. The Elephanta caves have been mostly ascribed to which among the following dynasty?
[A] Chalukyas [B] Cholas [C] Rasthrakutas [D] Pallavas

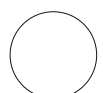
6. What will be the India's second mission to the Moon to be launched by ISRO in 2019?
[A] Chandrayaan-2 [B] Chandrayaan-3 [C] Chandrayaan-1 [D] None of the above

7. The land frontier of India is about 15200 KM. Which of the following countries shares the largest border length with India?
[A] Bangladesh [B] Pakistan [C] china [D] Nepal

8. Which of the following schemes have been subsumed in the recently approved Ayushman Bharat - National Health Protection Mission (AB-NHPM)?
[A] Rashtriya Swasthya Bima Yojana [B] Senior Citizen Health Insurance Scheme
[C] National Life Insurance Scheme [D] 1 & 2

9. According to United nations world happiness report 2018, name the no. one ranked country?
[A] Austria [B] Denmark [C] United States [D] India

10. In which of the following city Elephant festival is celebrated annually?
[A] Jaipur [B] Jodhpur [C] Kota [D] Ajmer



Q4. GENERAL AWARENESS

10

Name the brand against each tagline

- a. "Pure Banking, Nothing Else" _____
- b. Move on _____
- c. Experience Certainty _____
- d. Ready to race _____
- e. Never Settle _____

Explain in one line (Any 5)

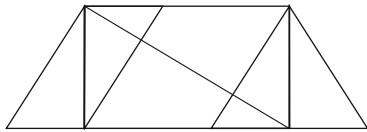
- a. UIDAI _____
- b. AI _____
- c. Block chain _____
- d. E-commerce _____
- e. E-Wallet _____
- f. Organic farming _____
- g. E- healthcare _____
- h. Digital storyboarding _____



Q7. ANALYTICAL THINKING

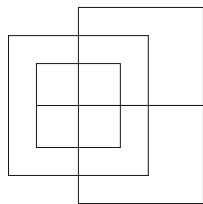
10

a. Find the number of triangles in the given figure.



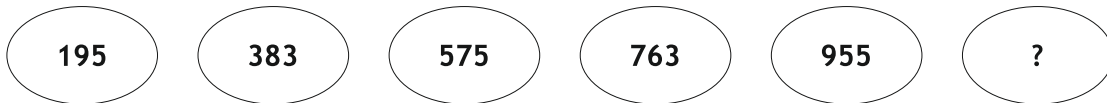
- A. 8
- B. 10
- C. 12
- D. 14

b. Find the minimum number of straight lines to make the given figure.



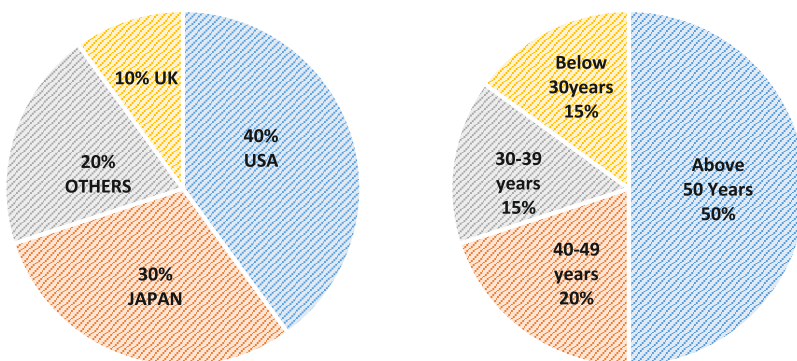
- A. 13
- B. 15
- C. 17
- D. 19

c. Which four-digit number missing from the oval.



- A. 1111
- B. 2222
- C. 4311
- D. 1143

d. The following pie charts exhibit the distribution of the overseas tourist traffic from India. The two charts show the tourist distribution by country and the age profiles of the tourists respectively. Distribution of Overseas tourist traffic from India

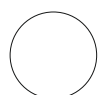


e. What percentage of Indian tourists went to either USA or UK?

- A. 40 %
- B. 50 %
- C. 60 %
- D. 70 %

f. The ratio of the number of Indian tourists that went to USA to the number of Indian tourists who were below 30 years of age is?

- A. 2:1
- B. 8:3
- C. 3:8
- D. Cannot be determined



FOR ROUGH WORK

A large, empty rectangular box with a thin black border, occupying most of the page below the header. It is intended for rough work or calculations.