


Symbiosis Entrance Exam for Design (SEED)
SAMPLE PAPER

1. Select a suitable figure from the following options that will fit in the picture below?



a)



b)




c)



d)

2. How many animals are there in the picture below?



a) 6

b) 4

c) 8

d) 7

3. Find the mirror image of the picture given below.



a)



b)



c)



d)

4. We have a glimpse of four sides of the roof. How many sides are there in real?




a) 4

b) 6

c) 7

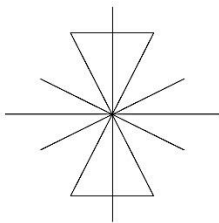
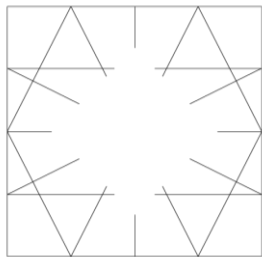
d) 8

5. How many triangles are there in the picture?

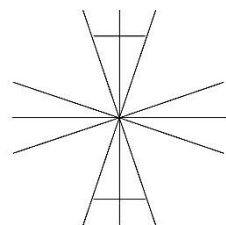


- a) 3
- b) 5
- c) 4
- d) 6

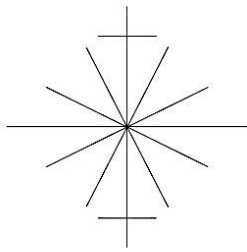
6. Select the suitable figure from the following options that will fit in the below given picture?



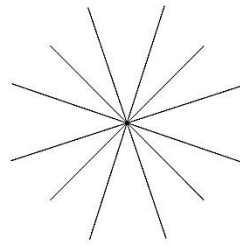
a)



b)



c)

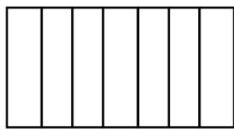


d)

7. What is the image seen if a person views the 3-Dimensional letter "W" from top view?



Letter "W" in 3 dimensional form.



a



b

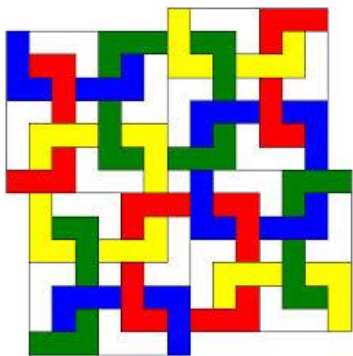


c



d

8. How many complete square Polygons are there in the given image?




- a) 6
- b) 8
- c) 9
- d) 11

9. Which of the following is completely true for the given traditional graphic image?



- a) Repetition
- b) Mirror image
- c) Symmetry
- d) Dynamic

10. Which layer is in the front?



- a) Red
- b) Blue
- c) White
- d) Red and White

11. Which of the following best suits the image of furniture?



- a) Rhythm
- b) Movement
- c) Asymmetry
- d) Smooth

12. What is this architectural element called?



- a) Skylight
- b) Roof window
- c) Roof glass
- d) Roof cutout

13. Which structure in India has this predominant element shown in the image?



- a) Forts in Rajasthan
- b) Temples in Orissa
- c) Temples in Tamil Nadu*
- d) Temples in Punjab

14. Seen below is a section of a well-known logo below. Identify the logo.



- a) The X Files
- b) AXN
- c) Extreme Sports
- d) Express Courier

15. What is the next letter in this sequence J F M A M J __?

- a) P
- b) S

- c) J
- d) T

16. The movie series Lord of The Rings is based on the works by _____.

- a) Homer
- b) Tolkien*
- c) Plato
- d) Kalidas

17. The following fashion silhouettes are inspired from which crafting technique?



- a) Kirigami
- b) Origami
- c) Quilling
- d) None of the above

18. Identify this World Heritage Site.



- a) Angkor Wat
- b) Macho Pichu
- c) Campeche
- d) Cappadocia

19. This dance form belongs to which country?



- a) Malaysia
- b) Indonesia
- c) Korea
- d) Thailand

20. Here are some words translated from an artificial language.

moolokarn means blue sky,

wilkospadi means bicycle race,

moolowilko means blue bicycle.

Which word could mean "racecar"?

- a) Wilkozwet
- b) Spadiwilko
- c) Moolobreil
- d) Spadivolo

21. Fact 1: All dogs like to run.

Fact 2: Some dogs like to swim.

Fact 3: Some dogs look like their masters.

If the first three statements are facts, which of the following statements must also be a fact?

- I. All dogs who like to swim look like their masters.
- II. Dogs who like to swim also like to run.
- III. Dogs who like to run do not look like their masters.

- a) I only
- b) II only
- c) II and III only
- d) None of the statements is a known fact

22. A four-person crew from Classic Colors is painting Mr. Field's house. Michael is painting the front of the house. Ross is in the alley behind the house painting the back. Jed is painting the window frames on the north side, Shawn is on the south. If Michael switches places with Jed, and Jed then switches places with Shawn, where is Shawn?

- a) In the alley behind the house
- b) On the North side of the house
- c) In front of the house
- d) On the south side of the house

23. Look carefully for the pattern, and then choose which pair of numbers comes next.

28, 25, 5, 21, 18, 5, 14 __, __.

- a) 11, 5
- b) 10, 7
- c) 11, 8
- d) 5, 10

24. What material is used to make this craft?



- a) Terracotta
- b) Gourd
- c) Wood
- d) Bamboo

25. What does NFT stand for?
- a) Non Formal Testing
 - b) Near Field Terminal
 - c) Nuclear Fuel Technology
 - d) Non Fungible Tokens *

Note: The actual question paper would have more questions from the similar topics.