

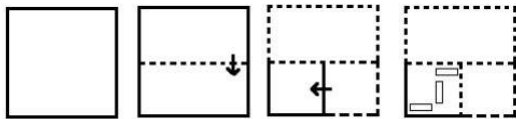
Roll Number	
Candidate Name	
Venue Name	iON Digital Zone iDZ 1 Sector 62
Exam Date	16/08/2021
Exam Time	9:00 AM – 10:00 AM
Subject	Combined Graduate Level Examination 2020 Tier 1

## Combined Graduate Level Examination 2020

Section : **General Intelligence and Reasoning**

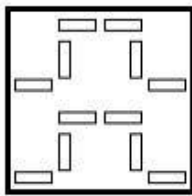
### Tier-I

**Q.1** The sequence of folding a piece of paper and the manner in which the folded paper has been cut is shown in the following figures. How would this paper look when unfolded?

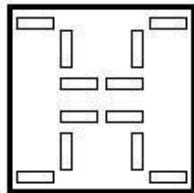


**Ans**

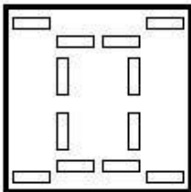
~~X~~ 1.



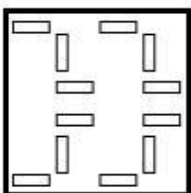
~~X~~ 2.



✓ 3.



~~X~~ 4.



Question ID : **81616114245**

Status : **Answered**

Chosen Option : **3**

Q.2 Four words have been given, out of which three are alike in some manner and one is different. Select the word that is different.

- Ans  1. Envy  
 2. Hatred  
 3. Empathy  
 4. Jealousy

Question ID : 81616113720

Status : Answered

Chosen Option : 3

Q.3 Study the given pattern carefully and select the number that can replace the question mark (?) in it.

14 16 13  
18 6 ?  
12 21 17

- Ans  1. 6  
 2. 8  
 3. 5  
 4. 7

Question ID : 81616112721

Status : Not Answered

Chosen Option : --

Q.4 Select the correct option that indicates the arrangement of the given words in the order in which they appear in an English dictionary.

1. Sorting
2. Solitary
3. Solution
4. Sophisticate
5. Solvent

- Ans  1. 2, 5, 3, 4, 1  
 2. 2, 4, 1, 3, 5  
 3. 2, 3, 1, 4, 5  
 4. 2, 3, 5, 4, 1

Question ID : 81616113213

Status : Answered

Chosen Option : 4

**Q.5 Four letter-clusters have been given, out of which three are alike in some manner and one is different. Select the letter-cluster that is different.**

**Ans**  1. RTPO

 2. LNJI

 3. DFBA

 4. FHDB

Question ID : **81616113214**

Status : **Answered**

Chosen Option : **4**

Q.6 Select the option that is related to the third number in the same way as the second number is related to the first number.

16 : 144 :: 28 : ?

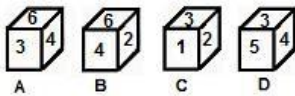
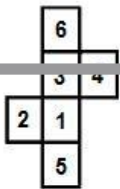
- Ans  1. 420  
 2. 364  
 3. 263  
 4. 544

Select the boxes that can be formed by folding the given sheet along the lines. Question ID : 81616112719

Status : Answered

Chosen Option : 1

Q.7



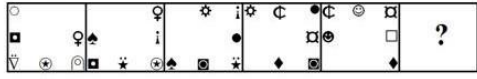
- Ans  1. Only A and C  
 2. Only B and C  
 3. Only C and D  
 4. Only A, C and D

Question ID : 81616113737


Status : Answered

Chosen Option : 1

**Q.8** Select the figure from among the given options that can replace the question mark (?) in the following series.



**Ans**



1.



2.



3.



4.

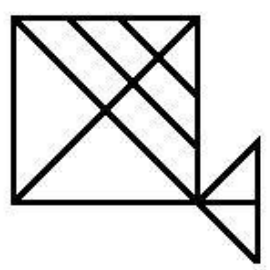
Question ID : 81616113230

Status : **Not Answered**

Chosen Option : --

**Q.9**

How many triangles are there in the given figure?



**Ans**

1. 18

2. 16

3. 15

4. 17

Question ID : 81616113736

Status : **Answered**

Chosen Option : 4

Q.10 In a certain code language, 'FRENCH' is coded as '114' and 'LOSS' is coded as '47'. How will 'COURSE' be coded in that language?

- Ans  1. 87  
 2. 120  
 3. 81  
 4. 103



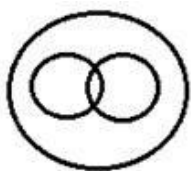

Question ID : 81616113724

Status : **Not Answered**

Chosen Option : --

Q.11 Select the Venn diagram that best illustrates the relationship between the following classes.

Coriander seeds, Spices, Cinnamon

- Ans  1. 
2. 
3. 
4. 

Question ID : 81616112731

Status : **Answered**

Chosen Option : 3

**Q.12** Select the option in which the words share the same relationship as that shared by the given pair of words.

**Anger : Emotion**

**Ans**  1. Bicycle : Roads

 2. Mattress : Bed

 3. Television : Entertainment

 4. Pomegranate : Fruit

Question ID : **81616114227**

Status : **Answered**

Chosen Option : **4**

Q.13 Select the option that is embedded in the given figure (rotation is NOT allowed).



✗

Ans




Select the correct mirror image of the given combination when the mirror is placed at MN as shown. Question ID : 81616114243

Status : Answered

Chosen Option : 3

Q.1 Q e 1 f P 5 4 N



✗ 1.

N 7 2 9 f 1 e Q

2. N 4 2 9 f 1 e Q

3. N 4 5 9 f 1 e Q

4. N 4 2 9 f 1 e Q

Question ID : 81616114244  
Status : Answered

Chosen Option : 2

Q.15 In a certain code language, 'PRINT' is written as 'YMNIU'. How will 'MAGIC' be written in that language?

Ans ✗ 1. HRLRZ

✗ 2. HLDRV

✓ 3. HRLZR

✗ 4. HDLVR

Question ID : 81616112713

Status : Answered

Chosen Option : 4



Q.16 Which two numbers should be interchanged to make the given equation correct?

$$36 \times 81 \div 9 - (88 \div 4) + 14 + (22 + 7) = 169$$

- Ans
- 1. 14 and 22
  - 2. 9 and 36
  - 3. 36 and 14
  - 4. 81 and 36

Question ID : 81616113733

Status : Answered

Chosen Option : 3

Q.17 Select the option that is related to the third word in the same way as the second word is related to the first word.

Leaves : Rustle :: Owl : ?

- Ans
- 1. Chirp
  - 2. Hoot
  - 3. Grunt
  - 4. Quack

Question ID : 81616113216

Status : Answered

Chosen Option : 2

Q.18 What was the day of the week on 17 April

- 2014? Ans
- 1. Friday
  - 2. Wednesday
  - 3. Saturday
  - 4. Thursday

Question ID : 81616114239

Status : Not Answered

Chosen Option : --

Q.19 Select the letter-cluster from among the given options that can replace the question mark (?) in the following series.

THME, WKJB, ZNGY, CQDV, ?

- Ans
- 1. FUAS
  - 2. FTAS
  - 3. FTAR
  - 4. FTBS

Question ID : 81616114222

Status : Answered

Chosen Option : 2

**Q.23** Read the given statements and conclusions carefully. Assuming that the information given in the statements is true, even if it appears to be at variance with commonly known facts, decide which of the given conclusions logically follow(s) from the statements.

**Statements:**

No bank is an office.

All offices are stalls.

**Conclusions:**

I. No bank is a stall.

II. No stall is a bank.

III. Some stalls are offices.

IV. All the stalls are offices.

- Ans**  1. Both conclusions I and II follow
2. Only conclusion I follows
3. Both conclusions I and IV follow
4. Only conclusion III follows

Question ID : 81616112717

Status : **Not Answered**

Chosen Option : --

**Q.24** Select the option in which the numbers are related in the same way as are the numbers of the following set.

(6, 9, 45)

- Ans**  1. (7, 4, 48)
2. (2, 8, 46)
3. (8, 10, 36)
4. (6, 8, 60)

Question ID : 81616113732

Status : **Answered**

Chosen Option : 3

**Q.25** Four number-pairs have been given, out of which three are alike in some manner and one is different. Select the number-pair that is different.

- Ans**  1. 21 : 139
2. 25 : 167
3. 15 : 197
4. 27 : 181

Question ID : 81616113730

Status : **Not Answered**

Chosen Option : --

Q.1 Who among the following is credited with postulating three laws of planetary

motion? Ans  1. Galileo Galilei

2. Isaac Newton

3. Tycho Brahe

4. Johannes Kepler

Question ID : 81616113748

Status : Answered

Chosen Option : 1

Q.2 Who among the following was the first Indian to unfurl the tricolour on foreign

land? Ans  1. Begum Hazrat Mahal

2. Bhikaji Cama

3. Annie Besant

4. Lakshmi Sehgal

Question ID : 81616112747

Status : Answered

Chosen Option : 4

Q.3 Which of the following states' former Governor, Mata Prasad, died in January

2021? Ans  1. Arunachal Pradesh

2. Goa

3. Uttar Pradesh

4. Uttarakhand

Question ID : 81616113253

Status : Answered

Chosen Option : 1

Q.4 \_\_\_\_\_ is created by the collision of convergent plate boundaries.

Ans  1. Mid-ocean ridge

2. Mountain building

3. Land erosion

4. Oceanic trench

Question ID : 81616113248

Status : Answered

Chosen Option : 4

**Q.5** According to the Puranas, Lord Vishnu took the shape of— In order to rescue the earth, which had sunk into water.

- Ans**  1. a boar
2. a lion
3. a tiger
4. an elephant

Question ID : **81616114261**

Status : **Answered**

Chosen Option : **1**

**Q.6** Which of the following is a water-soluble

- vitamin? Ans**  1. Vitamin K
2. Vitamin C
3. Vitamin A
4. Vitamin D

Question ID : **81616112739**

Status : **Answered**

Chosen Option : **1**

**Q.7** Who among the following was the Nizam of Hyderabad in

- 1947? Ans**  1. Mir Mahbub Ali Khan
2. Akbar Ali Khan
3. Osman Ali
4. Nasir Jung

Question ID : **81616112744**

Status : **Not Answered**

Chosen Option : **--**

**Q.8** Which of the following diseases is caused by a

- parasite? Ans**  1. Malaria
2. Goitre
3. Pneumonia
4. Plague

Question ID : **81616113242**

Status : **Answered**

Chosen Option : **1**

Q.9 With which of the following sports is the term 'Chinaman'

associated? Ans  1. Polo

2. Table tennis

3. Cricket

4. Swimming

Question ID : 81616113257

Status : Answered

Chosen Option : 2

Q.10 Which of the following Articles of the Constitution of India provides for the creation of a GST Council?

Ans  1. Article 246A

2. Article 279A

3. Article 269A

4. Article 323A

Question ID : 81616113760

Status : Answered

Chosen Option : 1

Q.11 Which of the following is the meaning of 'Pishtaq' in the context of medieval Indo-Islamic architecture?

Ans  1. True arch

2. Dome

3. Water tank

4. Tall gateway

Question ID : 81616113743

Status : Not Answered

Chosen Option : --

Q.12 What is the objective of the 'Doughnut Model' of development?

Ans  1. It envisions a world in which people and planet can thrive in balance.

2. It envisions total abandonment of technology to live at peace with environment.

3. It envisions the food processing industry as the centre of development.

4. It envisions rapid development at environmental cost, then make up for it later.

Question ID : 81616113745

Status : Not Answered

Chosen Option : --

Q.13 Which of the following is NOT a feature of food

security? Ans  1. Affordability

2. Acceptability

3. Availability

4. Accessibility

Question ID : 81616114249

Status : Answered

Chosen Option : 2

Q.14 Who among the following never became the Vice President of

India? Ans  1. Gulzarilal Nanda

2. VV Giri

3. Zakir Husain

4. BD Jatti

Question ID : 81616114266

Status : Answered

Chosen Option : 4

Q.15 Halogens have \_\_\_\_\_ electrons in their outermost shells.

Ans  1. five

2. six

3. eight

4. seven

Question ID : 81616114255

Status : Answered

Chosen Option : 4

Q.16 Who among the following is the author of the book 'Democrats and

Dissenters'? Ans  1. Arun Shourie

2. Ramchandra Guha

3. Nalini Singh

4. Gurucharan Das

Question ID : 81616114264

Status : Answered

Chosen Option : 2

Q.17 Which of the following locations has the highest

altitude? Ans  1. Kolkata

2. Moradabad

3. Patna

4. Ranikhet

Question ID : 81616114257

Status : Answered

Chosen Option : 4

Q.18 'Bolak-aat' is a— from the state of Karnataka.

Ans  1. painting form

2. music form

3. sculpting form

4. dance form

Question ID : 81616112732

Status : Not Answered

Chosen Option : --

Q.19 Which of the following is a work on statecraft written by

Krishnadevaraya? Ans  1. Amuktamalyada

2. Tolkappiyam

3. Karpuramanjari

4. Kadambari

Question ID : 81616113755

Status : Answered

Chosen Option : 1

Q.20 When is National Girl Child Day observed annually in

India? Ans  1. 5 June

2. 12 May

3. 24 January

4. 9 September

Question ID : 81616113259

Status : Answered

Chosen Option : 3

Q.21 Tapovan Vishnugad Hydroelectric Project is located in:

- Ans  1. Himachal Pradesh  
 2. Ladakh  
 3. Uttarakhand  
 4. Jammu and Kashmir

Question ID : 81616113751

Status : **Answered**

Chosen Option : 3

Q.22 How many trains were flagged off by Prime Minister Narendra Modi in January 2021 connecting the location of the Statue of Unity to different parts of India?

- Ans  1. Eight  
 2. Six  
 3. Seven  
 4. Five

Question ID : 81616114270

Status : **Not Answered**

Chosen Option : --

Q.23 Which part of the body is associated with the rickets

- disorder? Ans  1. Heart  
 2. Skin  
 3. Bones  
 4. Eyes

Question ID : 81616112736

Status : **Answered**

Chosen Option : 3

Q.24 India and \_\_\_\_\_ were declared joint winners of the 2020 Online FIDE Chess Olympiad.

- Ans  1. Serbia  
 2. The US  
 3. Estonia  
 4. Russia

Question ID : 81616112753

Status : **Answered**

Chosen Option : 3



**Q.25** Who among the following was appointed as the Chairman and Managing Director of Telecommunications Consultants India Limited in January 2021?

- Ans  1. Rajeev Kumar  
 2. Sarabjit Singh Sandhu  
 3. Sanjeev Kumar  
 4. Jitendra Singh

Question ID : 81616113261

Status : **Not Answered**

Chosen Option : --

Section : **Quantitative Aptitude**

**Q.1** Ratio of the present age of a mother to that of the daughter is 7 : 1. After 5 years the ratio will become 4 : 1. What is the difference (in years) in their present ages?

- Ans  1. 30  
 2. 31  
 3. 28  
 4. 29

If  $3 \cos^2 \theta - 4 \sin \theta + 1 = 0, 0^\circ < \theta < 90^\circ$ , then  $\tan \theta + \sec \theta = ?$

Question ID : 81616112763

Status : **Answered**

Chosen Option : 1

**Q.2**

- Ans  1.  $2\sqrt{5}$   
 2.  $3\sqrt{3}$   
 3.  $2\sqrt{3}$   
 4.  $\sqrt{5}$

Question ID : 81616113785

Status : **Answered**

Chosen Option : 3

**Q.3** What is the area (in  $cm^2$ ) of a circle inscribed in a square of area  $784 cm^2$ ? (Take  $\pi = \frac{22}{7}$ )

- Ans  1. 616  
 2. 462  
 3. 660  
 4. 924

Question ID : 81616114282

Status : **Answered**

Chosen Option : 1

**Q.4** In  $\triangle ABC$ ,  $\angle A = 90^\circ$ ,  $AD \perp BC$  at D. If  $AB = 12$  cm and  $AC = 16$  cm, then what is the length (in cm) of  $BD$ ?

- Ans**
- 1. 6.4
  - ✓ 2. 7.2
  - 3. 7.8
  - 4. 8.4

Question ID : **81616114289**

Status : **Answered**

Chosen Option : **4**

A train runs first 75 km at a certain uniform speed and next 90 km at an average speed of 10 km/h more than the normal speed. If it takes 3 hours to complete the journey, then how much time will the train take to cover 300 km with normal speed?

- Q.5**
- Ans**
- 1. 5 hours
  - 2. 5 hours 15 minutes
  - ✓ 3. 6 hours
  - 4. 5 hours 25 minutes

Question ID : **81616112766**

Status : **Not Answered**

Chosen Option : **--**

A can do a certain work in 15 days. B is 25% more efficient than A. Both worked together for 4 days. C alone completed the remaining work in 8 days. A, B and C together will complete the same work in ?

- Q.6**
- Ans**
- 1. 5 days
  - 2.  $4\frac{1}{2}$  days
  - 3.  $6\frac{1}{2}$  days
  - 4. 4 days

Question ID : **81616113775**

Status : **Answered**

Chosen Option : **1**

If  $a^3 + b^3 = 405$  and  $a + b = 9$ , then the value of  $ab$  is

- Q.7**
- Ans**
- 1. 10
  - 2. 15
  - ✓ 3. 12
  - 4. 8

Question ID : **81616113273**

Status : **Answered**

Chosen Option : **3**

**Q.8** In a circle with center  $O$  and radius  $5\text{ cm}$ ,  $AB$  and  $CD$  are two parallel chords of lengths  $6\text{ cm}$  and  $x\text{ cm}$ , respectively and the chords are on the opposite side of the centre  $O$ . The distance between the chords is  $7\text{ cm}$ . What is the value of  $x$ ?

- Ans**
1. 9
  - ✓ 2. 8
  3. 12
  4. 10

Question ID : 81616113782

Status : Answered

Chosen Option : 2

Study the following table and answer the question:

**Q.9**

Year \ Institute	2013	2014	2015	2016	2017	2018
A	120	135	130	135	128	140
B	125	132	138	132	135	142
C	125	120	125	138	140	135
D	100	125	122	140	128	138
E	105	110	115	147	130	145

The ratio of the total number of students enrolled for VC in institutes A, C and E in 2016 to the total number of students enrolled in institutes B and D in 2018, is

- Ans**
1. 8 : 7
  - ✓ 2. 3 : 2
  3. 21 : 19

If  $\left(2x - \frac{9}{x}\right) = 2$ , then what is the value of  $\left(16x^4 + \frac{81}{x^4}\right)$ ?

Question ID : 81616114091

Status : Answered

Chosen Option : 2

**Q.10**

- Ans**
1. 220
  2. 180
  - ✓ 3. 184
  4. 328

Question ID : 81616112769

Status : Answered

Chosen Option : 4

**Q.11** In a circle with center O, AB is a diameter and CD is a chord such that  $\angle ABC = 34^\circ$  and  $CD = BD$ . What is the measure of  $\angle DBC$ ?

- Ans**
- 1.  $32^\circ$
  - 2.  $30^\circ$
  - 3.  $24^\circ$
  - ✓ 4.  $28^\circ$

Question ID : **81616114286**

Status : **Answered**

Table shows the number of trees planted in 4 cities from 2016 to 2020.

Chosen Option : **4**

**Q.12**

Years	Chandigarh	Ahmedabad	Pune	Kolkata
2016	1800	2500	1800	2000
2017	2500	2300	1850	1800
2018	2300	2400	1840	1760
2019	2440	1950	1900	1600
2020	2250	2100	2000	1750

From 2016 to 2020, how many more trees were planted in Ahmedabad as compared to trees planted in Pune?

- Ans**
- 1. 2000
  - ✓ 2. 1860
  - 3. 2340
  - 4. 1850

Question ID : **81616112476**

Status : **Not Answered**

Chosen Option : **--**

**Q.13** The average of 22 numbers is 37.5. The average of first 12 numbers is 40.6 and that of the last 12 numbers is 35.4. If 11th and 12th numbers are excluded, then what is the average of the remaining numbers?

- Ans**
- 1. 37.8
  - 2. 37.4
  - 3. 36.4
  - ✓ 4. 36.9

Question ID : **81616114274**

Status : **Not Answered**

Chosen Option : **--**

Q.14 If  $\frac{\operatorname{cosec}\theta + \cot\theta}{\operatorname{cosec}\theta - \cot\theta} = 7$ , then the value of  $\frac{4\sin^2\theta - 1}{4\sin^2\theta + 5}$  is:

- Ans
- 1.  $-\frac{1}{3}$
  - 2.  $\frac{1}{9}$
  - 3.  $-\frac{1}{9}$
  - 4.  $\frac{1}{3}$

Question ID : 81616113281

Status : Not Answered

Chosen Option : --

Q.15  $x + y + z = 2$  and  $xy + yz + zx = -11$ , then the value of  $x^3 + y^3 + z^3 - 3xyz$  is:

- Ans
- 1. 71
  - 2. 74
  - 3. 69
  - 4. 78

Question ID : 81616113780

Status : Not Answered

Chosen Option : --

$1 + 2\tan^2\theta + 2\sin\theta\sec^2\theta, 0^\circ < \theta < 90^\circ$ , is equal to :

- 1.  $\frac{1 - \sin\theta}{1 + \sin\theta}$
- 2.  $\frac{1 + \cos\theta}{1 - \cos\theta}$
- 3.  $\frac{1 + \sin\theta}{1 - \sin\theta}$
- 4.  $\frac{1 - \cos\theta}{1 + \cos\theta}$

Question ID : 81616113787

Status : Not Answered

Chosen Option : --

**Q.17** The income of A is 30% less than the income of B and the income of B is 137.5% more than that of C. If the income of A is ₹28500 less than that of B, then the income (in ₹) of C is :

- Ans** ✓ 1. 40000  
2. 50000  
3. 36000  
4. 48000

Question ID : **81616113771**

Status : **Not Answered**

The selling price of an article marked for ₹10000 after giving three discounts, 20%, 10% and k% is ₹6120. What will be selling price (in ₹) of the same article if a single discount of  $(k + 20)\%$  is allowed?

Chosen Option : --

**Q.18**

- Ans** ✓ 1. 6500  
2. 8000  
3. 8500  
4. 6800

Question ID : **81616112760**

Status : **Not Answered**

Chosen Option : --

**Q.19**

Study the following table and answer the question:

Number of students enrolled for Vocational Courses (VC) in five institutes - A, B, C, D & E.

Year \ Institute	2013	2014	2015	2016	2017	2018
A	120	135	130	135	128	140
B	125	132	138	132	135	142
C	125	120	125	138	140	135
D	100	125	122	140	128	138
E	105	110	115	147	130	145

The total number of students enrolled for VC in institute C in 2013, 2014 and 2017 is what percent of the total number of students enrolled in all the five institutes in 2018?

- Ans** 1. 53  
2. 62  
3. 58  
✓ 4. 55

Question ID : **81616114093**

Status : **Not Answered**

Chosen Option : --

**Q.20** If the 6-digit number  $5x423y$  is divisible by 88, then what is the value of  $(5x - 8y)$ ?

- Ans**
- 1. 28
  - 2. 14
  - 3. 16
  - ✓ 4. 24

Question ID : **81616113767**

Status : **Not Answered**

Chosen Option : --

**Q.21** Angle between the internal bisectors of two angles  $\angle B$  and  $\angle C$  of a  $\triangle ABC$  is  $132^\circ$ , then the value of  $\angle A$  is:

- Ans**
- 1.  $72^\circ$
  - 2.  $48^\circ$
  - 3.  $62^\circ$
  - ✓ 4.  $84^\circ$

Question ID : **81616113278**

Status : **Not Answered**

Chosen Option : --

Table shows income (in ₹) received by 4 employees of a company during the month of December 2020 and all their income sources

**Q.22**

Source	Amit	Suresh	Nitin	Varun
Salary	35000	38500	29000	42000
Arrears	6000	6300	5000	7500
Bonus	1000	1100	1000	1240
Overtime	1800	1950	1400	1500

By what percent are the Arrears of Amit and Suresh taken together less than the Arrears of Nitin and Varun taken together?

- Ans**
- ✓ 1. 1.6
  - 2. 1.2
  - 3. 1.4
  - 4. 1.5

Question ID : **81616112478**

Status : **Not Answered**

Chosen Option : --

**Q.23** A sum of ₹7500 amounts to ₹9075 at 10% p.a, interest being compounded yearly in a certain time. The simple interest (in ₹) on the same sum for the same time and the same rate is :

- Ans**
- ✓ 1. 1500
  - 2. 1530
  - 3. 1480
  - 4. 1520

Question ID : **81616113774**

Status : **Not Answered**

Chosen Option : --

The value of  $\frac{52-1170 \div 26+13 \times 2}{2+1-\frac{1}{8} \text{ of } 2-1-\frac{1}{4}}$  is:

**Q.24**

- Ans**
- 1. 12
  - ✓ 2. 11
  - 3. 27
  - 4. 41

Question ID : **81616113263**

Status : **Not Answered**

Chosen Option : --

On selling an article for ₹246.80, the gain is 20% more than the amount of loss incurred on selling it for ₹216. If the article is sold for ₹220.75, then what is the gain/loss percent (correct to nearest integer)?

**Q.25**

- Ans**
- 1. Profit 7%
  - ✓ 2. Loss 4%
  - 3. Loss 5%
  - 4. Profit 3%

Question ID : **81616113267**

Status : **Not Answered**

Chosen Option : --

Section : **English Comprehension**

**Q.1** Select the most appropriate option to fill in the blank.

A \_\_\_\_\_ souvenir will be released on the occasion of the World Meet.

- Ans**
- ✗ 1. considerable
  - ✓ 2. voluminous
  - ✗ 3. generous
  - ✗ 4. bountiful

Question ID : **81616114322**

Status : **Answered**

Chosen Option : 1



Q.2 Select the option that can be used as a one-word substitute for the given group of words.

A large building with an extensive floor area, typically for housing

aircraft Ans  1. Shed

2. Airport

3. Hangar

4. Barn

Question ID : 81616113812

Status : Answered

Chosen Option : 3

Q.3 The following sentence has been divided into parts. One of them contains an error.

Select the part that contains the error from the given options.

The Principal requested / the teacher's / to monitor / and take care of the small children.

Ans  1. the teacher's

2. to monitor

3. The Principal requested

4. and take care of the small children

Question ID : 81616112782

Status : Answered

Chosen Option : 1

Q.4 Sentences of a paragraph are given below in jumbled order. Arrange the sentences in the right order to form a meaningful and coherent paragraph.

A. This invention has helped us to heal wounds caused by bacteria.

B. Penicillin is one of the most useful drugs man has invented.

C. In the beginning however, very few people knew of this discovery and its use.

D. Its use has saved the lives of hundreds of thousands of soldiers.

Ans  1. ABCD

2. DCBA

3. CABD

4. BADC

Question ID : 81616113299

Status : Answered

Chosen Option : 4

**Q.5 Select the most appropriate option to fill in the blank.**

You need not \_\_\_\_\_ so much fuss about wearing a mask when you go out.

- Ans
- 1. cause
  - 2. generate
  - 3. do
  - 4. make

Question ID : **81616113816**

Status : **Answered**

Chosen Option : **4**

**Q.6 Select the INCORRECTLY spelt word.**

- Ans
- 1. Cerebral
  - 2. Arbitrary
  - 3. Scrutinize
  - 4. Withdrawl

Question ID : **81616113310**

Status : **Answered**

Chosen Option : **1**

**Q.7 Select the INCORRECTLY spelt word.**

- Ans
- 1. Moisture
  - 2. Vishious
  - 3. Mimic
  - 4. Anxious

Question ID : **81616113309**

Status : **Answered**

Chosen Option : **2**

**Q.8 Select the most appropriate ANTONYM of the given word.**

**Invade**

- Ans
- 1. Surrender
  - 2. Attack
  - 3. Seize
  - 4. Assault

Question ID : **81616113303**

Status : **Answered**

Chosen Option : **1**

**Q.9** Select the most appropriate option to substitute the underlined segment in the given sentence. If no substitution is required, select 'No substitution'.

The place is too much noisy.

- Ans**
- 1. No substitution
  - 2. much too much noisy
  - 3. much noisy
  - 4. too noisy

Question ID : **81616113796**

Status : **Answered**

Chosen Option : **4**

**Q.10** Select the most appropriate synonym of the given word.

**Transmit**

- Ans**
- 1. Accept
  - 2. Catch
  - 3. Convey
  - 4. Receive

Question ID : **81616114312**

Status : **Answered**

Chosen Option : **4**

**Q.11** Select the most appropriate ANTONYM of the given word.

**Toxic**

- Ans**
- 1. Healthy
  - 2. Lethal
  - 3. Harmful
  - 4. Venomous

Question ID : **81616112799**

Status : **Answered**

Chosen Option : **1**

Q.12 Select the option that can be used as a one-word substitute for the given group of words.

A person who listens to someone's private conversation without them

knowing Ans  1. Infiltrator

2. Spy

3. Eavesdropper

4. Secret agent

Question ID : 81616113813

Status : Answered

Chosen Option : 3

Q.13 Select the most appropriate meaning of the given idiom.

Full of beans

Ans  1. Full of cowardice

2. Full of energy

3. A dish made of French beans

4. A storeroom full of vegetables

Question ID : 81616112801

Status : Answered

Chosen Option : 2

Q.14 Select the most appropriate synonym of the given word.

Numerous

Ans  1. Several

2. Totalled

3. Numbered

4. Few

Question ID : 81616114311

Status : Answered

Chosen Option : 1

Q.15 Select the most appropriate meaning of the given idiom.

To cut a long story short

Ans  1. Like to tell long stories

2. Tell something briefly

3. Like to tell short stories

4. Tell something in a roundabout way

Question ID : 81616112800

Status : **Answered**

Chosen Option : **2**

**Q.16** Select the option that expresses the given sentence in reported speech.

**"Whom did you see at the shopping mall today?" I asked my daughter.**

- Ans**  1. I asked my daughter that whom did she saw at the shopping mall that day.
2. I asked my daughter who she has seen at the shopping mall today.
3. I asked my daughter that whom she saw at the shopping mall on that day.
4. I asked my daughter whom she had seen at the shopping mall that day.

Question ID : **81616114300**

Status : **Answered**

Chosen Option : **4**

**Q.17** Select the option that will improve the underlined part of the sentence. In case no improvement is needed, select 'No improvement required'.

I wish I have come an hour sooner.

- Ans**  1. has
2. No improvement required
3. had
4. will

Question ID : **81616114302**

Status : **Answered**

Chosen Option : **3**

**Q.18** Sentences of a paragraph are given below in jumbled order. Arrange the sentences in the right order to form a meaningful and coherent paragraph.

- A. Then I took him by the hand and led him across the street.
- B. I was going to the market when I saw a blind man trying to cross the street.
- C. He expressed his gratitude with folded hands.
- D. I walked across to the blind man.

Ans  1. ABCD

2. BDAC

3. CBDA

4. DABC

Question ID : **81616112795**

Status : **Answered**

Chosen Option : **2**

**Q.19** Select the option that expresses the given sentence in passive voice.

Someone stole his traveller's cheques when he was travelling in

Europe. Ans  1. His traveller's cheques was stole when he was travelling in Europe.

2. Someone had been stole his traveller's cheques when he was travelling in Europe.

3. His traveller's cheques were stolen when he was travelling in Europe.

4. His traveller's cheques are stole when he was travelling in Europe.

Question ID : **81616113794**

Status : **Answered**

Chosen Option : **3**

**Q.20** The following sentence has been divided into parts. One of them contains an error. Select the part that contains the error from the given options.

It have been only / through writing / that men have been able / to spread their ideas to mankind.

Ans  1. to spread their ideas to mankind

2. that men have been able

3. It have been only

4. through writing

Question ID : **81616113793**

Status : **Answered**

Chosen Option : **3**

**Comprehension:**

In the following passage, some words have been deleted. Fill in the blanks with the help of the alternatives given. Select the most appropriate option for each blank.

It is true that the more you study, the more you (1)\_\_\_your horizon and hence your point of view undergoes a (2)\_\_. A person with higher education certainly has a better (3)\_\_\_ and ideas to help in community and societal (4)\_\_. Ideas that are gathered from such people provide a global (5)\_\_\_\_\_for the nation as a whole.

**SubQuestion No : 21**

**Q.21 Select the most appropriate option to fill in blank number**

1. Ans  1. expand  
 2. exchange  
 3. narrow  
 4. convert

Question ID : 81616113294

Status : Answered

Chosen Option : 1

**Comprehension:**

In the following passage, some words have been deleted. Fill in the blanks with the help of the alternatives given. Select the most appropriate option for each blank.

It is true that the more you study, the more you (1)\_\_\_your horizon and hence your point of view undergoes a (2)\_\_. A person with higher education certainly has a better (3)\_\_\_ and ideas to help in community and societal (4)\_\_. Ideas that are gathered from such people provide a global (5)\_\_\_\_\_for the nation as a whole.

**SubQuestion No : 22**

**Q.22 Select the most appropriate option to fill in blank number**

2. Ans  1. backwardness  
 2. enlargement  
 3. succession  
 4. transformation

Question ID : 81616113295

Status : Answered

Chosen Option : 2

**Comprehension:**

In the following passage, some words have been deleted. Fill in the blanks with the help of the alternatives given. Select the most appropriate option for each blank.

It is true that the more you study, the more you (1)\_\_\_your horizon and hence your point of view undergoes a (2)\_\_. A person with higher education certainly has a better (3)\_\_\_ and ideas to help in community and societal (4)\_\_. Ideas that are gathered from such people provide a global (5)\_\_\_\_\_for the nation as a whole.

**SubQuestion No : 23**

**Q.23 Select the most appropriate option to fill in blank number**

3. Ans  1. scope  
 2. luck  
 3. outlook  
 4. routine

Question ID : 81616113296

Status : Answered

Chosen Option : 3

**Comprehension:**

In the following passage, some words have been deleted. Fill in the blanks with the help of the alternatives given. Select the most appropriate option for each blank.

It is true that the more you study, the more you (1)\_\_\_your horizon and hence your point of view undergoes a (2)\_\_. A person with higher education certainly has a better (3)\_\_\_ and ideas to help in community and societal (4)\_\_. Ideas that are gathered from such people provide a global (5)\_\_\_\_\_for the nation as a whole.

**SubQuestion No : 24**

**Q.24 Select the most appropriate option to fill in blank number**

4. Ans  1. maturity  
 2. elaboration  
 3. development  
 4. ripening

Question ID : 81616113297

Status : Answered

Chosen Option : 3



**Comprehension:**

In the following passage, some words have been deleted. Fill in the blanks with the help of the alternatives given. Select the most appropriate option for each blank.

It is true that the more you study, the more you (1)\_\_\_your horizon and hence your point of view undergoes a (2)\_\_. A person with higher education certainly has a better (3)\_\_\_ and ideas to help in community and societal (4)\_\_. Ideas that are gathered from such people provide a global (5)\_\_\_\_\_for the nation as a whole.

**SubQuestion No : 25**

**Q.25 Select the most appropriate option to fill in blank number**

5. Ans  1. posture

2. proportion

3. perspective

4. prejudice

Question ID : **81616113298**

Status : **Answered**

Chosen Option : **3**