

SSC CPO Tier-I

Previous Year Paper
(11 December 2019 shift 2)
English

www.freshersnow.com

SI in CAPFs, ASI in CISF and SI in Delhi Police Examination-2019 (Paper-I)

Roll Number	
Candidate Name	
Exam Venue	
Exam Date	11/12/2019
Exam Time	2:00 PM - 4:00 PM
Subject	SI CPO Examination 2019

Section : General Intelligence and Reasoning

Q.1 If + means \times , \times means \div , and \div means $+$, then what will be the value of following expression?

$$12 - 3 + 15 \times 5 \div 6 = ?$$

- Ans ☒ 1. 39
☒ 2. 40
☒ 3. 33
☒ 4. 42

Question ID : 685582336
Status : Answered
Chosen Option : 1

Q.2 'Needle' is related to 'Sew' in the same way as 'Microscope' is related to '_____'.

- Ans ☒ 1. Magnify
☒ 2. Lens
☒ 3. Science
☒ 4. Laboratory

Question ID : 685582311
Status : Answered
Chosen Option : 1

Q.3 Select the option that is related to the fifth number in the same way as the second number is related to the first number and the fourth number is related to the third number.

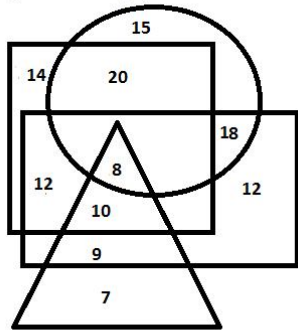
$$19 : 23 :: 11 : 13 :: 7 : ?$$

- Ans ☒ 1. 11
☒ 2. 5
☒ 3. 3
☒ 4. 9

Question ID : 685582327
Status : Answered
Chosen Option : 1

Q.4

In the given Venn diagram, the triangle represents politicians, the circle represents lawyers, the rectangle represents teachers and the square represents businessmen. The numbers given in the diagram represent the number of persons of that particular category.



How many lawyers are also teachers, but are neither politicians nor businessmen?

- Ans ☒ 1. 18
☒ 2. 7
☒ 3. 12
☒ 4. 10

Question ID : 685582352
 Status : Answered
 Chosen Option : 1

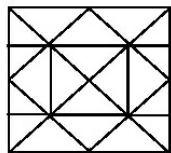
Q.5 Which of the given options would be a meaningful ascending order of the following words?

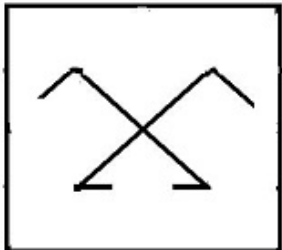
- 1.Star
- 2.Satellite
- 3.Galaxy
- 4.Planet
- 5.Universe

- Ans ☒ 1. 2, 1, 5, 3, 4
☒ 2. 3, 1, 5, 2, 4
☒ 3. 5, 3, 1, 4, 2
☒ 4. 5, 1, 3, 2, 4

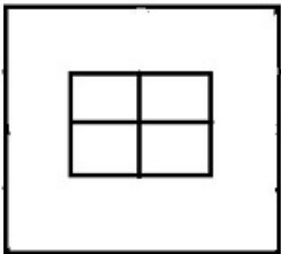
Question ID : 685582306
 Status : Answered
 Chosen Option : 3

Q.6 From the given options, select the figure which is embedded in the following figure (rotation is NOT allowed).

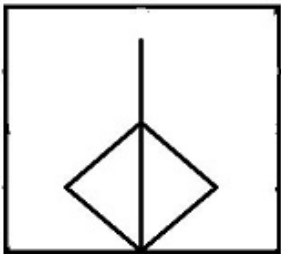


- Ans ☒ 1. 

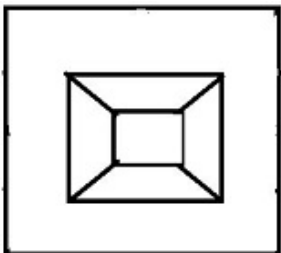
✗ 2.



✗ 3.



✗ 4.



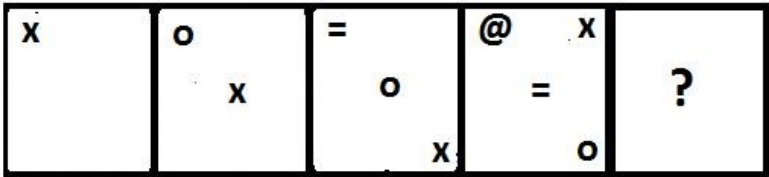
Question ID : 685582343
Status : Answered
Chosen Option : 1

Q.7 Four pairs of letter-cluster have been given out of which three are alike in some manner, while one is different. Choose the odd one.

- Ans
- ✗ 1. DFL - USM
 - ✗ 2. GJB - ROW
 - ✓ 3. EFR - VUI
 - ✗ 4. IKN - PNK

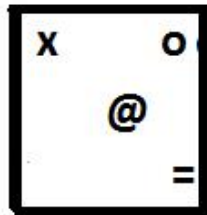
Question ID : 685582308
Status : Answered
Chosen Option : 2

Q.8 Select the figure that can replace the question mark (?) in the following series.

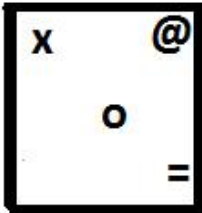


Ans

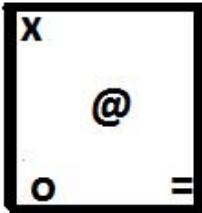
✓ 1.




2.



3.



4.



Question ID : 685582340
Status : Answered
Chosen Option : 1

Q.9 In a certain code language, pink is called wood, wood is called Pen, Pen is called colour and colour is called brown. In this language, which of the following is used for writing?

- Ans
- ☒ 1. Pink
 - ☒ 2. Brown
 - ☒ 3. Colour
 - ☒ 4. Pen

Question ID : 685582317
Status : Answered
Chosen Option : 3

Q.10 Select the letter-cluster that can replace the question mark (?) in the following series.

TXB, QWE, NVH, KUK, ?

- Ans
- ☒ 1. HSN
 - ☒ 2. JTM
 - ☒ 3. HTN
 - ☒ 4. ITM

Question ID : 685582304
Status : Answered
Chosen Option : 3

Q.11 Mayank started driving from his office to the hotel. He drove 10 km towards north. From there, he turned right and drove 8 km. Then, he turned right and drove 6 km. Again, he turned right and drove 5 km and reached his hotel. What is the shortest distance from the office to his hotel?

- Ans
- ☒ 1. 9 km

☒ 2. 6 km

☒ 3. 2 km

☒ 4. 5 km

Question ID : 685582348

Status : Answered

Chosen Option : 4

Q.12 Select the option in which the words share the same relationship as that shared by the given pair of words.

Touch : Push

Ans ☒ 1. Run : Walk

☒ 2. Eat : Drink

☒ 3. Refuse : Accept

☒ 4. Speak : Shout

Question ID : 685582313

Status : Answered

Chosen Option : 4

Q.13 Select the option in which the numbers share the same relationship as that shared by the given pair of numbers

56 - 63

Ans ☒ 1. 104 - 117

☒ 2. 154 - 171

☒ 3. 134 - 153

☒ 4. 28 - 39

Question ID : 685582328

Status : Answered

Chosen Option : 1

Q.14 Which two signs need to be interchanged to make the following equation correct?

$32 - 8 \div 4 + 5 \times 6 = 30$

Ans ☒ 1. \times and $+$

☒ 2. \div and $+$

☒ 3. \times and \div

☒ 4. \div and $-$

Question ID : 685582337

Status : Answered

Chosen Option : 4

Q.15 Select the option in which the words share the same relationship as that shared by the given pair of words.

Players : Team

Ans ☒ 1. Band : Musician

☒ 2. Flowers : Bouquet

- ☒ 3. Grapes : Dozen
- ☒ 4. Class : Students

Question ID : 685582314
 Status : Answered
 Chosen Option : 2

Q.16 Four numbers have been given out of which three are alike in some manner, while one is different. Choose the odd one.

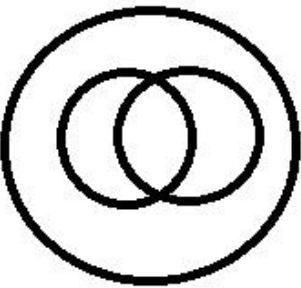
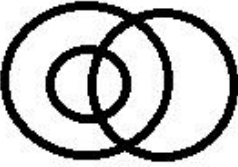
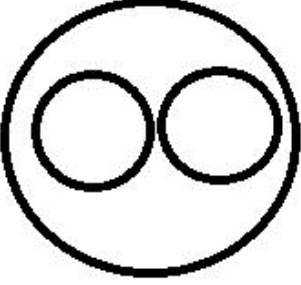
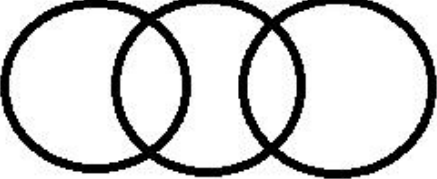
- Ans
- ☒ 1. 18
 - ☒ 2. 33
 - ☒ 3. 25
 - ☒ 4. 24

Question ID : 685582329
 Status : Answered
 Chosen Option : 3

Q.17 Select the Venn diagram that best represents the relationship between the following classes.

Males, Fathers, Accountants

Ans

- ☒ 1. 
- ☒ 2. 
- ☒ 3. 
- ☒ 4. 

Question ID : 685582351
 Status : Answered
 Chosen Option : 2

Q.20

3. Patent
4. Perjury
5. Pasture

Ans ☒ 1. 5, 3, 4, 1, 2
☒ 2. 3, 5, 4, 1, 2
☒ 3. 3, 4, 5, 1, 2
☒ 4. 5, 3, 4, 2, 1

Question ID : 685582305
Status : Answered
Chosen Option : 4

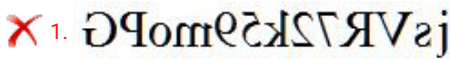
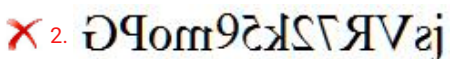
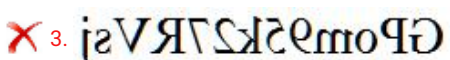
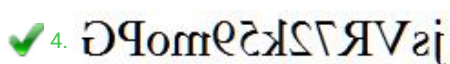
Q.23 Four letter-cluster have been given out of which three are alike in some manner, while one is different. Choose the odd one.

Ans ☒ 1. NOQST
☒ 2. EGIKM
☒ 3. BDFHJ
☒ 4. QSUWY

Question ID : 685582307
Status : Answered
Chosen Option : 1

Q.24 Which of the options is the exact mirror image of the given figure when the mirror is held at the right side?

jsVR72k59moPG

Ans ☒ 1. 
☒ 2. 
☒ 3. 
☒ 4. 

Question ID : 685582345
Status : Answered
Chosen Option : 4

Q.25 Select the option that is related to the third term in the same way as the second term is related to the first term.

NEEDLE : MFDEKF :: BUCKET : ?

Ans ☒ 1. CVDLFS
☒ 2. AVBLDU
☒ 3. AVBLDS
☒ 4. CVBLDU

Question ID : 685582315
Status : Answered
Chosen Option : 2

Q.26 Four words have been given out of which three are alike in some manner, while one is

different. Choose the odd one.

- Ans ☒ 1. Rose
☒ 2. Apple
☒ 3. Melon
☒ 4. Orange

Question ID : 685582310
Status : Answered
Chosen Option : 1

Q.27 Four words have been given out of which three are alike in some manner, while one is different. Choose the odd one.

- Ans ☒ 1. Dictionary
☒ 2. Book
☒ 3. Encyclopaedia
☒ 4. Thesaurus

Question ID : 685582309
Status : Answered
Chosen Option : 2

Q.28 Four groups of numbers have been given, out of which three are alike in some manner and one is different. Select the group that is different.

- Ans ☒ 1. 12 : 72 : 144
☒ 2. 14 : 90 : 180
☒ 3. 17 : 102 : 204
☒ 4. 26 : 156 : 312

Question ID : 685582332
Status : Answered
Chosen Option : 2

Q.29 Select the number that can replace the question mark (?) in the following series.

105, 107, 103, ?, 101, 111

- Ans ☒ 1. 113
☒ 2. 102
☒ 3. 97
☒ 4. 109

Question ID : 685582323
Status : Answered
Chosen Option : 4

Q.30 Select the option that is related to the third number in the same way as the second number is related to the first number.

428 : 717 :: 236 : ?


- Ans ☒ 1. 339
☒ 2. 349
☒ 3. 249

 4. 713

Question ID : 685582326
Status : Not Answered
Chosen Option : --

Q.31 Select the number that can replace the question mark (?) in the following series.


1, 11, 35, 79, ?, 251

- Ans
-  1. 105
 -  2. 152
 -  3. 150
 -  4. 149

Question ID : 685582325
Status : Answered
Chosen Option : 4

Q.32 Select the option in which the number set shares the same relationship as that shared by the given number set.

(101, 106, 131)

- Ans
-  1. (170, 202, 137)
 -  2. (29, 34, 39)
 -  3. (123, 128, 153)
 -  4. (419, 424, 437)

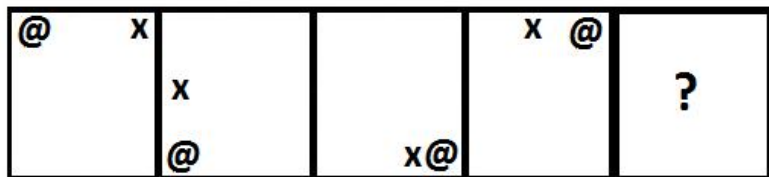
Question ID : 685582333
Status : Answered
Chosen Option : 3

Q.33 If in a certain code, HORSE is written as GINPQSRTDF, How will JOCKEY be written in that language?

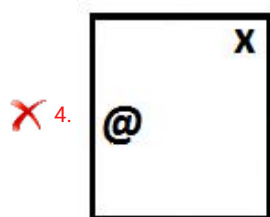
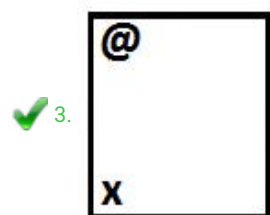
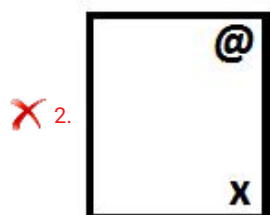
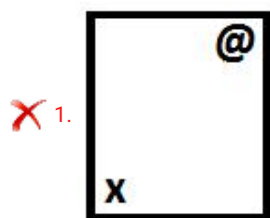
- Ans
-  1. KINPBDJLDFZX
 -  2. IKNPDBJLFDZX
 -  3. KIPNBDJLDFXZ
 -  4. IKNPBDJLDFXZ

Question ID : 685582318
Status : Answered
Chosen Option : 4

Q.34 Select the figure that can replace the question mark (?) in the following series.

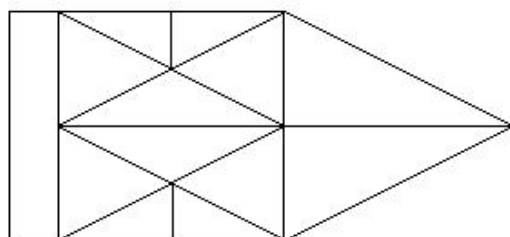


Ans



Question ID : 685582338
Status : Answered
Chosen Option : 3

Q.35 How many triangles are present in the given figure?



Ans

✗ 1. 26

✗ 2. 28

✓ 3. 27

✗ 4. 17

Question ID : 685582341
Status : Answered
Chosen Option : 1

Q.36 Rishabh starts walking towards west. After walking 70 m he turns to left and walks 35 m straight. He turns left again and walks 30 m, again he turns to the left and walks a distance of 35 m. How far is he from the starting point?

Ans

- ✓ 1. 40m
✗ 2. 100m
✗ 3. 70m
✗ 4. 60m

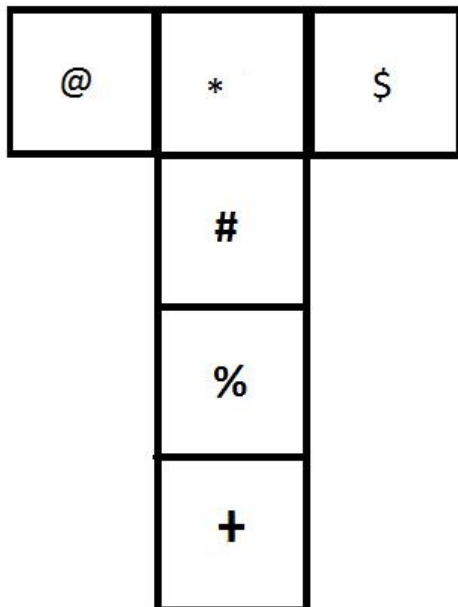
Question ID : 685582349
Status : Answered
Chosen Option : 1

Q.37 In a certain code language, GOURD is written as 21-4-5-10-24. How will BRINJAL be written in the same code language?

- Ans ✓ 1. 26-10-3-14-18-1-16
✗ 2. 25-9-3-14-18-1-15
✗ 3. 2-10-3-14-18-1-12
✗ 4. 26-10-5-14-18-2-16

Question ID : 685582320
Status : Answered
Chosen Option : 1

Q.38 If the given figure is folded to form a cube, which sign will come opposite '+'?



- Ans ✗ 1. %
✗ 2. @
✗ 3. \$
✓ 4. #

Question ID : 685582342
Status : Answered
Chosen Option : 4

Q.39 Read the given statement and conclusions carefully and decide which of the conclusions logically follow(s) from the statement.

Statement:
 "On October 2, let us pledge to make the country free of single-use plastic."- Prime Minister of India

Conclusions:
 I.All Indians should reduce and then completely eliminate the consumption of single-use plastic like packaged drinking water
 II.India is going to be completely plastic free on October 2

- Ans ☒ 1. Only conclusion I follows
☒ 2. Only conclusion II follows
☒ 3. Neither conclusion I nor II follows
☒ 4. Both conclusions I and II follow

Question ID : 685582321
 Status : Answered
 Chosen Option : 1

Q.40 Select the number that can replace the question mark (?) in the following series.

40, 44, 22, 26, 13, ?

- Ans ☒ 1. 22
☒ 2. 17
☒ 3. 20
☒ 4. 16

Question ID : 685582324
 Status : Answered
 Chosen Option : 2

Q.41 Four groups of numbers have been given, out of which three are alike in some manner and one is different. Select the group that is different.

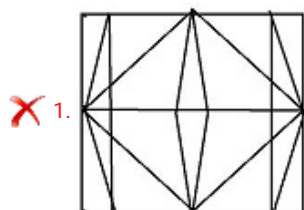
- Ans ☒ 1. 632 : 325 : 236
☒ 2. 561 : 615 : 165
☒ 3. 426 : 642 : 246
☒ 4. 289 : 829 : 928

Question ID : 685582331
 Status : Answered
 Chosen Option : 4

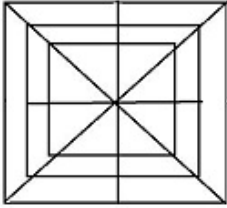
Q.42 From the given options, select the figure which is embedded in the following figure (rotation is NOT allowed).



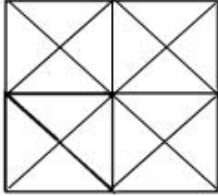
Ans



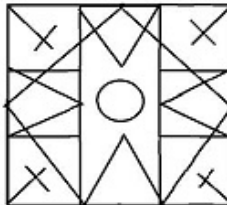
✗ 2.



✓ 3.



✗ 4.



Question ID : 685582344
Status : Answered
Chosen Option : 3

Q.43 Select the option that is related to the fourth term in the same way as the first term is related to the second term.

ULJ : POO :: ? : KRT

- Ans
- ✗ 1. FIY
 - ✗ 2. PIY
 - ✓ 3. PIO
 - ✗ 4. FMO

Question ID : 685582316
Status : Answered
Chosen Option : 1

Q.44 Study the given pattern carefully and select the number that can replace the question mark (?) in it.

4	18	23
19	330	?
3	6	1

- Ans
- ✗ 1. 350
 - ✗ 2. 529
 - ✗ 3. 550
 - ✓ 4. 530

Question ID : 685582334
Status : Answered
Chosen Option : 4

Q.45 If W = 46, BAT = 46, then 'LAMB' will be equal to:

- Ans
- ✗ 1. 54
 - ✗ 2. 52

✓ 3. 56

✗ 4. 28

Question ID : 685582319

Status : Answered

Chosen Option : 3

Q.46 Read the given statements and conclusions carefully. Assuming that the information given in the statements is true, even if it appears to be at variance with commonly known facts, decide which of the given conclusions logically follow(s) from the statements.

Statements:

1. Some dancers are singers.
2. No singer is an actor.

Conclusions:

- I. Some actors are singers.
- II. All singers are dancers.

- Ans**
- ✗ 1. Only conclusion II follows
 - ✓ 2. Neither conclusion I nor II follows
 - ✗ 3. Only conclusion I follows
 - ✗ 4. Either conclusion I or II follows

Question ID : 685582322

Status : Answered

Chosen Option : 2

Q.47 Select the option that is related to the third term in the same way as the second term is related to the first term.

Field : Farmer :: Observatory : ?

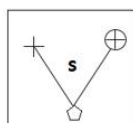
- Ans**
- ✓ 1. Astronomer
 - ✗ 2. Telescope
 - ✗ 3. Astronaut
 - ✗ 4. Stars

Question ID : 685582312

Status : Answered

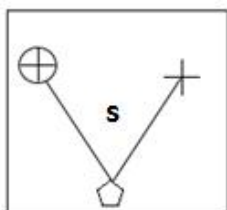
Chosen Option : 1

Q.48 Which of the options is the exact mirror image of the given figure when the mirror is held at the right side?

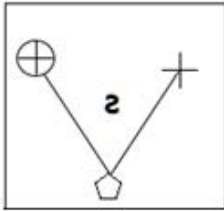


Ans

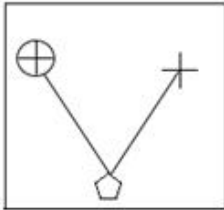
✗ 1.



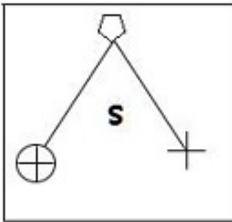
✓ 2.



✗ 3.



✗ 4.



Question ID : 685582346

Status : Answered

Chosen Option : 2

Q.49 Select the correct combination of mathematical signs to replace * signs and to balance the following equation.

$$(9 * 8 * 7) * 13 * 5$$

Ans ✗ 1. -, ÷, ×, =

✗ 2. ÷, -, =, ×

✓ 3. ×, -, ÷, =

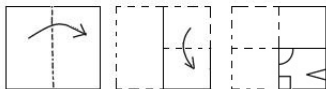
✗ 4. ×, =, ÷, -

Question ID : 685582335

Status : Answered

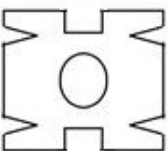
Chosen Option : 3

Q.50 The sequence of folding a piece of paper and the manner in which the folded paper has been cut is shown in the following figures. How would this paper look when unfolded?

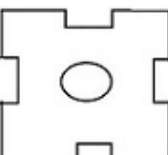


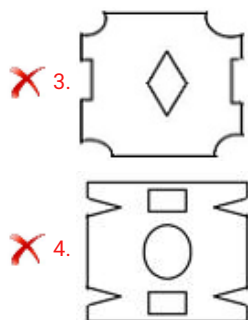
Ans

✓ 1.



✗ 2.





Question ID : 685582347
Status : Answered
Chosen Option : 1

Section : General Knowledge and General Awareness

Q.1 Gnana Saraswati temple of southern India is located at:

- Ans
- ☒ 1. Puducherry
 - ☒ 2. Basar
 - ☒ 3. Tirunelveli
 - ☒ 4. Thrissur

Question ID : 685582356
Status : Not Answered
Chosen Option : --

Q.2 Under which Article of the Constitution of India can the President promulgate an ordinance?

- Ans
- ☒ 1. Article 101
 - ☒ 2. Article 123
 - ☒ 3. Article 168
 - ☒ 4. Article 75

Question ID : 685582395
Status : Answered
Chosen Option : 2

Q.3 Which one of the following states is the largest producer of pulses in India?

- Ans
- ☒ 1. Bihar
 - ☒ 2. Madhya Pradesh
 - ☒ 3. Uttarakhand
 - ☒ 4. Haryana

Question ID : 685582360
Status : Answered
Chosen Option : 2

Q.4 In the context of NITI Aayog, what does 'T' stand for in NITI?

- Ans
- ☒ 1. Transforming
 - ☒ 2. Travelling
 - ☒ 3. Training

☒ 4. Transferring

Question ID : 685582359
Status : Answered
Chosen Option : 1

Q.5 Baily's beads can be observed during a/an:

- Ans ☒ 1. total solar eclipse
☒ 2. partial solar eclipse
☒ 3. occultation of Jupiter
☒ 4. lunar eclipse

Question ID : 685582368
Status : Not Answered
Chosen Option : --

Q.6 Which among the following is a copper mineral?

- Ans ☒ 1. hematite
☒ 2. azurite
☒ 3. halite
☒ 4. bauxite

Question ID : 685582364
Status : Answered
Chosen Option : 2

Q.7 At the location of which city in Assam, the river Brahmaputra goes south bound breaking away from its westward course and enters into Bangladesh?

- Ans ☒ 1. Dhubri
☒ 2. Tezpur
☒ 3. Barpeta
☒ 4. Bongaigaon

Question ID : 685582380
Status : Answered
Chosen Option : 2

Q.8 The birth place of Subhash Chandra Bose is:

- Ans ☒ 1. Hazaribagh
☒ 2. Cuttack
☒ 3. Patna
☒ 4. Kolkata

Question ID : 685582381
Status : Answered
Chosen Option : 2

Q.9 The famous mathematician Srinivasa Ramanujan was born in:

- Ans ☒ 1. Kumbakonam

- ☒ 2. Erode
- ☐ 3. Madras (now Chennai)
- ☐ 4. Namakkal

Question ID : 685582389
Status : Answered
Chosen Option : 3

Q.10 Which among the following is the confluence of Alaknanda and Mandakini?

- Ans ☒ 1. Rudraprayag
- ☐ 2. Devprayag
- ☐ 3. Nandprayag
- ☐ 4. Vishnuprayag

Question ID : 685582375
Status : Answered
Chosen Option : 2

Q.11 Who holds the record of most 150-plus runs in a test match innings as a captain?

- Ans ☐ 1. Wally Hammond
- ☐ 2. Don Bradman
- ☐ 3. Ricky Ponting
- ☒ 4. Virat Kohli

Question ID : 685582399
Status : Not Answered
Chosen Option : --

Q.12 Which one of the following diseases is caused mainly by the deficiency of Vitamin C?

- Ans ☐ 1. Kwashiorkor
- ☒ 2. Scurvy
- ☐ 3. Goitre
- ☐ 4. Rickets

Question ID : 685582370
Status : Answered
Chosen Option : 2

Q.13 Who is the first woman to have been awarded the Yudh Seva Medal?

- Ans ☒ 1. Minty Agarwal
- ☐ 2. Shaliza Dhami
- ☐ 3. Aparna Kumar
- ☐ 4. Bhawana Kanth

Question ID : 685582392
Status : Not Answered
Chosen Option : --

Q.14 Who holds the record of scoring the fastest goal (in the eleventh second) in a FIFA World

Cup match?

- Ans
- ☒ 1. Cristiano Ronaldo
 - ☒ 2. Hakan Sukur
 - ☒ 3. Kylian Mbappe
 - ☒ 4. Pele

Question ID : 685582401
Status : Not Answered
Chosen Option : --

Q.15 Which Indian was awarded the Chiratae Ventures' Patrick J. McGovern Lifetime Achievement Award 2019?

- Ans
- ☒ 1. Ratan Tata
 - ☒ 2. Shiv Nadar
 - ☒ 3. Uday Kotak
 - ☒ 4. Narayan Murthy

Question ID : 685582390
Status : Not Answered
Chosen Option : --

Q.16 Which of the following films is set in the backdrop of the India-China War of 1962?

- Ans
- ☒ 1. Hazaaron Khwaishein Aisi
 - ☒ 2. Roja
 - ☒ 3. Aakrosh
 - ☒ 4. Haqeeqat

Question ID : 685582353
Status : Answered
Chosen Option : 4

Q.17 Sapphire and ruby are varieties of natural:

- Ans
- ☒ 1. aluminium carbonate
 - ☒ 2. aluminium sulphide
 - ☒ 3. aluminium oxide
 - ☒ 4. aluminium hydroxide

Question ID : 685582363
Status : Answered
Chosen Option : 3

Q.18 Rajwada palace (Cultural Heritage Project) is located at:

- Ans
- ☒ 1. Indore
 - ☒ 2. Mandu
 - ☒ 3. Ujjain
 - ☒ 4. Jabalpur

Question ID : 685582357
Status : Not Answered

Chosen Option : --

Q.19 Jagannath Mishra was the three-time Chief Minister of the state of ____ .

- Ans
- ☒ 1. Haryana
 - ☒ 2. Uttar Pradesh
 - ☒ 3. Bihar
 - ☒ 4. Odisha

Question ID : 685582391
Status : Answered
Chosen Option : 2

Q.20 Under which Five Year Plan, the steel plants of Rourkela, Bhilai and Durgapur were established?

- Ans
- ☒ 1. Second
 - ☒ 2. Fourth
 - ☒ 3. Seventh
 - ☒ 4. Third

Question ID : 685582378
Status : Answered
Chosen Option : 1

Q.21 Which among the following regarding GST is correct?

- Ans
- ☒ 1. Centre holds 100 per cent stake in GST network
 - ☒ 2. GST network was formed under Companies Act
 - ☒ 3. GST council is a statutory body
 - ☒ 4. The 100th Amendment introduced GST in the country

Question ID : 685582362
Status : Answered
Chosen Option : 4

Q.22 Which among the following has its latitude within one degree of that New Delhi?

- Ans
- ☒ 1. Amarnath Cave
 - ☒ 2. Mount Everest
 - ☒ 3. City of Islamabad
 - ☒ 4. City of Dhaka

Question ID : 685582379
Status : Not Answered
Chosen Option : --

Q.23 What was the party affiliation of EMS Namboodiripad?

- Ans
- ☒ 1. CPI
 - ☒ 2. Kerala Congress
 - ☒ 3. CPI(M)
 - ☒ 4. SUCI

Question ID : 685582393
Status : Not Answered
Chosen Option : --

Q.24 Where was the venue of US Open Tennis Championship before it shifted to the Flushing Meadows?

- Ans
- ☒ 1. Lexington
 - ☒ 2. Woodmond Hills
 - ☒ 3. Plaza District
 - ☒ 4. Forest Hills

Question ID : 685582402
Status : Not Answered
Chosen Option : --

Q.25 Which among the following combination is present in higher amount in hard water?

- Ans
- ☒ 1. Calcium and sodium
 - ☒ 2. Sodium and manganese
 - ☒ 3. Calcium and magnesium
 - ☒ 4. Sodium and magnesium

Question ID : 685582373
Status : Answered
Chosen Option : 3

Q.26 In which year was the battle of Buxar fought?

- Ans
- ☒ 1. 1757
 - ☒ 2. 1765
 - ☒ 3. 1764
 - ☒ 4. 1758

Question ID : 685582382
Status : Answered
Chosen Option : 3

Q.27 How many times has India won the ICC U-19 World Cup?

- Ans
- ☒ 1. One
 - ☒ 2. Three
 - ☒ 3. Four
 - ☒ 4. Two

Question ID : 685582400
Status : Not Answered
Chosen Option : --

Q.28 Where in India is the first indigenously built atomic power plant located?

- Ans
- ☒ 1. Tarapur
 - ☒ 2. Kalpakkam
 - ☒ 3. Kota

☒ 4. Trombay

Question ID : 685582371
Status : Answered
Chosen Option : 4

Q.29 During the freedom struggle, who was the only President of Indian National Congress who resigned from the presidency even after being elected?

- Ans
- ☒ 1. JB Kripalani
 - ☒ 2. Nellie Sengupta
 - ☒ 3. Subhash Chandra Bose
 - ☒ 4. Jawaharlal Nehru

Question ID : 685582383
Status : Answered
Chosen Option : 3

Q.30 'Powa Mecca' in Assam is the tomb of ____.

- Ans
- ☒ 1. Shujauddin Mohammed Shah
 - ☒ 2. Khwaja Bande Nawaz
 - ☒ 3. Sheikh Salim Chisti
 - ☒ 4. Pir Giasuddin Auliya

Question ID : 685582385
Status : Not Answered
Chosen Option : --

Q.31 As per the India State of Forest Report 2017, which of the following states has the maximum percentage of forest cover in relation to its area?

- Ans
- ☒ 1. Maharashtra
 - ☒ 2. Assam
 - ☒ 3. Odisha
 - ☒ 4. Mizoram

Question ID : 685582369
Status : Answered
Chosen Option : 4

Q.32 In February 2019, India signed a letter of intent with ____ to fight marine pollution.

- Ans
- ☒ 1. Cambodia
 - ☒ 2. Denmark
 - ☒ 3. Norway
 - ☒ 4. Bhutan

Question ID : 685582372
Status : Not Answered
Chosen Option : --

Q.33 Which of the following activities is also referred to as 'Gold Collar' profession?

- Ans
- ☒ 1. Primary

- ☐ 2. Secondary
- ☒ 3. Quinary
- ☐ 4. Quaternary

Question ID : 685582377
Status : Answered
Chosen Option : 4

Q.34 Hirakud dam is built across the river:

- Ans ☐ 1. Krishna
- ☐ 2. Betwa
- ☒ 3. Mahanadi
- ☐ 4. Godavari

Question ID : 685582376
Status : Answered
Chosen Option : 3

Q.35 What is the full form of NPCI which is an umbrella organisation for all retail payments system in India?

- Ans ☒ 1. National Payments Corporation of India
- ☐ 2. Non-cash Payments Cooperative Inc.
- ☐ 3. Non-cash Payments Corporation of India
- ☐ 4. Net Payments Company Inc.

Question ID : 685582358
Status : Answered
Chosen Option : 1

Q.36 Which among the following is responsible for the rotation of the plane of oscillation of Foucault's pendulum?

- Ans ☐ 1. Centripetal force
- ☐ 2. Viscous drag of air
- ☐ 3. Centrifugal force
- ☒ 4. Coriolis force

Question ID : 685582366
Status : Answered
Chosen Option : 2

Q.37 What is the maximum amount of loan permissible under Pradhan Mantri MUDRA Yojana?

- Ans ☐ 1. ₹3 lakhs
- ☒ 2. ₹10 lakhs
- ☐ 3. ₹12 lakhs
- ☐ 4. ₹5 lakhs

Question ID : 685582361
Status : Answered
Chosen Option : 3

Q.38 The part of the eye which is responsible for the conversion of image of an object into neural signals is:

- Ans
- ☒ 1. retina
 - ☐ 2. optic nerve
 - ☐ 3. vitreous humour
 - ☐ 4. iris

Question ID : 685582374
Status : Answered
Chosen Option : 2

Q.39 Which among the following political parties was a part of NDA during the 2019 general elections?

- Ans
- ☐ 1. RJD
 - ☒ 2. LJP
 - ☐ 3. AITC
 - ☐ 4. DMK

Question ID : 685582394
Status : Not Answered
Chosen Option : --

Q.40 Which of the following is NOT an official language of the United Nations?

- Ans
- ☐ 1. Arabic
 - ☐ 2. English
 - ☒ 3. Japanese
 - ☐ 4. Chinese

Question ID : 685582396
Status : Answered
Chosen Option : 1

Q.41 The temple at Lepakshi famous for its hanging pillars and constructed in Vijayanagara style is also called _____ temple.

- Ans
- ☐ 1. Mahalakshmi
 - ☒ 2. Veerabhadra
 - ☐ 3. Mahakaal
 - ☐ 4. Murugan

Question ID : 685582355
Status : Not Answered
Chosen Option : --

Q.42 Twin paradox is associated with:

- Ans
- ☐ 1. hydrodynamics
 - ☒ 2. the theory of relativity
 - ☐ 3. particle physics
 - ☐ 4. quantum mechanics

Question ID : 685582365
Status : Answered
Chosen Option : 2

Q.43 Who, before going to the gallows, had expressed his desire for keeping his ashes intact till India is reunited and throwing them into the Indus after the reunification has been achieved?

- Ans
- ☒ 1. Nathuram Godse
 - ☐ 2. Uddham Singh
 - ☐ 3. Bhagat Singh
 - ☐ 4. Surya Sen

Question ID : 685582384
Status : Not Answered
Chosen Option : --

Q.44 Who among the following received the Sahitya Akademi Award in 1968?

- Ans
- ☐ 1. Kaifi Azmi
 - ☒ 2. Harivansh Rai Bachchan
 - ☐ 3. Amrita Pritam
 - ☐ 4. Buddhadeb Basu

Question ID : 685582354
Status : Not Answered
Chosen Option : --

Q.45 With reference to the High Courts and their seats, which of the following pairs is correctly matched?

- Ans
- ☐ 1. Odisha - Sambalpur
 - ☒ 2. Uttarakhand - Nainital
 - ☐ 3. Gujarat - Gandhinagar
 - ☐ 4. Madhya Pradesh - Gwalior

Question ID : 685582398
Status : Answered
Chosen Option : 3

Q.46 In which year was the World Trade Organization established?

- Ans
- ☐ 1. 1942
 - ☐ 2. 1952
 - ☒ 3. 1995
 - ☐ 4. 1947

Question ID : 685582397
Status : Answered
Chosen Option : 4

Q.47 Who is the author of 'Swami Vivekananda in the West: New Discoveries'?

- Ans
- ☐ 1. Romain Rolland
 - ☐ 2. Sister Nivedita

- ✓ 3. Marie Louise Burke
- ✗ 4. Swami Ranganathananda

Question ID : 685582388
Status : Answered
Chosen Option : 4

Q.48 The name of which disease among the following means 'evil influence of the stars'?

- Ans
- ✗ 1. Typhoid
- ✓ 2. Influenza
- ✗ 3. Plague
- ✗ 4. Cholera

Question ID : 685582367
Status : Answered
Chosen Option : 3

Q.49 The famous physician Jeevaka was appointed by the court of:

- Ans
- ✓ 1. Bimbisara
- ✗ 2. Krishnadeva Raya
- ✗ 3. Ashoka
- ✗ 4. Samudragupta

Question ID : 685582386
Status : Not Answered
Chosen Option : --

Q.50 Who used the pseudonym 'Bhanusingha'?

- Ans
- ✗ 1. Sunil Gangopadhyaya
- ✗ 2. Michael Madhusudan Dutt
- ✗ 3. Bankim Chandra Chattopadhyaya
- ✓ 4. Rabindranath Tagore

Question ID : 685582387
Status : Not Answered
Chosen Option : --

Section : Quantitative Aptitude

Q.1 The ratio of radius of the base and the height of a solid right circular cylinder is 2 : 3. If its volume is 202.125 cm^3 , then its total surface area is:

(Take $\pi = \frac{22}{7}$)

- Ans
- ✓ 1. 192.5 cm^2
- ✗ 2. 154 cm^2
- ✗ 3. 168 cm^2
- ✗ 4. 115.5 cm^2

Question ID : 685582280
Status : Not Answered

Chosen Option : --

Q.2 The curved surface area of a right circular cone is 156π and the radius of its base is 12 cm. What is the volume of the cone, in cm^3 ?

- Ans
- ☒ 1. 192π
 - ☒ 2. 240π
 - ☒ 3. 210π
 - ☒ 4. 180π

Question ID : 685582281

Status : Answered

Chosen Option : 2

Q.3 A solid metallic sphere of radius 6.3 cm is melted and recast into a right circular cone of height 25.2 cm. What is the ratio of the diameter of the base to the height of the cone?

- Ans
- ☒ 1. 2 : 1
 - ☒ 2. 3 : 2
 - ☒ 3. 1 : 2
 - ☒ 4. 2 : 3

Question ID : 685582282

Status : Answered

Chosen Option : 3

Q.4 Pipes A and B together can fill an empty tank in $6\frac{2}{3}$ minutes. If A takes 3 minutes more than B to fill the tank, then the time (in minutes) in which A alone would fill one-third part of the tank is:

- Ans
- ☒ 1. 6
 - ☒ 2. 4.5
 - ☒ 3. 5
 - ☒ 4. 5.5

Question ID : 685582275

Status : Not Answered

Chosen Option : --

Q.5 Pipes A and B can fill a tank in 36 hours and 48 hours, respectively. Both pipes are opened together for 9 hours and then A is closed. Pipe B alone will fill the remaining part of the tank now in:

- Ans
- ☒ 1. 27 hours
 - ☒ 2. 25 hours
 - ☒ 3. $20\frac{1}{2}$ hours
 - ☒ 4. 24 hours

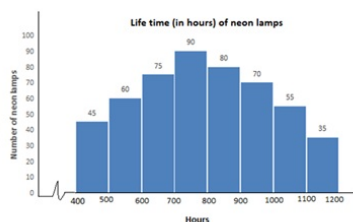
Question ID : 685582274

Status : Answered

Chosen Option : 1

Q.6

Study the bar graph and answer the question.



The ratio of the number of neon lamps having a life of 900 hours or more to the number of lamps having life less than 700 hours is:

- Ans
- ☒ 1. 6 : 7
 - ☒ 2. 7 : 8
 - ☒ 3. 25 : 21
 - ☒ 4. 8 : 9

Question ID : 685582295
Status : Answered
Chosen Option : 4

Q.7 The average weight of the boys in a class is 69.3 kg and that of the girls in the same class is 59.4 kg. If the average weight of all the boys and girls in the class is 63.8 kg, then the percentage of the number of boys in the class is:

- Ans
- ☒ 1. $55\frac{5}{9}$
 - ☒ 2. $44\frac{4}{9}$
 - ☒ 3. 40
 - ☒ 4. 45

Question ID : 685582261
Status : Answered
Chosen Option : 2

Q.8 The value of $\frac{4.669 \times 4.669 - 9 \times (0.777)^2}{(4.669)^2 + (2.331)^2 + 14 (0.667)(2.331)}$ is $(1 - k)$, where $k = ?$

- Ans
- ☒ 1. 0.647
 - ☒ 2. 0.467
 - ☒ 3. 0.768
 - ☒ 4. 0.666

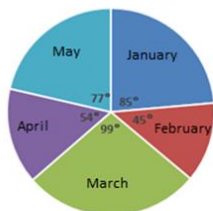
Question ID : 685582259
Status : Not Answered
Chosen Option : --

Q.9

Study the pie chart and answer the question:

Distribution (degree wise) of the number of computers sold by a shopkeeper during five months.

Total Number of Computers Sold = 5400



The number of months, in which the number of computers sold was above 20% of the total number of computers sold in 5 months, was:

- Ans
- ☒ 1. 3
 - ☐ 2. 4
 - ☐ 3. 2
 - ☐ 4. 1

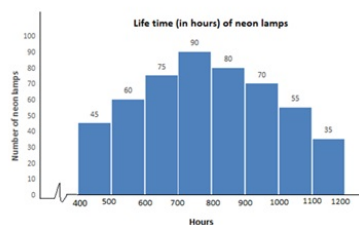
Question ID : 685582299
Status : Answered
Chosen Option : 3

Q.10 The value of $9 \times [(9 - 4) \div \{(8 \div 8 \text{ of } 4) + (4 \div 4 \text{ of } 2)\}]$ is:

- Ans
- ☐ 1. $\frac{15}{4}$
 - ☐ 2. 20
 - ☒ 3. 60
 - ☐ 4. $\frac{15}{2}$

Question ID : 685582257
Status : Answered
Chosen Option : 4

Q.11 Study the bar graph and answer the question.



The number of neon lamps having a life of 600 hours or more but less than 800 hours is what percentage of the total number of neon lamps having a life of 800 hours or more?

- Ans
- ☒ 1. 68.75
 - ☐ 2. 66.67
 - ☐ 3. 69.25
 - ☐ 4. 67.50

Question ID : 685582296
Status : Answered

Chosen Option : 1

Q.12 The sides of $\triangle ABC$ are 10 cm, 10.5 cm and 14.5 cm. What is the radius of its circumcircle?

- Ans
- ☒ 1. 7.25 cm
 - ☐ 2. 5.25 cm
 - ☐ 3. 7.5 cm
 - ☐ 4. 5 cm

Question ID : 685582289

Status : Not Answered

Chosen Option : --

Q.13 When a certain number is divided by 65, the remainder is 56. When the same number is divided by 13, the remainder is x . What is the value of $\sqrt{5x-2}$?

- Ans
- ☐ 1. $2\sqrt{7}$
 - ☐ 2. $2\sqrt{2}$
 - ☒ 3. $3\sqrt{2}$
 - ☐ 4. $\sqrt{13}$

Question ID : 685582254

Status : Answered

Chosen Option : 3

Q.14 If x and y are real numbers, then the least possible value of $4(x-2)^2 + (y-3)^2 - 2(x-3)^2$ is:

- Ans
- ☐ 1. 1
 - ☒ 2. -4
 - ☐ 3. -8
 - ☐ 4. 3

Question ID : 685582284

Status : Answered

Chosen Option : 1

Q.15 A 22 m long ladder (whose foot is on the ground) leans against a wall making an angle of 60° with the wall. What is the height (in m) of the point where the ladder touches the wall from the ground?

- Ans
- ☐ 1. $\frac{22\sqrt{2}}{3}$
 - ☐ 2. $11\sqrt{2}$
 - ☒ 3. 11
 - ☐ 4. $11\sqrt{3}$

Question ID : 685582292

Status : Answered

Chosen Option : 3

Q.16 As observed from the top of a lighthouse, 45 m high above the sea-level, the angle of depression of a ship, sailing directly towards it, changes from 30° to 45° . The distance travelled by the ship during the period of observation is: (Your answer should be correct to one decimal place.)

- Ans
- ☒ 1. 36.9 m
 - ☒ 2. 32.9 m
 - ☒ 3. 33.4 m
 - ☒ 4. 24.8 m

Question ID : 685582293
Status : Answered
Chosen Option : 2

Q.17 If A is 48% more than B and C is 60% less than the sum of A and B, then A is what percentage more than C?
(Correct to one decimal place.)

- Ans
- ☒ 1. 50.2
 - ☒ 2. 49.8
 - ☒ 3. 50.8
 - ☒ 4. 49.2

Question ID : 685582266
Status : Not Answered
Chosen Option : --

Q.18 Working 7 hours a day, 18 persons can complete a certain work in 32 days. In how many days would 14 persons complete the same work, working 8 hours a day?

- Ans
- ☒ 1. 42
 - ☒ 2. 30
 - ☒ 3. 36
 - ☒ 4. 35

Question ID : 685582273
Status : Answered
Chosen Option : 3

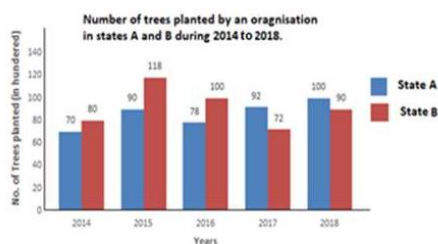
Q.19 A person invested a sum of ₹10,500 at $x\%$ per annum at simple interest and a sum of ₹13,500 at $(x + 2)\%$ p.a. at simple interest. If the total interest earned on both the investments for 3 years is ₹7,650, then the rate of interest on the first investment is:

- Ans
- ☒ 1. 8.5%
 - ☒ 2. 8%
 - ☒ 3. 9%
 - ☒ 4. 9.5%

Question ID : 685582270
Status : Not Answered
Chosen Option : --

Q.20

Study the bar graph and answer the question.



The total number of trees planted in state B in 2015 and 2017 was what percentage less than the total number of trees planted in state A in 2014, 2016 and 2017? (Your answer should be correct to one decimal place.)

- Ans
- ☒ 1. 21.4
 - ☒ 2. 20.8
 - ☒ 3. 19.8
 - ☒ 4. 20.1

Question ID : 685582301
Status : Answered
Chosen Option : 2

Q.21 The sides of a triangular park are 35 m, 53 m and 66 m. The cost of levelling the park at the rate of ₹9.25/m² is:

- Ans
- ☒ 1. ₹8,584
 - ☒ 2. ₹8,621
 - ☒ 3. ₹8,547
 - ☒ 4. ₹8,510

Question ID : 685582278
Status : Not Answered
Chosen Option : --

Q.22 If $\sqrt{x} + \frac{1}{\sqrt{x}} = 3$, $x > 0$, then $x^2 (x^2 - 47) = ?$

- Ans
- ☒ 1. 0
 - ☒ 2. -2
 - ☒ 3. -1
 - ☒ 4. 2

Question ID : 685582283
Status : Answered
Chosen Option : 3

Q.23 The value of $\sqrt{11 + 2\sqrt{18}}$ is closest to:

- Ans
- ☒ 1. 4.8
 - ☒ 2. 4.4
 - ☒ 3. 3.8
 - ☒ 4. 4.1

Question ID : 685582253

Status : **Answered**
Chosen Option : 2

Q.24 An article is marked at 100% above its cost price. After allowing two successive discounts of 5% and 20% respectively on the marked price, it is sold at $x\%$ profit. What is the value of x ?

- Ans
- ✓ 1. 52
 - ✗ 2. 72
 - ✗ 3. 48
 - ✗ 4. 75

Question ID : 685582262
Status : **Answered**
Chosen Option : 1

Q.25 A invests ₹6,00,000 more than B in a business. B invests his capital for $7\frac{1}{2}$ months, while A invests his capital for $2\frac{1}{2}$ more months than B. Out of the total profit of ₹12,40,000, if the share of B is ₹2,48,000 less than the share of A, then the capital of B is:

- Ans
- ✗ 1. ₹40,00,000
 - ✗ 2. ₹42,00,000
 - ✗ 3. ₹45,00,000
 - ✓ 4. ₹48,00,000

Question ID : 685582269
Status : **Not Answered**
Chosen Option : --

Q.26 If $21 \tan \theta = 20$, then $(1 + \sin \theta + \cos \theta) : (1 - \sin \theta + \cos \theta) = ?$

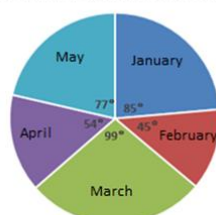
- Ans
- ✗ 1. 3 : 1
 - ✗ 2. 2 : 1
 - ✗ 3. 5 : 2
 - ✓ 4. 7 : 3

Question ID : 685582291
Status : **Not Answered**
Chosen Option : --

Q.27 Study the pie chart and answer the question.

Distribution (degree wise) of the number of computers sold by a shopkeeper during five months.

Total Number of Computers Sold = 5400



The total number of computers sold in February and April is what percentage more than the number of computers sold in May? (Your answer should be correct to one decimal place.)

- Ans
- ✓ 1. 28.6

- ☒ 2. 26.4
☒ 3. 25.8
☒ 4. 30.2

Question ID : 685582298
 Status : Answered
 Chosen Option : 3

Q.28 A person takes 40 minutes more than his usual time when he covers a distance of 20 km at 5 km/h. If he covers the same distance at 8 km/h, he takes x minutes less than the usual time. What is the value of x ?

- Ans ☒ 1. 50
☒ 2. 48
☒ 3. 54
☒ 4. 45

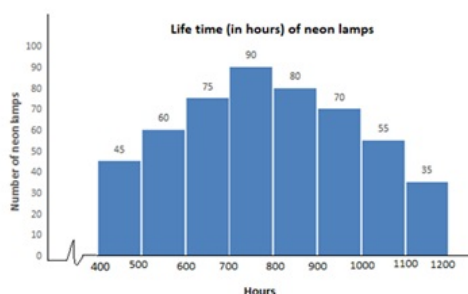
Question ID : 685582276
 Status : Answered
 Chosen Option : 1

Q.29 A sum (in ₹) is distributed between A, B and C in the ratio 9 : 6 : 11. If A gives ₹500 from his share to C, the ratio of shares of A, B and C becomes 4 : 3 : 6. What is the sum of shares (in ₹) of B and C, in the beginning?

- Ans ☒ 1. ₹9,100
☒ 2. ₹8,500
☒ 3. ₹7,500
☒ 4. ₹7,800

Question ID : 685582268
 Status : Answered
 Chosen Option : 2

Q.30 Study the bar graph and answer the question.



The number of neon lamps having a life of 500 hours or more but less than 800 hours is:

- Ans ☒ 1. 270
☒ 2. 225
☒ 3. 180
☒ 4. 305

Question ID : 685582294
 Status : Answered
 Chosen Option : 2

Q.31 The sides AB, BC and AC of a $\triangle ABC$ are 12 cm, 8 cm and 10 cm respectively. A circle is inscribed in the triangle touching AB, BC and AC at D, E and F, respectively. The difference between the lengths of AD and CE is:

- Ans
- ☒ 1. 4 cm
 - ☐ 2. 5 cm
 - ☐ 3. 3 cm
 - ☐ 4. 2 cm

Question ID : 685582286
Status : Answered
Chosen Option : 4

Q.32 In a school, 60% of the number of students are boys and the rest are girls. If 20% of the number of boys failed and 65% of the number of girls passed the examination, then the percentage of the total number of students who passed is:

- Ans
- ☒ 1. 74
 - ☐ 2. 72
 - ☐ 3. 78
 - ☐ 4. 68

Question ID : 685582265
Status : Answered
Chosen Option : 1

Q.33 The value of $\frac{\frac{1}{3} + \left[4\frac{3}{4} - \left(3\frac{1}{6} - 2\frac{1}{3} \right) \right]}{\left(\frac{1}{5} \text{ of } \frac{1}{5} + \frac{1}{5} \right) + \left(\frac{1}{5} + \frac{1}{5} \times \frac{1}{5} \right)}$ lies between:

- Ans
- ☐ 1. 8.2 and 8.8
 - ☐ 2. 0.4 and 0.9
 - ☒ 3. 4.2 and 4.4
 - ☐ 4. 10.2 and 10.8

Question ID : 685582258
Status : Not Answered
Chosen Option : --

Q.34 Let x be the least number divisible by 16, 24, 30, 36 and 45, and x is also a perfect square. What is the remainder when x is divided by 123?

- Ans
- ☐ 1. 40
 - ☒ 2. 33
 - ☐ 3. 103
 - ☐ 4. 100

Question ID : 685582256
Status : Not Answered
Chosen Option : --

Q.35 If $x = 5.51$, $y = 5.52$ and $z = 5.57$, then what is the value of $x^3 + y^3 + z^3 - 3xyz$?

- Ans
- ☐ 1. 5.146
 - ☐ 2. 51.46

✓ 3. 0.05146

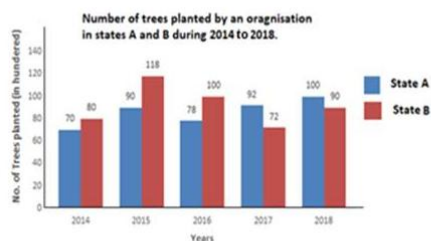
✗ 4. 0.5146

Question ID : 685582285

Status : Answered

Chosen Option : 3

Q.36 Study the bar graph and answer the question.



In how many years was the number of trees planted in state B more than the average number of trees planted in state A over the years?

Ans ✗ 1. 4

✗ 2. 1

✗ 3. 2

✓ 4. 3

Question ID : 685582300

Status : Answered

Chosen Option : 4

Q.37 A trader buys an article at 80% of its marked price and sells it at 10% discount on its marked price. His percentage profit is:

Ans ✓ 1. $12\frac{1}{2}$

✗ 2. $10\frac{1}{2}$

✗ 3. 15

✗ 4. 10

Question ID : 685582263

Status : Answered

Chosen Option : 4

Q.38 A person sold a chair at a profit of 13%. Had he sold it for ₹607.50 more, he would have gained $x\%$. If the cost price of the chair is ₹3750, then the value of x is:

Ans ✗ 1. 30

✗ 2. 28.4

✓ 3. 29.2

✗ 4. 32

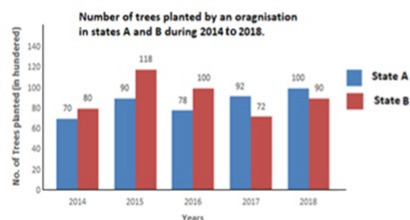
Question ID : 685582267

Status : Not Answered

Chosen Option : --

Q.39

Study the bar graph and answer the question.



Percentage decrease in the number of trees planted in 2016 in state A as compared to that in 2015 in the same state was:

Ans

- ☒ 1. $13\frac{2}{3}$
☒ 2. $13\frac{1}{3}$
☒ 3. $15\frac{5}{13}$
☒ 4. $15\frac{2}{3}$

Question ID : 685582302

Status : Answered

Chosen Option : 3

Q.40 The compound interest amounts on a certain sum at a certain rate percentage p.a. for the second year and third year are

₹3,300 and ₹3,630, respectively. What is the amount of the same sum at the same rate in $2\frac{1}{2}$ years, interest compounded yearly?

Ans

- ☒ 1. ₹36,300
☒ 2. ₹36,000
☒ 3. ₹37,215
☒ 4. ₹38,115

Question ID : 685582271

Status : Not Answered

Chosen Option : --

Q.41 The total numbers of males and females in a town is 70,000. If the number of males is increased by 6% and that of the females is increased by 4%, then the total numbers of males and females in the town would become 73520. What is the difference between the number of males and females in the town, in the beginning?

Ans

- ☒ 1. 1500
☒ 2. 1400
☒ 3. 1800
☒ 4. 2000

Question ID : 685582264

Status : Not Answered

Chosen Option : --

Q.42 A can do $\frac{2}{3}$ of a work in 12 days while B can do $66\frac{2}{3}\%$ of the same work in 16 days. They work together for 10 days. B alone will complete the remaining work in:

Ans

- ☒ 1. 4 days
☒ 2. 6 days

☒ 3. 8 days

☒ 4. 9 days

Question ID : 685582272

Status : Answered

Chosen Option : 2

Q.43 In finding the HCF of two numbers by division method, the quotients are 1, 8 and 2 respectively, and the last divisor is 105. What is the sum of the numbers?

Ans ☒ 1. 3885

☒ 2. 3675

☒ 3. 3570

☒ 4. 3780

Question ID : 685582255

Status : Not Answered

Chosen Option : --

Q.44 In $\triangle ABC$, $\angle A = 90^\circ$, $AB = 16$ cm and $AC = 12$ cm. D is the midpoint of AC and $DE \perp CB$ at E. What is the area (in cm^2) of $\triangle CDE$?

Ans ☒ 1. 7.68

☒ 2. 6.25

☒ 3. 8.64

☒ 4. 5.76

Question ID : 685582288

Status : Answered

Chosen Option : 3

Q.45 Two circles of radii 5 cm and 3 cm intersect each other at A and B, and the distance between their centres is 6 cm. The length (in cm) of the common chord AB is:

Ans ☒ 1. $\frac{2\sqrt{14}}{3}$

☒ 2. $\frac{2\sqrt{13}}{3}$

☒ 3. $\frac{4\sqrt{13}}{3}$

☒ 4. $\frac{4\sqrt{14}}{3}$

Question ID : 685582287

Status : Not Answered

Chosen Option : --

Q.46 A field is in the form of a circle. The cost of fencing around it at ₹12 per metre is ₹2,640. What is the area (in m^2) of the field?

(Take $\pi = \frac{22}{7}$)

Ans ☒ 1. 5544 m^2

☒ 2. 1925 m^2

☒ 3. 2772 m^2

☒ 4. 3850 m^2

Question ID : 685582279

Status : Answered

Chosen Option : 4

Q.47 If $7 \sin^2 \theta + 3 \cos^2 \theta = 4$, $0^\circ < \theta < 90^\circ$, then the value of $(\tan^2 2\theta + \operatorname{cosec}^2 2\theta)$ is:

Ans

☒ 1. $\frac{13}{4}$

☒ 2. $\frac{13}{3}$

☒ 3. 7

☒ 4. $\frac{15}{4}$

Question ID : 685582290

Status : Not Answered

Chosen Option : --

Q.48 The distance between two places A and B is 14 km. A boat travels from A to B downstream and then returns from B to A upstream and takes a total of 3 hours 44 minutes for the entire journey. If the speed of the current is 2 km/h, then what is the speed of the boat, in km/h, in still water?

Ans

☒ 1. 7

☒ 2. $6\frac{1}{2}$

☒ 3. $7\frac{1}{2}$

☒ 4. 8

Question ID : 685582277

Status : Not Answered

Chosen Option : --

Q.49 The average of n observations is 40. If one observation of value 80 is added, then the average of all the observations is 41. What is the value of n ?

Ans

☒ 1. 43

☒ 2. 38

☒ 3. 39

☒ 4. 40

Question ID : 685582260

Status : Answered

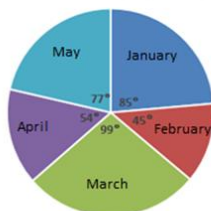
Chosen Option : 3

Q.50

Study the pie chart and answer the question.

Distribution (degree wise) of the number of computers sold by a shopkeeper during five months

Total Number of Computers Sold = 5400



If the difference between the number of computers sold in March and the number of computers sold in January is x , then x lies between:

- Ans
- ☒ 1. 150 and 200
 - ☒ 2. 200 and 250
 - ☒ 3. 250 and 300
 - ☒ 4. 300 and 350

Question ID : 685582297
Status : Answered
Chosen Option : 2

Section : English Comprehension

Q.1 Select the most appropriate antonym of the given word.

DUBIOUS

- Ans
- ☒ 1. Shady
 - ☒ 2. Likely
 - ☒ 3. Dusky
 - ☒ 4. Fishy

Question ID : 685582432
Status : Answered
Chosen Option : 2

Q.2 Select the most appropriate option to substitute the underlined segment. If no substitution is required select 'No substitution'

Neither the directors nor the Chairman were available to interrogation.

- Ans
- ☒ 1. were available by
 - ☒ 2. was available for
 - ☒ 3. were available for
 - ☒ 4. No substitution

Question ID : 685582411
Status : Answered
Chosen Option : 2

Comprehension:

Read the given passage and fill in the blanks with the most appropriate options.

The refugees coming by boat to Italy have already set a record this year. The surge (1)_____ partly from the civil war in Syria, which has forced 3 million people to (2)_____ their homeland. Europe, peaceful, affluent and comparatively close- is a preferred (3)_____. It's

where the desperate meets the developed. Often with the aid (4)_____ reckless human traffickers, refugees attempt to cross the waters in rubber dinghies that can (5)_____, plunging the occupants into the sea.

SubQuestion No : 3

Q.3 Select the most appropriate option to fill in blank No.1

- Ans
- ☒ 1. has resulted
 - ☐ 2. is resulting
 - ☐ 3. have resulted
 - ☐ 4. is resulted

Question ID : 685582419
Status : Answered
Chosen Option : 1

Comprehension:

Read the given passage and fill in the blanks with the most appropriate options.

The refugees coming by boat to Italy have already set a record this year. The surge (1)_____ partly from the civil war in Syria, which has forced 3 million people to (2)_____ their homeland. Europe, peaceful, affluent and comparatively close- is a preferred (3)_____. It's where the desperate meets the developed. Often with the aid (4)_____ reckless human traffickers, refugees attempt to cross the waters in rubber dinghies that can (5)_____, plunging the occupants into the sea.

SubQuestion No : 4

Q.4 Select the most appropriate option to fill in blank No.2

- Ans
- ☐ 1. fleet
 - ☒ 2. flee
 - ☐ 3. fled
 - ☐ 4. fly

Question ID : 685582420
Status : Answered
Chosen Option : 2

Comprehension:

Read the given passage and fill in the blanks with the most appropriate options.

The refugees coming by boat to Italy have already set a record this year. The surge (1)_____ partly from the civil war in Syria, which has forced 3 million people to (2)_____ their homeland. Europe, peaceful, affluent and comparatively close- is a preferred (3)_____. It's where the desperate meets the developed. Often with the aid (4)_____ reckless human traffickers, refugees attempt to cross the waters in rubber dinghies that can (5)_____, plunging the occupants into the sea.

SubQuestion No : 5

Q.5 Select the most appropriate option to fill in blank No.3

- Ans
- ☐ 1. purpose
 - ☐ 2. target
 - ☒ 3. destination
 - ☐ 4. objective

Question ID : 685582421
Status : Answered
Chosen Option : 3

Comprehension:

Read the given passage and fill in the blanks with the most appropriate options.

The refugees coming by boat to Italy have already set a record this year. The surge (1)_____ partly from the civil war in Syria, which has forced 3 million people to (2)_____ their homeland. Europe, peaceful, affluent and comparatively close- is a preferred (3)_____. It's where the desperate meets the developed. Often with the aid (4)_____ reckless human traffickers, refugees attempt to cross the waters in rubber dinghies that can (5)_____, plunging the occupants into the sea.

SubQuestion No : 6

Q.6 Select the most appropriate option to fill in blank No.4

- Ans
- ☒ 1. by
 - ☒ 2. on
 - ☒ 3. of
 - ☒ 4. for

Question ID : 685582422
Status : Answered
Chosen Option : 1

Comprehension:

Read the given passage and fill in the blanks with the most appropriate options.

The refugees coming by boat to Italy have already set a record this year. The surge (1)_____ partly from the civil war in Syria, which has forced 3 million people to (2)_____ their homeland. Europe, peaceful, affluent and comparatively close- is a preferred (3)_____. It's where the desperate meets the developed. Often with the aid (4)_____ reckless human traffickers, refugees attempt to cross the waters in rubber dinghies that can (5)_____, plunging the occupants into the sea.

SubQuestion No : 7

Q.7 Select the most appropriate option to fill in blank No.5

- Ans
- ☒ 1. convert
 - ☒ 2. renege
 - ☒ 3. inverse
 - ☒ 4. capsize

Question ID : 685582423
Status : Answered
Chosen Option : 4

Q.8 Select the most appropriate synonym of the given word.

INIMICAL

- Ans
- ☒ 1. Hostile
 - ☒ 2. Influential
 - ☒ 3. Comparable
 - ☒ 4. Deliberate

Question ID : 685582428
Status : Not Answered
Chosen Option : --

Q.9 Select the most appropriate option to fill in the blank.

Hitler believed that the Nordic Aryan race was superior _____ all other races.

- Ans
- ☒ 1. in

☒ 2. than

☒ 3. from

☒ 4. to

Question ID : 685582414

Status : Answered

Chosen Option : 4

Q.10 Select the most appropriate synonym of the given word.

FLOURISH

Ans ☒ 1. Thrive

☒ 2. Wither

☒ 3. Shivel

☒ 4. Languish

Question ID : 685582425

Status : Answered

Chosen Option : 4

Q.11 Select the most appropriate antonym of the given word.

IMPEDE

Ans ☒ 1. Retard

☒ 2. Hamper

☒ 3. Thwart

☒ 4. Expedite

Question ID : 685582430

Status : Answered

Chosen Option : 4

Q.12 Select the wrongly spelt word.

Ans ☒ 1. Conceal

☒ 2. Precious

☒ 3. Article

☒ 4. Audibal

Question ID : 685582444

Status : Answered

Chosen Option : 4

Q.13 Select the most appropriate option to fill in the blank.

You are well prepared to handle the responsibilities bestowed ____ you.

Ans ☒ 1. at

☒ 2. to

☒ 3. upon

☒ 4. for

Question ID : 685582415

Status : **Answered**
Chosen Option : **3**

Q.14 Identify the segment that contains a grammatical error. If there is no error, select 'No error'

Need you to buy so many books?

- Ans
- ☒ 1. so many books
 - ☒ 2. to buy
 - ☒ 3. Need you
 - ☒ 4. No error

Question ID : **685582405**
Status : **Answered**
Chosen Option : **3**

Q.15 Select the most appropriate option to substitute the underlined segment. If no substitution is required select 'No substitution'

He had barely spoken the words when he realised his mistake.

- Ans
- ☒ 1. No substitution
 - ☒ 2. barely speak the words that
 - ☒ 3. barely spoken the words than
 - ☒ 4. barely spoke the words when

Question ID : **685582410**
Status : **Answered**
Chosen Option : **3**

Q.16 Identify the segment that contains a grammatical error. If there is no error, select 'No error'

These facts should not have been disclosed for the public.

- Ans
- ☒ 1. No error
 - ☒ 2. These facts should
 - ☒ 3. for the public
 - ☒ 4. not have been disclosed

Question ID : **685582403**
Status : **Answered**
Chosen Option : **4**

Q.17 Select the most appropriate option to fill in the blank.

Keep away from bad company _____ you should regret later.

- Ans
- ☒ 1. lest
 - ☒ 2. although
 - ☒ 3. unless
 - ☒ 4. whether

Question ID : **685582417**
Status : **Answered**
Chosen Option : **1**

Q.18 Select the option which is the most appropriate one word substitution for the given group of words.

One who devotes one's life to the welfare of other people.

- Ans
- ☒ 1. alchemist
 - ☒ 2. martyr
 - ☒ 3. altruist
 - ☒ 4. ambassador

Question ID : 685582443
Status : Answered
Chosen Option : 3

Q.19 Select the option which is the most appropriate one word substitution for the given group of words.

A detailed plan for a journey especially a list of places to visit

- Ans
- ☒ 1. trajectory
 - ☒ 2. itinerary
 - ☒ 3. directory
 - ☒ 4. inventory

Question ID : 685582442
Status : Answered
Chosen Option : 2

Q.20 Select the option which is the most appropriate one word substitution for the given group of words.

One who denies oneself ordinary bodily pleasures

- Ans
- ☒ 1. ascetic
 - ☒ 2. theist
 - ☒ 3. atheist
 - ☒ 4. aesthetic

Question ID : 685582439
Status : Answered
Chosen Option : 1

Q.21 Select the most appropriate synonym of the given word.

VENERABLE

- Ans
- ☒ 1. Reliable
 - ☒ 2. Esteemed
 - ☒ 3. Valuable
 - ☒ 4. Redeemed

Question ID : 685582426
Status : Not Answered
Chosen Option : --

Q.22 Identify the segment that contains a grammatical error. If there is no error, select 'No error'

If he wants to recover, he must abstain for alcohol.

- Ans
- ☐ 1. he must
 - ☐ 2. No error
 - ☐ 3. wants to recover
 - ☒ 4. abstain for alcohol

Question ID : 685582406
Status : Answered
Chosen Option : 4

Q.23 Select the wrongly spelt word.

- Ans
- ☐ 1. Evasion
 - ☐ 2. Aviation
 - ☐ 3. Omission
 - ☒ 4. Aversion

Question ID : 685582447
Status : Answered
Chosen Option : 1

Comprehension:

Read the given passage and answer the questions that follow.

The beaver had made a dam about hundred yards long, and it had formed out of the quickly flowing stream, a wide stretch of water about twelve feet deep. The dam was so firm and broad that it was easy for me to walk along it. After a hundred and fifty yards I came to a 'beaver's castle'- a great heap of logs skilfully fitted together, the lower part covered with earth and plants. The upper logs were put loosely together so that the air could pass through to the interior.

In the late autumn, before land and water are covered with snow and ice, the beaver has to make its dwelling frostproof. It collects young trees and gnaws the stems in a double cone until the tree falls. Then the long stems are gnawed into small sections, the thin twigs bitten off and the logs are dragged to the dwelling. There, the timber is piled on the castle, sometimes to a height of ten or twelve feet. Mud is brought up from the bottom of the lake and packed between the logs with the animal's clever forepaws. The interior is lined with the finest wood shavings. In this tall shelter, the beaver remains high and dry, and protected from frost throughout the winter.

The only access to the dwelling is under the water, and even the forest wolves are not able to pull the firm building apart. The water is the beaver's element. On land it moves slowly and awkwardly. Thus, it is vital for the beaver to have water in which it can swim, and where nature has not provided this condition for it, it creates it with its dam.

The beaver's activities can change whole landscapes. With this dam, for instance, on which I was standing, beavers had turned a whole wooded alley into a lake; trees that stood there had been killed by the water and had disappeared. Aquatic game had settled there. Ducks swam past us, and great must have been the number of fish, as swarms of trout had swum past me in the clear stream. Wide stretches of meadow had come into existence on the banks, with flat landing places to which the well-beaten beaver tracks led. Many years of building, gnawing and dragging must have gone into the completion of this immense task, creating a new region for the beaver to live in.

SubQuestion No : 24

Q.24 Which line in the passage most strongly indicates that weavers simply love being in or near water?

- Ans
- ☐ 1. The dam was so firm and broad that it was easy to walk along.
 - ☐ 2. The only access to the dwelling is under the water.
 - ☐ 3. The beaver had made a dam out of the quickly flowing stream.
 - ☒ 4. The water is the beaver's element.

Question ID : 685582452
Status : Answered
Chosen Option : 4

Comprehension:

Read the given passage and answer the questions that follow.

The beaver had made a dam about hundred yards long, and it had formed out of the quickly flowing stream, a wide stretch of water about twelve feet deep. The dam was so firm and broad that it was easy for me to walk along it. After a hundred and fifty yards I came to a 'beaver's castle'- a great heap of logs skilfully fitted together, the lower part covered with earth and plants. The upper logs were put loosely together so that the air could pass through to the interior.

In the late autumn, before land and water are covered with snow and ice, the beaver has to make its dwelling frostproof. It collects young trees and gnaws the stems in a double cone until the tree falls. Then the long stems are gnawed into small sections, the thin twigs bitten off and the logs are dragged to the dwelling. There, the timber is piled on the castle, sometimes to a height of ten or twelve feet. Mud is brought up from the bottom of the lake and packed between the logs with the animal's clever forepaws. The interior is lined with the finest wood shavings. In this tall shelter, the beaver remains high and dry, and protected from frost throughout the winter.

The only access to the dwelling is under the water, and even the forest wolves are not able to pull the firm building apart. The water is the beaver's element. On land it moves slowly and awkwardly. Thus, it is vital for the beaver to have water in which it can swim, and where nature has not provided this condition for it, it creates it with its dam.

The beaver's activities can change whole landscapes. With this dam, for instance, on which I was standing, beavers had turned a whole wooded alley into a lake; trees that stood there had been killed by the water and had disappeared. Aquatic game had settled there. Ducks swam past us, and great must have been the number of fish, as swarms of trout had swum past me in the clear stream. Wide stretches of meadow had come into existence on the banks, with flat landing places to which the well-beaten beaver tracks led. Many years of building, gnawing and dragging must have gone into the completion of this immense task, creating a new region for the beaver to live in.

SubQuestion No : 25

Q.25 Which of the following statements is NOT true?

- Ans
- ☒ 1. The beaver has to make its dwelling frostproof before it starts snowing.
 - ☒ 2. The beaver can move quickly and easily on land and in water.
 - ☒ 3. Wide stretches of meadows may come into existence on the banks of streams.
 - ☒ 4. The access to the beaver's dwelling is under the water.

Question ID : 685582454

Status : Answered

Chosen Option : 2

Comprehension:

Read the given passage and answer the questions that follow.

The beaver had made a dam about hundred yards long, and it had formed out of the quickly flowing stream, a wide stretch of water about twelve feet deep. The dam was so firm and broad that it was easy for me to walk along it. After a hundred and fifty yards I came to a 'beaver's castle'- a great heap of logs skilfully fitted together, the lower part covered with earth and plants. The upper logs were put loosely together so that the air could pass through to the interior.

In the late autumn, before land and water are covered with snow and ice, the beaver has to make its dwelling frostproof. It collects young trees and gnaws the stems in a double cone until the tree falls. Then the long stems are gnawed into small sections, the thin twigs bitten off and the logs are dragged to the dwelling. There, the timber is piled on the castle, sometimes to a height of ten or twelve feet. Mud is brought up from the bottom of the lake and packed between the logs with the animal's clever forepaws. The interior is lined with the finest wood shavings. In this tall shelter, the beaver remains high and dry, and protected from frost throughout the winter.

The only access to the dwelling is under the water, and even the forest wolves are not able to pull the firm building apart. The water is the beaver's element. On land it moves slowly and awkwardly. Thus, it is vital for the beaver to have water in which it can swim, and where nature has not provided this condition for it, it creates it with its dam.

The beaver's activities can change whole landscapes. With this dam, for instance, on which I was standing, beavers had turned a whole wooded alley into a lake; trees that stood there had been killed by the water and had disappeared. Aquatic game had settled there. Ducks swam past us, and great must have been the number of fish, as swarms of trout had swum past me in the clear stream. Wide stretches of meadow had come into existence on the banks, with flat landing places to which the well-beaten beaver tracks led. Many years of building,

gnawing and dragging must have gone into the completion of this immense task, creating a new region for the beaver to live in.

SubQuestion No : 26

Q.26 What evidence in the passage suggests that beavers build strong dwellings?

- Ans
- ☒ 1. The interior is lined with finest wood shavings.
 - ☒ 2. The beaver's dwelling is frostproof.
 - ☒ 3. It takes many years of hard work to build the dwelling.
 - ☒ 4. Even the forest wolves cannot pull the dwelling apart.

Question ID : 685582451

Status : Answered

Chosen Option : 4

Comprehension:

Read the given passage and answer the questions that follow.

The beaver had made a dam about hundred yards long, and it had formed out of the quickly flowing stream, a wide stretch of water about twelve feet deep. The dam was so firm and broad that it was easy for me to walk along it. After a hundred and fifty yards I came to a 'beaver's castle'- a great heap of logs skilfully fitted together, the lower part covered with earth and plants. The upper logs were put loosely together so that the air could pass through to the interior.

In the late autumn, before land and water are covered with snow and ice, the beaver has to make its dwelling frostproof. It collects young trees and gnaws the stems in a double cone until the tree falls. Then the long stems are gnawed into small sections, the thin twigs bitten off and the logs are dragged to the dwelling. There, the timber is piled on the castle, sometimes to a height of ten or twelve feet. Mud is brought up from the bottom of the lake and packed between the logs with the animal's clever forepaws. The interior is lined with the finest wood shavings. In this tall shelter, the beaver remains high and dry, and protected from frost throughout the winter.

The only access to the dwelling is under the water, and even the forest wolves are not able to pull the firm building apart. The water is the beaver's element. On land it moves slowly and awkwardly. Thus, it is vital for the beaver to have water in which it can swim, and where nature has not provided this condition for it, it creates it with its dam.

The beaver's activities can change whole landscapes. With this dam, for instance, on which I was standing, beavers had turned a whole wooded alley into a lake; trees that stood there had been killed by the water and had disappeared. Aquatic game had settled there. Ducks swam past us, and great must have been the number of fish, as swarms of trout had swum past me in the clear stream. Wide stretches of meadow had come into existence on the banks, with flat landing places to which the well-beaten beaver tracks led. Many years of building, gnawing and dragging must have gone into the completion of this immense task, creating a new region for the beaver to live in.

SubQuestion No : 27

Q.27 How does a beaver ensure that its castle is well ventilated?

- Ans
- ☒ 1. The timber is piled upto ten feet high on the castle.
 - ☒ 2. The long stems are gnawed into small sections.
 - ☒ 3. The upper logs are loosely placed.
 - ☒ 4. The logs are covered with earth and plants.

Question ID : 685582450

Status : Answered

Chosen Option : 3

Comprehension:

Read the given passage and answer the questions that follow.

The beaver had made a dam about hundred yards long, and it had formed out of the quickly flowing stream, a wide stretch of water about twelve feet deep. The dam was so firm and broad that it was easy for me to walk along it. After a hundred and fifty yards I came to a 'beaver's castle'- a great heap of logs skilfully fitted together, the lower part covered with earth and plants. The upper logs were put loosely together so that the air could pass through to the interior.

In the late autumn, before land and water are covered with snow and ice, the beaver has to make its dwelling frostproof. It collects young trees and gnaws the stems in a double cone until the tree falls. Then the long stems are gnawed into small sections, the thin twigs bitten off and the logs are dragged to the dwelling. There, the timber is piled on the castle, sometimes to a height of ten or twelve feet. Mud is brought up from the bottom of the lake and packed between the logs with the animal's clever forepaws. The interior is lined with the finest wood shavings. In this tall shelter, the beaver remains high and dry, and protected from frost throughout the winter.

The only access to the dwelling is under the water, and even the forest wolves are not able to pull the firm building apart. The water is the beaver's element. On land it moves slowly and awkwardly. Thus, it is vital for the beaver to have water in which it can swim, and where nature has not provided this condition for it, it creates it with its dam.

The beaver's activities can change whole landscapes. With this dam, for instance, on which I was standing, beavers had turned a whole wooded alley into a lake; trees that stood there had been killed by the water and had disappeared. Aquatic game had settled there. Ducks swam past us, and great must have been the number of fish, as swarms of trout had swum past me in the clear stream. Wide stretches of meadow had come into existence on the banks, with flat landing places to which the well-beaten beaver tracks led. Many years of building, gnawing and dragging must have gone into the completion of this immense task, creating a new region for the beaver to live in.

SubQuestion No : 28

Q.28 The beavers can change the landscape by:

- Ans
- ☒ 1. building castles with great heaps of logs.
 - ☒ 2. dragging the logs of wood to the dwelling.
 - ☒ 3. building dams that can convert a wooded alley into a lake.
 - ☒ 4. swimming in the water along with ducks and trouts.

Question ID : 685582453
Status : Answered
Chosen Option : 3

Q.29 Select the most appropriate meaning of the underlined idiom in the given sentence.

The abrogation of article 370 was achieved in the teeth of tough resistance.

- Ans
- ☒ 1. in a state of uncertainty
 - ☒ 2. in a short span of time
 - ☒ 3. in direct opposition to
 - ☒ 4. in collaboration with

Question ID : 685582438
Status : Answered
Chosen Option : 3

Q.30 Select the most appropriate meaning of the underlined idiom in the given sentence.

He is completely at sea about where to invest his hard-earned money.

- Ans
- ☒ 1. confused
 - ☒ 2. sure
 - ☒ 3. in shock
 - ☒ 4. committed

Question ID : 685582436
Status : Answered
Chosen Option : 1

Q.31 Select the most appropriate option to fill in the blank.

Due to shortage of time, I was unable _____ the task satisfactorily.

- Ans
- ☒ 1. from complete
 - ☒ 2. in completing
 - ☒ 3. to complete
 - ☒ 4. for completing

Question ID : 685582413
Status : Answered
Chosen Option : 3

Q.32 Identify the segment that contains a grammatical error. If there is no error, select 'No error'

Either of the two supervisors were supposed to be present at the site.

- Ans
- ☒ 1. No error
 - ☒ 2. were supposed to be
 - ☒ 3. the two supervisors
 - ☒ 4. present at the site

Question ID : 685582407
Status : Answered
Chosen Option : 2

Q.33 Select the most appropriate synonym of the given word.

DISCERN

- Ans
- ☒ 1. Neglect
 - ☒ 2. Perceive
 - ☒ 3. Daunt
 - ☒ 4. Disregard

Question ID : 685582424
Status : Not Answered
Chosen Option : --

Q.34 Select the most appropriate option to substitute the underlined segment. If no substitution is required select 'No substitution'

She availed of the big discounts at the sale.

- Ans
- ☒ 1. No substitution
 - ☒ 2. She availed for a
 - ☒ 3. She availed herself of the
 - ☒ 4. She availed on the

Question ID : 685582412
Status : Answered
Chosen Option : 4

Q.35 Select the wrongly spelt word.

- Ans
- ☒ 1. Allergy
 - ☒ 2. Reliant
 - ☒ 3. Gluton

☒ 4. Eliminate

Question ID : 685582446
Status : Answered
Chosen Option : 3

Q.36 Select the most appropriate meaning of the underlined idiom in the given sentence.

The thieves made off with all the cash and jewellery in the house.

- Ans
- ☒ 1. squandered
 - ☒ 2. ran away with
 - ☒ 3. discovered
 - ☒ 4. transferred

Question ID : 685582434
Status : Answered
Chosen Option : 1

Q.37 Select the most appropriate antonym of the given word.

REPUGNANT

- Ans
- ☒ 1. Sombre
 - ☒ 2. Odious
 - ☒ 3. Austere
 - ☒ 4. Pleasant

Question ID : 685582433
Status : Answered
Chosen Option : 4

Q.38 Select the most appropriate meaning of the underlined idiom in the given sentence.

As the flood waters hit the coastal village, several families had a close shave.

- Ans
- ☒ 1. to have no livelihood
 - ☒ 2. to lose all possessions
 - ☒ 3. nothing to eat
 - ☒ 4. a narrow escape

Question ID : 685582437
Status : Answered
Chosen Option : 4

Q.39 Select the most appropriate option to fill in the blank.

I who _____ your friend and wellwisher, should have been informed about your decision.

- Ans
- ☒ 1. is
 - ☒ 2. am
 - ☒ 3. are
 - ☒ 4. be

Question ID : 685582416
Status : Answered

Chosen Option : 2

Q.40 Identify the segment that contains a grammatical error. If there is no error, select 'No error'

We will have to walk now since we had missed the bus.

- Ans
- ☒ 1. walk now
 - ☒ 2. We will have to
 - ☒ 3. No error
 - ☒ 4. since we had

Question ID : 685582404

Status : Answered

Chosen Option : 4

Q.41 Select the most appropriate meaning of the underlined idiom in the given sentence.

Unless you are above board in your dealings, you will not be able to win the trust of your clients.

- Ans
- ☒ 1. bold and reckless
 - ☒ 2. smart and deceptive
 - ☒ 3. honest and frank
 - ☒ 4. exceptionally talented

Question ID : 685582435

Status : Answered

Chosen Option : 3

Q.42 Select the option which is the most appropriate one word substitution for the given group of words.

A protected place for birds and animals

- Ans
- ☒ 1. estuary
 - ☒ 2. sanctuary
 - ☒ 3. bunker
 - ☒ 4. island

Question ID : 685582440

Status : Answered

Chosen Option : 2

Q.43 Select the most appropriate antonym of the given word.

DEMEAN

- Ans
- ☒ 1. Belittle
 - ☒ 2. Ignore
 - ☒ 3. Admire
 - ☒ 4. Debase

Question ID : 685582429

Status : Answered

Chosen Option : 3

Q.44 Select the option which is the most appropriate one word substitution for the given group of

words.

A shortened form of a word or phrase

- Ans
- ☒ 1. pseudonym
 - ☒ 2. summary
 - ☒ 3. abbreviation
 - ☒ 4. precis

Question ID : 685582441
Status : Answered
Chosen Option : 3

Q.45 Select the most appropriate option to substitute the underlined segment. If no substitution is required select 'No substitution'

Even if he is a honest man, he has been accused of theft.

- Ans
- ☒ 1. Although he is an honest man
 - ☒ 2. No substitution
 - ☒ 3. Since he are an honest man
 - ☒ 4. Even though he is a honest man

Question ID : 685582408
Status : Answered
Chosen Option : 1

Q.46 Select the most appropriate synonym of the given word.

PERPETUATE

- Ans
- ☒ 1. Prevent
 - ☒ 2. Release
 - ☒ 3. Preserve
 - ☒ 4. Cease

Question ID : 685582427
Status : Answered
Chosen Option : 3

Q.47 Select the most appropriate option to substitute the underlined segment. If no substitution is required select 'No substitution'

If I would have a degree from the university, I would get a good job.

- Ans
- ☒ 1. If I am having the degree
 - ☒ 2. If I had a degree
 - ☒ 3. When I will have a degree
 - ☒ 4. No substitution

Question ID : 685582409
Status : Answered
Chosen Option : 2

Q.48 Select the wrongly spelt word.

- Ans
- ☒ 1. Millennium

- ☒ 2. Connoisseur
- ☒ 3. Sacrelegious
- ☒ 4. Manoeuvre

Question ID : 685582448
Status : Answered
Chosen Option : 3

Q.49 Select the most appropriate antonym of the given word.

PERTURB

- Ans ☒ 1. Fluster
- ☒ 2. Soothe
- ☒ 3. Confound
- ☒ 4. Commend

Question ID : 685582431
Status : Not Answered
Chosen Option : --

Q.50 Select the wrongly spelt word.

- Ans ☒ 1. Burglery
- ☒ 2. Aviary
- ☒ 3. Treasury
- ☒ 4. Nursery

Question ID : 685582445
Status : Answered
Chosen Option : 1