

SSC CPO Tier-I

Previous Year Paper
(12 December 2019 shift 1)
English

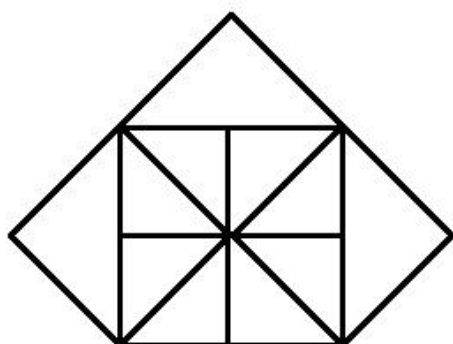
www.freshersnow.com

SI in CAPFs, ASI in CISF and SI in Delhi Police Examination-2019 (Paper-I)

Roll Number	
Candidate Name	
Exam Venue	
Exam Date	12/12/2019
Exam Time	10:00 AM - 12:00 PM
Subject	SI CPO Examination 2019

Section : General Intelligence and Reasoning

Q.1 How many triangles are there in the given figure?



- Ans
- ☒ 1. 20
 - ☒ 2. 15
 - ☒ 3. 17
 - ☒ 4. 19

Question ID : 864407913

Status : Answered

Chosen Option : 3

Q.2 Select the option that will fill in the blank and complete the given series.

CDZ, DGE, EJJ, FMO, GPT, _____

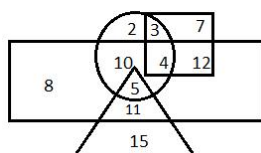
- Ans
- ☒ 1. HSY
 - ☒ 2. HRZ
 - ☒ 3. GRY
 - ☒ 4. IQX

Question ID : 864407876

Status : Answered

Chosen Option : 1

Q.3 In the Venn diagram given below, the circle represents 'North Indian', the triangle represents 'Pianists', the rectangle represents 'Males' and the square represents 'Engineers'. The numbers given in the diagram represents number of persons of that particular category. Who among the following is a female, North Indian, Engineer?



- Ans
- ☒ 1. 5
 - ☒ 2. 3

☒ 3. 2
☒ 4. 7

Question ID : 864407924
 Status : Not Answered
 Chosen Option : --

Q.4 Select the option that will fill in the blank and complete the given series.

7, 16, 40, 84, _____, 252

Ans ☒ 1. 153
☒ 2. 149
☒ 3. 150
☒ 4. 151

Question ID : 864407897
 Status : Not Answered
 Chosen Option : --

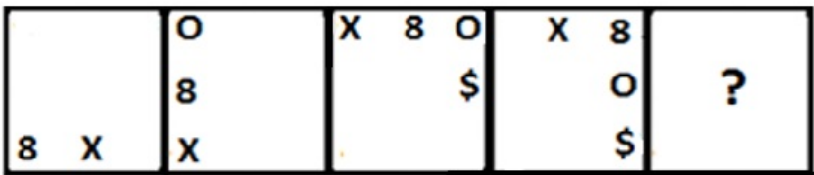
Q.5 Which two signs need to be interchanged to make the following equation correct?

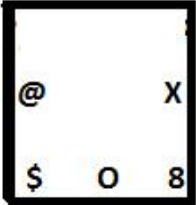
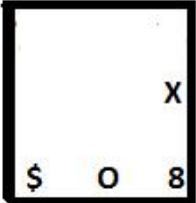
$45 - 9 \div 3 + 5 \times 6 = 32$

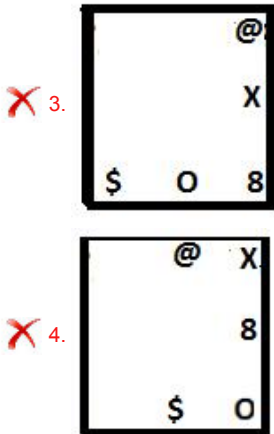
Ans ☒ 1. \times and +
☒ 2. \div and +
☒ 3. \times and \div
☒ 4. \div and -

Question ID : 864407909
 Status : Not Answered
 Chosen Option : --

Q.6 Select the figure that will come next in the following figure series.

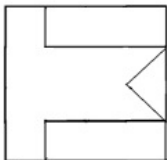


Ans ☒ 1. 
☒ 2. 

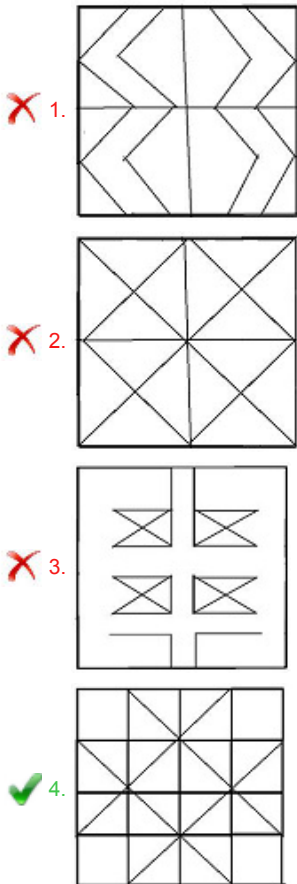


Question ID : 864407911
Status : Answered
Chosen Option : 1

Q.7 Select the option in which the given figure is embedded. (Rotation is NOT allowed)



Ans



Question ID : 864407916
Status : Answered
Chosen Option : 4

Q.8 Seven professionals are standing in a row. A journalist is to the immediate right of a pharmacist and to the immediate left of a teacher. An advocate is on the immediate right of an accountant. The advocate and pharmacist have one person between them. The teacher and a doctor have two persons between them. An architect and the pharmacist have two persons between them. Who is in the middle?

- Ans
- ☒ 1. Teacher
 - ☒ 2. Journalist
 - ☒ 3. Pharmacist
 - ☒ 4. Doctor

Question ID : 864407921
Status : Answered
Chosen Option : 3

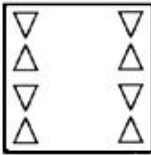
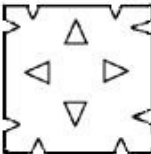
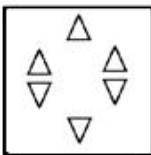
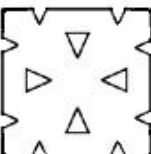
Q.9 In a certain code language, 'MACHINE' is written as 'N5XS3M4'. How will 'PREDICT' be written as in that language?

- Ans
- ☒ 1. JI4V3YG
 - ☒ 2. KI2W3YF
 - ☒ 3. KI4W3XG
 - ☒ 4. K34W3XH

Question ID : 864407890
Status : Not Answered
Chosen Option : --

Q.10 The sequence of folding a piece of paper and the manner in which the folded paper has been cut is shown in the following figures. How would this paper look when unfolded?



- Ans
- ☒ 1. 
 - ☒ 2. 
 - ☒ 3. 
 - ☒ 4. 

Question ID : 864407919
Status : Answered
Chosen Option : 4

Q.11 Select the option in which the words share the same relationship as that shared by the given pair of words.

Fatigue : Rest

- Ans
- ☒ 1. Disease : Medicine
 - ☒ 2. Darkness : Night
 - ☒ 3. Food : Hunger

Question ID : 864407885
Status : Answered
Chosen Option : 2

Q.12 If '+' means '-', '-' means 'x', 'x' means '÷' and '÷' means '+', then what will be the value of the following expression?

$$27 - 2 + 24 \times 8 \div 4$$

- Ans
- ✓ 1. 55
 - ✗ 2. 45
 - ✗ 3. 51
 - ✗ 4. 50

Question ID : 864407908
Status : Answered
Chosen Option : 1

Q.13 Which of the option figures is the exact mirror image of the given problem figure when the mirror is held to the right side of the problem figure?

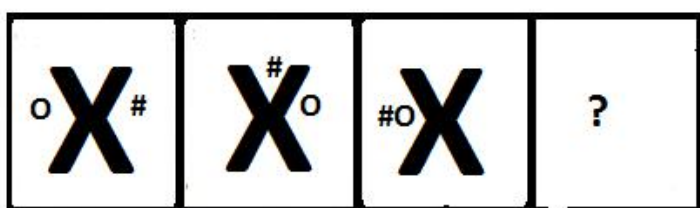
Problem Figure:

LVN35ER24

- Ans
- ✗ 1. 4SR35ENVJ
 - ✓ 2. 4SR35ENVJ
 - ✗ 3. 4SR35ENVJ
 - ✗ 4. 4SR35ENVJ


Question ID : 864407917
Status : Answered
Chosen Option : 2

Q.14 Select the figure that will come next in the following figure series.



- Ans
- ✗ 1.
 - ✓ 2.

3.



4.



Question ID : 864407912

Status : Answered

Chosen Option : 2

Q.15 'Link' is related to 'Chain' in the same way as 'Bead' is related to '_____'.
 Ans

1. Sea

2. Pearl

3. Jewellery

4. Necklace

Question ID : 864407883

Status : Answered

Chosen Option : 4

Q.16 Four numbers have been given out of which three are alike in some manner, while one is different. Choose the odd one.

Ans 1. 171

2. 169

3. 195

4. 91

Question ID : 864407901

Status : Answered

Chosen Option : 2

Q.17 Read the given statements and conclusions carefully. Assuming that the information given in the statements is true, even if it appears to be at variance with commonly known facts, decide which of the given conclusions logically follow(s) from the statements.

Statements:

I. Some appliances are electronic.

II. Some electronics are tube lights.

Conclusions:

I. Some appliances are tube lights.

II. No tube light is an appliance.

Ans 1. Only conclusion I follows.

2. Neither conclusion I nor II follows.

3. Only conclusion II follows.

4. Either conclusion I or II follows.

Question ID : 864407894

Status : Answered

Chosen Option : 4

Q.18 Select the option that is related to the third term in the same way as the second term is related to the first term.

WARDROBE : AWDROEB :: AQUARIUM : ?

- Ans
- ☒ 1. UQAAIRMU
 - ☒ 2. MUIRRAUQA
 - ☒ 3. QAAUIRMU
 - ☒ 4. QAAIURMU

Question ID : 864407888
Status : Answered
Chosen Option : 3

Q.19 चार शब्द दिए गए हैं, जिनमें से तीन किसी तरह से समान हैं, जबकि एक असंगत है। असंगत का चयन करें।

- Ans
- ☒ 1. त्रुटि
 - ☒ 2. मरम्मत
 - ☒ 3. दोष
 - ☒ 4. गलती

Question ID : 864407881
Status : Answered
Chosen Option : 2

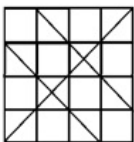
Q.20 Select the option that is related to the third term in the same way as the second term is related to the first term.

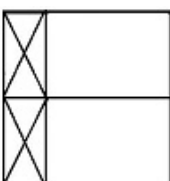
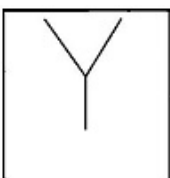
HOSPITAL : JLWKOMIC :: MEDICINE : ?

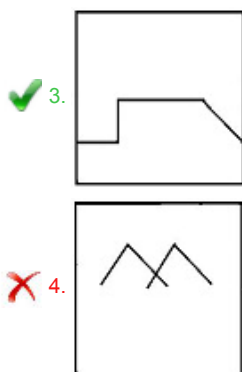
- Ans
- ☒ 1. OBHDIBVW
 - ☒ 2. PBIHIBWV
 - ☒ 3. PCHDIBWV
 - ☒ 4. OBHDIBVV

Question ID : 864407887
Status : Answered
Chosen Option : 4

Q.21 Select the option that is embedded in the given figure. (Rotation is NOT allowed)



- Ans
- ☒ 1. 
 - ☒ 2. 



Question ID : 864407915
Status : Answered
Chosen Option : 3

Q.22 उस विकल्प का चयन करें जिसमें निम्नलिखित शब्द उसी तरह से संबंधित हैं जो संबंध दिए गए शब्दों के युग्म का है।

पत्तियाँ : सरसराहट

- Ans ✓ 1. बारिश : टिप - टिप
- ✗ 2. घंटी : मंदिर
- ✗ 3. सियार : गर्जन
- ✗ 4. नगाड़ा : झनक

Question ID : 864407886
Status : Answered
Chosen Option : 1

Q.23 Four pairs of numbers have been given, out of which three are alike in some manner, while one is different. Choose out the odd one.

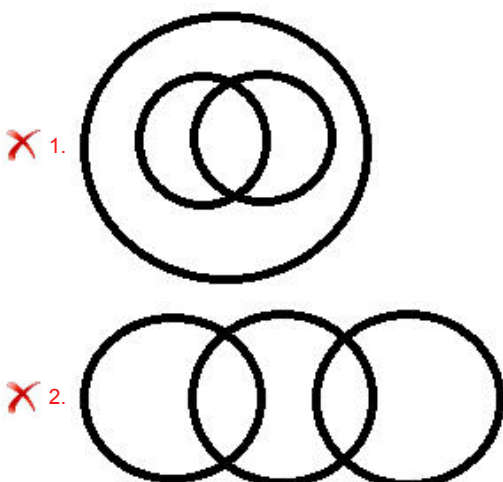
- Ans ✓ 1. 73 - 79
- ✗ 2. 31 - 41
- ✗ 3. 61 - 71
- ✗ 4. 83 - 97

Question ID : 864407902
Status : Answered
Chosen Option : 4

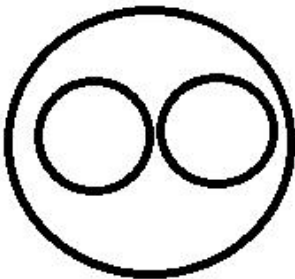
Q.24 Select the Venn diagram that best represents the relationship between the following classes.

Copper, Metal, Iron

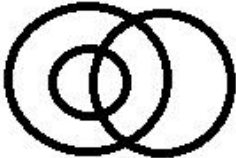
Ans



✓ 3.

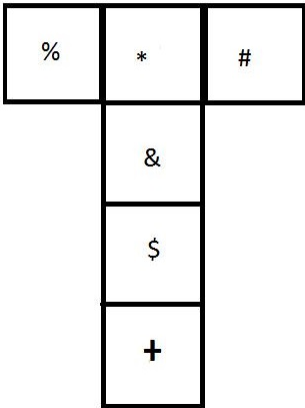


✗ 4.



Question ID : 864407922
 Status : Answered
 Chosen Option : 3

Q.25 A cube is made by folding the given sheet. In the cube so formed, what would be the symbol on the opposite side of '+'?



- Ans
- ✗ 1. #
 - ✗ 2. %
 - ✗ 3. \$
 - ✓ 4. &

Question ID : 864407914
 Status : Answered
 Chosen Option : 4

Q.26 Four pairs of numbers have been given, out of which three are alike in some manner, while one is different. Choose out the odd one.

- Ans
- ✗ 1. 34 - 289
 - ✗ 2. 16 - 64
 - ✓ 3. 26 - 168
 - ✗ 4. 18 - 81

Question ID : 864407904
 Status : Not Answered
 Chosen Option : --

Q.27 Which of the given options would be a logical sequence of the following words?

1. Primary
2. Kinder Garten
3. University
4. Secondary
5. Higher Secondary

- Ans ☒ 1. 2, 1, 5, 3, 4
☒ 2. 3, 1, 5, 2, 4
☒ 3. 5, 3, 1, 4, 2
☒ 4. 2, 1, 4, 5, 3

Question ID : 864407878
Status : Answered
Chosen Option : 4

Q.28 The statements are given followed by two conclusions I and II. Consider the given statements as true and decide which of the given conclusions logically follow/s from the given statements.

Statements:
United Nation has adopted 21st June as world Yoga day. This has promoted India's glorious tradition all over the world.

Conclusions:
I. Yoga is practiced only on 21st June.
II. More people are coming to India now to practice Yoga.

- Ans ☒ 1. Neither conclusion I nor II follows.
☒ 2. Only conclusion II follows.
☒ 3. Only conclusion I follows.
☒ 4. Both conclusions I and II follow.

Question ID : 864407893
Status : Answered
Chosen Option : 2

Q.29 Select the option in which the numbers do NOT share the same relationship as that shared by the given pair of numbers.

(98, 107, 125)

- Ans ☒ 1. (122, 131, 149)
☒ 2. (319, 328, 346)
☒ 3. (73, 82, 99)
☒ 4. (29, 38, 56)

Question ID : 864407905
Status : Answered
Chosen Option : 4

Q.30 Four pairs of numbers have been given, out of which three are alike in some manner, while one is different. Choose out the odd one.

- Ans ☒ 1. 18 : 306
☒ 2. 13 : 182
☒ 3. 23 : 552
☒ 4. 25 : 650

Question ID : 864407903
Status : Answered
Chosen Option : 1

Q.31 Select the option that is related to the third number in the same way as the second number is related to the first number.

104 : 117 :: 216 : ?

- Ans ☒ 1. 243
☒ 2. 245

✗ 3. 234

✗ 4. 342

Question ID : 864407898
Status : Not Answered
Chosen Option : --

Q.32 Select the correct combination of mathematical signs to replace * signs and to balance the following equation.

$$(18 * 9 * 14) * 37 * 4$$

Ans ✗ 1. $- \div \times =$

✗ 2. $\times \div - =$

✗ 3. $\div - \times =$

✓ 4. $\times - \div =$

Question ID : 864407907
Status : Not Answered
Chosen Option : --

Q.33 Select the option that is related to the third term in the same way as the second term is related to the first term.

Monk : Monastery :: Knight : ?

Ans ✗ 1. Stable

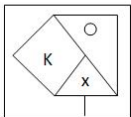
✗ 2. Cottage

✗ 3. Convent

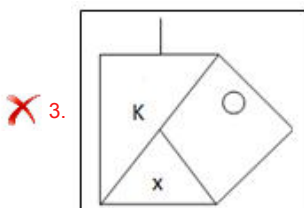
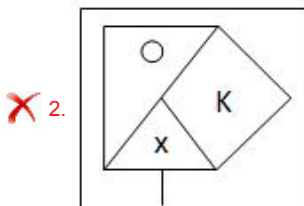
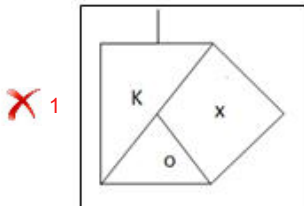
✓ 4. Mansion

Question ID : 864407884
Status : Answered
Chosen Option : 1

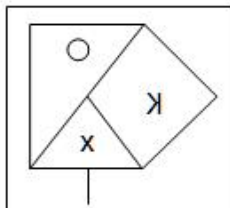
Q.34 Which of the option figures is the exact mirror image of the given problem figure when the mirror is held to the right side of the problem figure?



Ans



✓ 4.



Question ID : 864407918

Status : Answered

Chosen Option : 4

Q.35 If each of the letters in the English alphabet is assigned odd numerical value beginning with A = 1, B = 3 and so on, what will be the total value of the letters of the word NOMINAL?

Ans ✓ 1. 149

✗ 2. 144

✗ 3. 146

✗ 4. 150

Question ID : 864407891

Status : Not Answered

Chosen Option : --

Q.36 Ameeta walks 20 m towards the north and then turns right and walks 30 m. Then she turns left and walks 25 m. After that she turns right and walks 30 m. From there, she turns right and walks 65 m. Then she again turns left and walks 40 m. She finally turns left and walks 20 m. How far is she from her home now and in which direction with reference to her home?

Ans ✗ 1. 20 m, West

✓ 2. 100 m, East

✗ 3. 20 m, East

✗ 4. 40 m, South

Question ID : 864407920

Status : Answered

Chosen Option : 2

Q.37 Identify the number that does NOT related to the following series.

25, 28, 23, 30, 21, 33

Ans ✗ 1. 23

✗ 2. 21

✓ 3. 33

✗ 4. 30

Question ID : 864407895

Status : Answered

Chosen Option : 3

Q.38 Four words have been given out of which three are alike in some manner, while one is different. Choose the odd one.

Ans ✗ 1. Car

✗ 2. Bus

✗ 3. Aeroplane

✓ 4. Petrol

Question ID : 864407882



Q.39 Select the option that will fill in the blank and complete the given series.

6, 10, 19, 35, 60, _____

- Ans ☒ 1. 98
☒ 2. 95
☒ 3. 93
☒ 4. 96

Question ID : 864407896
Status : **Answered**
Chosen Option : 4

Q.40 In a certain code language, 'REQUEST' is written as '22-21-7-23-19-7-20'. How will 'SWITCH' be written as in that language?

- Ans ☒ 1. 21-25-11-22-5-10
☒ 2. 19-23-11-22-5-8
☒ 3. 10-5-20-11-25-21
☒ 4. 10-5-22-11-25-21

Question ID : 864407892
Status : **Answered**
Chosen Option : 4

Q.41 Study the given pattern carefully and select the number that can replace the question mark (?) in it.

15	196	14
18	255	?
7	96	16

- Ans ☒ 1. 8
☒ 2. 12
☒ 3. 15
☒ 4. 13

Question ID : 864407906
Status : **Answered**
Chosen Option : 3

Q.42 In a certain code language, O is written as R, R is written as A, A is written as I, I is written as N, N is written as E, E is written as P, P is written as T, C is written as M and L is written as L. How will PORCELAIN be written as in that language?

- Ans ☒ 1. ERAMPLINT
☒ 2. TAMRPLINE
☒ 3. PLINETRAM
☒ 4. TRAMPLINE

Question ID : 864407889
Status : **Answered**
Chosen Option : 4





Q.43 Four pairs of letter-cluster have been given out of which three are alike in some manner, while one is different. Choose the odd one.

- Ans ☒ 1. QSU – JHF
☒ 2. EGI – VTR
☒ 3. NOQ – MLK

 4. BEG – YVT

Question ID : 864407879
Status : Answered
Chosen Option : 1

Q.44 Four letter-cluster have been given out of which three are alike in some manner, while one is different. Choose the odd one.

- Ans  1. QFW
 2. MLY
 3. DGK
 4. ENR

Question ID : 864407880
Status : Not Answered
Chosen Option : --

Q.45 Select the option in which the numbers share the same relationship as that shared by the given pair of numbers.

72 - 14

- Ans  1. 45 - 20
 2. 92 - 17
 3. 36 - 19
 4. 81 - 80

Question ID : 864407900
Status : Answered
Chosen Option : 1

Q.46 Select the option that is related to the fifth number in the same way as the second number is related to the first number and the fourth number is related to the third number.

14 : 98 :: 18 : 162 :: 26 : ?

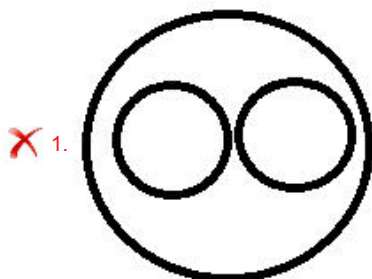
- Ans  1. 328
 2. 345
 3. 262
 4. 338

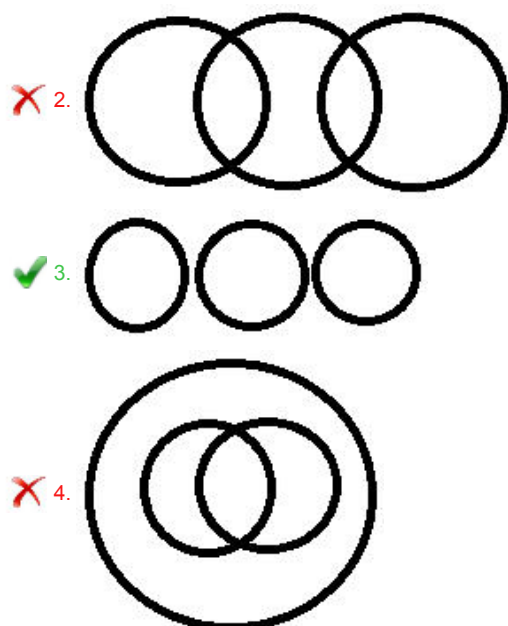
Question ID : 864407899
Status : Not Answered
Chosen Option : --

Q.47 Select the Venn diagram that best represents the relationship between the following classes.

Flowers, Stems, Roots

Ans





Question ID : 864407923
Status : Answered
Chosen Option : 2

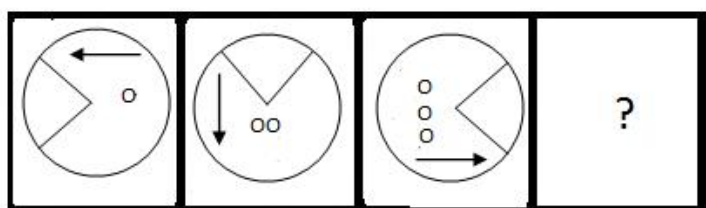
Q.48 Select the letter that can replace the question mark (?) in the following series.

X, U, P, M, ?, E

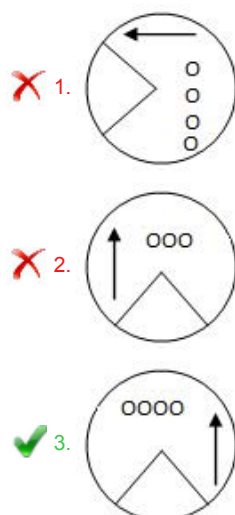
- Ans
- 1. K
 - 2. H
 - 3. I
 - 4. J

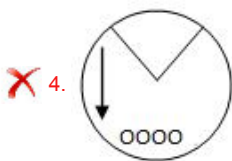
Question ID : 864407875
Status : Answered
Chosen Option : 2

Q.49 Select the figure that will come next in the following figure series.



Ans





Question ID : 864407910
Status : Answered
Chosen Option : 3

Q.50 Arrange the following words in the order in which they appear in an English dictionary.

1. Appear
2. Apparent
3. Apostle
4. Apology
5. Appetite

Ans ☒ 1. 5, 4, 3, 1, 2
☒ 2. 3, 5, 4, 1, 2
☒ 3. 4, 3, 2, 1, 5
☒ 4. 5, 3, 4, 1, 2

Question ID : 864407877
Status : Answered
Chosen Option : 3

Section : General Knowledge and General Awareness

Q.1 Who among the following was the first army officer of Independent India to be conferred the rank of Field Marshal?

Ans ☒ 1. Om Prakash Malhotra
☒ 2. Gopal Gurunath Bewoor
☒ 3. Tapishwar Narain Raina
☒ 4. Sam Manekshaw

Question ID : 8644071009
Status : Not Answered
Chosen Option : --

Q.2 Which of the following nutrients stores maximum energy per gram?

Ans ☒ 1. Vitamins
☒ 2. Proteins
☒ 3. Fat
☒ 4. Roughage

Question ID : 864407988
Status : Not Answered
Chosen Option : --

Q.3 In which of the following states is Kardang Monastery situated?

Ans ☒ 1. Sikkim
☒ 2. Himachal Pradesh
☒ 3. Karnataka
☒ 4. West Bengal

Question ID : 864407979
Status : Not Answered

Q.4 Which Indian state has the second highest population after Uttar Pradesh as per Census 2011?

- Ans
- ☒ 1. Bihar
 - ☒ 2. West Bengal
 - ☒ 3. Maharashtra
 - ☒ 4. Madhya Pradesh

Question ID : 8644071000

Status : Answered

Chosen Option : 2

Q.5 The blood vessels that carry blood from the heart to the various parts of the body are called:

- Ans
- ☒ 1. arteries
 - ☒ 2. veins
 - ☒ 3. septum
 - ☒ 4. capillaries

Question ID : 864407991

Status : Answered

Chosen Option : 1

Q.6 Lactometers (used to determine the purity of a sample of milk) and hydrometers (used to determine the density of liquids) are based on the _____ principle.

- Ans
- ☒ 1. Archimedes
 - ☒ 2. Special Relativity
 - ☒ 3. Relativity
 - ☒ 4. Uncertainty

Question ID : 864407993

Status : Answered

Chosen Option : 2

Q.7 Which female golfer has become the youngest Indian woman to win a Ladies European Tour (LET) title?

- Ans
- ☒ 1. Diksha Dagar
 - ☒ 2. Aditi Ashok
 - ☒ 3. Amandeep Drall
 - ☒ 4. Vani Kapoor

Question ID : 8644071012

Status : Not Answered

Chosen Option : --

Q.8 Which of the following personalities is NOT among the three Indians named in the Time's 2019 list of 100 most influential people?

- Ans
- ☒ 1. Indira Jaising
 - ☒ 2. Arundhati Katju
 - ☒ 3. Menaka Guruswamy
 - ☒ 4. Mukesh Ambani

Question ID : 8644071011

Status : Not Answered

Q.9 In which province of Pakistan is the site of the ancient civilisation of Mohenjo Daro located?

- Ans
- ☒ 1. Balochistan
 - ☒ 2. Sindh
 - ☒ 3. Khyber Pakhtunkhwa
 - ☒ 4. Punjab

Question ID : 8644071008
Status : Answered
Chosen Option : 2

Q.10 What is the minimum amount which can be remitted through Real Time Gross Settlement (RTGS)?

- Ans
- ☒ 1. ₹2,00,000
 - ☒ 2. ₹1,00,000
 - ☒ 3. ₹5,00,000
 - ☒ 4. ₹3,00,000

Question ID : 864407980
Status : Not Answered
Chosen Option : --

Q.11 Name the Sikh Guru who developed the Gurmukhi script for writing the Punjabi language?

- Ans
- ☒ 1. Guru Ram Das
 - ☒ 2. Guru Hargobind
 - ☒ 3. Guru Tegh Bahadur
 - ☒ 4. Guru Angad

Question ID : 864407977
Status : Answered
Chosen Option : 2

Q.12 Who among the following is the author of the book 'What happened'?

- Ans
- ☒ 1. Shashi Tharoor
 - ☒ 2. Hillary Clinton
 - ☒ 3. Jean Dreze
 - ☒ 4. Shimon Peres

Question ID : 8644071014
Status : Not Answered
Chosen Option : --

Q.13 Who among the following British Prime Ministers had announced the Communal Award in 1932 during India's Freedom Movement?

- Ans
- ☒ 1. Herbert Henry Asquith
 - ☒ 2. Andrew Bonar Law
 - ☒ 3. David Lloyd George
 - ☒ 4. James Ramsay MacDonald

Question ID : 8644071006
Status : Answered
Chosen Option : 4

Q.14 Which among the following is a male part of a flower?

- Ans
- ☒ 1. Stigma
 - ☒ 2. Stamen
 - ☒ 3. Pistil
 - ☒ 4. Style

Question ID : 864407989
Status : Answered
Chosen Option : 2

Q.15 The Finance Commission is constituted by the President at the expiration of every _____ year.

- Ans
- ☒ 1. tenth
 - ☒ 2. seventh
 - ☒ 3. sixth
 - ☒ 4. fifth

Question ID : 8644071017
Status : Answered
Chosen Option : 3

Q.16 Which among the following gases is also known as 'Laughing Gas'?

- Ans
- ☒ 1. Sulphur dioxide
 - ☒ 2. Nitrogen oxide
 - ☒ 3. Carbon dioxide
 - ☒ 4. Carbon monoxide

Question ID : 864407995
Status : Answered
Chosen Option : 2

Q.17 The Prime Minister and the other Ministers of the Indian Union are appointed by the President under _____ of the Constitution of India.

- Ans
- ☒ 1. Article 70
 - ☒ 2. Article 79
 - ☒ 3. Article 75
 - ☒ 4. Article 85

Question ID : 8644071018
Status : Answered
Chosen Option : 3

Q.18 As per Census 2011, which state of India has the lowest sex ratio, i.e., number of females per 1000 males?

- Ans
- ☒ 1. Uttarakhand
 - ☒ 2. Haryana
 - ☒ 3. Bihar
 - ☒ 4. Maharashtra

Question ID : 864407997
Status : Answered
Chosen Option : 2

Q.19 Who among the following soccer stars bagged the FIFA's Best Men's Player Award

2019?

- Ans
- ☒ 1. Cristiano Ronaldo
 - ☒ 2. Neymar da Silva Santos Júnior
 - ☒ 3. Lionel Messi
 - ☒ 4. Luis Suarez

Question ID : 8644071022
Status : Answered
Chosen Option : 1

Q.20 Which botanist is credited with creating one of the first widely used natural systems of plant classification?

- Ans
- ☒ 1. Joseph Banks
 - ☒ 2. August Wilhelm Eichler
 - ☒ 3. Joseph Dalton Hooker
 - ☒ 4. Robert Brown

Question ID : 864407985
Status : Answered
Chosen Option : 4

Q.21 Which British Viceroy of India was associated with the Ilbert Bill enacted in 1884?

- Ans
- ☒ 1. Lord Ripon
 - ☒ 2. Lord Dufferin
 - ☒ 3. Lord Northbrook
 - ☒ 4. Lord Napier

Question ID : 8644071003
Status : Answered
Chosen Option : 2

Q.22 In which ocean is the island country Fiji situated?

- Ans
- ☒ 1. Indian Ocean
 - ☒ 2. Arctic Ocean
 - ☒ 3. Atlantic Ocean
 - ☒ 4. Pacific Ocean

Question ID : 864407998
Status : Answered
Chosen Option : 3

Q.23 As per Union Budget 2019-20, Indian economy is globally the _____ largest in Purchasing Power Parity (PPP) terms.

- Ans
- ☒ 1. fifth
 - ☒ 2. second
 - ☒ 3. third
 - ☒ 4. fourth

Question ID : 864407983
Status : Answered
Chosen Option : 4

Q.24 Which state is the largest producer of mica in India?

- Ans
- ☒ 1. Madhya Pradesh

- ☒ 2. Rajasthan
- ☒ 3. Jharkhand
- ☒ 4. Andhra Pradesh

Question ID : 8644071001
Status : Answered
Chosen Option : 3

Q.25 Fatwa-i-Alamgiri, a digest of Muslim laws, was written during the period of which of the following kings?

- Ans
- ☒ 1. Nadir Shah
 - ☒ 2. Aurangzeb
 - ☒ 3. Tipu Sultan
 - ☒ 4. Feroz Shah Tughlaq

Question ID : 8644071005
Status : Not Answered
Chosen Option : --

Q.26 Which of the following rivers has its origin in Mahabaleshwar?

- Ans
- ☒ 1. Kaveri
 - ☒ 2. Narmada
 - ☒ 3. Tapti
 - ☒ 4. Krishna

Question ID : 8644071002
Status : Not Answered
Chosen Option : --

Q.27 Who among the following has been selected for Padma Vibhushan Award under the category 'Trade and Industry-Infrastructure' for 2019?

- Ans
- ☒ 1. Ani kumar Manibhai Naik
 - ☒ 2. Atul Punj
 - ☒ 3. GV Sanjay Reddy
 - ☒ 4. Grandhi Mallikarjuna Rao

Question ID : 8644071013
Status : Answered
Chosen Option : 3

Q.28 With which of the following musical instruments is the musician Sikkil Mala Chandrasekhar associated?

- Ans
- ☒ 1. Flute
 - ☒ 2. Sitar
 - ☒ 3. Saraswati Veena
 - ☒ 4. Shehnai

Question ID : 864407975
Status : Not Answered
Chosen Option : --

Q.29 Who was the founder of Vakataka dynasty in the third century?

- Ans
- ☒ 1. Nagabhata
 - ☒ 2. Vindhyashakti

- ☒ 3. Pravarasena
- ☒ 4. Rudrasena



Question ID : 8644071004
Status : Answered
Chosen Option : 1

Q.30 In which city is the head office of the Insurance Regulatory and Development Authority of India (IRDAI) situated?

- Ans ☒ 1. Hyderabad
- ☒ 2. Mumbai
 - ☒ 3. Kolkata
 - ☒ 4. New Delhi

Question ID : 864407981
Status : Answered
Chosen Option : 2

Q.31 The famous dancer T Balasaraswati was an exponent of which of the following dance forms?

- Ans ☒ 1. Kuchipudi
- ☒ 2. Bharatanatyam
- ☒ 3. Kathak
 - ☒ 4. Kathakali

Question ID : 864407978
Status : Not Answered
Chosen Option : --

Q.32 In which state is the Sarhul festival celebrated?

- Ans ☒ 1. Gujarat
- ☒ 2. Chhattisgarh
 - ☒ 3. Assam
 - ☒ 4. Jharkhand

Question ID : 864407976
Status : Answered
Chosen Option : 4

Q.33 The part of the stem where a leaf arises is known as:

- Ans ☒ 1. node
- ☒ 2. tuber
 - ☒ 3. carpel
 - ☒ 4. bud

Question ID : 864407990
Status : Answered
Chosen Option : 4

Q.34 What is the minimum amount of monthly pension permissible under the Atal Pension Yojana?

- Ans ☒ 1. ₹4000
- ☒ 2. ₹1000
- ☒ 3. ₹2000

☒ 4. ₹3000



Question ID : 864407982
Status : Answered
Chosen Option : 2

Q.35 In which of the following parts of the human digestive system is the digestion of food completed?

- Ans ☒ 1. Small intestine
☒ 2. Large intestine
☒ 3. Mouth
☒ 4. Stomach

Question ID : 864407987
Status : Answered
Chosen Option : 2

Q.36 The President may issue a proclamation of emergency under Article 356 on receipt of a report from the _____ of a state.

- Ans ☒ 1. Governor
☒ 2. Chief Justice of the High Court
☒ 3. Speaker of the Legislative Assembly
☒ 4. Advocate-General

Question ID : 8644071015
Status : Answered
Chosen Option : 1

Q.37 According to Article 361 of the Constitution of India, a criminal proceeding cannot be instituted in a court against the _____ during his term of office.

- Ans ☒ 1. Prime Minister
☒ 2. Vice-President
☒ 3. Governor
☒ 4. Chief Minister

Question ID : 8644071019
Status : Answered
Chosen Option : 3

Q.38 _____ is the highest peak of the Satpura range.

- Ans ☒ 1. Jarga
☒ 2. Dhupgarh
☒ 3. Amarkantak
☒ 4. Delwara

Question ID : 864407999
Status : Answered
Chosen Option : 3

Q.39 Which of the following Indian wrestler has been ranked world number one in 86 kg category in the rankings issued in September 2019 by the International Wrestling Federation?

- Ans ☒ 1. Bajrang Punia
☒ 2. Rahul Aware
☒ 3. Ravi Dahiya

Question ID : 8644071024
Status : Answered
Chosen Option : 1

Q.40 Which one of the following is NOT a natural fibre?

- Ans ✓ 1. Terylene
✗ 2. Wool
✗ 3. Flax
✗ 4. Jute

Question ID : 864407986
Status : Answered
Chosen Option : 1

Q.41 The weight of an object on the moon is equal to _____ of its weight on the earth.

- Ans ✗ 1. 1/10th
✓ 2. 1/6th
✗ 3. 1/8th
✗ 4. 1/4th

Question ID : 864407992
Status : Answered
Chosen Option : 2

Q.42 As of October 2019, which of the following nations is at the top of the ICC World Test Championship table?

- Ans ✓ 1. India
✗ 2. Australia
✗ 3. South Africa
✗ 4. England

Question ID : 8644071023
Status : Answered
Chosen Option : 1

Q.43 The entire content of a living cell is known as _____ which includes the cytoplasm and the nucleus.

- Ans ✗ 1. mitochondria
✗ 2. lysosomes
✓ 3. protoplasm
✗ 4. cell membrane

Question ID : 864407996
Status : Answered
Chosen Option : 2

Q.44 Which of the following statements is correct?

- Ans ✓ 1. The first Lok Sabha was constituted in 1952.
✗ 2. The first Lok Sabha was constituted in 1947.
✗ 3. The first Lok Sabha was constituted in 1950.
✗ 4. The first Lok Sabha was constituted in 1948.

Question ID : 8644071020
Status : Answered
Chosen Option : 3



Q.45 The strongest muscle (based on its weight) of the body is the masseter muscle and is located in the:

- Ans
- ☒ 1. jaw
 - ☐ 2. hand
 - ☐ 3. chest
 - ☐ 4. thigh

Question ID : 864407994
Status : Answered
Chosen Option : 4

Q.46 Which leader of India's freedom movement was called the 'Grand Old Man of India'?

- Ans
- ☐ 1. Maulana Abul Kalam Azad
 - ☐ 2. Bal Gangadhar Tilak
 - ☐ 3. Lala Lajpat Rai
 - ☒ 4. Dadabhai Naoroji

Question ID : 8644071007
Status : Answered
Chosen Option : 4

Q.47 In 2019, which Indian became the youngest in the world to score a double hundred in 50-overs cricket including List A and ODIs?

- Ans
- ☒ 1. Yashasvi Jaiswal
 - ☐ 2. Shubman Gill
 - ☐ 3. Prithvi Shaw
 - ☐ 4. Abbas Ali Baig

Question ID : 8644071021
Status : Answered
Chosen Option : 3

Q.48 The Indian Administrative Service and the Indian Police Service are deemed to be services created by the Parliament under:

- Ans
- ☐ 1. Article 301
 - ☐ 2. Article 307
 - ☐ 3. Article 292
 - ☒ 4. Article 312

Question ID : 8644071016
Status : Not Answered
Chosen Option : --

Q.49 Which among the following former cricketers has been elected unopposed as the President of BCCI in 2019?

- Ans
- ☒ 1. Sourav Ganguly
 - ☐ 2. Sunil Gavaskar
 - ☐ 3. Dilip Vengsarkar
 - ☐ 4. Sachin Tendulkar

Question ID : 8644071010

Q.50 As per Ministry of Statistics and Programme Implementation, which state of India has the highest per capita income as of Sep 2019?

- Ans ☒ 1. Goa
☒ 2. Punjab
☒ 3. Tamil Nadu
☒ 4. Gujarat

Question ID : **864407984**
Status : **Answered**
Chosen Option : 3

Section : **Quantitative Aptitude**

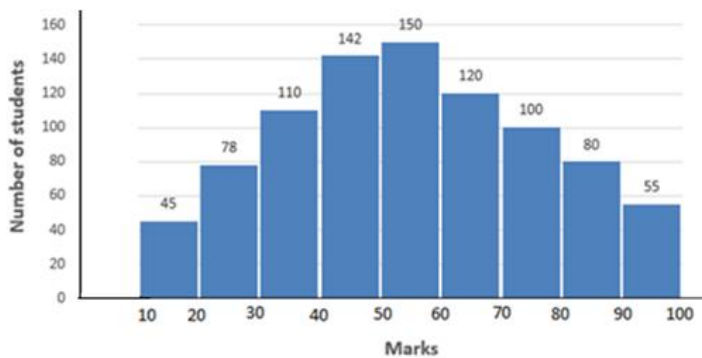
Q.1 A circle is inscribed in an equilateral triangle of side 24 cm. What is the area (in cm^2) of a square inscribed in the circle?

- Ans ☒ 1. 48
☒ 2. 72
☒ 3. 96
☒ 4. 54

Question ID : **864407950**
Status : **Answered**
Chosen Option : 2

Q.2 Study the given graph and answer the question that follows.

Distribution of marks obtained by students in an examination



The number of students who obtained 20 marks or more but less than 60 marks is:

- Ans ☒ 1. 402
☒ 2. 600
☒ 3. 480
☒ 4. 522

Question ID : **864407972**
Status : **Not Answered**
Chosen Option : --

Q.3 When 3738, 5659 and 9501 are divided by the greatest possible number x , the remainder in each case is y . What is the sum of x and y ?

- Ans ☒ 1. 3783

- ☒ 2. 3637
☒ 3. 3673
☒ 4. 3738

Question ID : 864407927
 Status : Not Answered
 Chosen Option : --

Q.4 Pipes A and B together can fill a tank in 16 hours, whereas pipe C alone can empty the full tank in 24 hours. A and B were opened together for 10 hours and then closed. Pipe C was then opened. The tank will now be emptied by C in:

- Ans** ☒ 1. 18 hours
☒ 2. 12 hours
☒ 3. 10 hours
☒ 4. 15 hours

Question ID : 864407946
 Status : Answered
 Chosen Option : 4

Q.5 A certain sum (in ₹) is invested at simple interest at $x\%$ p.a. for 5 years. Had it been invested at $(x + 5)\%$ p.a., the simple interest would have been ₹9,200 more than the earlier one. What is the sum?

- Ans** ☒ 1. ₹36,800
☒ 2. ₹36,400
☒ 3. ₹35,800
☒ 4. ₹40,000

Question ID : 864407942
 Status : Answered
 Chosen Option : 1

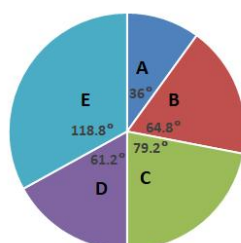
Q.6 The profit on selling an article for ₹1,100 is equal to three times the amount of loss on selling it for ₹700. To gain 12.5%, the article must be sold for:

- Ans** ☒ 1. ₹956
☒ 2. ₹877.50
☒ 3. ₹787.50
☒ 4. ₹900

Question ID : 864407939
 Status : Answered
 Chosen Option : 4

Q.7 Study the given pie chart and answer the question that follows.

Distribution (degree wise) of students studying in schools A, B, C, D & E
 Total number of students = 9000



The total number of students in schools D and E is what percentage more than the total number of students in schools B and C?

- Ans
- ☒ 1. 20
 - ☒ 2. 25
 - ☒ 3. 30
 - ☒ 4. 35

Question ID : 864407970
Status : Answered
Chosen Option : 2

Q.8 If $x^4 + x^2y^2 + y^4 = \frac{21}{256}$ and $x^2 + xy + y^2 = \frac{3}{16}$, then $2(x^2 + y^2) =$

- Ans
- ☒ 1. $\frac{3}{8}$
 - ☒ 2. $\frac{5}{8}$
 - ☒ 3. $\frac{3}{4}$
 - ☒ 4. $\frac{5}{16}$

Question ID : 864407957
Status : Answered
Chosen Option : 2

Q.9 If $2\sin\theta + 15\cos^2\theta = 7$, $0^\circ < \theta < 90^\circ$, then what is the value of $\frac{3-\tan\theta}{2+\tan\theta}$?

- Ans
- ☒ 1. $\frac{1}{4}$
 - ☒ 2. $\frac{3}{4}$
 - ☒ 3. $\frac{1}{2}$
 - ☒ 4. $\frac{5}{8}$

Question ID : 864407962
Status : Answered
Chosen Option : 4

Q.10 A right circular cone of largest volume is cut out from a solid wooden hemisphere. The remaining material is what percentage of the volume of the original hemisphere?

- Ans
- ☒ 1. 50%
 - ☒ 2. $33\frac{1}{3}\%$
 - ☒ 3. 75%
 - ☒ 4. $66\frac{2}{3}\%$

Question ID : 864407954
Status : Answered
Chosen Option : 2

Q.11 In $\triangle ABC$, $AB = c$ cm, $AC = b$ cm and $CB = a$ cm. If $\angle A = 2\angle B$, then which of the following is true?

- Ans
- ☒ 1. $a^2 = b^2 - bc$
 - ☒ 2. $a^2 = b^2 - ac$

✓ 3. $a^2 = b^2 + bc$

✗ 4. $a^2 = b^2 + ac$

Question ID : 864407961
Status : Answered
Chosen Option : 4

Q.12 The average of eleven numbers is 68. The average of the first four numbers is 78 and that of the next four numbers is 63. The 9th number is two times the 11th number and the 10th number is 4 less than the 11th number. What is the average of the 9th and 11th numbers?

Ans ✗ 1. 70.1

✗ 2. 72.2

✓ 3. 70.5

✗ 4. 72.6

Question ID : 864407933
Status : Answered
Chosen Option : 3

Q.13 In an office, 70% of the total number of employees are females. 80% of the total number of employees, including 85 males, got promotion. If there are 105 female employees, then what percentage of female employees got promotion?

Ans ✗ 1. 30%

✓ 2. $33\frac{1}{3}\%$

✗ 3. 40%

✗ 4. 35%

Question ID : 864407936
Status : Answered
Chosen Option : 2

Q.14 The average score of 42 students in a test is 69. The ratio of the number of boys to that of girls is 10 : 11. The average score of the boys is 20% more than that of the girls. The average score of the boys is:

Ans ✗ 1. 82.8

✓ 2. 75.6

✗ 3. 73.5

✗ 4. 75.2

Question ID : 864407932
Status : Not Answered
Chosen Option : --

Q.15 A is 40% more than B and B is 60% less than C. If C is 60% more than D, then which of the following is true?

Ans ✗ 1. C is 60% more than B.

✓ 2. B is 36% less than D.

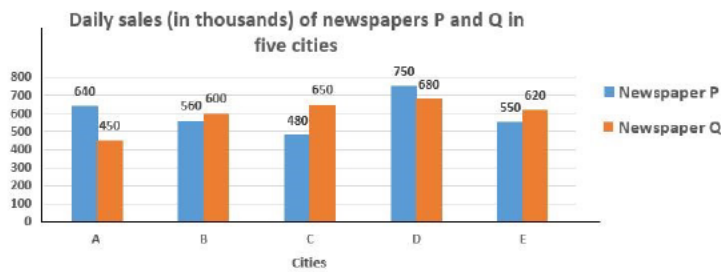
✗ 3. D is 10.4% more than A.

✗ 4. A is 54% less than C.

Question ID : 864407937
Status : Not Answered
Chosen Option : --

Q.16

Study the given graph and answer the question that follows.



In which city the daily sales of newspaper P is 1.25 times the average daily sales of newspaper Q in cities A, B, C, D and E?

- Ans
- ☒ 1. B
 - ☒ 2. D
 - ☒ 3. C
 - ☒ 4. A

Question ID : 864407967
Status : Answered
Chosen Option : 2

Q.17 A started a business with a capital of ₹1,12,000. After 2 months, B joined the business with a capital of ₹80,000, and after another 2 months, C joined the business with a capital of ₹72,000. After 10 months from the start of the business, B withdrew ₹8,000 and C also withdrew ₹8,000. If B received ₹9,800 as his share in the profit at the end of a year, then the total profit was:

- Ans
- ☒ 1. ₹30,800
 - ☒ 2. ₹35,800
 - ☒ 3. ₹32,400
 - ☒ 4. ₹33,600

Question ID : 864407941
Status : Not Answered
Chosen Option : --

Q.18 The value of $\frac{(0.13)^2 + (0.21)^2}{(0.39)^2 + 81(0.07)^2} \div \frac{(2.4)^4 + 3 \times (11.52) + 9}{(2.4)^6 + 6(2.4)^4 + 3 \times (17.28)}$ lies between:

- Ans
- ☒ 1. 0.7 and 0.8
 - ☒ 2. 0.4 and 0.5
 - ☒ 3. 0.6 and 0.7
 - ☒ 4. 0.5 and 0.6

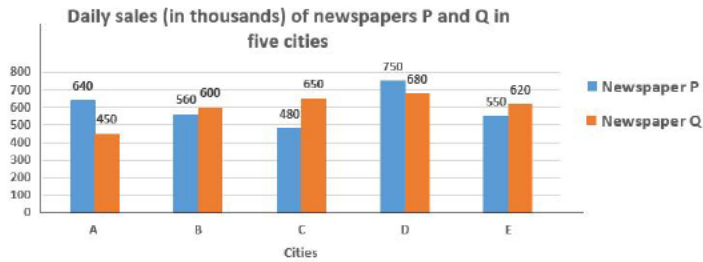
Question ID : 864407931
Status : Not Answered
Chosen Option : --

Q.19 An observer who is 1.62 m tall is 45 m away from a pole. The angle of elevation of the top of the pole from his eyes is 30° . The height (in m) of the pole is closest to:

- Ans
- ☒ 1. 26.8
 - ☒ 2. 25.8
 - ☒ 3. 26.2
 - ☒ 4. 27.6

Question ID : 864407964
Status : Answered
Chosen Option : 4

Q.20 Study the given graph and answer the question that follows.



The total daily sales of newspaper P in cities B, D and E is what percentage less than that of newspaper Q in cities A, C, D and E?

- Ans
- ☒ 1. 24.4
 - ☒ 2. 22.5
 - ☒ 3. 20.2
 - ☒ 4. 20.8

Question ID : 864407968
Status : Answered
Chosen Option : 2

Q.21 The value of $\sqrt{6 - \sqrt{17 - 2\sqrt{72}}}$ is closest to:

- Ans
- ☒ 1. 2.1
 - ☒ 2. 2.4
 - ☒ 3. 2.7
 - ☒ 4. 1.7

Question ID : 864407925
Status : Answered
Chosen Option : 2

Q.22 A works twice as fast as B and B works twice as fast as C. All three working together can finish a task in 4 days with the help of D. If D alone can finish the same task in 16 days, then in how many days will A alone finish 75% of the same task?

- Ans
- ☒ 1. 9
 - ☒ 2. 8
 - ☒ 3. 7
 - ☒ 4. 6

Question ID : 864407944
Status : Not Answered
Chosen Option : --

Q.23 A can finish one-third of a work in 5 days, B can finish $\frac{2}{5}$ th of the same work in 10 days and C can finish 75% of the same work in 15 days. They work together for 6 days. The remaining work will be finished by B alone in:

- Ans
- ☒ 1. 2 days
 - ☒ 2. $1\frac{1}{2}$ days
 - ☒ 3. 3 days
 - ☒ 4. 5 days

Question ID : 864407945
Status : Not Answered

Q.24 The volume of a solid right circular cylinder is 5236 cm^3 , and its height is 34 cm. What is its curved surface area (in cm^2)?

(Take $\pi = \frac{22}{7}$)

- Ans** ☒ 1. 1496
☒ 2. 1573
☒ 3. 1650
☒ 4. 1804

Question ID : 864407952

Status : Not Answered

Chosen Option : --

Q.25 The value of

$8 \div [(9 - 5) \div \{(4 \div 2 \text{ of } 4) - (8 \div 8 \text{ of } 16) + (4 \times 2 \div 8)\}]$ is:

- Ans** ☒ 1. $\frac{21}{8}$
☒ 2. $\frac{23}{8}$
☒ 3. $\frac{12}{23}$
☒ 4. $\frac{32}{23}$

Question ID : 864407929

Status : Not Answered

Chosen Option : --

Q.26 P is a point outside a circle and is 26 cm away from its centre. A secant PAB drawn from P intersects the circle at points A and B such that $PB = 32 \text{ cm}$ and $PA = 18 \text{ cm}$. The radius of the circle (in cm) is:

- Ans** ☒ 1. 12
☒ 2. 10
☒ 3. 13
☒ 4. 8

Question ID : 864407958

Status : Answered

Chosen Option : 3

Q.27 A conical vessel whose internal base radius is 18 cm and height 60 cm is full of a liquid. The entire liquid of the vessel is emptied into a cylindrical vessel with internal radius 15 cm. The height (in cm) to which the liquid rises in the cylindrical vessel is:

- Ans** ☒ 1. 30.2 cm
☒ 2. 28.8 cm
☒ 3. 27 cm
☒ 4. 24 cm

Question ID : 864407951

Status : Not Answered

Chosen Option : --

Q.28 The marked price of an article is ₹800. A retailer buys it for ₹540 after getting two successive discounts. The first discount is 25%. What is the second discount?

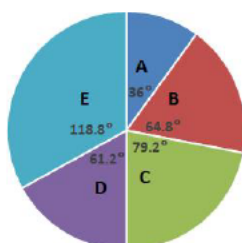
- Ans** ☒ 1. 8%

- ☒ 2. 12%
☒ 3. 10%
☒ 4. 15%

Question ID : 864407934
 Status : Answered
 Chosen Option : 3

Q.29 Study the given pie chart and answer the question that follows.

Distribution (degree wise) of students studying in schools A, B, C, D & E
 Total number of students = 9000



If the ratio of the number of boys to that of girls in school C is 6 : 5 and that in school B is 7 : 11, then what is the ratio of the number of boys in school C to the number of girls in school B?

- Ans ☒ 1. 10 : 11
☒ 2. 11 : 10
☒ 3. 12 : 11
☒ 4. 11 : 12

Question ID : 864407971
 Status : Not Answered
 Chosen Option : --

Q.30 If $\operatorname{cosec} \theta = 1.25$, then $\frac{4 \tan \theta - 5 \cos \theta + 1}{\sec \theta + 4 \cot \theta - 1} = ?$

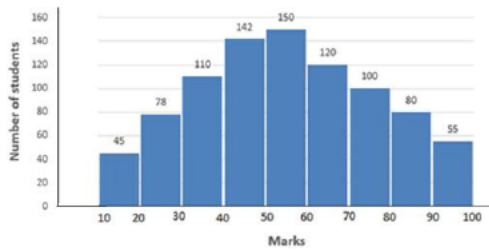
- Ans ☒ 1. $\frac{9}{10}$
☒ 2. 2
☒ 3. $\frac{10}{11}$
☒ 4. $\frac{1}{2}$

Question ID : 864407963
 Status : Answered
 Chosen Option : 3

Q.31

Study the given graph and answer the question that follows.

Distribution of marks obtained by students in an examination



If 60% of the total number of students obtaining 50 marks or more but less than 70 marks are girls and 55% of the total number of students obtaining 70 marks or more but less than 90 marks are also girls, then the total number of girls obtaining 50 marks or more but less than 90 marks is:

- Ans ☒ 1. 261
☒ 2. 207
☒ 3. 236
☒ 4. 257

Question ID : 864407974
 Status : Not Answered
 Chosen Option : --

Q.32 If $\frac{8x}{2x^2+7x-2} = 1$, $x > 0$, then what is the value of $x^3 + \frac{1}{x^3}$?

- Ans ☒ 1. $\frac{3}{8}\sqrt{17}$
☒ 2. $\frac{3}{4}\sqrt{17}$
☒ 3. $\frac{5}{8}\sqrt{17}$
☒ 4. $\frac{5}{4}\sqrt{17}$

Question ID : 864407955
 Status : Not Answered
 Chosen Option : --

Q.33 If a discount of 10% is allowed on the marked price of an article, a shopkeeper gets a profit of 25%. If he offers a discount of 25% on the marked price of the same article, then his percentage profit/loss will be:

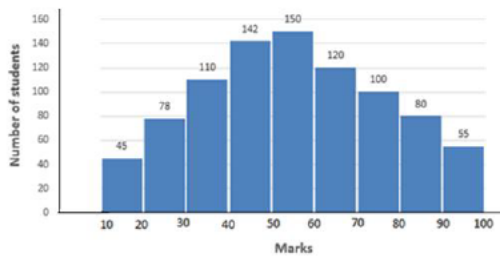
- Ans ☒ 1. 4% profit
☒ 2. $4\frac{1}{6}\%$ loss
☒ 3. $4\frac{1}{6}\%$ profit
☒ 4. 4% loss

Question ID : 864407935
 Status : Answered
 Chosen Option : 2

Q.34

Study the given graph and answer the question that follows.

Distribution of marks obtained by students in an examination



The total number of students obtaining less than 50 marks is what percentage more than the total number of students obtaining 60 marks or more (correct to one decimal place).

- Ans
- ☒ 1. 6.8
 - ☒ 2. 4.4
 - ☒ 3. 5.6
 - ☒ 4. 6.2

Question ID : 864407973
Status : Not Answered
Chosen Option : --

Q.35 A sum of ₹5,000 amounts to ₹7,200 in 8 years at a certain rate per cent p.a, interest compounded yearly. What will be the compound interest on a sum of ₹6,550 in 4 years at the same rate of interest?

- Ans
- ☒ 1. ₹1,290
 - ☒ 2. ₹1,285
 - ☒ 3. ₹1,415
 - ☒ 4. ₹1,310

Question ID : 864407943
Status : Not Answered
Chosen Option : --

Q.36 From the top of a lamp post of height x metres, two objects on the ground on the same side of it (and in line with the foot of the lamp post) are observed at angles of depression of 30° and 60° , respectively. The distance between the objects is $32\sqrt{3}$ m. The value of x is:

- Ans
- ☒ 1. 54
 - ☒ 2. 48
 - ☒ 3. 45
 - ☒ 4. 36

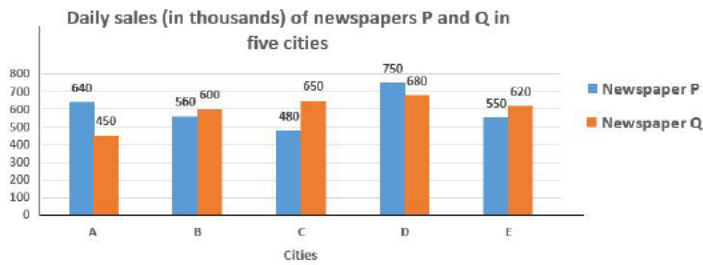
Question ID : 864407965
Status : Not Answered
Chosen Option : --

Q.37 ABCD is cyclic quadrilateral. Sides AB and DC, when produced, meet at E, and sides BC and AD, when produced, meet at F. If $\angle BFA = 60^\circ$ and $\angle AED = 30^\circ$, then the measure of $\angle ABC$ is:

- Ans
- ☒ 1. 65°
 - ☒ 2. 75°
 - ☒ 3. 70°
 - ☒ 4. 80°

Question ID : 864407959
Status : Not Answered

Q.38 Study the given graph and answer the question that follows.



What is the ratio of the total daily sales of newspaper P in cities A and C to the total daily sales of newspaper Q in cities B and D?

- Ans
- ☒ 1. 16 : 17
 - ☒ 2. 7 : 8
 - ☒ 3. 15 : 16
 - ☒ 4. 4 : 5

Question ID : 864407966

Status : Not Answered

Chosen Option : --

Q.39 Seven years ago, the ages (in years) of A and B were in the ratio 4 : 5 and 7 years hence, their ages will be in the ratio 5 : 6. What will be the ratio of their ages 5 years from now?

- Ans
- ☒ 1. 34 : 41
 - ☒ 2. 33 : 40
 - ☒ 3. 33 : 34
 - ☒ 4. 31 : 33

Question ID : 864407940

Status : Not Answered

Chosen Option : --

Q.40 Pipes A and B are emptying pipes and can empty a tank in 6 hours and 16 hours, respectively. C is a filling pipe. All the three pipes were opened together. They took 80 minutes to empty $\frac{5}{18}$ th of the tank. Pipe C alone can fill the tank in:

- Ans
- ☒ 1. 36 hours
 - ☒ 2. 42 hours
 - ☒ 3. 48 hours
 - ☒ 4. 40 hours

Question ID : 864407947

Status : Not Answered

Chosen Option : --

Q.41 Let x be the least number divisible by 13, such that when x is divided by 4, 5, 6, 7, 8 and 12, the remainder in each case is 2. The sum of the digits of x is:

- Ans
- ☒ 1. 10
 - ☒ 2. 11
 - ☒ 3. 9
 - ☒ 4. 8

Question ID : 864407928

Status : Not Answered

Chosen Option : --

Q.42

The value of $\frac{(3\frac{1}{3} - 2\frac{1}{2}) \div \frac{1}{4} \text{ of } 1\frac{1}{4}}{\frac{3}{10} + \frac{1}{6} \times \frac{1}{3}}$ of $\frac{4}{15} \div \frac{\frac{1}{3} \div \frac{1}{3} \text{ of } \frac{1}{9}}{\frac{1}{9} \times \frac{1}{3} \div \frac{1}{6}}$ is:

Ans

- ✓ 1. $\frac{4}{81}$
- ✗ 2. $\frac{2}{9}$
- ✗ 3. $\frac{9}{2}$
- ✗ 4. $\frac{27}{8}$

Question ID : 864407930

Status : Not Answered

Chosen Option : --

Q.43 If the 5-digit number 538xy is divisible by 3, 7 and 11, then the value of $(x^2 + y^2)$ is:

Ans

- ✗ 1. 25
- ✗ 2. 10
- ✗ 3. 17
- ✓ 4. 13

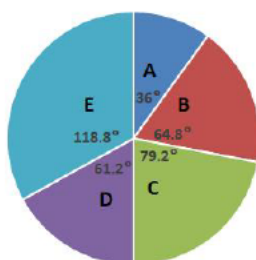
Question ID : 864407926

Status : Not Answered

Chosen Option : --

Q.44 Study the given pie chart and answer the question that follows.

Distribution (degree-wise) of students studying in schools A, B, C, D & E
Total number of students = 9000



The number of students in school E exceeds the total number of students in schools A and B by x , where x lies between:

Ans

- ✗ 1. 420 and 440
- ✓ 2. 440 and 460
- ✗ 3. 460 and 480
- ✗ 4. 400 and 420

Question ID : 864407969

Status : Not Answered

Chosen Option : --

Q.45 A person rows a distance of $3\frac{3}{4}$ km upstream in $1\frac{1}{2}$ hours and a distance of 13 km downstream in 2 hours. How much time (in hours) will the person take to row a distance of 90 km in still water?

Ans

- ✓ 1. 20
- ✗ 2. 18
- ✗ 3. 24

☒ 4. 15



Question ID : 864407949
Status : Not Answered
Chosen Option : --

Q.46 The speed of train A is 16 km/h less than the speed of train B. To cover a distance of 384 km, B takes 4 hours less time than A. What is the speed (in km/h) of train B?

- Ans ☒ 1. 50
☒ 2. 45
☒ 3. 48
☒ 4. 32

Question ID : 864407948
Status : Not Answered
Chosen Option : --

Q.47 In $\triangle ABC$, $\angle C = 90^\circ$ and D is a point on CB such that AD is the bisector of $\angle A$. If AC = 5 cm and BC = 12 cm, then what is the length of AD?

- Ans ☒ 1. $\frac{10}{3}$ cm
☒ 2. $\frac{5\sqrt{13}}{6}$ cm
☒ 3. $\frac{5\sqrt{13}}{3}$ cm
☒ 4. $\frac{20}{3}$ cm

Question ID : 864407960
Status : Not Answered
Chosen Option : --

Q.48 If $a = 500$, $b = 502$ and $c = 504$, then the value of $a^3 + b^3 + c^3 - 3abc$

- Ans ☒ 1. 15060
☒ 2. 12048
☒ 3. 18072
☒ 4. 17040

Question ID : 864407956
Status : Not Answered
Chosen Option : --

Q.49 The lengths of the parallel sides of a trapezium are 51 cm and 21 cm, and that of each of the other two sides is 39 cm. What is the area (in cm^2) of the trapezium?

- Ans ☒ 1. 1206
☒ 2. 1296
☒ 3. 1152
☒ 4. 1260

Question ID : 864407953
Status : Not Answered
Chosen Option : --

Q.50 If $66\frac{2}{3}\%$ of 75% of one-eighth of a certain number is 179, then $33\frac{1}{3}\%$ of three-fourth of that number is:

Ans

- ☒ 1. 537
- ☒ 2. 787.6
- ☒ 3. 859.2
- ☒ 4. 716

Question ID : 864407938
Status : Not Answered
Chosen Option : --

Section : English Comprehension

Q.1 Select the INCORRECTLY spelt word.

- Ans
- ☒ 1. aggregate
 - ☒ 2. acquisition
 - ☒ 3. acquaintance
 - ☒ 4. explanation

Question ID : 8644071070
Status : Answered
Chosen Option : 1

Q.2 Select the most appropriate option to fill in the blank.

The majority _____ that the country can progress under able leadership.

- Ans
- ☒ 1. have believed
 - ☒ 2. believe
 - ☒ 3. is believing
 - ☒ 4. believes

Question ID : 8644071038
Status : Answered
Chosen Option : 1

Q.3 Select the most appropriate synonym of the given word.

JEOPARDY

- Ans
- ☒ 1. protection
 - ☒ 2. prevention
 - ☒ 3. peril
 - ☒ 4. promotion

Question ID : 8644071048
Status : Answered
Chosen Option : 1

Q.4 Select the most appropriate option to substitute the underlined segment. If no substitution is required select 'No substitution'.

It would be wise to accept the company's offer lest you should regret later.

- Ans
- ☒ 1. lest you shall not regret
 - ☒ 2. lest you should not regret
 - ☒ 3. lest you would regret
 - ☒ 4. No substitution

Question ID : 8644071034
Status : Answered

Q.5 Select the most appropriate option to substitute the underlined segment. If no substitution is required select 'No substitution'.

His employees were asking him for a raise for a long time now.

- Ans
- ☒ 1. asked him for a rise
 - ☒ 2. No substitution
 - ☒ 3. are asking him of a raise
 - ☒ 4. have been asking him for a raise

Question ID : 8644071032

Status : Answered

Chosen Option : 4

Comprehension:

Read the given passage and answer the questions that follow.

Pollution befoils the air and poisons water. Pollution induces the release of toxicants into the biosphere which makes the air unsuitable for breathing, harms the quality of water and soil, and causes the emission of substances that may cause damage to humans, plants and animals.

To cater to the needs of an increasing population, agriculture has been intensified through the use of a wide spectrum of fertilizers and pesticides. Diverse industries have been set up to produce chemicals including those that pose a danger to all life forms.

Rapid industrialisation has led to deterioration in the quality of air. Widespread use of coal and fossil fuels in industries and petroleum fuel in motor vehicles has aggravated the air pollution problem. Our atmosphere seems to have become a waste basket into which dust, noxious fumes, toxic gases and other pollutants are callously thrown.

The intensity of air pollution in Indian cities is increasing primarily due to our vintage vehicles and their poor performance. Water pollution, too, has increased with the growth of our population and also that of our industries. Water pollution has acquired dangerous dimensions ever since sewage and industrial effluents have started being disposed of into the rivers. Once considered sacred, the rivers are now turning murky and stink. It is sad that almost three-fourths of our fellow citizens have no choice but to drink filthy water. The severely polluted rivers due to mindless dumping of sewage and industrial wastes are a cause for concern not only to us humans but also to myriads of life forms that exist in water.

On the French and Italian rivieras we can no longer see the sparkling blue waters. The Mediterranean Sea is reported to be turning grey. Rivers and canals pour sewage, detergents and industrial waste into the sea; tankers flush their contents near the river or sea; bottles, rotting garbage and oil slicks are washed into the beaches. The phosphates and nitrates applied to farmlands as inorganic fertilizers, concentrate in lakes and estuaries causing algal blooms due to which wide expanses of water get choked, plants rot, oxygen is used up and fish die.

SubQuestion No : 6

Q.6 Which of the following factors is responsible for algal blooms?

- Ans
- ☒ 1. Using up of oxygen dissolved in the water by algae
 - ☒ 2. Rotting of aquatic plants in lakes and estuaries
 - ☒ 3. Concentration of inorganic fertilizers in lakes
 - ☒ 4. Farmlands being located near lakes and estuaries

Question ID : 8644071075

Status : Answered

Chosen Option : 2

Comprehension:

Read the given passage and answer the questions that follow.

Pollution befoils the air and poisons water. Pollution induces the release of toxicants into the biosphere which makes the air unsuitable for breathing, harms the quality of water and soil, and causes the emission of substances that may cause damage to humans, plants and animals.

To cater to the needs of an increasing population, agriculture has been intensified through the use of a wide spectrum of fertilizers and pesticides. Diverse industries have been set up to produce chemicals including those that pose a danger to all life forms.

Rapid industrialisation has led to deterioration in the quality of air. Widespread use of coal and fossil fuels in industries and petroleum fuel in motor vehicles has aggravated the air pollution problem. Our atmosphere seems to have become a waste basket into which dust, noxious fumes, toxic gases and other pollutants are callously thrown.

The intensity of air pollution in Indian cities is increasing primarily due to our vintage vehicles

and their poor performance. Water pollution, too, has increased with the growth of our population and also that of our industries. Water pollution has acquired dangerous dimensions ever since sewage and industrial effluents have started being disposed of into the rivers. Once considered sacred, the rivers are now turning murky and stink. It is sad that almost three-fourths of our fellow citizens have no choice but to drink filthy water. The severely polluted rivers due to mindless dumping of sewage and industrial wastes are a cause for concern not only to us humans but also to myriads of life forms that exist in water. On the French and Italian rivieras we can no longer see the sparkling blue waters. The Mediterranean Sea is reported to be turning grey. Rivers and canals pour sewage, detergents and industrial waste into the sea; tankers flush their contents near the river or sea; bottles, rotting garbage and oil slicks are washed into the beaches. The phosphates and nitrates applied to farmlands as inorganic fertilizers, concentrate in lakes and estuaries causing algal blooms due to which wide expanses of water get choked, plants rot, oxygen is used up and fish die.

SubQuestion No : 7

Q.7 Since when has water pollution acquired dangerous dimensions?

- Ans
- ☒ 1. Since sacred rivers became murky and lost their sanctity
 - ☒ 2. Since sewage and industrial effluents started being disposed of in rivers
 - ☒ 3. Since the Mediterranean Sea started changing colour
 - ☒ 4. Since oil slicks started being washed on the shores of beaches

Question ID : 8644071073

Status : Answered

Chosen Option : 2

Comprehension:

Read the given passage and answer the questions that follow.

Pollution befouls the air and poisons water. Pollution induces the release of toxicants into the biosphere which makes the air unsuitable for breathing, harms the quality of water and soil, and causes the emission of substances that may cause damage to humans, plants and animals.

To cater to the needs of an increasing population, agriculture has been intensified through the use of a wide spectrum of fertilizers and pesticides. Diverse industries have been set up to produce chemicals including those that pose a danger to all life forms.

Rapid industrialisation has led to deterioration in the quality of air. Widespread use of coal and fossil fuels in industries and petroleum fuel in motor vehicles has aggravated the air pollution problem. Our atmosphere seems to have become a waste basket into which dust, noxious fumes, toxic gases and other pollutants are callously thrown.

The intensity of air pollution in Indian cities is increasing primarily due to our vintage vehicles and their poor performance. Water pollution, too, has increased with the growth of our population and also that of our industries. Water pollution has acquired dangerous dimensions ever since sewage and industrial effluents have started being disposed of into the rivers. Once considered sacred, the rivers are now turning murky and stink. It is sad that almost three-fourths of our fellow citizens have no choice but to drink filthy water. The severely polluted rivers due to mindless dumping of sewage and industrial wastes are a cause for concern not only to us humans but also to myriads of life forms that exist in water.

On the French and Italian rivieras we can no longer see the sparkling blue waters. The Mediterranean Sea is reported to be turning grey. Rivers and canals pour sewage, detergents and industrial waste into the sea; tankers flush their contents near the river or sea; bottles, rotting garbage and oil slicks are washed into the beaches. The phosphates and nitrates applied to farmlands as inorganic fertilizers, concentrate in lakes and estuaries causing algal blooms due to which wide expanses of water get choked, plants rot, oxygen is used up and fish die.

SubQuestion No : 8

Q.8 As per the passage, which of these statements is NOT true about air pollution?

- Ans
- ☒ 1. Vintage vehicles and their poor performance adds to pollution.
 - ☒ 2. Dust and toxic gases released in the air cause air pollution.
 - ☒ 3. Three-fourths of our citizens are breathing poor quality air.
 - ☒ 4. Use of coal and fossil fuels aggravates air pollution.

Question ID : 8644071074

Status : Answered

Chosen Option : 2

Comprehension:

Read the given passage and answer the questions that follow.

Pollution befouls the air and poisons water. Pollution induces the release of toxicants into the

biosphere which makes the air unsuitable for breathing, harms the quality of water and soil, and causes the emission of substances that may cause damage to humans, plants and animals.

To cater to the needs of an increasing population, agriculture has been intensified through the use of a wide spectrum of fertilizers and pesticides. Diverse industries have been set up to produce chemicals including those that pose a danger to all life forms.

Rapid industrialisation has led to deterioration in the quality of air. Widespread use of coal and fossil fuels in industries and petroleum fuel in motor vehicles has aggravated the air pollution problem. Our atmosphere seems to have become a waste basket into which dust, noxious fumes, toxic gases and other pollutants are callously thrown.

The intensity of air pollution in Indian cities is increasing primarily due to our vintage vehicles and their poor performance. Water pollution, too, has increased with the growth of our population and also that of our industries. Water pollution has acquired dangerous dimensions ever since sewage and industrial effluents have started being disposed of into the rivers. Once considered sacred, the rivers are now turning murky and stink. It is sad that almost three-fourths of our fellow citizens have no choice but to drink filthy water. The severely polluted rivers due to mindless dumping of sewage and industrial wastes are a cause for concern not only to us humans but also to myriads of life forms that exist in water.

On the French and Italian rivieras we can no longer see the sparkling blue waters. The Mediterranean Sea is reported to be turning grey. Rivers and canals pour sewage, detergents and industrial waste into the sea; tankers flush their contents near the river or sea; bottles, rotting garbage and oil slicks are washed into the beaches. The phosphates and nitrates applied to farmlands as inorganic fertilizers, concentrate in lakes and estuaries causing algal blooms due to which wide expanses of water get choked, plants rot, oxygen is used up and fish die.

SubQuestion No : 9

Q.9 Select the most appropriate title for the passage

- Ans ☒ 1. The Saga of Sacred Rivers
- ☒ 2. We Breathe and Drink Poison
- ☒ 3. Impact of Industrialisation
- ☒ 4. Algal Blooms

Question ID : 8644071076

Status : Answered

Chosen Option : 2

Comprehension:

Read the given passage and answer the questions that follow.

Pollution befoils the air and poisons water. Pollution induces the release of toxicants into the biosphere which makes the air unsuitable for breathing, harms the quality of water and soil, and causes the emission of substances that may cause damage to humans, plants and animals.

To cater to the needs of an increasing population, agriculture has been intensified through the use of a wide spectrum of fertilizers and pesticides. Diverse industries have been set up to produce chemicals including those that pose a danger to all life forms.

Rapid industrialisation has led to deterioration in the quality of air. Widespread use of coal and fossil fuels in industries and petroleum fuel in motor vehicles has aggravated the air pollution problem. Our atmosphere seems to have become a waste basket into which dust, noxious fumes, toxic gases and other pollutants are callously thrown.

The intensity of air pollution in Indian cities is increasing primarily due to our vintage vehicles and their poor performance. Water pollution, too, has increased with the growth of our population and also that of our industries. Water pollution has acquired dangerous dimensions ever since sewage and industrial effluents have started being disposed of into the rivers. Once considered sacred, the rivers are now turning murky and stink. It is sad that almost three-fourths of our fellow citizens have no choice but to drink filthy water. The severely polluted rivers due to mindless dumping of sewage and industrial wastes are a cause for concern not only to us humans but also to myriads of life forms that exist in water.

On the French and Italian rivieras we can no longer see the sparkling blue waters. The Mediterranean Sea is reported to be turning grey. Rivers and canals pour sewage, detergents and industrial waste into the sea; tankers flush their contents near the river or sea; bottles, rotting garbage and oil slicks are washed into the beaches. The phosphates and nitrates applied to farmlands as inorganic fertilizers, concentrate in lakes and estuaries causing algal blooms due to which wide expanses of water get choked, plants rot, oxygen is used up and fish die.

SubQuestion No : 10

Q.10 Deterioration in the quality of air can mainly be attributed to

- Ans ☒ 1. intensified agricultural practices
- ☒ 2. global climate change
- ☒ 3. rapid industrialisation
- ☒ 4. increase in population

Question ID : 8644071072
Status : Answered
Chosen Option : 3



Q.11 Select the correctly spelt word.

- Ans
- ☐ 1. humillated
 - ☐ 2. humelated
 - ☐ 3. humilated
 - ☒ 4. humiliated

Question ID : 8644071066
Status : Answered
Chosen Option : 4

Q.12 Select the most appropriate option to substitute the underlined segment. If no substitution is required select 'No substitution'.

This is one of the boldest economic reform that have ever been introduced.

- Ans
- ☐ 1. economic reforms that has ever
 - ☐ 2. economic reform that has ever
 - ☒ 3. economic reforms that have ever
 - ☐ 4. No substitution

Question ID : 8644071030
Status : Answered
Chosen Option : 1

Q.13 Select the most appropriate ANTONYM of the given word.

ENDURANCE

- Ans
- ☐ 1. patience
 - ☐ 2. persistence
 - ☐ 3. tolerance
 - ☒ 4. indolence

Question ID : 8644071054
Status : Answered
Chosen Option : 4

Q.14 Select the most appropriate meaning of the underlined idiom in the sentence.

My brother has decided to settle in Mumbai for good.

- Ans
- ☐ 1. for better income
 - ☐ 2. for new opportunities
 - ☐ 3. for a while
 - ☒ 4. forever

Question ID : 8644071057
Status : Answered
Chosen Option : 2

Q.15 Select the most appropriate meaning of the underlined idiom in the sentence.

In spite of the high sounding words, his speech fell flat on the audience.

- Ans
- ☒ 1. failed to make an impact
 - ☐ 2. impressed a lot
 - ☐ 3. appealed to the sentiments of the audience

☒ 4. could not be heard clearly



Question ID : 8644071056
Status : Answered
Chosen Option : 2

Q.16 Select the most appropriate ANTONYM of the given word.

ADEPT

- Ans ☒ 1. inept
☒ 2. expert
☒ 3. proficient
☒ 4. deft

Question ID : 8644071053
Status : Answered
Chosen Option : 4

Q.17 Select the option which is the most appropriate one word substitution for the given group of words.

A decision which cannot be taken back

- Ans ☒ 1. irrevocable
☒ 2. infallible
☒ 3. irrational
☒ 4. indelible

Question ID : 8644071064
Status : Answered
Chosen Option : 1

Q.18 Select the most appropriate meaning of the underlined idiom in the sentence.

Simran was under tremendous stress because she had too many irons in the fire.

- Ans ☒ 1. She had made a lot of risky investments
☒ 2. She was suffering from many ailments
☒ 3. She was involved in many activities
☒ 4. She had too many clothes to iron

Question ID : 8644071060
Status : Answered
Chosen Option : 3

Q.19 Select the option which is the most appropriate one word substitution for the given group of words.

Statement open to more than one interpretation

- Ans ☒ 1. ambrosial
☒ 2. ambiguous
☒ 3. ambidextrous
☒ 4. ambushed

Question ID : 8644071063
Status : Not Answered
Chosen Option : --

Q.20 Identify the segment in the sentence which contains the grammatical error. If there is no error, select 'No error'.

The detective compared the forged signature to the original.

- Ans
- ☒ 1. the forged signature
 - ☒ 2. to the original
 - ☒ 3. The detective compared
 - ☒ 4. No error

Question ID : 8644071026
Status : Answered
Chosen Option : 2

Q.21 Identify the segment in the sentence which contains the grammatical error. If there is no error, select 'No error'.

If she left now, she would reach the station on time.

- Ans
- ☒ 1. she would reach
 - ☒ 2. the station on time
 - ☒ 3. if she left now
 - ☒ 4. No error

Question ID : 8644071029
Status : Answered
Chosen Option : 1

Q.22 Select the most appropriate synonym of the given word.

IGNOMINY

- Ans
- ☒ 1. morality
 - ☒ 2. virtue
 - ☒ 3. disgrace
 - ☒ 4. esteem

Question ID : 8644071049
Status : Not Answered
Chosen Option : --

Q.23 Identify the segment in the sentence which contains the grammatical error. If there is no error, select 'No error'.

He wouldn't let anyone to drive his new car.

- Ans
- ☒ 1. his new car
 - ☒ 2. anyone to drive
 - ☒ 3. No error
 - ☒ 4. He wouldn't let

Question ID : 8644071028
Status : Answered
Chosen Option : 2

Q.24 Select the option which is the most appropriate one word substitution for the given group of words.

One who travels by foot

- Ans
- ☒ 1. propagandist
 - ☒ 2. protagonist
 - ☒ 3. paediatrician
 - ☒ 4. pedestrian

Question ID : 8644071062
Status : Answered
Chosen Option : 4

Q.25 Select the most appropriate option to substitute the underlined segment. If no substitution is required select 'No substitution'.

If you will bring a letter of introduction, I will consider your request.

- Ans ☒ 1. No substitution
☒ 2. If you bring
☒ 3. If you will be bringing
☒ 4. If you brings

Question ID : 8644071031
Status : Answered
Chosen Option : 2

Q.26 Select the correctly spelt word.

- Ans ☒ 1. omelete
☒ 2. omelette
☒ 3. omlate
☒ 4. omelate

Question ID : 8644071067
Status : Answered
Chosen Option : 2

Q.27 Select the most appropriate synonym of the given word.

SANCTION

- Ans ☒ 1. grace
☒ 2. approval
☒ 3. mercy
☒ 4. denial

Question ID : 8644071046
Status : Answered
Chosen Option : 4

Q.28 Select the most appropriate option to fill in the blank.

Please sign these documents _____ ink so that they can be preserved .

- Ans ☒ 1. with
☒ 2. by
☒ 3. from
☒ 4. in

Question ID : 8644071039
Status : Answered
Chosen Option : 2

Q.29 Select the most appropriate meaning of the underlined idiom in the sentence.

The aged man preferred to die in harness than lead a rusted life.

- Ans ☒ 1. to keep one's belongings safe
☒ 2. to live in perpetual slavery

✓ 3. to continue occupation till death

✗ 4. to lead a life of comfort



Question ID : 8644071059
Status : Answered
Chosen Option : 4

Q.30 Select the most appropriate meaning of the underlined idiom in the sentence.

All those who carried the day in reality shows failed to make a mark later.

Ans ✗ 1. made a guest appearance

✓ 2. won a victory

✗ 3. acted as hosts

✗ 4. participated

Question ID : 8644071058
Status : Not Answered
Chosen Option : --

Q.31 Select the most appropriate synonym of the given word.

INCESSANT

Ans ✗ 1. intermittent

✓ 2. persistent

✗ 3. transient

✗ 4. inconstant

Question ID : 8644071050
Status : Not Answered
Chosen Option : --

Q.32 Select the most appropriate ANTONYM of the given word.

MORTALITY

Ans ✗ 1. lethality

✗ 2. death

✗ 3. fatality

✓ 4. birth

Question ID : 8644071052
Status : Answered
Chosen Option : 4

Q.33 Select the most appropriate option to fill in the blank.

The company has appointed twice as _____ women as men.

Ans ✗ 1. most

✓ 2. many

✗ 3. more

✗ 4. much

Question ID : 8644071036
Status : Answered
Chosen Option : 2

Q.34 Select the most appropriate option to substitute the underlined segment. If no substitution is required select 'No substitution'.

She has no other hobby but that of collecting coins.

- Ans
- ☐ 1. not other hobbies but
 - ☐ 2. No substitution
 - ☐ 3. no another hobby but
 - ☒ 4. no other hobby than

Question ID : 8644071033
Status : Answered
Chosen Option : 3

Q.35 Select the most appropriate synonym of the given word.

FATIGUE

- Ans
- ☐ 1. liveliness
 - ☒ 2. weariness
 - ☐ 3. freshness
 - ☐ 4. brightness

Question ID : 8644071047
Status : Answered
Chosen Option : 2

Q.36 Select the INCORRECTLY spelt word.

- Ans
- ☐ 1. schedule
 - ☐ 2. vacuum
 - ☒ 3. tranquility
 - ☐ 4. acceleration

Question ID : 8644071069
Status : Answered
Chosen Option : 2

Q.37 Select the option which is the most appropriate one word substitution for the given group of words.

Animals living in flocks

- Ans
- ☒ 1. gregarious
 - ☐ 2. bohemian
 - ☐ 3. social
 - ☐ 4. herbivorous

Question ID : 8644071065
Status : Answered
Chosen Option : 2

Q.38 Select the most appropriate ANTONYM of the given word.

RECKLESS

- Ans
- ☐ 1. brash
 - ☐ 2. heedless
 - ☐ 3. daring
 - ☒ 4. cautious

Question ID : 8644071051
Status : Answered

Q.39 Select the most appropriate ANTONYM of the given word.

INSIDIOUS

- Ans ☒ 1. treacherous
☒ 2. sincere
☒ 3. stealthy
☒ 4. astute

Question ID : 8644071055

Status : Answered

Chosen Option : 3

Q.40 Select the option which is the most appropriate one word substitution for the given group of words.

One who holds established opinions

- Ans ☒ 1. atheist
☒ 2. monotheist
☒ 3. orthodox
☒ 4. missionary

Question ID : 8644071061

Status : Answered

Chosen Option : 3

Q.41 Select the INCORRECTLY spelt word.

- Ans ☒ 1. ecstasy
☒ 2. diagnosis
☒ 3. athlete
☒ 4. accumulate

Question ID : 8644071068

Status : Answered

Chosen Option : 1

Q.42 Identify the segment in the sentence which contains the grammatical error. If there is no error, select 'No error'.

Among the reasons cited by the employee for quitting the job were the pressure of work, the outstation duties and desiring to pursue her hobbies.

- Ans ☒ 1. Among the reasons cited by the employee
☒ 2. and desiring to pursue her hobbies
☒ 3. No error
☒ 4. were the pressure of work, the outstation duties

Question ID : 8644071027

Status : Answered

Chosen Option : 2

Q.43 Identify the segment in the sentence which contains the grammatical error. If there is no error, select 'No error'.

The monsoon have, in the past five days, retreated from most parts of the country.

- Ans ☒ 1. The monsoon have
☒ 2. in the past five days

- ☒ 3. No error
- ☒ 4. retreated from most parts



Question ID : 8644071025
Status : Answered
Chosen Option : 1

Q.44 Select the most appropriate option to fill in the blank.

They postponed _____ on vacation due to adverse weather conditions.

- Ans ☒ 1. to go
- ☒ 2. for going
- ☒ 3. to be gone
- ☒ 4. going

Question ID : 8644071037
Status : Answered
Chosen Option : 1

Q.45 Select the most appropriate option to fill in the blank.

_____ of these boys is doing anything worthwhile.

- Ans ☒ 1. Either
- ☒ 2. Each
- ☒ 3. None
- ☒ 4. Both

Question ID : 8644071035
Status : Answered
Chosen Option : 1

Comprehension:

In the following passage some words have been deleted. Fill in the blanks with the help of the alternatives given. Select the most appropriate option for each blank.

If you don't have a lump sum to invest in a fixed deposit, you can (1)_____ opt for a long-term recurring deposit, (2)_____ the minimum amount of monthly investment is (3)_____ low as Rupees 100. At the end of the (4)_____ you get back the amount invested (5)_____ with the interest earned on it. It is a good way of saving money regularly.

SubQuestion No : 46

Q.46 Select the most appropriate option to fill in blank No.1.

- Ans ☒ 1. sure
- ☒ 2. assured
- ☒ 3. surely
- ☒ 4. ensure

Question ID : 8644071041
Status : Answered
Chosen Option : 1

Comprehension:

In the following passage some words have been deleted. Fill in the blanks with the help of the alternatives given. Select the most appropriate option for each blank.

If you don't have a lump sum to invest in a fixed deposit, you can (1)_____ opt for a long-term recurring deposit, (2)_____ the minimum amount of monthly investment is (3)_____ low as Rupees 100. At the end of the (4)_____ you get back the amount invested (5)_____ with the interest earned on it. It is a good way of saving money regularly.

SubQuestion No : 47

Q.47 Select the most appropriate option to fill in blank No.2.

- Ans ☒ 1. where
☒ 2. when
☒ 3. wherefore
☒ 4. whenever

Question ID : 8644071042
 Status : Answered
 Chosen Option : 2

Comprehension:

In the following passage some words have been deleted. Fill in the blanks with the help of the alternatives given. Select the most appropriate option for each blank.

If you don't have a lump sum to invest in a fixed deposit, you can (1)_____ opt for a long-term recurring deposit, (2)_____ the minimum amount of monthly investment is (3)_____ low as Rupees 100. At the end of the (4)_____ you get back the amount invested (5)_____ with the interest earned on it. It is a good way of saving money regularly.

SubQuestion No : 48

Q.48 Select the most appropriate option to fill in blank No.3.

- Ans ☒ 1. as
☒ 2. so
☒ 3. too
☒ 4. just

Question ID : 8644071043
 Status : Answered
 Chosen Option : 1

Comprehension:

In the following passage some words have been deleted. Fill in the blanks with the help of the alternatives given. Select the most appropriate option for each blank.

If you don't have a lump sum to invest in a fixed deposit, you can (1)_____ opt for a long-term recurring deposit, (2)_____ the minimum amount of monthly investment is (3)_____ low as Rupees 100. At the end of the (4)_____ you get back the amount invested (5)_____ with the interest earned on it. It is a good way of saving money regularly.

SubQuestion No : 49

Q.49 Select the most appropriate option to fill in blank No.4.

- Ans ☒ 1. timing
☒ 2. time
☒ 3. tenure
☒ 4. interval

Question ID : 8644071044
 Status : Answered
 Chosen Option : 3

Comprehension:


In the following passage some words have been deleted. Fill in the blanks with the help of the alternatives given. Select the most appropriate option for each blank.

If you don't have a lump sum to invest in a fixed deposit, you can (1)_____ opt for a long-term recurring deposit, (2)_____ the minimum amount of monthly investment is (3)_____ low as Rupees 100. At the end of the (4)_____ you get back the amount invested (5)_____ with the interest earned on it. It is a good way of saving money regularly.

SubQuestion No : 50

Q.50 Select the most appropriate option to fill in blank No.5.

- Ans ☒ 1. along
☒ 2. among

 3. as well as

 4. besides



Question ID : **8644071045**

Status : **Answered**

Chosen Option : **1**