

SSC CPO Tier-I

**Previous Year Paper
(12 December 2019 shift 2)
English**

www.freshersnow.com

SI in CAPFs, ASI in CISF and SI in Delhi Police Examination-2019 (Paper-I)

Roll Number	
Candidate Name	
Exam Venue	
Exam Date	12/12/2019
Exam Time	2:00 PM - 4:00 PM
Subject	SI CPO Examination 2019

Section : General Intelligence and Reasoning

Q.1 Four numbers have been given, out of which three are alike in some manner and one is different. Select the one that is different.

- Ans
- ☒ 1. 197
 - ☒ 2. 193
 - ☒ 3. 195
 - ☒ 4. 191

Question ID : 685582531
Status : Answered
Chosen Option : 3

Q.2 Arrange the following words in the order in which they appear in an English dictionary.

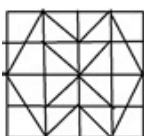
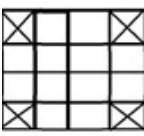
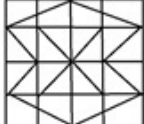
1. Dementia
2. Demand
3. Dearth
4. Demon
5. Daemon

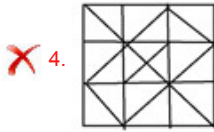
- Ans
- ☒ 1. 5, 3, 2, 1, 4
 - ☒ 2. 5, 3, 2, 4, 1
 - ☒ 3. 4, 3, 2, 1, 5
 - ☒ 4. 3, 5, 2, 1, 4

Question ID : 685582507
Status : Answered
Chosen Option : 1

Q.3 Select the option in which the given figure is embedded (rotation is NOT allowed).



- Ans
- ☒ 1. 
 - ☒ 2. 
 - ☒ 3. 



Question ID : 685582546
Status : Answered
Chosen Option : 3

Q.4 Read the given statement and conclusions carefully and decide which of the conclusions logically follow(s) from the statement.

Statement:

The importance of a person is not dependent only on one's status and money.

Conclusions:

I.The goal of most people is just to acquire more money.

II.There are some factors other than status and money which contribute to the importance of a person.

- Ans**
- ☒ 1. Only conclusion I follows.
 - ☒ 2. Both conclusions I and II follow.
 - ☒ 3. Only conclusion II follows.
 - ☒ 4. Neither conclusion I nor II follows.

Question ID : 685582523
Status : Answered
Chosen Option : 4

Q.5 In a certain code language, U is written as A, A as G, D as I, N as T, B as R, E as D and C as U. How will ABUNDANCE be written in that code?

- Ans**
- ☒ 1. GRATITUDE
 - ☒ 2. GRATITGUD
 - ☒ 3. RGATIGTUD
 - ☒ 4. GRATIGTUD

Question ID : 685582519
Status : Answered
Chosen Option : 4

Q.6 In a certain language, if MOUNTAIN is written as 46352195, then how is UNIVERSE coded in the same language?

- Ans**
- ☒ 1. 25945905
 - ☒ 2. 45945915
 - ☒ 3. 13594591
 - ☒ 4. 35945915

Question ID : 685582521
Status : Answered
Chosen Option : 4

Q.7 Read the given statements and conclusions carefully. Assuming that the information given in the statements is true, even if it appears to be at variance with commonly known facts, decide which of the given conclusions logically follow(s) from the statements.

Statements:

- A. All purses are coins.
- B. All coins are rupees.
- C. All rupees are pink.

Conclusions:

- I. All purses are pink.
- II. All pink are coins.

III. All rupees are purses.
IV. All coins are pink.

- Ans ☒ 1. Only conclusions I and IV follow.
- ☐ 2. Only conclusions I and II follow.
- ☐ 3. All the conclusions follow.
- ☐ 4. Only conclusions II and III follow.

Question ID : 685582524
Status : Answered
Chosen Option : 1

Q.8 In a code language, DOCUMENT is written as FRGUMWQH. How is PERCEIVE written in that language?

- Ans ☐ 1. UHSCEHXM
- ☒ 2. UHSCEHYL
- ☐ 3. VHSCEHYL
- ☐ 4. VHSCEHYK

Question ID : 685582520
Status : Answered
Chosen Option : 2

Q.9 'Pleasure' is related to 'Joy' in the same way as 'Diligent' is related to '_____'.

- Ans ☐ 1. Breathlessness
- ☒ 2. Industrious
- ☐ 3. Anger
- ☐ 4. Sympathy

Question ID : 685582513
Status : Answered
Chosen Option : 2

Q.10 Study the given pattern carefully and select the number that can replace the question mark (?) in it.

7	9	8
97	73	64
6	7	?
55	10	48

- Ans ☒ 1. 2
- ☐ 2. 5
- ☐ 3. 4
- ☐ 4. 3

Question ID : 685582536
Status : Answered
Chosen Option : 1

Q.11 Which of the given options would be a logical sequence of the following places when arranged in a clockwise manner starting from north on India's Map?

1. Ladakh
2. Goa
3. Puducherry
4. Punjab
5. Odisha

Ans

- ☒ 1. 1, 4, 2, 5, 3
- ☒ 2. 2, 1, 4, 5, 3
- ☒ 3. 1, 5, 3, 2, 4
- ☒ 4. 1, 5, 2, 3, 4

Question ID : 685582508
Status : Not Answered
Chosen Option : --

Q.12 उस विकल्प का चयन करें जिसमें शब्दों के बीच वही संबंध है जो दिए गए शब्दों के युग्म के बीच है।

सरपट : घोड़ा

- Ans
- ☒ 1. पक्षी : कंगारू
 - ☒ 2. दौड़ : शेर
 - ☒ 3. भगदड़ : चूहा
 - ☒ 4. हाथी : मंथर चाल

Question ID : 685582515
Status : Answered
Chosen Option : 3

Q.13 Which of the options is the exact mirror image of the given figure when the mirror is held at the right side?

BZF3Q12AW

- Ans
- ☒ 1. WAT1Q3FZB
 - ☒ 2. BZF3Q12AW
 - ☒ 3. WAT1Q3FZB
 - ☒ 4. BZF3Q12AW

Question ID : 685582547
Status : Answered
Chosen Option : 2

Q.14 Four words have been given, out of which three are alike in some manner and one is different. Select the odd one.

- Ans
- ☒ 1. Stable
 - ☒ 2. Court
 - ☒ 3. Den
 - ☒ 4. Igloo

Question ID : 685582512
Status : Answered
Chosen Option : 2

Q.15 Select the letter-cluster that can replace the question mark (?) in the following series.

DZA, FUD, HPG, JKJ, LFM, ?

- Ans
- ☒ 1. MAP
 - ☒ 2. NAQ
 - ☒ 3. NBQ
 - ☒ 4. NAP

Question ID : 685582506

Q.16 Four number pairs have been given, out of which three are alike in some manner and one is different. Select the one that is different.

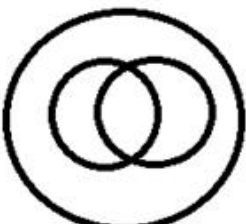



- Ans
- ☒ 1. 13 : 182
 - ☒ 2. 25 : 650
 - ☒ 3. 23 : 552
 - ☒ 4. 18 : 306

Question ID : **685582533**
Status : **Answered**
Chosen Option : 4

Q.17 Select the Venn diagram that best represents the relationship between the following classes.

Periodical, Weekly, Publisher

Ans

- ☒ 1. 
- ☒ 2. 
- ☒ 3. 
- ☒ 4. 

Question ID : **685582553**
Status : **Answered**
Chosen Option : 2

Q.18 Select the word from among the given options that is similar to the given words and hence belongs to the same group.

Crocodile : Snake : Iguana : ?

- Ans
- ☒ 1. Frog
 - ☒ 2. Starfish
 - ☒ 3. Chameleon
 - ☒ 4. Toad

Question ID : **685582516**
Status : **Answered**
Chosen Option : 2

Q.19 Rohan is facing towards west and turns 45° clockwise, again 180° clockwise and then turns 225° anticlockwise. In which direction is he facing now?

- Ans
- ☒ 1. West

- ☒ 2. East
- ☒ 3. South
- ☒ 4. North

Question ID : 685582550
Status : Answered
Chosen Option : 1

Q.20 Naveen, Sapna, Alka, Jenny, Megan, Farhad and Bhavna are sitting in a row in a cinema hall. All of them are facing the screen that is towards the east. Sapna is at the extreme end and her immediate neighbour is Megan. Jenny is on the right of Megan. Bhavna has Megan and Farhad on each side. Alka is to the immediate right of Jenny who is sitting third from the south end. Jenny is sitting immediately between which of the following pairs of people?

- Ans
- ☒ 1. Bhavna and Farhad
 - ☒ 2. Naveen and Alka
 - ☒ 3. Farhad and Alka
 - ☒ 4. Megan and Bhavna

Question ID : 685582551
Status : Answered
Chosen Option : 3

Q.21 Four number-pairs have been given, out of which three are alike in some manner and one is different. Select the one that is different.

- Ans
- ☒ 1. 34 - 289
 - ☒ 2. 18 - 81
 - ☒ 3. 16 - 64
 - ☒ 4. 26 -168

Question ID : 685582534
Status : Answered
Chosen Option : 3

Q.22 Select the number that can replace the question mark (?) in the following series.

1, 5, 11, 19, 29, 41, ?

- Ans
- ☒ 1. 50
 - ☒ 2. 57
 - ☒ 3. 55
 - ☒ 4. 49

Question ID : 685582527
Status : Answered
Chosen Option : 3

Q.23 If + means \times , \times means \div , and \div means $+$, then what will be the value of following expression?

$50 + 10 \div 25 \times 5 - 3 = ?$

- Ans
- ☒ 1. 51
 - ☒ 2. 50
 - ☒ 3. 45
 - ☒ 4. 55

Question ID : 685582538
Status : Answered
Chosen Option : 4

Q.24 Which of the options is the exact mirror image of the given figure when the mirror is held at the right side?



Ans

☒ 1.



☒ 2.



☒ 3.



☒ 4.



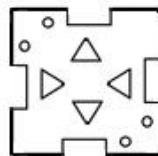
Question ID : **685582548**
Status : **Answered**
Chosen Option : **4**

Q.25 The sequence of folding a piece of paper and the manner in which the folded paper has been cut is shown in the following figures. How would this paper look when unfolded?

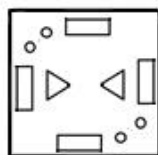


Ans

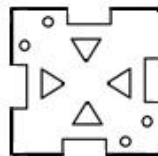
☒ 1.



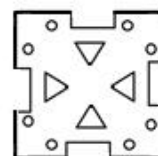
☒ 2.



☒ 3.



☒ 4.



Question ID : **685582549**
Status : **Answered**
Chosen Option : **3**

Q.26 Four words have been given, out of which three are alike in some manner and one is different. Select the odd one.

- Ans
- ☒ 1. Authentic
 - ☒ 2. Genuine
 - ☒ 3. Spurious
 - ☒ 4. Bonafide

Question ID : 685582511
Status : Answered
Chosen Option : 3

Q.27 Select the correct equation after interchanging operators '+' and '÷', and numbers '2' and '8'.

- Ans
- ☒ 1. $2 + 8 \div 4 = 2$
 - ☒ 2. $8 + 4 \div 2 = 8$
 - ☒ 3. $8 + 2 \div 4 = 6$
 - ☒ 4. $4 + 8 \div 2 = 4$

Question ID : 685582539
Status : Not Answered
Chosen Option : --





Q.28 Four number-pairs have been given, out of which three are alike in some manner and one is different. Select the one that is different.

- Ans
- ☒ 1. 73 - 79
 - ☒ 2. 31 - 41
 - ☒ 3. 61 - 71
 - ☒ 4. 83 - 97

Question ID : 685582532
Status : Answered
Chosen Option : 1

Q.29 Select the option figure which is embedded in the given figure (rotation is NOT allowed).



- Ans
- ☒ 1. 
 - ☒ 2. 
 - ☒ 3. 
 - ☒ 4. 

Question ID : 685582545
Status : Answered
Chosen Option : 1

Q.30 Select the option in which the numbers share the same relationship as that shared by

the given pair of numbers.

72 : 14


- Ans
- ☒ 1. 36 : 19
 - ☒ 2. 92 : 17
 - ☒ 3. 45 : 20
 - ☒ 4. 81 : 80

Question ID : 685582530



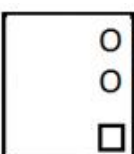
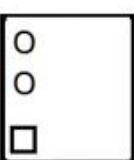
Status : Answered

Chosen Option : 3

Q.31 Select the figure that can replace the question mark (?) in the following series.



Ans

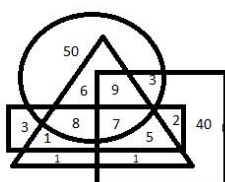
- ☒ 1. 
- ☒ 2. 
- ☒ 3. 
- ☒ 4. 

Question ID : 685582542

Status : Answered

Chosen Option : 4

Q.32 A prestigious company had called for candidates to be interviewed. Their data has been presented by the given Venn diagram. The circle represents MBA candidates from a reputed institution, the triangle represents candidates with an experience of more than 10 years, the rectangle represents industrious candidates and the square represents candidates aged between 40 and 50 years. The numbers given in the diagram represent the number of persons of that particular category. The company has called for the final interview, only those candidates who meet all the above criteria. How many people have been called for the final interview?



- Ans
- ☒ 1. 6
 - ☒ 2. 8
 - ☒ 3. 7

4. 9



Question ID : 685582554
Status : Answered
Chosen Option : 3

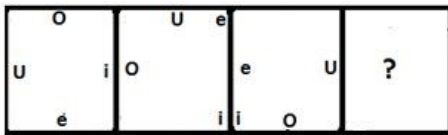
Q.33 Select the letter that can replace the question mark (?) in the following series.

Z, V, P, L, ?, B

- Ans
- ☒ 1. E
 - ☒ 2. F
 - ☒ 3. I
 - ☒ 4. H

Question ID : 685582505
Status : Answered
Chosen Option : 2

Q.34 Select the figure that can replace the question mark (?) in the following series.



Ans


- ☒ 1.
- ☒ 2.
- ☒ 3.
- ☒ 4.

Question ID : 685582541
Status : Answered
Chosen Option : 1

Q.35 Select the option that is related to the third word in the same way as the second word is related to the first word.

Power : Watt :: Pressure : ?

- Ans
- ☒ 1. Degrees
 - ☒ 2. Pascal
 - ☒ 3. Newton

 4. Ohm

Question ID : 685582514
Status : Answered
Chosen Option : 2

Q.36 Rearrange the given letters to form meaningful words and select the option which is different from the other three words.


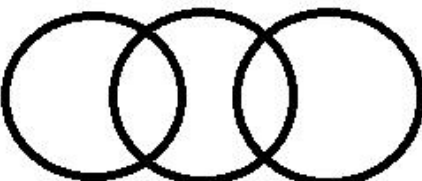

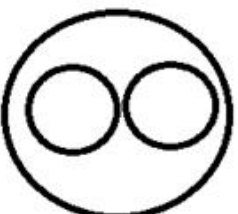

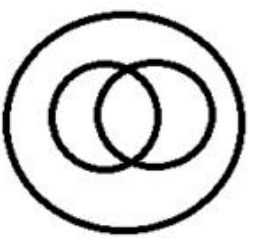


- Ans  1. REAYBL
 2. ETWAH
 3. EZAMI
 4. SEHCWA

Question ID : 685582510
Status : Answered
Chosen Option : 4

Q.37 Select the Venn diagram that best represents the relationship between the following classes.

Women, Officer, Stenographer

Ans

-  1. 
-  2. 
-  3. 
-  4. 

Question ID : 685582552
Status : Answered
Chosen Option : 1

Q.38 Select the option that is related to the third term in the same way as the second term is related to the first term.

6/34 : 8/62 :: 11/119 : ?

- Ans  1. 13/165
 2. 17/167

☒ 3. 15/171

☒ 4. 13/167



Question ID : 685582528
Status : Answered
Chosen Option : 4

Q.39 In the following number series, two numbers have been put within brackets. Select the most appropriate option for these numbers in relation to their inclusion in the series.

0,7, 26, (65), 124, 215, (344), 511

- Ans
- ☒ 1. The first bracketed number is correct and the second bracketed number is incorrect.
 - ☒ 2. The first bracketed number is incorrect and the second bracketed number is correct.
 - ☒ 3. Both the bracketed numbers are incorrect.
 - ☒ 4. Both the bracketed numbers are correct.

Question ID : 685582525
Status : Answered
Chosen Option : 3

Q.40 Select the option that is related to the third term in the same way as the second term is related to the first term.

PURPOSE : QWUTTYL :: SERVICE : ?

- Ans
- ☒ 1. RGVZNHL
 - ☒ 2. TGUZNGL
 - ☒ 3. RFUZNGL
 - ☒ 4. TGUZNIL

Question ID : 685582517
Status : Answered
Chosen Option : 4

Q.41 In a certain code, REASON is coded as 13, CHAIR is coded as 11, then what is the code of EXAMINATION?

- Ans
- ☒ 1. 22
 - ☒ 2. 11
 - ☒ 3. 23
 - ☒ 4. 12

Question ID : 685582522
Status : Answered
Chosen Option : 3

Q.42 Select the number that can replace the question mark (?) in the following series.

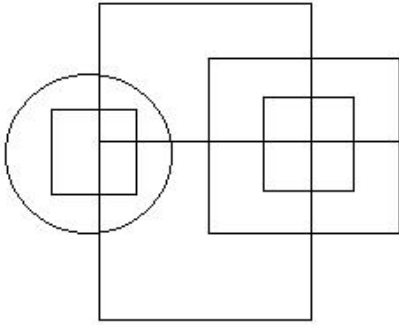
13, 15, 19, 25, 33, ?

- Ans
- ☒ 1. 54
 - ☒ 2. 43
 - ☒ 3. 42
 - ☒ 4. 41

Question ID : 685582526
Status : Answered
Chosen Option : 2

Q.43

Identify the number of straight lines in the given figure.



- Ans
- ☒ 1. 15
 - ☒ 2. 17
 - ☒ 3. 19
 - ☒ 4. 20

Question ID : 685582543
Status : Answered
Chosen Option : 2

Q.44 Select the option that is related to the fifth number in the same way as the second number is related to the first number and the fourth number is related to the third number.

14 : 289 :: 17 : 400 :: 21 : ?

- Ans
- ☒ 1. 576
 - ☒ 2. 441
 - ☒ 3. 570
 - ☒ 4. 504

Question ID : 685582529
Status : Answered
Chosen Option : 1

Q.45 Select the option that is related to the third term in the same way as the second term is related to the first term.

ZPEEXFLCRQ : SHIFT :: ATEXXDIBVO : ?

- Ans
- ☒ 1. ADORE
 - ☒ 2. WAGER
 - ☒ 3. VADER
 - ☒ 4. EAGLE

Question ID : 685582518
Status : Answered
Chosen Option : 1

Q.46 Three of the four options are similar to the given number set in a certain manner while one is different. Select the option that is NOT like the given number set.

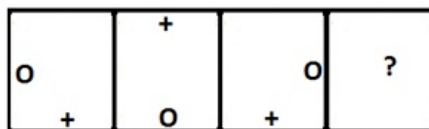
(90, 450, 810)


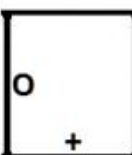
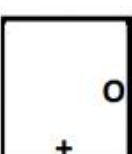
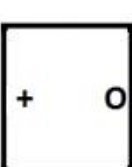
- Ans
- ☒ 1. (5, 25, 45)
 - ☒ 2. (21, 105, 189)
 - ☒ 3. (7, 35, 56)
 - ☒ 4. (17, 85, 153)

Q.47 Four words have been given, out of which three are alike in some manner and one is different. Select the odd one.

- Ans ☒ 1. NIZAM
☒ 2. STEIN
☒ 3. MAINS
☒ 4. SAINT

Q.48 Select the figure that can replace the question mark (?) in the following series.



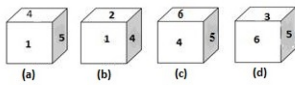
- Ans ☒ 1. 
☒ 2. 
☒ 3. 
☒ 4. 

Q.49 Select the correct combination of mathematical signs to replace * signs and to balance the following equation.

$$1/6 * 1/24 * 2 * 8 * 35 * 23$$

- Ans ☒ 1. $\times, -, \div, +, =$
☒ 2. $\times, +, \div, -, =$
☒ 3. $+, -, \div, \times, =$
☒ 4. $\div, -, \times, +, =$

Q.50 Four positions of a dice are shown. What number must be at the bottom face when the dice is in the position as shown in figure (a)?



- Ans**
- ☒ 1. 3
 - ☐ 2. 2
 - ☐ 3. 4
 - ☐ 4. 5

Question ID : **685582544**
Status : **Answered**
Chosen Option : **1**

Section : **General Knowledge and General Awareness**

Q.1 The power to summon each House of Parliament is vested with the:

- Ans**
- ☒ 1. President
 - ☐ 2. Lok Sabha Speaker
 - ☐ 3. Vice President
 - ☐ 4. Union Cabinet

Question ID : **685582597**
Status : **Answered**
Chosen Option : **1**

Q.2 The Netravati River flows through which of the following cities?

- Ans**
- ☐ 1. Karwar
 - ☒ 2. Mangaluru
 - ☐ 3. Bengaluru
 - ☐ 4. Shivamogga

Question ID : **685582579**
Status : **Answered**
Chosen Option : **3**

Q.3 In the context of various environment protection treaties/protocols and the places associated with them, which of the following is NOT correctly paired?

- Ans**
- ☐ 1. Protocol on Biosafety - Cartagena
 - ☒ 2. Convention on the Prior Informed Consent Procedure for Certain Hazardous Chemicals and Pesticides in International Trade - Stockholm
 - ☐ 3. Convention on the Control of Transboundary Movement of Hazardous Wastes and their Disposal - Basel
 - ☐ 4. Convention on Biological Diversity - Nagoya

Question ID : **685582582**
Status : **Answered**
Chosen Option : **3**

Q.4 As per ancient Indian philosophy, the Purusharthas or the four aims of life does NOT include:

- Ans**
- ☐ 1. kama
 - ☐ 2. moksha
 - ☐ 3. artha

✓ 4. yasha



Question ID : 685582558
Status : Answered
Chosen Option : 1

Q.5 Which of the following may be classified as a 'Pigouvian tax'?

- Ans
- ☒ 1. Long term capital gain tax
 - ☒ 2. Corporate tax
 - ☒ 3. Carbon tax
 - ☒ 4. Income tax

Question ID : 685582561
Status : Answered
Chosen Option : 3

Q.6 The procedure for impeachment of the President of India is mentioned in Article _____ of the Constitution of India.

- Ans
- ☒ 1. 61
 - ☒ 2. 63
 - ☒ 3. 62
 - ☒ 4. 60

Question ID : 685582596
Status : Answered
Chosen Option : 1

Q.7 As per the UN criteria, a city qualifies as a mega city when its population is a minimum of:

- Ans
- ☒ 1. 5 million
 - ☒ 2. 10 million
 - ☒ 3. 15 million
 - ☒ 4. 12 million

Question ID : 685582581
Status : Answered
Chosen Option : 2

Q.8 For the calculation of the 'wholesale price index' in 2019, _____ is taken as the base year.

- Ans
- ☒ 1. 2013-14
 - ☒ 2. 2014-15
 - ☒ 3. 2011-12
 - ☒ 4. 2012-13

Question ID : 685582563
Status : Answered
Chosen Option : 2

Q.9 According to the Demographic Transition Theory, the third stage in a demographic cycle is marked by:

- Ans
- ☒ 1. high fertility low mortality
 - ☒ 2. low fertility low mortality
 - ☒ 3. high mortality low fertility
 - ☒ 4. high fertility high mortality

Question ID : 685582580
Status : Answered
Chosen Option : 1

Q.10 Which of the following statements about the ionosphere is NOT correct?

- Ans
- ☒ 1. Radio waves transmitted from the earth are reflected back to the earth by this layer.
 - ☒ 2. It contains charged particles.
 - ☒ 3. It is ionised by solar and cosmic radiation.
 - ☒ 4. It is located immediately above the stratopause.

Question ID : 685582568
Status : Answered
Chosen Option : 4

Q.11 What would you call the area under the curve of a velocity-time graph included between itself and two time ordinates?

- Ans
- ☒ 1. Speed
 - ☒ 2. Displacement
 - ☒ 3. Velocity
 - ☒ 4. Acceleration

Question ID : 685582575
Status : Answered
Chosen Option : 2

Q.12 'Turi', 'Bungal' and 'Pava' are folk musical instruments from the state of:

- Ans
- ☒ 1. West Bengal
 - ☒ 2. Karnataka
 - ☒ 3. Odisha
 - ☒ 4. Gujarat

Question ID : 685582559
Status : Answered
Chosen Option : 2

Q.13 In September 2019, _____ took over the chairmanship of the Association of World Election Bodies (A-WEB) for the term 2019-21.

- Ans
- ☒ 1. Om Prakash Rawat
 - ☒ 2. Sushil Chandra
 - ☒ 3. Ashok Lavasa
 - ☒ 4. Sunil Arora

Question ID : 685582594
Status : Answered
Chosen Option : 4

Q.14 Who among the following is NOT a recipient of the '2019 Right Livelihood Award'?

- Ans
- ☒ 1. Doreen Lawrence
 - ☒ 2. Aminatou Haidar
 - ☒ 3. Guo Jianmei
 - ☒ 4. Greta Thunberg

Question ID : 685582593
Status : Answered

Q.15 Who among the following female Indian boxers does NOT hold the distinction of reaching the final at the World Boxing Championships in her debut?

- Ans
- ☒ 1. Manju Rani
 - ☒ 2. Sonia Chahal
 - ☒ 3. Jamuna Boro
 - ☒ 4. Sarjubala Devi

Question ID : 685582604
Status : Answered
Chosen Option : 3

Q.16 Pyrolusite is an ore of:

- Ans
- ☒ 1. manganese
 - ☒ 2. chromium
 - ☒ 3. titanium
 - ☒ 4. uranium

Question ID : 685582566
Status : Answered
Chosen Option : 3

Q.17 Among the given elements, which comes first in the periodic table of elements?

- Ans
- ☒ 1. Sodium
 - ☒ 2. Neon
 - ☒ 3. Potassium
 - ☒ 4. Silicon

Question ID : 685582571
Status : Answered
Chosen Option : 2

Q.18 Which of the following is NOT an item mentioned in the Concurrent List of the Constitution of India?

- Ans
- ☒ 1. Banking
 - ☒ 2. Bankruptcy and insolvency
 - ☒ 3. Criminal procedure
 - ☒ 4. Criminal law

Question ID : 685582599
Status : Answered
Chosen Option : 1

Q.19 Researchers from the UK and India have developed a hand-washing robot, who has been named:

- Ans
- ☒ 1. Gope
 - ☒ 2. Hepe
 - ☒ 3. Hope
 - ☒ 4. Pepe

Question ID : 685582567
Status : Answered
Chosen Option : 3

Q.20 In the context of Overseas Citizens of India (OCI), which of the following statements is NOT correct?

- Ans
- ☒ 1. A foreign national those who or either of whose parents or grandparents or great grandparents is or had been a citizen of Pakistan or Bangladesh, is not eligible for it.
 - ☒ 2. An OCI is granted multiple entry visa for a period of ten years only.
 - ☒ 3. An OCI is allowed to undertake all activities except research work for which special permission is required.
 - ☒ 4. Any foreign national who was eligible to become a citizen of India on 26.01.1950 is eligible for it.

Question ID : **685582600**
Status : **Answered**
Chosen Option : **1**

Q.21 In which state of India is the harvest festival of 'Kailpodh' celebrated by an indigenous community?

- Ans
- ☒ 1. Odisha
 - ☒ 2. Madhya Pradesh
 - ☒ 3. Jharkhand
 - ☒ 4. Karnataka

Question ID : **685582555**
Status : **Answered**
Chosen Option : **3**

Q.22 Which of the following provisions of the Indian Constitution is correctly paired with the article pertaining to it?

- Ans
- ☒ 1. Protection of life and personal liberty - Article 21
 - ☒ 2. Prohibition of traffic in human beings - Article 24
 - ☒ 3. Right to education - Article 22A
 - ☒ 4. Prohibition of employment of any child below fourteen years of age in any factory or mine - Article 23

Question ID : **685582595**
Status : **Answered**
Chosen Option : **1**

Q.23 In the Canada Deuterium Uranium (CANDU) reactor, a natural uranium-fuelled reactor, the function of moderator and coolant is performed by:

- Ans
- ☒ 1. heavy water
 - ☒ 2. light water
 - ☒ 3. carbon dioxide
 - ☒ 4. sodium

Question ID : **685582572**
Status : **Answered**
Chosen Option : **1**

Q.24 How do Pteridophytes reproduce?

- Ans
- ☒ 1. With the help of budding
 - ☒ 2. With the help of spores
 - ☒ 3. With the help of pollens
 - ☒ 4. With the help of seeds

Question ID : **685582569**
Status : **Answered**

Q.25 As of September 2019, the distinction of being the youngest Indian Grandmaster was held by:

- Ans ☒ 1. D Gukesh
☒ 2. R Praggnanandhaa
☒ 3. Parimarjan Negi
☒ 4. Raunak Sadhwani

Question ID : 685582603
Status : Answered
Chosen Option : 2

Q.26 Which of the following schedules was added to the Constitution by the Constitution (First Amendment) Act, 1951?

- Ans ☒ 1. Eighth
☒ 2. Ninth
☒ 3. Tenth
☒ 4. Seventh

Question ID : 685582598
Status : Answered
Chosen Option : 3

Q.27 In normal cells, the process of the flow of genetic information from DNA to RNA is called:

- Ans ☒ 1. transportation
☒ 2. transcription
☒ 3. translocation
☒ 4. translation

Question ID : 685582573
Status : Answered
Chosen Option : 1

Q.28 In which year was the first Industrial Policy based on the mixed economy principle announced in India? The policy clearly demarcated the areas of operation of the public and private sectors.

- Ans ☒ 1. 1959
☒ 2. 1948
☒ 3. 1950
☒ 4. 1962

Question ID : 685582562
Status : Not Answered
Chosen Option : --

Q.29 The famous Irwin Declaration on 31 October 1929 promised:

- Ans ☒ 1. independence of princely states
☒ 2. total integration of princely states with the rest of India
☒ 3. universal adult franchise in India
☒ 4. a dominion status for India

Question ID : 685582586
Status : Not Answered

Q.30 Indian sportsperson Lakshya Sen is a _____ player.

- Ans
- ☒ 1. judo
 - ☒ 2. badminton
 - ☒ 3. kabaddi
 - ☒ 4. wrestling

Question ID : 685582601
Status : Answered
Chosen Option : 2

Q.31 The skull of a 'Homo erectus' was found in which of the following pre-historic Indian sites?

- Ans
- ☒ 1. Pachmarhi
 - ☒ 2. Hathnora
 - ☒ 3. Patne
 - ☒ 4. Sanganakallu

Question ID : 685582583
Status : Not Answered
Chosen Option : --

Q.32 The Aitchison Commission, 1886, was appointed to make recommendations for reforms in the:

- Ans
- ☒ 1. armed forces
 - ☒ 2. Indian judicial system
 - ☒ 3. Indian civil services
 - ☒ 4. administration of princely states

Question ID : 685582587
Status : Not Answered
Chosen Option : --

Q.33 Which of the following languages does NOT belong to the Indo-Aryan language family?

- Ans
- ☒ 1. Munda
 - ☒ 2. Punjabi
 - ☒ 3. Dogri
 - ☒ 4. Assamese

Question ID : 685582557
Status : Answered
Chosen Option : 3

Q.34 _____ has been awarded the SASTRA Ramanujan Prize, 2019.

- Ans
- ☒ 1. Akshay Venkatesh
 - ☒ 2. Adam Harper
 - ☒ 3. Manjul Bhargava
 - ☒ 4. Maryam Mirzakhani

Question ID : 685582591
Status : Answered
Chosen Option : 2

Q.35 Who among the following Delhi Sultans traced his descent to the ancient hero Afrasiyab in order to fabricate a noble birth for himself?

- Ans
- ☒ 1. Qutb-ud-din Aibak
 - ☒ 2. Iltutmish
 - ☒ 3. Balban
 - ☒ 4. Alauddin Khilji

Question ID : 685582585
Status : Not Answered
Chosen Option : --

Q.36 As per the Economic Survey 2018-19, the national 'total fertility rate' is expected to be below replacement rate by the year:

- Ans
- ☒ 1. 2024
 - ☒ 2. 2025
 - ☒ 3. 2022
 - ☒ 4. 2021

Question ID : 685582564
Status : Answered
Chosen Option : 2

Q.37 Who among the following has co-authored the book titled 'Bridgital Nation: Solving Technology's People Problem'?

- Ans
- ☒ 1. Sundar Pichai
 - ☒ 2. Nandan Nilekani
 - ☒ 3. N Chandrasekaran
 - ☒ 4. Sam Pitroda

Question ID : 685582589
Status : Answered
Chosen Option : 3

Q.38 Which of the following institutions does NOT regulate capital markets in India?

- Ans
- ☒ 1. RBI
 - ☒ 2. SEBI
 - ☒ 3. Ministry of Finance
 - ☒ 4. IRDA

Question ID : 685582560
Status : Answered
Chosen Option : 4

Q.39 At which of the following sites have archaeologists recovered burial of five wild dogs and antler's horn?

- Ans
- ☒ 1. Utnur
 - ☒ 2. Gufkral
 - ☒ 3. Burzahom
 - ☒ 4. Kupgal

Question ID : 685582588
Status : Answered
Chosen Option : 2

Q.40 Under Mauryan administration the 'Sitadhyaksha' was the officer in charge of:

- Ans
- ☒ 1. royal harem
 - ☒ 2. customs
 - ☒ 3. mines
 - ☒ 4. agriculture

Question ID : 685582584
Status : Answered
Chosen Option : 4

Q.41 Hiccups in humans generally occur due to the forceful downward shifting of the:

- Ans
- ☒ 1. diaphragm
 - ☒ 2. trachea
 - ☒ 3. lungs
 - ☒ 4. larynx

Question ID : 685582570
Status : Answered
Chosen Option : 1

Q.42 The collection of poems titled 'Pakkaki Ottigilite' has been composed by:

- Ans
- ☒ 1. Kasturi Murali Krishna
 - ☒ 2. K Siva Reddy
 - ☒ 3. Varavara Rao
 - ☒ 4. Suryadevara Rammohan Rao

Question ID : 685582590
Status : Not Answered
Chosen Option : --

Q.43 Who won the 2019 US Open - Men's Singles title?

- Ans
- ☒ 1. Rafael Nadal
 - ☒ 2. Roger Federer
 - ☒ 3. Daniil Medvedev
 - ☒ 4. Novak Djokovic

Question ID : 685582602
Status : Answered
Chosen Option : 2

Q.44 Which of the following sites is the largest protected wetland in India?

- Ans
- ☒ 1. Pulicat Lake
 - ☒ 2. Sundarbans
 - ☒ 3. Upper Ganga River
 - ☒ 4. Vembanad-Kol

Question ID : 685582578
Status : Answered
Chosen Option : 2

Q.45 Which of the following foundations confers the 'Global Goalkeeper Awards'?

- Ans
- ☒ 1. Coca-Cola Foundation
 - ☒ 2. Ford Foundation
 - ☒ 3. Infosys Foundation

Question ID : 685582592
Status : Answered
Chosen Option : 4

Q.46 Which of the following is NOT a primary force which influences ocean currents?

- Ans ✓ 1. Magnetic fields of the earth
✗ 2. Heating by the sun
✗ 3. Gravity
✗ 4. Coriolis force

Question ID : 685582577
Status : Answered
Chosen Option : 4

Q.47 Once a satellite has been launched into orbit, the only force governing its motion is the force of _____ .

- Ans ✓ 1. gravity
✗ 2. elasticity
✗ 3. friction
✗ 4. fuel driven

Question ID : 685582574
Status : Answered
Chosen Option : 1

Q.48 In the context of medieval Sufi tradition, the term 'wali' meant:

- Ans ✗ 1. hermitage
✗ 2. order
✗ 3. disciple
✓ 4. saint

Question ID : 685582556
Status : Not Answered
Chosen Option : --

Q.49 Which one of the following attributes is NOT true for uniform circular motion?

- Ans ✓ 1. The distance is always equal to the displacement
✗ 2. Velocity is always perpendicular to the radius of the circle
✗ 3. The speed of the body remains constant
✗ 4. The velocity of the body is continuously changing

Question ID : 685582576
Status : Answered
Chosen Option : 1

Q.50 Which of the following statements about Ganymede is NOT correct?

- Ans ✗ 1. It is bigger than Mercury.
✗ 2. It is the largest natural satellite in our solar system.
✗ 3. It is the only moon known to have its own internally generated magnetic field.
✓ 4. It revolves around Saturn.

Question ID : 685582565

Section : Quantitative Aptitude

Q.1 Which of the following is exactly divisible by 6?

- Ans ☒ 1. 4325672
☒ 2. 5643252
☒ 3. 96543111
☒ 4. 465466

Question ID : 685582456
Status : **Answered**
Chosen Option : 2

Q.2 Vivek can do a certain work in 14 days. Vishal is 75% more efficient than Vivek. How many days will Vishal alone take to do the same work?

- Ans ☒ 1. 8 days
☒ 2. 9 days
☒ 3. 10 days
☒ 4. 6 days

Question ID : 685582474
Status : **Answered**
Chosen Option : 1

Q.3 A certain sum of money amounts to ₹8,928 in two years and to ₹10,224 in $3\frac{1}{2}$ years, both at simple interest. The rate of interest per annum is:

- Ans ☒ 1. 12 %
☒ 2. 10%
☒ 3. 9%
☒ 4. 15%

Question ID : 685582472
Status : **Answered**
Chosen Option : 1

Q.4 Ranjeet drives his car at an average speed of 50 km/hr and reaches his destination in 8 hours. Rahman covers the same distance in 5 hours. If Ranjeet increases his speed by 10 km/hr and Rahman increases his speed by 20 km/hr, then what will be the difference in time taken by them to reach their destination?

- Ans ☒ 1. 2 hours 30 minutes
☒ 2. 3 hours 40 minutes
☒ 3. 3 hours 20 minutes
☒ 4. 2 hours 40 minutes

Question ID : 685582479
Status : **Answered**
Chosen Option : 4

Q.5 A, B and C are partners in a business. A, whose capital has been used for 5 months, claims $\frac{1}{7}$ of the profit. B whose capital has been used for 7 months, claims $\frac{1}{5}$ of the profit. C has invested ₹4,600 for 9 months. How much capital did A contribute?

- Ans ☒ 1. ₹1,800

☒ 2. ₹1,650

☒ 3. ₹1,600

☒ 4. ₹1,850

Question ID : 685582471

Status : Answered

Chosen Option : 1

Q.6 The value of $\frac{(2.8)^2 + (2.2)^2}{(28)^2 - 28 \times 22 + 484}$ is:

Ans ☒ 1. 0.02

☒ 2. 0.05

☒ 3. 0.01

☒ 4. 0.5

Question ID : 685582461

Status : Answered

Chosen Option : 2

Q.7 The average age of husband, wife and child 7 years ago was 42 years and that of wife and child 9 years ago was 36 years. The present age of the husband is:

Ans ☒ 1. 50

☒ 2. 55

☒ 3. 48

☒ 4. 57

Question ID : 685582463

Status : Answered

Chosen Option : 4

Q.8 Mangoes are bought at a rate of ₹10,000 per ton. If one-third of the total mangoes are sold at a loss of 4%, then at what price (per ton) should the remaining mangoes be sold so as to gain 30% on the whole transaction?

Ans ☒ 1. ₹15,000

☒ 2. ₹13,500

☒ 3. ₹14,700

☒ 4. ₹14,600

Question ID : 685582468

Status : Answered

Chosen Option : 3

Q.9 The angle of elevation of the top of a tree from a point on the ground which is 300 m away from the tree is 30° . When the tree grew up, its angle of elevation of the top of it became 60° from the same point. How much did the tree grow? (nearest to an integer)

Ans ☒ 1. 342 m

☒ 2. 364 m

☒ 3. 384 m

☒ 4. 346 m

Question ID : 685582495

Status : Answered

Chosen Option : 4

Q.10 Two persons A and B are paid a total of ₹2,040 per week by their employer. If B is paid 140 per cent of the sum paid to A, then how much is A paid per week?

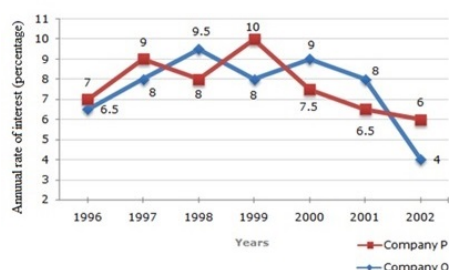
- Ans**
- ☒ 1. ₹750
 - ☒ 2. ₹820
 - ☒ 3. ₹850
 - ☒ 4. ₹800

Question ID : **685582467**
Status : **Answered**
Chosen Option : **3**

Q.11 Two different finance companies declare a fixed annual rate of interest on the amount invested by investors with them. The interest rate declared by these companies can vary from year to year depending on the variation in the country's economy and the interest rate of the banks. The annual rate of interest offered by the two companies P and Q is shown in the graph below.

Study the graph and answer the question.

Annual percentage rate of interest offered by two finance companies P and Q over the years.



A sum of ₹3.5 lakhs was invested in company Q in the year 2000 for one year. How much more simple interest will accrue if the amount was invested in company P?

- Ans**
- ☒ 1. ₹5,500
 - ☒ 2. ₹5,000
 - ☒ 3. ₹5,200
 - ☒ 4. ₹5,250

Question ID : **685582502**
Status : **Answered**
Chosen Option : **4**

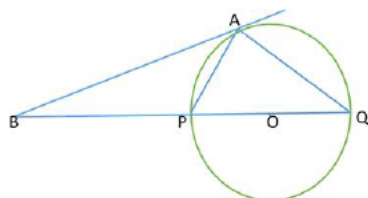
Q.12 Two equilateral triangles of side $10\sqrt{3}$ cm are joined to form a quadrilateral. What is the altitude of the quadrilateral?

- Ans**
- ☒ 1. 12 cm
 - ☒ 2. 14 cm
 - ☒ 3. 16 cm
 - ☒ 4. 15 cm

Question ID : **685582490**
Status : **Answered**
Chosen Option : **4**

Q.13

The tangent at a point A on a circle with centre O intersects the diameter PQ of the circle, when extended, at point B. If $\angle BAQ = 105^\circ$, then $\angle APQ$ is equal to:



Ans ☒ 1. 55°

☒ 2. 60°

☒ 3. 65°

☒ 4. 75°

Question ID : 685582489

Status : Answered

Chosen Option : 4

Q.14 The speed of a train is $2\frac{1}{6}$ times the speed of a car. The car covers 486 km in 9 hours. How much distance will the train cover in 6 hours?

Ans ☒ 1. 612 km

☒ 2. 702 km

☒ 3. 732 km

☒ 4. 712 km

Question ID : 685582478

Status : Answered

Chosen Option : 2

Q.15 A batsman scores 92 runs in the 15th inning and thus increases his average by 4. What is his average after the 15th inning?

Ans ☒ 1. 40

☒ 2. 32

☒ 3. 35

☒ 4. 36

Question ID : 685582462

Status : Answered

Chosen Option : 4

Q.16 From a point P which is at a distance of 10 cm from the centre O of a circle of radius 6 cm, a pair of tangents PQ and PR to the circle at point Q and R respectively, are drawn. Then the area of the quadrilateral PQOR is equal to

Ans ☒ 1. 30 sq.cm

☒ 2. 40 sq.cm

☒ 3. 24 sq.cm

☒ 4. 48 sq.cm

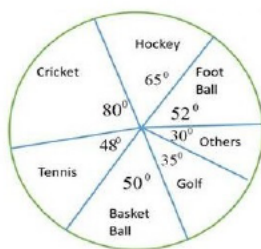
Question ID : 685582488

Status : Answered

Chosen Option : 4

Q.17

The pie-chart given here shows the country's expenditure on various sports during a particular year. Study the pie-chart and answer the question given below.



If the total amount spent on sports in the year was ₹1,80,00,000, then the amount spent on tennis is more than the expenditure on golf by:

- Ans
- ☒ 1. ₹2,40,000
 - ☒ 2. ₹4,75,000
 - ☒ 3. ₹5,50,000
 - ☒ 4. ₹6,50,000

Question ID : 685582501
Status : Answered
Chosen Option : 4

Q.18

The value of $\frac{17.35 + \frac{7}{5} \text{ of } 55 - 7}{(42 \div 6 \times 8.35) - \frac{3}{7} \text{ of } \left(\frac{2}{3} - \frac{1}{5}\right) + [291 \div (80 \div 8)]}$ is:

- Ans
- ☒ 1. 2
 - ☒ 2. 4
 - ☒ 3. 1
 - ☒ 4. 3

Question ID : 685582460
Status : Answered
Chosen Option : 3

Q.19

If $a - b = 5$ and $a^2 + b^2 = 45$, then the value of ab is:

- Ans
- ☒ 1. 25
 - ☒ 2. 10
 - ☒ 3. 15
 - ☒ 4. 20

Question ID : 685582485
Status : Answered
Chosen Option : 2

Q.20 The salaries of Raju and Peter are in the ratio 3 : 5. If the salary of each is increased by ₹2,500, then the new ratio is 11 : 15. What is Peter's salary?

- Ans
- ☒ 1. ₹3,500
 - ☒ 2. ₹2,500
 - ☒ 3. ₹4,000
 - ☒ 4. ₹5,000

Question ID : 685582469

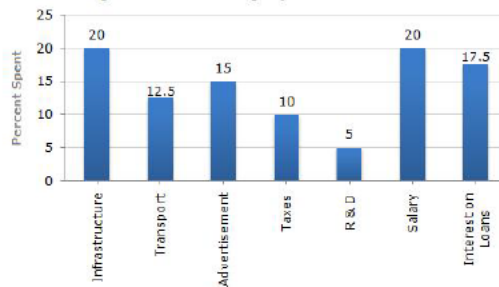
Q.21 If the perimeter of an isosceles right triangle is $(16\sqrt{2} + 16)$ cm, then the area of the triangle is:

- Ans
- ☒ 1. 76 sq.cm
 - ☒ 2. 64 sq.cm
 - ☒ 3. 58 sq.cm
 - ☒ 4. 66 sq.cm

Question ID : 685582491
Status : Answered
Chosen Option : 2

Q.22 Study the graph and answer the question.

Percentage Distribution of Total Expenditure of a Company in 2012.



If the total amount of expenditure of the company is x times the expenditure on transport, then the value of x is:

- Ans
- ☒ 1. 6
 - ☒ 2. 8
 - ☒ 3. 12
 - ☒ 4. 5

Question ID : 685582496
Status : Answered
Chosen Option : 2

Q.23 There is a 15% discount on 8 shirts marked at ₹9,600. How many shirts can be bought with ₹5,100?

- Ans
- ☒ 1. 4
 - ☒ 2. 5
 - ☒ 3. 3
 - ☒ 4. 6

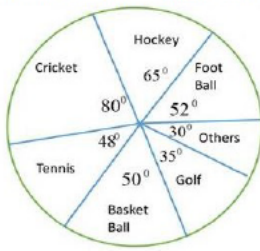
Question ID : 685582465
Status : Answered
Chosen Option : 2

Q.24 The angle of elevation of a ladder leaning against a wall is 60° and the foot of the ladder is 6.5 m away from the wall.
The length of the ladder is:

- Ans
- ☒ 1. $6.5\sqrt{3}$ m
 - ☒ 2. $13\sqrt{3}$ m
 - ☒ 3. 12 m
 - ☒ 4. 13 m

Question ID : 685582494
Status : Answered

Q.25 The pie-chart given here shows the country's expenditure on various sports during a particular year. Study the pie-chart and answer the question given below.



The expenditure on hockey is what percent more than that of basketball?

- Ans
- ☒ 1. 40%
 - ☒ 2. 25%
 - ☒ 3. 30%
 - ☒ 4. 35%

Question ID : 685582500
Status : Answered
Chosen Option : 3

Q.26 Two pipes A and B can fill a tank in 18 minutes and 24 minutes respectively. If both the pipes are opened simultaneously, then after how much time should pipe B be closed so that the tank is full in 12 minutes?

- Ans
- ☒ 1. 6 minutes
 - ☒ 2. 9 minutes
 - ☒ 3. 8 minutes
 - ☒ 4. 5 minutes

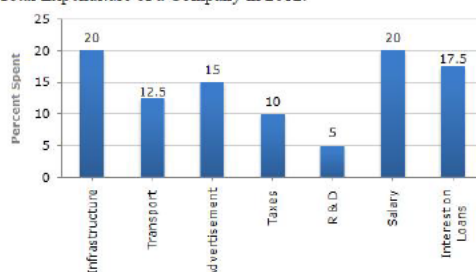
Question ID : 685582477
Status : Answered
Chosen Option : 3

Q.27 If $x^4 + x^{-4} = 2599$, then one of the values of $x - x^{-1}$, where $x > 0$, is equal to:

- Ans
- ☒ 1. 9
 - ☒ 2. 7
 - ☒ 3. 5
 - ☒ 4. 8

Question ID : 685582487
Status : Answered
Chosen Option : 2

Q.28 Study the graph and answer the question.
Percentage Distribution of Total Expenditure of a Company in 2012.



What is the ratio of the total expenditure on salary and interest on loans to the total expenditure on infrastructure and transport?

- Ans
- ☒ 1. 15 : 13

- ☒ 2. 15 : 11
☒ 3. 14 : 11
☒ 4. 13 : 12

Question ID : 685582497
 Status : Answered
 Chosen Option : 1

Q.29 The HCF and LCM of two numbers are 8 and 48 respectively. If the ratio of the two numbers is 2 : 3, then the larger of the two numbers is:

- Ans ☒ 1. 24
☒ 2. 18
☒ 3. 48
☒ 4. 16

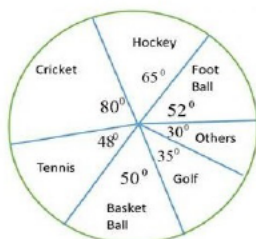
Question ID : 685582457
 Status : Answered
 Chosen Option : 1

Q.30 A shopkeeper has announced 40% rebate on the price of TV sets at the time of sale. If a purchaser needs to have a rebate of ₹26,400, then how many TV sets each costing ₹6,000 should he purchase?

- Ans ☒ 1. 9
☒ 2. 11
☒ 3. 8
☒ 4. 12

Question ID : 685582466
 Status : Answered
 Chosen Option : 2

Q.31 The pie-chart given here shows the country's expenditure on various sports during a particular year. Study the pie-chart and answer the question given below.



If the total amount spent on sports in the year was ₹2,40,00,000, then the amount spent on cricket and football together was:

- Ans ☒ 1. ₹86,00,000
☒ 2. ₹88,00,000
☒ 3. ₹78,00,000
☒ 4. ₹44,00,000

Question ID : 685582499
 Status : Answered
 Chosen Option : 2

Q.32 A circular wire of diameter 77 cm is bent in the form of a rectangle whose length is 142% of its breadth. What is the area of the rectangle? (Take $\pi = \frac{22}{7}$)

- Ans ☒ 1. 3520 sq.cm

✗ 2. 3450 sq.cm

✓ 3. 3550 sq.cm

✗ 4. 3620 sq.cm

Question ID : 685582484

Status : Answered

Chosen Option : 3

Q.33 A cuboidal tank has 25000 litres of water. If the depth of the cuboid is $\frac{1}{5}$ of its length and breadth is $\frac{1}{8}$ of its length, then the length of the tank is:

Ans ✗ 1. 12 m

✓ 2. 10 m

✗ 3. 15 m

✗ 4. 18 m

Question ID : 685582481

Status : Answered

Chosen Option : 2

Q.34 A tank is filled in 4 hours by three pipes A, B and C. The pipe C is twice as fast as B and pipe B is thrice as fast as A. How much time will pipe A alone take to fill the tank?

Ans ✗ 1. 25 hours

✓ 2. 40 hours

✗ 3. 30 hours

✗ 4. 32 hours

Question ID : 685582476

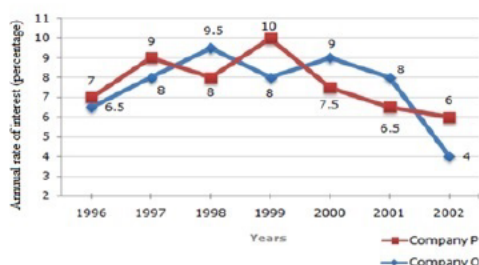
Status : Answered

Chosen Option : 2

Q.35 Two different finance companies declare a fixed annual rate of interest on the amount invested by investors with them. The interest rate declared by these companies can vary from year to year depending on the variation in the country's economy and the interest rate of the banks. The annual rate of interest offered by the two companies P and Q is shown in the graph below.

Study the graph and answer the question.

Annual percentage rate of interest offered by two finance companies P and Q over the years.



If two sums in the ratio 9 : 10 are invested in companies P and Q respectively in 1999, then what is the ratio of the simple interests received from companies P and Q respectively after one year?

Ans ✗ 1. 7 : 8

✗ 2. 8 : 9

✓ 3. 9 : 8

✗ 4. 8 : 7

Question ID : 685582503

Q.36 A single equivalent discount equivalent to three successive discounts of 10% , 16% and 25% , is equal to:

- Ans
- ☐ 1. 42%
 - ☐ 2. 46.5%
 - ☐ 3. 41%
 - ☒ 4. 43.3%

Question ID : **685582464**
Status : **Answered**
Chosen Option : 4

Q.37 A rectangular sheet of paper which is 88 cm long and 11 cm wide is rolled to form a cylinder of height equal to its width of the paper. What is the volume of the cylinder so formed?

- Ans
- ☐ 1. 7676 cm³
 - ☒ 2. 6776 cm³
 - ☐ 3. 6546 cm³
 - ☐ 4. 6786 cm³

Question ID : **685582483**
Status : **Answered**
Chosen Option : 2

Q.38

The value of $\frac{56 + \frac{2}{3} \text{ of } 27 - 8}{15 - \frac{2}{5} \text{ of } (29 - 14)}$ is:

- Ans
- ☐ 1. 12
 - ☐ 2. 10
 - ☐ 3. 15
 - ☒ 4. 11

Question ID : **685582459**
Status : **Answered**
Chosen Option : 4

Q.39 Twelve solid hemispheres of the same size are melted and recast to in a right circular cylinder of diameter 7 cm and height 28 cm. What is the radius of the hemispheres?

- Ans
- ☐ 1. 4.5 cm
 - ☒ 2. 3.5 cm
 - ☐ 3. 3 cm
 - ☐ 4. 3.8 cm

Question ID : **685582480**
Status : **Answered**
Chosen Option : 2

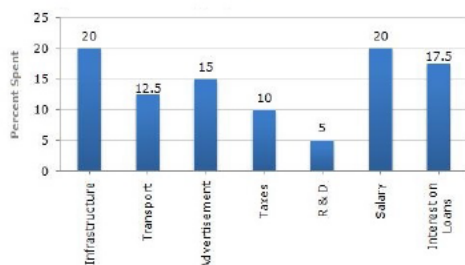
Q.40 The diameter of a cycle wheel is 126 cm. A cyclist takes $16\frac{1}{2}$ minutes to reach the destination at a speed of 72 km/hr.
How many revolutions will the wheel make during the journey? (Take $\pi = \frac{22}{7}$)

- Ans
- ☒ 1. 5000
 - ☐ 2. 5200

- ☒ 3. 4000
☒ 4. 4500

Question ID : 685582482
 Status : Answered
 Chosen Option : 1

Q.41 Study the graph and answer the question.
 Percentage Distribution of Total Expenditure of a Company in 2012.



If the expenditure on salary is ₹2.8 crores, then the difference between the expenditure (in ₹) on advertisements and taxes is?

- Ans ☒ 1. 70 lakhs
☒ 2. 60 lakhs
☒ 3. 30 lakhs
☒ 4. 75 lakhs

Question ID : 685582498
 Status : Answered
 Chosen Option : 1

Q.42 If $\sin\theta - \cos\theta = 0$, $0^\circ < \theta < 90^\circ$, then the value of $\sin^4\theta + \cos^4\theta$ is:

- Ans ☒ 1. $\frac{1}{3}$
☒ 2. 1
☒ 3. $\frac{1}{2}$
☒ 4. $\frac{1}{4}$

Question ID : 685582493
 Status : Answered
 Chosen Option : 3

Q.43 What is the sum of the greatest three digit number and the smallest four digit number such that their HCF is 23?

- Ans ☒ 1. 2001
☒ 2. 2002
☒ 3. 1984
☒ 4. 1998

Question ID : 685582458
 Status : Answered
 Chosen Option : 1

Q.44 If $\sqrt{0.00576 \times y} = 2.4$, then y is equal to:

- Ans ☒ 1. 3600
☒ 2. 1200

- ✓ 3. 1000
✗ 4. 2400

Question ID : 685582455
Status : Answered
Chosen Option : 3

Q.45 Two times of A's salary is five times of B's salary and four times of B's salary is twice C's salary. What is A's salary if C's salary is ₹1,600?

- Ans ✓ 1. ₹2,000
✗ 2. ₹2,500
✗ 3. ₹2,600
✗ 4. ₹3,000

Question ID : 685582470
Status : Answered
Chosen Option : 1

Q.46 Vaibhav can do a piece of work in 60 days. He works there for 15 days and then Sandeep alone finishes the remaining work in 30 days. In how many days will Vaibhav and Sandeep working together finish the work?

- Ans ✗ 1. 20 days
✓ 2. 24 days
✗ 3. 18 days
✗ 4. 22 days

Question ID : 685582475
Status : Answered
Chosen Option : 2

Q.47 If $\sqrt{2} \sin(60^\circ - \alpha) = 1$, $0^\circ < \alpha < 90^\circ$, then α is equal to:

- Ans ✗ 1. 45°
✗ 2. 30°
✓ 3. 15°
✗ 4. 60°

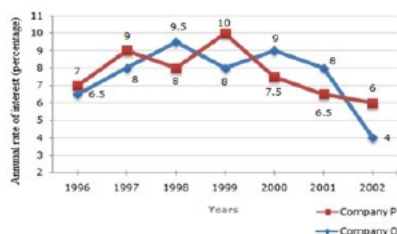
Question ID : 685582492
Status : Answered
Chosen Option : 3

Q.48

Two different finance companies declare a fixed annual rate of interest on the amount invested by investors with them. The interest rate declared by these companies can vary from year to year depending on the variation in the country's economy and the interest rate of the banks. The annual rate of interest offered by the two companies P and Q is shown in the graph below.

Study the graph and answer the question.

Annual percentage rate of interest offered by two finance companies P and Q over the years.



An investor invested a sum of ₹4 lakhs in company Q in the year 2000. After one year, the entire amount was transferred to company P in 2001 as an investment for one year. What amount will the investor receive from company P?

- Ans
- ☒ 1. ₹4,54,420
 - ☒ 2. ₹4,64,340
 - ☒ 3. ₹4,64,430
 - ☒ 4. ₹4,56,320

Question ID : 685582504
Status : Answered
Chosen Option : 2

Q.49 If $a + b + c = 9$ and $ab + bc + ca = 18$, then the value of $a^3 + b^3 + c^3 - 3abc$ is:

- Ans
- ☒ 1. 243
 - ☒ 2. 254
 - ☒ 3. 234
 - ☒ 4. 244

Question ID : 685582486
Status : Answered
Chosen Option : 1

Q.50 2000 employees are assigned to complete a project. At the end of the first year, 15% of the number of employees are decreased and at the end of the second year again 10% of the number of employees are decreased. However, to complete the project in time, the number of employees are increased by 10% at the end of the third year. What was the number of employees working during the fourth year?

- Ans
- ☒ 1. 1786
 - ☒ 2. 1685
 - ☒ 3. 1683
 - ☒ 4. 1783

Question ID : 685582473
Status : Answered
Chosen Option : 3

Section : English Comprehension

Q.1 Select the most appropriate option to substitute the underlined segment in the given sentence. If there is no need to substitute it, select No improvement.

Raman's discovery, made during the voyaging over the Mediterranean sea, that water molecules could scatter light just like air molecules, was very radical in those days.

- Ans
- ☒ 1. during the voyage above

- ☒ 2. No improvement
- ☒ 3. while an voyage across
- ☒ 4. during a voyage across

Question ID : 685582612
Status : Answered
Chosen Option : 4

Comprehension:

Read the given passage and answer the questions that follow:

For years, a long-lost chapter of what is said to be the world's first known novel has been quietly tucked away in a chest in a Japanese storeroom, hiding alongside other heirlooms of a Japanese family with feudal lineage. Experts confirmed that the blue-bound text is a chapter of the 11th Century Japanese classic 'Genji Monogatari' or 'The Tale of Genji'. Written by Japanese noblewoman Murasaki Shikibu, the novel depicts the romantic epic of Prince Genji and his love interest Murasaki-no-ue. The recently found chapter contains an important part of the novel in which the 18-year old prince meets Murasaki-no-ue, according to the Japan Times. The original 54-chapter text no longer exists. Transcriptions by Fujiwara no Teika (1162-1241), a Japanese poet, are believed to be the earliest existing manuscripts. In addition to the most recently discovered chapter, four other confirmed chapters of her transcription are registered as national cultural properties.

Reize ke Shiguretei Bunko, a cultural preservation foundation, has authenticated the text as a chapter of Teika's transcriptions.

In February, 72-year-old Motofuyu Okochi found the little book in his family home in Tokyo and reached out to the foundation to have it authenticated.

Okochi's lineage stretches back to the feudal era of Japan when, in 1743, the manuscript was passed to the Okochi family from another family, according to Asahi Shimbun.

The experts who examined the found chapter were able to confirm that the text is one of Teika's transcriptions in a few ways.

Not only did the handwriting match that of the other found chapters, but the cover of the binding matches the blue of the other texts. The small slip of paper that Teika used to identify the front of the book also matches the slips used on the other chapters.

SubQuestion No : 2

Q.2 Which of the following is NOT true according to the passage?

- Ans
- ☒ 1. The home where the book was kept safely belonged to a feudal family.
 - ☒ 2. The Japanese novel is important because it is believed to be the oldest known novel.
 - ☒ 3. The original manuscript written by Murasaki-no-ue was bound in blue.
 - ☒ 4. The man who found the chapter decided to hand it over to the cultural foundation.

Question ID : 685582656
Status : Answered
Chosen Option : 3

Comprehension:

Read the given passage and answer the questions that follow:

For years, a long-lost chapter of what is said to be the world's first known novel has been quietly tucked away in a chest in a Japanese storeroom, hiding alongside other heirlooms of a Japanese family with feudal lineage. Experts confirmed that the blue-bound text is a chapter of the 11th Century Japanese classic 'Genji Monogatari' or 'The Tale of Genji'. Written by Japanese noblewoman Murasaki Shikibu, the novel depicts the romantic epic of Prince Genji and his love interest Murasaki-no-ue. The recently found chapter contains an important part of the novel in which the 18-year old prince meets Murasaki-no-ue, according to the Japan Times. The original 54-chapter text no longer exists. Transcriptions by Fujiwara no Teika (1162-1241), a Japanese poet, are believed to be the earliest existing manuscripts. In addition to the most recently discovered chapter, four other confirmed chapters of her transcription are registered as national cultural properties.

Reize ke Shiguretei Bunko, a cultural preservation foundation, has authenticated the text as a chapter of Teika's transcriptions.

In February, 72-year-old Motofuyu Okochi found the little book in his family home in Tokyo and reached out to the foundation to have it authenticated.

Okochi's lineage stretches back to the feudal era of Japan when, in 1743, the manuscript was passed to the Okochi family from another family, according to Asahi Shimbun.

The experts who examined the found chapter were able to confirm that the text is one of Teika's transcriptions in a few ways.

Not only did the handwriting match that of the other found chapters, but the cover of the binding matches the blue of the other texts. The small slip of paper that Teika used to identify the front of the book also matches the slips used on the other chapters.

SubQuestion No : 3

Q.3 How many chapters of the novel have been listed as cultural properties?

- Ans ☒ 1. Eighteen
- ☒ 2. Five
- ☒ 3. Fifty-four
- ☒ 4. Eleven

Question ID : 685582652

Status : Answered

Chosen Option : 2

Comprehension:

Read the given passage and answer the questions that follow:

For years, a long-lost chapter of what is said to be the world's first known novel has been quietly tucked away in a chest in a Japanese storeroom, hiding alongside other heirlooms of a Japanese family with feudal lineage. Experts confirmed that the blue-bound text is a chapter of the 11th Century Japanese classic 'Genji Monogatari' or 'The Tale of Genji'. Written by Japanese noblewoman Murasaki Shikibu, the novel depicts the romantic epic of Prince Genji and his love interest Murasaki-no-ue. The recently found chapter contains an important part of the novel in which the 18-year old prince meets Murasaki-no-ue, according to the Japan Times. The original 54-chapter text no longer exists. Transcriptions by Fujiwara no Teika (1162-1241), a Japanese poet, are believed to be the earliest existing manuscripts. In addition to the most recently discovered chapter, four other confirmed chapters of her transcription are registered as national cultural properties.

Reize ke Shiguretei Bunko, a cultural preservation foundation, has authenticated the text as a chapter of Teika's transcriptions.

In February, 72-year-old Motofuyu Okochi found the little book in his family home in Tokyo and reached out to the foundation to have it authenticated.

Okochi's lineage stretches back to the feudal era of Japan when, in 1743, the manuscript was passed to the Okochi family from another family, according to Asahi Shimbun.

The experts who examined the found chapter were able to confirm that the text is one of Teika's transcriptions in a few ways.

Not only did the handwriting match that of the other found chapters, but the cover of the binding matches the blue of the other texts. The small slip of paper that Teika used to identify the front of the book also matches the slips used on the other chapters.

SubQuestion No : 4

Q.4 Who was the author of the novel?

- Ans ☒ 1. Rezeike Shiguretei Bunko
- ☒ 2. Murasaki Shikibu
- ☒ 3. Fujiwara no Teika
- ☒ 4. Motofuyu Okochi

Question ID : 685582653

Status : Answered

Chosen Option : 2

Comprehension:

Read the given passage and answer the questions that follow:

For years, a long-lost chapter of what is said to be the world's first known novel has been quietly tucked away in a chest in a Japanese storeroom, hiding alongside other heirlooms of a Japanese family with feudal lineage. Experts confirmed that the blue-bound text is a chapter of the 11th Century Japanese classic 'Genji Monogatari' or 'The Tale of Genji'. Written by Japanese noblewoman Murasaki Shikibu, the novel depicts the romantic epic of Prince Genji and his love interest Murasaki-no-ue. The recently found chapter contains an important part of the novel in which the 18-year old prince meets Murasaki-no-ue, according to the Japan Times. The original 54-chapter text no longer exists. Transcriptions by Fujiwara no Teika (1162-1241), a Japanese poet, are believed to be the earliest existing manuscripts. In addition to the most recently discovered chapter, four other confirmed chapters of her transcription are registered as national cultural properties.

Reize ke Shiguretei Bunko, a cultural preservation foundation, has authenticated the text as a chapter of Teika's transcriptions.

In February, 72-year-old Motofuyu Okochi found the little book in his family home in Tokyo and reached out to the foundation to have it authenticated.

Okochi's lineage stretches back to the feudal era of Japan when, in 1743, the manuscript was passed to the Okochi family from another family, according to Asahi Shimbun.

The experts who examined the found chapter were able to confirm that the text is one of Teika's transcriptions in a few ways.

Not only did the handwriting match that of the other found chapters, but the cover of the binding matches the blue of the other texts. The small slip of paper that Teika used to identify the front of the book also matches the slips used on the other chapters.

SubQuestion No : 5

Q.5 Where was the chapter discovered?

- Ans
- ☒ 1. In a cultural foundation
 - ☒ 2. In a family storeroom
 - ☒ 3. In a library in Tokyo
 - ☒ 4. In a royal palace

Question ID : 685582654

Status : Answered

Chosen Option : 2

Comprehension:

Read the given passage and answer the questions that follow:

For years, a long-lost chapter of what is said to be the world's first known novel has been quietly tucked away in a chest in a Japanese storeroom, hiding alongside other heirlooms of a Japanese family with feudal lineage. Experts confirmed that the blue-bound text is a chapter of the 11th Century Japanese classic 'Genji Monogatari' or 'The Tale of Genji'. Written by Japanese noblewoman Murasaki Shikibu, the novel depicts the romantic epic of Prince Genji and his love interest Murasaki-no-ue. The recently found chapter contains an important part of the novel in which the 18-year old prince meets Murasaki-no-ue, according to the Japan Times. The original 54-chapter text no longer exists. Transcriptions by Fujiwara no Teika (1162-1241), a Japanese poet, are believed to be the earliest existing manuscripts. In addition to the most recently discovered chapter, four other confirmed chapters of her transcription are registered as national cultural properties.

Reize ke Shiguretei Bunko, a cultural preservation foundation, has authenticated the text as a chapter of Teika's transcriptions.

In February, 72-year-old Motofuyu Okochi found the little book in his family home in Tokyo and reached out to the foundation to have it authenticated.

Okochi's lineage stretches back to the feudal era of Japan when, in 1743, the manuscript was passed to the Okochi family from another family, according to Asahi Shimbun.

The experts who examined the found chapter were able to confirm that the text is one of Teika's transcriptions in a few ways.

Not only did the handwriting match that of the other found chapters, but the cover of the binding matches the blue of the other texts. The small slip of paper that Teika used to identify the front of the book also matches the slips used on the other chapters.

SubQuestion No : 6

Q.6 Which of the following was NOT one of the ways for confirming the authenticity of the chapter?

- Ans
- ☒ 1. The name of the writer was inscribed on it as also on the earlier chapters.
 - ☒ 2. The slip used by the manuscript writer was similar to the slips on other chapters
 - ☒ 3. The binding cover was of the same colour
 - ☒ 4. The handwriting matched that of the other chapters

Question ID : 685582655

Status : Answered

Chosen Option : 2

Q.7 In the sentence identify the segment which contains the grammatical error.

They informed the teacher that all of they family members would be going to Visakhapatnam.

- Ans
- ☒ 1. would be going
 - ☒ 2. all of they family members
 - ☒ 3. to Visakhapatnam
 - ☒ 4. They informed the teacher that

Question ID : 685582608

Status : Answered

Chosen Option : 2

Q.8 Select the most appropriate option that can be used as a one-word substitute for the given group of words.

A cup or other decorative object awarded as a prize for a victory or success

- Ans ☒ 1. trophy
☒ 2. gift
☒ 3. present(n)
☒ 4. crown

Question ID : 685582641
 Status : Answered
 Chosen Option : 1

Q.9 Select the most appropriate option to fill in the blank.

Educators have _____ unique responsibility towards the empowerment of their students.

- Ans ☒ 1. some
☒ 2. a
☒ 3. an
☒ 4. few

Question ID : 685582616
 Status : Answered
 Chosen Option : 3

Q.10 Select the most appropriate option to fill in the blanks.

The vibrations from wind instruments _____ always positive and good _____ your breathing and health.

- Ans ☒ 1. was; in
☒ 2. are; for
☒ 3. is; in
☒ 4. were; to

Question ID : 685582617
 Status : Answered
 Chosen Option : 2

Q.11 Select the INCORRECTLY spelt word.

- Ans ☒ 1. amateur
☒ 2. audacity
☒ 3. acheivement
☒ 4. audience

Question ID : 685582647
 Status : Answered
 Chosen Option : 3

Comprehension:

Some words have been deleted in the given passage. Fill in the blanks with the given alternatives. Select the most appropriate option for each blank.

Imagination is not only the uniquely human capacity to envision that which is not, and therefore the foundation of all invention and innovation. In (1)_____ arguably most transformative (2)_____ revelatory capacity, it is (3)_____ power that enables us to (4)_____ with humans whose experiences we have (5)_____ shared.

SubQuestion No : 12

Q.12 Select the most appropriate option to fill in blank number (1).

- Ans ☒ 1. his

☐ 2. their

☒ 3. its

☐ 4. our

Question ID : 685582621

Status : Answered

Chosen Option : 4

Comprehension:

Some words have been deleted in the given passage. Fill in the blanks with the given alternatives. Select the most appropriate option for each blank.

Imagination is not only the uniquely human capacity to envision that which is not, and therefore the foundation of all invention and innovation. In (1)_____ arguably most transformative (2)_____ revelatory capacity, it is (3)_____ power that enables us to (4)_____ with humans whose experiences we have (5)_____ shared.

SubQuestion No : 13

Q.13 Select the most appropriate option to fill in blank number (2).

Ans ☐ 1. so

☒ 2. and

☐ 3. all

☐ 4. how

Question ID : 685582622

Status : Answered

Chosen Option : 2

Comprehension:

Some words have been deleted in the given passage. Fill in the blanks with the given alternatives. Select the most appropriate option for each blank.

Imagination is not only the uniquely human capacity to envision that which is not, and therefore the foundation of all invention and innovation. In (1)_____ arguably most transformative (2)_____ revelatory capacity, it is (3)_____ power that enables us to (4)_____ with humans whose experiences we have (5)_____ shared.

SubQuestion No : 14

Q.14 Select the most appropriate option to fill in blank number (3).

Ans ☐ 1. so

☐ 2. few

☒ 3. the

☐ 4. little

Question ID : 685582623

Status : Answered

Chosen Option : 3

Comprehension:

Some words have been deleted in the given passage. Fill in the blanks with the given alternatives. Select the most appropriate option for each blank.

Imagination is not only the uniquely human capacity to envision that which is not, and therefore the foundation of all invention and innovation. In (1)_____ arguably most transformative (2)_____ revelatory capacity, it is (3)_____ power that enables us to (4)_____ with humans whose experiences we have (5)_____ shared.

SubQuestion No : 15

Q.15 Select the most appropriate option to fill in blank number (4).

Ans ☒ 1. empathise

☐ 2. guide

☐ 3. discuss

☒ 4. assimilate



Question ID : 685582624
Status : Answered
Chosen Option : 3

Comprehension:

Some words have been deleted in the given passage. Fill in the blanks with the given alternatives. Select the most appropriate option for each blank.

Imagination is not only the uniquely human capacity to envision that which is not, and therefore the foundation of all invention and innovation. In (1)_____ arguably most transformative (2)_____ revelatory capacity, it is (3)_____ power that enables us to (4)_____ with humans whose experiences we have (5)_____ shared.

SubQuestion No : 16

Q.16 Select the most appropriate option to fill in blank number (5).

- Ans ☒ 1. sporadically
☒ 2. never
☒ 3. sooner
☒ 4. hopefully

Question ID : 685582625
Status : Answered
Chosen Option : 2

Q.17 Select the most appropriate synonym of the given word.

OPINION

- Ans ☒ 1. sense
☒ 2. view
☒ 3. chance
☒ 4. wisdom

Question ID : 685582627
Status : Answered
Chosen Option : 2

Q.18 Select the INCORRECTLY spelt word.

- Ans ☒ 1. hallucination
☒ 2. discrimination
☒ 3. illumination
☒ 4. intimation

Question ID : 685582649
Status : Answered
Chosen Option : 2

Q.19 Select the most appropriate option that can be used as a one-word substitute for the given group of words.

All the people in a country or area who are entitled to vote in an election

- Ans ☒ 1. inhabitants
☒ 2. residents
☒ 3. electorate
☒ 4. settlers

Question ID : 685582644
Status : Answered

Q.20 Select the most appropriate synonym of the given word.

LOYAL

- Ans ☒ 1. legal
☒ 2. routine
☒ 3. devoted
☒ 4. varied

Question ID : 685582626

Status : Answered

Chosen Option : 3

Q.21 Select the most appropriate option that can be used as a one-word substitute for the given group of words.

A sea or stretch of water having many islands

- Ans ☒ 1. harbour
☒ 2. ocean
☒ 3. bay
☒ 4. archipelago

Question ID : 685582645

Status : Answered

Chosen Option : 4

Q.22 Select the most appropriate option to substitute the underlined segment in the given sentence. If there is no need to substitute it, select No improvement.

The World Health Organisation warned the Government that even many people were likely to die of epidemics than of the tsunami.

- Ans ☒ 1. that so many people are likely
☒ 2. No improvement
☒ 3. that even most people are going to be likely
☒ 4. that more people were likely

Question ID : 685582614

Status : Answered

Chosen Option : 4

Q.23 Select the most appropriate option that can be used as a one-word substitute for the given group of words.

A large building or group of buildings used to house soldiers

- Ans ☒ 1. fort
☒ 2. dormitory
☒ 3. quarters
☒ 4. barracks

Question ID : 685582643

Status : Answered

Chosen Option : 4

Q.24 Select the most appropriate ANTONYM of the given word.

DISCARD

- Ans ☒ 1. share

- ☒ 2. distribute
- ☒ 3. waste
- ☒ 4. adopt

Question ID : 685582632
Status : Answered
Chosen Option : 4

Q.25 Select the most appropriate idiom to fill in the blank.

The festival expenses are bound to _____ in my pocket.

- Ans
- ☒ 1. be upfront
 - ☒ 2. give a clean chit
 - ☒ 3. be out of the blue
 - ☒ 4. make a dent

Question ID : 685582639
Status : Answered
Chosen Option : 3

Q.26 Select the most appropriate option to substitute the underlined segment in the given sentence. If there is no need to substitute it, select No improvement.

I tried to contact my dentist but her cell phone appeared to have been switched off.

- Ans
- ☒ 1. No improvement
 - ☒ 2. appears to had been
 - ☒ 3. appeared to been
 - ☒ 4. appear to be

Question ID : 685582611
Status : Answered
Chosen Option : 1

Q.27 Select the most appropriate option that can be used as a one-word substitute for the given group of words.

A list of items to be discussed at a formal meeting

- Ans
- ☒ 1. programme
 - ☒ 2. agenda
 - ☒ 3. topics
 - ☒ 4. timetable

Question ID : 685582642
Status : Answered
Chosen Option : 2

Q.28 Select the most appropriate synonym of the given word.

INCREDIBLE

- Ans
- ☒ 1. unwilling
 - ☒ 2. unbelievable
 - ☒ 3. unnoticed
 - ☒ 4. disturbing

Question ID : 685582630
Status : Answered
Chosen Option : 2

Q.29 Select the most appropriate option to fill in the blank.

The Chinese leader's formal Chinese suit _____ Changpao.

- Ans
- ☒ 1. is call
 - ☒ 2. are called
 - ☒ 3. will be called
 - ☒ 4. is called

Question ID : 685582615

Status : Answered

Chosen Option : 4

Q.30 In the sentence identify the segment which contains the grammatical error.

Vini bought two new dresses but either is suitable for the festival.

- Ans
- ☒ 1. Vini bought
 - ☒ 2. suitable for the festival
 - ☒ 3. two new dresses
 - ☒ 4. but either is

Question ID : 685582606

Status : Answered

Chosen Option : 4

Q.31 Select the most appropriate option to substitute the underlined segment in the given sentence. If there is no need to substitute it, select No improvement.

Be polite and courteous will greatly improve your chances of making friends at your new office.

- Ans
- ☒ 1. By being polite and courteous
 - ☒ 2. For being polite and courteous
 - ☒ 3. No improvement
 - ☒ 4. Being polite and courteous

Question ID : 685582613

Status : Answered

Chosen Option : 4

Q.32 Select the most appropriate meaning of the underlined idiom in the sentence.

The suspect made a clean breast of it during the enquiry.

- Ans
- ☒ 1. confessed his crime
 - ☒ 2. took off his shirt
 - ☒ 3. blamed his companion
 - ☒ 4. asked for a fresh shirt

Question ID : 685582638

Status : Answered

Chosen Option : 1

Q.33 Select the most appropriate synonym of the given word.

ALOOF

- Ans
- ☒ 1. detached
 - ☒ 2. rocky
 - ☒ 3. steady
 - ☒ 4. protected

Question ID : 685582629
Status : Answered
Chosen Option : 1

Q.34 Select the most appropriate ANTONYM of the given word.

BLUNT

- Ans ☒ 1. lengthy
☒ 2. sharp
☒ 3. large
☒ 4. charred

Question ID : 685582631
Status : Answered
Chosen Option : 2

Q.35 Select the most appropriate option to fill in the blank.

The first thing they did was to _____ the extent of damage done by the rains.

- Ans ☒ 1. circulate
☒ 2. ascertain
☒ 3. repair
☒ 4. search

Question ID : 685582618
Status : Answered
Chosen Option : 2

Q.36 Select the INCORRECTLY spelt word.

- Ans ☒ 1. miscellaneous
☒ 2. multifarious
☒ 3. gregerious
☒ 4. hilarious

Question ID : 685582650
Status : Answered
Chosen Option : 3

Q.37 In the sentence identify the segment which contains the grammatical error. If the sentence has no error, then select 'No error'.

How many money did Sudhir win in the lottery?

- Ans ☒ 1. No error
☒ 2. in the lottery
☒ 3. How many money
☒ 4. did Sudhir win

Question ID : 685582605
Status : Answered
Chosen Option : 3

Q.38 Select the most appropriate meaning of the given idiom.

Come rain or shine

- Ans ☒ 1. when it does not rain
☒ 2. in the monsoon

✓ 3. whatever happens

✗ 4. in bad weather



Question ID : 685582636
Status : Answered
Chosen Option : 3

Q.39 Select the most appropriate ANTONYM of the given word.

INNATE

- Ans
- ✗ 1. basic
 - ✗ 2. simple
 - ✗ 3. unassuming
 - ✓ 4. acquired

Question ID : 685582633
Status : Answered
Chosen Option : 4

Q.40 Select the most appropriate meaning of the given idiom.

To be thrown in at the deep end

- Ans
- ✓ 1. learn to do the difficult things too soon
 - ✗ 2. need to do one thing at a time
 - ✗ 3. unable to do the given work
 - ✗ 4. try to do too many things at the same time

Question ID : 685582640
Status : Answered
Chosen Option : 3

Q.41 Select the most appropriate synonym of the given word.

INTENSIFY

- Ans
- ✗ 1. eliminate
 - ✗ 2. terminate
 - ✓ 3. strengthen
 - ✗ 4. destroy

Question ID : 685582628
Status : Answered
Chosen Option : 3

Q.42 Select the most appropriate ANTONYM of the given word.

TURBID

- Ans
- ✗ 1. mixed
 - ✗ 2. varied
 - ✗ 3. confused
 - ✓ 4. clear

Question ID : 685582634
Status : Answered
Chosen Option : 4

Q.43 Select the most appropriate ANTONYM of the given word.

AWARE

- Ans ☒ 1. ignorant
☒ 2. resilient
☒ 3. robust
☒ 4. impervious

Question ID : 685582635
 Status : Answered
 Chosen Option : 1

Q.44 Select the INCORRECTLY spelt word.

- Ans ☒ 1. tongue
☒ 2. vogue
☒ 3. vague
☒ 4. argyu

Question ID : 685582646
 Status : Answered
 Chosen Option : 4

Q.45 In the sentence identify the segment which contains the grammatical error. If the sentence has no error, then select 'No error'.

Whom did you give the packet to?

- Ans ☒ 1. did you give
☒ 2. No error
☒ 3. Whom
☒ 4. the packet to

Question ID : 685582609
 Status : Answered
 Chosen Option : 4

Q.46 In the sentence identify the segment which contains the grammatical error.

Her sister lives in Pune, one of the major city in Maharashtra.

- Ans ☒ 1. in Maharashtra
☒ 2. Her sister lives
☒ 3. one of the major city
☒ 4. in Pune

Question ID : 685582607
 Status : Answered
 Chosen Option : 3

Q.47 Select the most appropriate option to substitute the underlined segment in the given sentence. If there is no need to substitute it, select No improvement.

The children has had their dinner but the adults still have to eat.

- Ans ☒ 1. are have their dinner
☒ 2. have had their dinner
☒ 3. No improvement
☒ 4. is having the dinner

Question ID : 685582610
 Status : Answered
 Chosen Option : 2

Q.48 Select the most appropriate meaning of the underlined idiom in the sentence.

"The situation is getting out of hand " the manager said to us.

- Ans ☒ 1. not in control anymore
☐ 2. going to be handled soon
☐ 3. can be passed on to someone else
☐ 4. not growing fast enough

Question ID : 685582637

Status : Answered

Chosen Option : 1

Q.49 Select the most appropriate option to fill in the blank.

Unfortunately, the computer has also been responsible for the _____ of fraudulent schemes through which many people are deceived by promises of quick wealth.

- Ans ☐ 1. promulgation
☒ 2. proliferation
☐ 3. proclamation
☐ 4. pretension

Question ID : 685582619

Status : Answered

Chosen Option : 2

Q.50 Select the INCORRECTLY spelt word.

- Ans ☒ 1. fallicious
☐ 2. victorious
☐ 3. malicious
☐ 4. generous

Question ID : 685582648

Status : Answered

Chosen Option : 1