

# SSC CPO Tier-I

**Previous Year Paper**  
**(12 March 2019 shift 2)**  
**English**

[www.freshersnow.com](http://www.freshersnow.com)

## Recruitment of Sub-Inspector in Delhi Police, CAPFs and Assistant Sub-Inspector in CISF Examination, 2018

Roll No. :	
Registration No.	
Name :	
Exam Venue :	
Exam Time :	3:00 PM - 5:00 PM
Exam Date :	12/03/2019

Section : SI CPO

**Q.1** Three of the following four words are alike in a certain way and one is different. Find the odd one out.

- Ans** ☒ 1. Moon  
☒ 2. Mars  
☒ 3. Mercury  
☒ 4. Venus

Question ID : **98958010142**  
 Status : **Answered**  
 Chosen Option : 1

**Q.2** Three of the following four words are alike in a certain way and one is different. Find the odd one out.

- Ans** ☒ 1. Hexagon  
☒ 2. Ellipse  
☒ 3. Parallelogram  
☒ 4. Rhombus

Question ID : **98958010143**  
 Status : **Answered**  
 Chosen Option : 2

**Q.3** 'Disease' is related to 'Pain' in the same way as 'Accident' is related to '\_\_\_\_\_'.  
 \_\_\_\_\_

- Ans** ☒ 1. Collision  
☒ 2. Carelessness  
☒ 3. Injury  
☒ 4. Driving

Question ID : **98958010144**  
 Status : **Answered**  
 Chosen Option : 3

**Q.4** After starting from his house, Naren walked a few meters towards the east. From there, he took a right turn and walked 80 m, and then took a left turn and walked 20 m. Finally, he took a right turn again and walked 40 m to reach the hospital. If the air distance between his house and the hospital is 130 m, how far did Naren walk towards the east initially?

- Ans** ☒ 1. 40 m

- ☒ 2. 25 m  
☒ 3. 50 m  
☒ 4. 30 m

Question ID : 98958010182  
 Status : Answered  
 Chosen Option : 3

Q.5 Select the option that is related to the third number in the same way as the second number is related to the first number.

24 : 13 :: 38 : \_\_\_\_\_

- Ans ☒ 1. 23  
☒ 2. 17  
☒ 3. 20  
☒ 4. 25

Question ID : 98958010160  
 Status : Answered  
 Chosen Option : 3

Q.6 Which two signs should be interchanged to make the following equation correct?

$$18 + 12 \times 8 - 6 \div 3 = 9$$

- Ans ☒ 1. + and  $\times$   
☒ 2.  $\div$  and +  
☒ 3. - and  $\times$   
☒ 4.  $\times$  and  $\div$

Question ID : 98958010168  
 Status : Answered  
 Chosen Option : 3

Q.7 Three of the following four number-pairs are alike in a certain way and one is different. Find the odd one out.

- Ans ☒ 1. 345 : 678  
☒ 2. 456 : 798  
☒ 3. 123 : 456  
☒ 4. 234 : 567

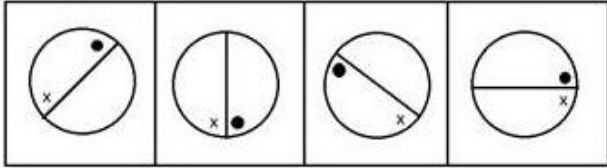
Question ID : 98958010164  
 Status : Answered  
 Chosen Option : 4

Q.8 'Bird' is related to 'Wings' in the same way as 'Fish' is related to '\_\_\_\_\_'.

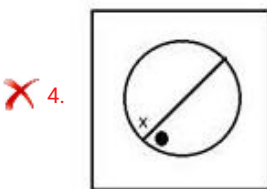
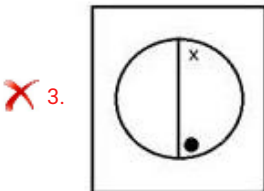
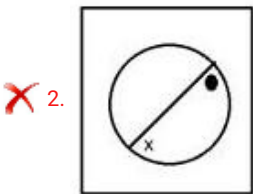
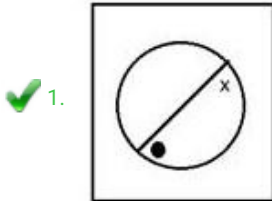
- Ans ☒ 1. Gills  
☒ 2. Fins  
☒ 3. Scales  
☒ 4. Belly

Question ID : 98958010145  
Status : Answered  
Chosen Option : 2

Q.9 Select the figure that will come next in the following series.



Ans



Question ID : 98958010171  
Status : Answered  
Chosen Option : 3

Q.1 Which number will replace the question mark (?) in the following series?

4, 10, 18, 38, ?, 150

- Ans
- ✗ 1. 84
  - ✗ 2. 70
  - ✗ 3. 78
  - ✓ 4. 74

Question ID : 98958010158  
Status : Answered



Chosen Option : 4

Q.1 Which two numbers should be interchanged to make the given equation correct?

1

$$9 + 4 \div 2 - 6 \times 3 = 4 \div 3 \times 6 - 9 + 1$$

Ans ☒ 1. 6 and 4

☐ 2. 4 and 9

☐ 3. 4 and 2

☐ 4. 6 and 3

Question ID : 98958010169

Status : Answered

Chosen Option : 1

Q.1 Select the set of numbers that is similar to the following set.

2

{9, 16, 23}

Ans ☒ 1. {15, 24, 33}

☐ 2. {7, 15, 25}

☐ 3. {16, 25, 32}

☐ 4. {4, 9, 16}

Question ID : 98958010166

Status : Answered

Chosen Option : 1

Q.1 Three of the following four letter-clusters are alike in a certain way and one is different. Find the odd one out.

3

Ans ☐ 1. TVUW

☐ 2. BFDH

☐ 3. KQNT

☒ 4. HPKM

Question ID : 98958010141

Status : Answered

Chosen Option : 1

Q.1 Select the option that is related to the third number in the same way as the second number is related to the first number.

4

6 : 35 :: 9 : \_\_\_\_

Ans ☐ 1. 65

☐ 2. 85

☒ 3. 80

☐ 4. 99

Question ID : 98958010159

Status : Answered

Chosen Option : 3

Q.1 5 Select the option that is related to the third term in the same way as the second term is related to the first term.

HKNQ : JIPO :: DGJM : \_\_\_\_\_

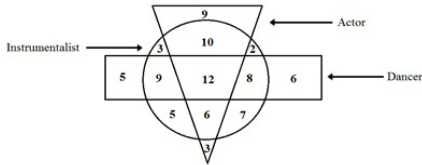
- Ans
- ☒ 1. EELK
  - ☒ 2. FELK
  - ☒ 3. FEJK
  - ☒ 4. FENO

Question ID : 98958010148

Status : Answered

Chosen Option : 2

Q.1 6 In the following diagram, the triangle represents 'actors', the circle represents 'instrumentalists' and the rectangle represents 'dancers'. The numbers in different segments show the number of persons.



How many dancers are instrumentalists but not actors?

- Ans
- ☒ 1. 17
  - ☒ 2. 21
  - ☒ 3. 12
  - ☒ 4. 20

Question ID : 98958010184

Status : Answered

Chosen Option : 1

Q.1 7 Three of the following four number-pairs are alike in a certain way and one is different. Find the odd one out.

- Ans
- ☒ 1. 24 : 48
  - ☒ 2. 48 : 84
  - ☒ 3. 56 : 75
  - ☒ 4. 36 : 63

Question ID : 98958010163

Status : Answered

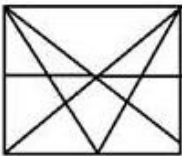
Chosen Option : 3

Q.1 8 Select the option in which the given figure is embedded. (Rotation is not allowed)

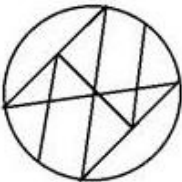


Ans

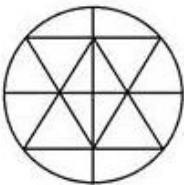
✗ 1.



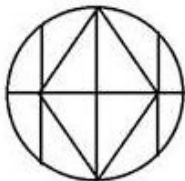
✗ 2.



✓ 3.

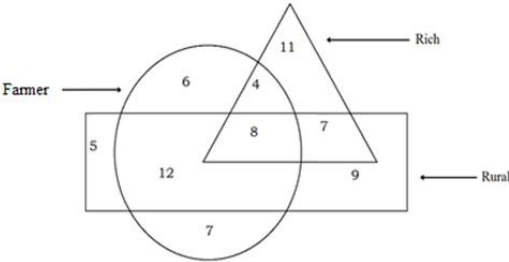


✗ 4.



Question ID : 98958010176  
Status : Answered  
Chosen Option : 3

Q.1 In the following diagram, the triangle represents 'rich', the circle represents 'Farmer' and the rectangle represents 'rural'. The numbers in different segments show the number of persons.

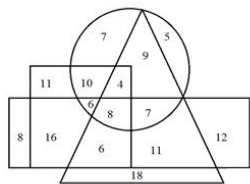


How many rich Farmers are not rural?  
Ans ✗ 1. 12  
✗ 2. 8  
✗ 3. 7  
✓ 4. 4

Question ID : 98958010183  
Status : Answered  
Chosen Option : 4

Q.2  
0

In the following diagram, the triangle represents 'actors', the circle represents 'male', the rectangle represents 'painters' and the square represents 'artists'. The numbers in different segments show the number of persons.



How many male actors are painters but not artists?

- Ans ☒ 1. 7
- ☐ 2. 8
- ☐ 3. 13
- ☐ 4. 15

Question ID : 98958010185

Status : Answered

Chosen Option : 1

Q.2 In a code language, BACHELOR is written as SNMDIBBA. How will COHESION be written as in that language?

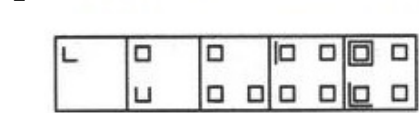
- 1
- Ans ☐ 1. ONIFTJBP
- ☒ 2. ONJRFGPB
- ☐ 3. BPJTFINO
- ☐ 4. NPHTDIND





Question ID : 98958010151

Status : Not Answered

Chosen Option : --

Q.2 Select the figure that will come next in the following series.



- Ans ☐ 1. 
- ☐ 2. 
- ☐ 3. 
- ☒ 4. 

Question ID : 98958010172

Status : Answered

Chosen Option : 4

Q.2

3

Which letter will replace the question mark (?) in the following series?

B, D, G, I, L, ?, Q

- Ans
- ☒ 1. P
  - ☒ 2. N
  - ☒ 3. O
  - ☒ 4. M

Question ID : 98958010136  
Status : Answered  
Chosen Option : 2

Q.2 In a code language, MACHINE is written as CAMHENI. How will MONSTER be written as in that language?  
4

- Ans
- ☒ 1. NOMSRET
  - ☒ 2. SNOMRET
  - ☒ 3. NOMETSR
  - ☒ 4. OMNSETR

Question ID : 98958010150  
Status : Answered  
Chosen Option : 1

Q.2 Which letter-cluster will replace the question mark (?) in the following series?  
5

BECD, FIGH, KNLM, ?, XAYZ

- Ans
- ☒ 1. QWSU
  - ☒ 2. ORPQ
  - ☒ 3. PSQR
  - ☒ 4. QTRS

Question ID : 98958010137  
Status : Answered  
Chosen Option : 4

Q.2 Select the word pair in which the two words are related in the same way as are the two words in the given word-pair.

6  
Small : Dimension

- Ans
- ☒ 1. Cold : Winter
  - ☒ 2. Heat : Temperature
  - ☒ 3. Triangle : Area
  - ☒ 4. Heavy : Weight

Question ID : 98958010147  
Status : Answered  
Chosen Option : 4

Q.2

7 Rakesh starts walking from his house and then takes two left turns and one right turn to reach the market. If he is facing north on reaching the market, in which direction was Rakesh facing when he started from his house?

- Ans
- ☒ 1. North
  - ☒ 2. South
  - ☒ 3. East
  - ☒ 4. West

Question ID : 98958010181  
Status : Answered  
Chosen Option : 2

Q.2 Select the option that is related to the third term in the same way as the second term is related to the first term.  
8

ATKR : FYPW :: TLPG: \_\_\_\_\_.

- Ans
- ☒ 1. XTQL
  - ☒ 2. YTQL
  - ☒ 3. XQTL
  - ☒ 4. YQUL

Question ID : 98958010149  
Status : Answered  
Chosen Option : 4

Q.2 Select the set of numbers that is similar to the following set.  
9

{10, 19, 32}

- Ans
- ☒ 1. {12, 25, 49}
  - ☒ 2. {5, 14, 19}
  - ☒ 3. {7, 13, 23}
  - ☒ 4. {3, 7, 10}

Question ID : 98958010167  
Status : Answered  
Chosen Option : 3

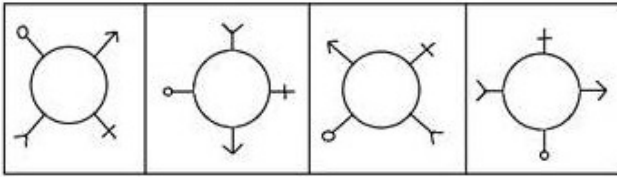
Q.3 Which number will replace the question mark (?) in the following series?  
0

3, 4, 7, 11, 18, ?

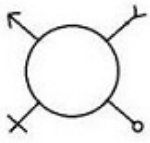
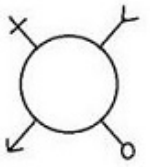
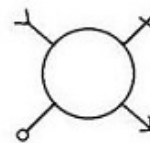
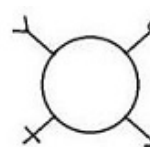
- Ans
- ☒ 1. 31
  - ☒ 2. 25
  - ☒ 3. 29
  - ☒ 4. 22

Question ID : 98958010156  
Status : Answered  
Chosen Option : 3

Q.3  
1 Select the figure that will come next in the following series.



Ans

- ☒ 1. 
- ☒ 2. 
- ☒ 3. 
- ☒ 4. 

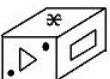
Question ID : 98958010173  
Status : Answered  
Chosen Option : 2

Q.3  
2 Three of the following four number-pairs are alike in a certain way and one is different. Find the odd one out.

- ☒ 1. 7 : 11
- ☒ 2. 11 : 25
- ☒ 3. 9 : 17
- ☒ 4. 13 : 29

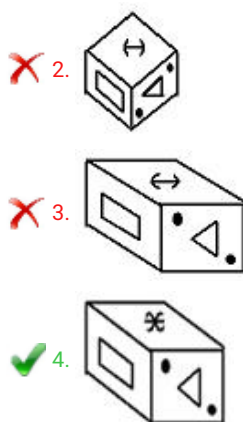
Question ID : 98958010162  
Status : Answered  
Chosen Option : 4

Q.3  
3 Select the correct mirror image of the given figure when the mirror is placed on the right of the figure



Ans

- ☒ 1. 



Question ID : 98958010179  
Status : Answered  
Chosen Option : 4

Q.3 Select the correct alternative to indicate the arrangement of the following words in a logical and meaningful order.

4

1. Diagnosis
2. Recovery
3. Pain
4. Treatment
5. Hospital

Ans ☒ 1. 5, 3, 1, 4, 2  
☒ 2. 3, 5, 1, 4, 2  
☒ 3. 5, 1, 4, 1, 2  
☒ 4. 3, 5, 4, 1, 2

Question ID : 98958010138  
Status : Answered  
Chosen Option : 2

Q.3 If FAKE is coded as 52106 and MAD is coded as 1225, then how will DEER be coded as?

5

Ans ☒ 1. 36419  
☒ 2. 47520  
☒ 3. 35418  
☒ 4. 36420

Question ID : 98958010153  
Status : Answered  
Chosen Option : 1

Q.3 Two statements are given, followed by three conclusions numbered I, II and III. Assuming the statements to be true, even if they seem to be at variance with commonly known facts, decide which of the conclusions logically follow(s) from the statements.

6

**Statements:**

Some rivers are brooks.  
No brook is a stream.

**Conclusions:**

- I. No stream is a brook.
- II. Some streams are rivers.
- III. Some brooks are rivers.



- Ans ☒ 1. Only conclusions I and III follow.
- ☒ 2. Only conclusions II and III follow.
- ☒ 3. Only conclusions I and II follow.
- ☒ 4. Only conclusion I follows.

Question ID : 98958010155  
Status : Answered  
Chosen Option : 1

Q.3 Select the word-pair in which the two words are related in the same way as are the two words in the given word-pair.

7

Circle : Circumference

- Ans ☒ 1. Triangle : Area
- ☒ 2. Plane : Dimension
- ☒ 3. Square : Diagonal
- ☒ 4. Rectangle : Perimeter

Question ID : 98958010146  
Status : Answered  
Chosen Option : 4

Q.3 Which number will replace the question mark (?) in the following series?

8

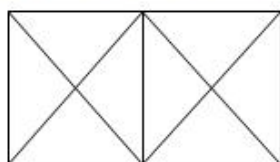
0, 1, 5, 14, 30, ?

- Ans ☒ 1. 55
- ☒ 2. 53
- ☒ 3. 43
- ☒ 4. 46

Question ID : 98958010157  
Status : Answered  
Chosen Option : 1

Q.3 How many triangles are there in the following figure?

9



- Ans ☒ 1. 10
- ☒ 2. 18
- ☒ 3. 16
- ☒ 4. 14

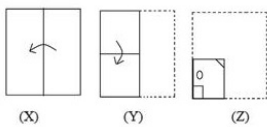
Question ID : 98958010174  
Status : Answered  
Chosen Option : 2

Q.4  
0 If  $CAB = 13$  and  $FEED = 41$ , then  $JADE = \underline{\hspace{2cm}}$ .


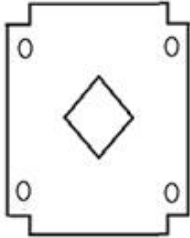
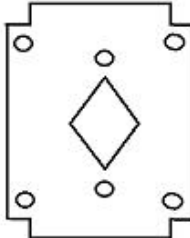
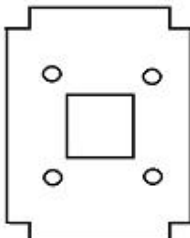
- Ans
- ☒ 1. 43
  - ☒ 2. 45
  - ☒ 3. 35
  - ☒ 4. 41

Question ID : 98958010152  
Status : Answered  
Chosen Option : 4

Q.4  
1 The sequence of folding a piece of square paper and the manner in which the folded paper has been cut is shown in the figures X, Y and Z. How would this paper look when unfolded?



Ans

- ☒ 1. 
- ☒ 2. 
- ☒ 3. 
- ☒ 4. 

Question ID : 98958010180  
Status : Answered  
Chosen Option : 2

Two statements are given, followed by three conclusions numbered I, II and III. Assuming the statements to be true, even if they seem to be at variance with commonly known facts, decide which of the conclusions logically follow(s) from the statements.

**Statements:**

All computers are instruments.  
Some machines are computers.

**Conclusions:**

- I. All instruments are computers.
- II. Some machines are instruments.
- III. Some instruments are machines.

- Ans ☒ 1. Only conclusions II and III follow.
- ☐ 2. Only conclusions I and II follow.
- ☐ 3. Only conclusions I and III follow.
- ☐ 4. All the conclusions follow.

Question ID : 98958010154  
Status : Answered  
Chosen Option : 1

Q.4 Three of the following four number-pairs are alike in a certain way and one is different. Find the odd one out.

- Ans ☐ 1. 25 : 50
- ☒ 2. 36 : 63
- ☐ 3. 9 : 26
- ☐ 4. 49 : 82

Question ID : 98958010165  
Status : Answered  
Chosen Option : 1

Q.4 Select the correct alternative to indicate the arrangement of the following words in a logical and meaningful order.

- 1. Injury
- 2. Recovery
- 3. Accident
- 4. Showroom
- 5. Drive
- 6. Car

- Ans ☐ 1. 6, 4, 3, 5, 1, 2
- ☐ 2. 5, 6, 3, 2, 1, 4
- ☒ 3. 4, 6, 5, 3, 1, 2
- ☐ 4. 4, 6, 5, 3, 2, 1

Question ID : 98958010139  
Status : Answered  
Chosen Option : 3

Q.4 Which of the following interchanges of signs and numbers would make the given equation correct?

$$12 \div 4 + 2 - 6 \times 3 = 3 \div 12 + 6 \times 2 - 4$$

- Ans ☐ 1.  $\times$  and  $\div$ , 4 and 6
- ☒ 2.  $\div$  and  $+$ , 6 and 4

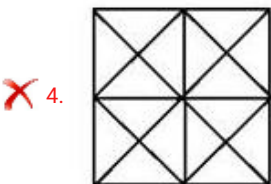
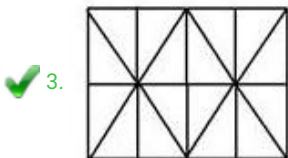
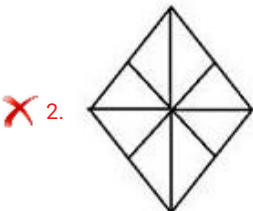
- ☒ 3.  $\times$  and  $-$ , 4 and 6
- ☒ 4.  $-$  and  $+$ , 6 and 4

Question ID : 98958010170  
 Status : Not Answered  
 Chosen Option : --

Q.4  
 6 Select the option in which the given figure is embedded.

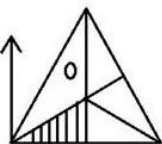


Ans



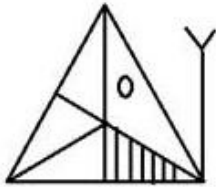
Question ID : 98958010177  
 Status : Answered  
 Chosen Option : 3

Q.4  
 7 Select the correct mirror image of the given figure when the mirror is placed on the right of the figure.

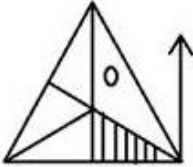


Ans

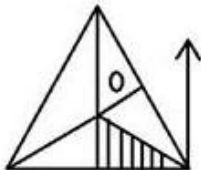
✗ 1.



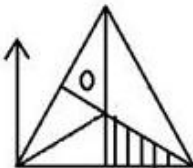
✓ 2.



✗ 3.



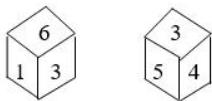
✗ 4.



Question ID : 98958010178  
Status : Answered  
Chosen Option : 2

Q.4 Two positions of the same dice are given. Which number will be at the bottom if '4' is at the top?

8



- Ans
- ✓ 1. 1
  - ✗ 2. 3
  - ✗ 3. 6
  - ✗ 4. 2

Question ID : 98958010175  
Status : Answered  
Chosen Option : 3

Q.4 Select the number-pair in which the two numbers are related in the same way as are the two numbers in the given pair.

9

65 : 126

- Ans
- ✓ 1. 9 : 28
  - ✗ 2. 2 : 10
  - ✗ 3. 26 : 65
  - ✗ 4. 37 : 50

Question ID : 98958010161  
Status : Not Answered  
Chosen Option : --

Q.5 Three of the following four letter-clusters are alike in a certain way and one is different. Find the odd one out.  
0

- Ans ☒ 1. QSUW  
☒ 2. MNOQ  
☒ 3. BDFH  
☒ 4. EGIK

Question ID : 98958010140  
 Status : Answered  
 Chosen Option : 2

Q.5 In January 2019, President Ram Nath Kovind appointed senior advocates Sanjay Jain and KM Nataraj as \_\_\_\_\_ of India.  
1

- Ans ☒ 1. Additional Solicitor Generals  
☒ 2. Auditor Generals  
☒ 3. Director Generals  
☒ 4. Secretary Generals

Question ID : 98958010243  
 Status : Not Answered  
 Chosen Option : --

Q.5 The \_\_\_\_\_ in Kanyakumari was awarded the 'International Gandhi Peace Prize (2015) for its contribution to rural development, education and development of natural resources.  
2

- Ans ☒ 1. Sewa Kendra  
☒ 2. Akshaya Kendra  
☒ 3. Vivekananda Kendra  
☒ 4. Saanjh Kendra

Question ID : 98958010237  
 Status : Answered  
 Chosen Option : 2

Q.5 Where were the first headquarters of the Arya Samaj?  
3

- Ans ☒ 1. Lahore  
☒ 2. Nasik  
☒ 3. Bombay  
☒ 4. Calcutta

Question ID : 98958010255  
 Status : Answered  
 Chosen Option : 4

Q.5 \_\_\_\_\_ are called suicidal bags of the cell.  
4

- Ans ☒ 1. Ribosomes

- ✓ 2. Lysosomes
- ✗ 3. Golgi Apparatus
- ✗ 4. Mitochondria

Question ID : 98958010270  
Status : Answered  
Chosen Option : 2

Q.5  
5 Which of the following is the universal recipient blood group?

- Ans
- ✗ 1. O
  - ✗ 2. A
  - ✓ 3. AB
  - ✗ 4. B

Question ID : 98958010275  
Status : Answered  
Chosen Option : 3

Q.5  
6 Which of the following best describe the nature of Indian economy?

- Ans
- ✓ 1. Mixed Economy
  - ✗ 2. Socialist Economy
  - ✗ 3. Capitalistic Economy
  - ✗ 4. Communist Economy

Question ID : 98958010285  
Status : Answered  
Chosen Option : 1

Q.5  
7 The Khalji or Khilji dynasty, founded by Jalal-ud-din Firuz Khalji ruled large parts of the Indian subcontinent between \_\_\_\_\_.

- Ans
- ✗ 1. 1190 and 1220
  - ✗ 2. 1320 and 1377
  - ✓ 3. 1290 and 1320
  - ✗ 4. 1220 and 1290

Question ID : 98958010242  
Status : Answered  
Chosen Option : 3

Q.5  
8 Enzymes are \_\_\_\_\_ that act as catalysts within the living cells.

- Ans
- ✓ 1. proteins
  - ✗ 2. carbohydrates
  - ✗ 3. vitamins
  - ✗ 4. calcium



Question ID : 98958010259  
 Status : Answered  
 Chosen Option : 2

Q.5 \_\_\_\_\_, a one-hour slot on Doordarshan National channel, is an initiative by the Department of Science and Technology along with Doordarshan, Prasar Bharati.

- Ans
- ☒ 1. Indian Science
  - ☒ 2. Science Live
  - ☒ 3. National Science
  - ☒ 4. DD Science

Question ID : 98958010284  
 Status : Not Answered  
 Chosen Option : --

Q.6 Which of the following is a dance form from Rajasthan?

- Ans
- ☒ 1. Jhulan
  - ☒ 2. Maruni
  - ☒ 3. Kumi
  - ☒ 4. Dappu

Question ID : 98958010247  
 Status : Not Answered  
 Chosen Option : --

Q.6 \_\_\_\_\_ is the first greenfield airport to be constructed in the northeastern region of India.

- Ans
- ☒ 1. Pakyong
  - ☒ 2. Paro
  - ☒ 3. Lengpui
  - ☒ 4. Bagdogra International

Question ID : 98958010245  
 Status : Answered  
 Chosen Option : 1

Q.6 In January 2019, Chief Minister of Tripura, Biplab Kumar Deb unveiled the official logo of the state's tea which features \_\_\_\_\_, the iconic landmark of Tripura.

- Ans
- ☒ 1. Pilak
  - ☒ 2. Devtamura
  - ☒ 3. Ujjayanta palace
  - ☒ 4. Neermahal palace

Question ID : 98958010261  
 Status : Not Answered  
 Chosen Option : --

Q.6



3 Which of the following is a dance form from Karnataka?

- Ans ☒ 1. Bayalata  
☒ 2. Karma  
☒ 3. Lava  
☒ 4. Rouf

Question ID : 98958010281  
Status : Not Answered  
Chosen Option : --

Q.6 In January 2019, the Ministry of \_\_\_\_\_ drafted National Action Plan for Drug Demand Reduction (2018-2023).

4

- Ans ☒ 1. Social Justice and Empowerment  
☒ 2. Health  
☒ 3. Planning and Development  
☒ 4. Education

Question ID : 98958010257  
Status : Answered  
Chosen Option : 2

Q.6 Akbar commissioned \_\_\_\_\_ to chronicle the story of his father Humayun, 'Humayun-nama'.

5

- Ans ☒ 1. Mariam-uz-Zamani  
☒ 2. Jodha Begum  
☒ 3. Gulbadan Begum  
☒ 4. Jagat Gosain Begum

Question ID : 98958010249  
Status : Answered  
Chosen Option : 3

Q.6 The Mahabodhi Temple in \_\_\_\_\_ is the pilgrimage site of the Buddhists.

6

- Ans ☒ 1. Madhya Pradesh  
☒ 2. Bihar  
☒ 3. Odisha  
☒ 4. Assam

Question ID : 98958010267  
Status : Answered  
Chosen Option : 2

Q.6 The Union Defence Minister \_\_\_\_\_ inaugurated the Tamil Nadu Defence Industrial Corridor on 20 January 2019.

7

- Ans ☒ 1. Nirmala Sitharaman  
☒ 2. Rajnath Singh

☒ 3. Radha Mohan Singh

☒ 4. Nitin Gadkari

Question ID : 98958010260

Status : Answered

Chosen Option : 1

Q.6 The Judges of the Supreme Court are appointed by the President under Article \_\_\_\_\_ of the Constitution of India.

8

Ans ☒ 1. 224(1)

☒ 2. 217

☒ 3. 21

☒ 4. 124(2)

Question ID : 98958010238

Status : Answered

Chosen Option : 4

Q.6 The Union Government bestows national sports awards every year to recognize and reward excellence in sports in India.

9

Ans ☒ 1. Arjuna Award

☒ 2. Dhyan Chand Award

☒ 3. Khelo India Award

☒ 4. Dronacharya Award

Question ID : 98958010251

Status : Answered

Chosen Option : 3

Q.7 Megasthenes, a Greek historian visited India in the reign of \_\_\_\_\_ in the 4th century B.C.

0

Ans ☒ 1. Bindusara

☒ 2. Ashoka

☒ 3. Alexander

☒ 4. Chandragupta Maurya

Question ID : 98958010265

Status : Answered

Chosen Option : 4

Q.7 The 'Vision 2040' document, released at the Global Aviation Summit 2019, estimates that India will need \_\_\_\_\_ airports.

1

Ans ☒ 1. 200

☒ 2. 250

☒ 3. 300

☒ 4. 150

Question ID : 98958010279

Status : **Not Answered**  
Chosen Option : --

Q.7  
2 Which element is used to make the coils used in water heaters?

- Ans
- ☒ 1. A mixture of aluminium and copper
  - ☒ 2. A mixture of iron and steel
  - ☒ 3. Nichrome
  - ☒ 4. Copper

Question ID : **98958010253**  
Status : **Not Answered**  
Chosen Option : --

Q.7  
3 In August 2018, India won four bronze medals in the Wushu (Chinese Kung Fu) sporting event at \_\_\_\_\_ held in Indonesia.

- Ans
- ☒ 1. Jakarta-Palembang 2018 Asian Games
  - ☒ 2. Winter Olympics 2018
  - ☒ 3. FIFA Confederations Cup
  - ☒ 4. UEFA Champions League 2018

Question ID : **98958010258**  
Status : **Answered**  
Chosen Option : 1

Q.7  
4 The Collegium for the appointment of Judges of Supreme Court is headed by the \_\_\_\_\_ of India.

- Ans
- ☒ 1. Prime Minister
  - ☒ 2. Parliament
  - ☒ 3. President
  - ☒ 4. Chief Justice

Question ID : **98958010244**  
Status : **Answered**  
Chosen Option : 4

Q.7  
5 According to the new travel norms set by The Union Home Ministry, Indians aged \_\_\_\_\_ can travel to Nepal and Bhutan by producing Aadhaar as Identity proof.

- Ans
- ☒ 1. under 12 and over 55 years
  - ☒ 2. under 25 and over 55 years
  - ☒ 3. under 15 and over 65 years
  - ☒ 4. under 10 and over 60 years

Question ID : **98958010262**  
Status : **Answered**  
Chosen Option : 1

Q.7 \_\_\_\_\_ won at the Australian Open Women's Double Championship in January 2019.

6

- Ans
- ☒ 1. Timea Babos and Barbora Krejcikova
  - ☒ 2. Barbora Krejcikova and Katerina Siniakova
  - ☒ 3. Timea Babos and Kristina Mladenovic
  - ☒ 4. Zhang Shauai and Samantha Stosur

Question ID : 98958010268  
Status : Not Answered  
Chosen Option : --

Q.7 A January 2019 study by the scientists from National Chemical Laboratory, Pune suggested measuring levels of free albumin and albumin attached to glucose molecules in the blood as a diagnostic test for \_\_\_\_.

- Ans
- ☒ 1. Diabetes
  - ☒ 2. Thyroid
  - ☒ 3. Piles
  - ☒ 4. Tuberculosis

Question ID : 98958010239  
Status : Not Answered  
Chosen Option : --

Q.7 \_\_\_\_\_, a Moroccan traveller who is known for his extensive travels, came to India during the regime of Muhammad bin Tughlaq.

- Ans
- ☒ 1. Ralph Fisch
  - ☒ 2. Ibn Battuta
  - ☒ 3. Nicoloi
  - ☒ 4. Tsang Hi

Question ID : 98958010283  
Status : Answered  
Chosen Option : 2

Q.7 Identify the disease caused by the deficiency of Vitamin B1.

- Ans
- ☒ 1. Ariboflavinosis
  - ☒ 2. Rickets
  - ☒ 3. Beriberi
  - ☒ 4. Glossitis

Question ID : 98958010252  
Status : Answered  
Chosen Option : 3

Q.8 'Red Tape' in an economy refers to:

- Ans
- ☒ 1. Rigid excise rules
  - ☒ 2. Rigid conformity to formal rules

- ☒ 3. High Risk Market
- ☒ 4. Low Risk Market

Question ID : 98958010276  
Status : Answered  
Chosen Option : 2

Q.8 'The Hindu Young World-Good books Award for Best Book 2018: Non-Fiction' was awarded to \_\_\_\_\_, author of the book 'A Brush with Indian Art' at the Hindu Lit for Life 2019.

- Ans
- ☒ 1. Venita Coelho
  - ☒ 2. Rajiv Elipe
  - ☒ 3. Vinayak Verma
  - ☒ 4. Mamta Nainy

Question ID : 98958010236  
Status : Not Answered  
Chosen Option : --

Q.8 According to data released by Central Statistics Office (CSO) in December 2018, factory output measured in terms of Index of Industrial Production (IIP) grew \_\_\_\_\_ in October 2018 as against 4.5% in September 2018.

- Ans
- ☒ 1. 8.1%
  - ☒ 2. 6.7%
  - ☒ 3. 7.5%
  - ☒ 4. 6 %

Question ID : 98958010280  
Status : Answered  
Chosen Option : 4

Q.8 Prior to September 2018, \_\_\_\_\_ was the sole state in India without a functional airport.

- Ans
- ☒ 1. Assam
  - ☒ 2. Mizoram
  - ☒ 3. Nagaland
  - ☒ 4. Sikkim

Question ID : 98958010278  
Status : Answered  
Chosen Option : 4

Q.8 Standing committee on finance headed by \_\_\_\_\_ was selected for outstanding performance among the Parliamentary Standing Committees for the Sansad Ratna Awards in Chennai.

- Ans
- ☒ 1. Nishikant Dubey
  - ☒ 2. Dhananjay Mahadik
  - ☒ 3. M Veerappa Moily
  - ☒ 4. NK Premachandran

Question ID : 98958010269



Status : **Not Answered**  
Chosen Option : --

Q.8 \_\_\_\_\_ located in Thekkady, Kerala is the perfect example of nature's bounty with great scenic beauty and rich biodiversity.

- Ans
- ☒ 1. Wild Ass Sanctuary
  - ☒ 2. Dachigam National Park
  - ☒ 3. Pakhal Sanctuary
  - ☒ 4. Periyar Wildlife Sanctuary

Question ID : **98958010264**  
Status : **Answered**  
Chosen Option : **4**

Q.8 In September 2018, \_\_\_\_\_ won the Duleep Trophy by defeating defending champion India Red at NPR College Ground in Dindigul, Tamil Nadu.

- Ans
- ☒ 1. India Yellow
  - ☒ 2. India Black
  - ☒ 3. India Blue
  - ☒ 4. India Green

Question ID : **98958010254**  
Status : **Not Answered**  
Chosen Option : --

Q.8 In January 2019, the Cabinet Committee on Economic Affairs gave its approval for the capacity expansion project of \_\_\_\_\_ Refinery from 3 MMTPA (million metric tonne per annum) to 9 MMTPA.

- Ans
- ☒ 1. Essar
  - ☒ 2. Numaligarh
  - ☒ 3. Mathura
  - ☒ 4. Barauni

Question ID : **98958010246**  
Status : **Not Answered**  
Chosen Option : --

Q.8 Which MP from Baramati (Maharashtra) was honoured with the 'Sansad Ratna Award' in January 2019 in Tamil Nadu?

- Ans
- ☒ 1. Meenakshi Lekhi
  - ☒ 2. Butta Renuka
  - ☒ 3. Mamta Sanghamita
  - ☒ 4. Supriya Sule

Question ID : **98958010250**  
Status : **Not Answered**  
Chosen Option : --

Q.8 In humans, fertilisation usually takes place in the \_\_\_\_\_.

- Ans ☒ 1. Uterus  
☒ 2. Fallopian tube  
☒ 3. Ovary  
☒ 4. Vagina

Question ID : 98958010271  
 Status : Answered  
 Chosen Option : 2

Q.9 \_\_\_\_\_ is a support scheme of Odisha whose primary targets are small farmers, cultivators and landless agricultural labourers.

- Ans ☒ 1. Asha Assistance for Livelihood and Income Augmentation (AALIA)  
☒ 2. Aahar Yojana (AY)  
☒ 3. Khushi Scheme  
☒ 4. Krushak Assistance for Livelihood and Income Augmentation (KALIA)

Question ID : 98958010256  
 Status : Answered  
 Chosen Option : 4

Q.9 In January 2019, Prime Minister Narendra Modi was awarded the first ever \_\_\_\_\_ for his outstanding leadership of the nation.

- Ans ☒ 1. Padma Shri  
☒ 2. Champions of the Earth Award  
☒ 3. Philip Kotler Presidential Award  
☒ 4. Padma Bhushan

Question ID : 98958010240  
 Status : Answered  
 Chosen Option : 3

Q.9 The Government of \_\_\_\_\_ has decided to ban the production, sale and use of single-use plastic products from 1 March 2019.

- Ans ☒ 1. Delhi  
☒ 2. Puducherry  
☒ 3. Goa  
☒ 4. Maharashtra

Question ID : 98958010241  
 Status : Answered  
 Chosen Option : 4

Q.9 The monuments of Khajuraho in the state of Madhya Pradesh are fine denotations of the \_\_\_\_\_ dynasty.

- Ans ☒ 1. Chalukya

- ✓ 2. Chandela
- ✗ 3. Chola
- ✗ 4. Pallava

Question ID : 98958010263  
Status : Answered  
Chosen Option : 2

Q.9 The Swadesh Darshan Scheme aims to promote international and domestic tourism across India. Which of the following is NOT one of the 13 thematic circuits under the scheme of the Ministry of Tourism?

- Ans
- ✗ 1. Desert Circuit
  - ✗ 2. Tribal Circuit
  - ✓ 3. Mahabharata Circuit
  - ✗ 4. Ramayana Circuit

Question ID : 98958010277  
Status : Not Answered  
Chosen Option : --

Q.9 The \_\_\_\_\_ in the human body controls every activity that you perform.

- Ans
- ✗ 1. digestive system
  - ✗ 2. respiratory system
  - ✗ 3. reproductive system
  - ✓ 4. nervous system

Question ID : 98958010272  
Status : Answered  
Chosen Option : 4

Q.9 \_\_\_\_\_ is an autonomous organisation under the Department of Science and Technology of the Government of India.

- Ans
- ✗ 1. Arogya Prasar (AP)
  - ✗ 2. Prayog Prasar (PP)
  - ✓ 3. Vigyan Prasar (VP)
  - ✗ 4. Vidhan Prasar (VP)

Question ID : 98958010274  
Status : Not Answered  
Chosen Option : --

Q.9 The \_\_\_\_\_ is an ancient Indian treatise on statecraft, economic policy and military strategy that was written in Sanskrit. Kautilya is traditionally credited as the author of the text.

- Ans
- ✗ 1. Rigveda
  - ✓ 2. Arthashastra
  - ✗ 3. Charaka Samhita
  - ✗ 4. Puranas



Question ID : 98958010266  
Status : Answered  
Chosen Option : 2

Q.9 The city of victory, Fatehpur Sikri in \_\_\_\_\_ was built during the glorious reign of the Mughals.

- Ans
- ☒ 1. Agra
  - ☐ 2. Aligarh
  - ☐ 3. Jaipur
  - ☐ 4. Bidar

Question ID : 98958010273  
Status : Answered  
Chosen Option : 1

Q.9 Indian mountaineer \_\_\_\_\_ is the first woman in the world to climb Mount Everest twice and the first woman to successfully climb Mt. Everest from Kangshung Face.

- Ans
- ☐ 1. Premlata Agrawal
  - ☒ 2. Santosh Yadav
  - ☐ 3. Malavath Purna
  - ☐ 4. Arunima Sinha

Question ID : 98958010282  
Status : Answered  
Chosen Option : 4

Q.1 The Tyndal Effect is due to:

- Ans
- ☐ 1. Refraction of Light
  - ☐ 2. Dispersion of Light
  - ☒ 3. Scattering of Light
  - ☐ 4. Reflection of Light

Question ID : 98958010248  
Status : Answered  
Chosen Option : 3

Q.1 The income of A is 24% more than the income of B. By what percent is the income of B less than the income of A?

- Ans
- ☐ 1.  $\frac{500}{31}\%$
  - ☐ 2.  $\frac{600}{29}\%$
  - ☐ 3.  $\frac{150}{7}\%$
  - ☒ 4.  $\frac{600}{31}\%$

Question ID : 98958010347

Status : **Answered**  
Chosen Option : **4**

Q.1 02 Let  $\Delta ABC \sim \Delta QPR$  and  $\frac{ar(\Delta ABC)}{ar(\Delta PQR)} = \frac{9}{16}$ . If  $AB = 12$  cm,  $BC = 6$  cm and  $AC = 9$  cm, then  $PR$  is equal to:

- Ans
- ☒ 1. 12 cm
  - ☒ 2. 16 cm
  - ☒ 3. 8 cm
  - ☒ 4. 9 cm

Question ID : **98958010372**  
Status : **Answered**  
Chosen Option : **1**

Q.1 03 6 cubes, each of edge 4 cm, are joined end to end. What is the total surface area of the resulting cuboid?

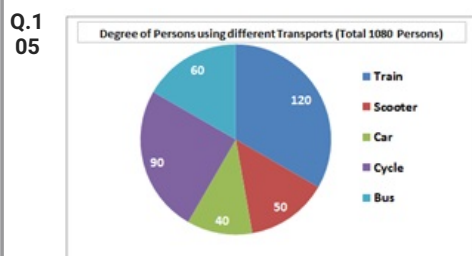
- Ans
- ☒ 1.  $496 \text{ cm}^2$
  - ☒ 2.  $416 \text{ cm}^2$
  - ☒ 3.  $576 \text{ cm}^2$
  - ☒ 4.  $208 \text{ cm}^2$

Question ID : **98958010363**  
Status : **Answered**  
Chosen Option : **2**

Q.1 04  $\frac{5.75 \times 5.75 \times 5.75 + 3.25 \times 3.25 \times 3.25}{57.5 \times 57.5 + 32.5 \times 32.5 - 57.5 \times 32.5}$  is equal to:

- Ans
- ☒ 1. 0.0009
  - ☒ 2. 0.9
  - ☒ 3. 0.009
  - ☒ 4. 0.09

Question ID : **98958010342**  
Status : **Answered**  
Chosen Option : **4**



In the given pie-chart, how many persons are using train to reach their workplace?

- Ans
- ☒ 1. 380
  - ☒ 2. 360
  - ☒ 3. 320
  - ☒ 4. 400

Question ID : 98958010381

Status : Answered

Chosen Option : 2

Q.1 06 A, B and C started a business by investing ₹ 55,000, ₹ 65,000 and ₹ 75,000 respectively. A is a working partner and gets 20% of the profit as working allowance and remaining is distributed in the proportion of their investment. If the money received by C is ₹ 27,000 what is the total profit?

Ans ☒ 1. ₹ 87,750

☐ 2. ₹ 85,500

☐ 3. ₹ 76,850

☐ 4. ₹ 70,200

Question ID : 98958010352

Status : Answered

Chosen Option : 2

Q.1 07 If a train runs with the speed of 48 km/h, it reaches its destination late by 12 minutes. However, if its speed in 64 km/h it is late by 3 minutes only. The right time for the train to cover its journey (in minutes) is:

Ans ☐ 1. 20

☐ 2. 22

☒ 3. 24

☐ 4. 18

Question ID : 98958010359

Status : Answered

Chosen Option : 3

Q.1 08 If  $x - \frac{1}{x} = 6$ , then  $x^3 - \frac{1}{x^3}$  is equal to:

Ans ☒ 1. 234

☐ 2. 198

☐ 3. 176

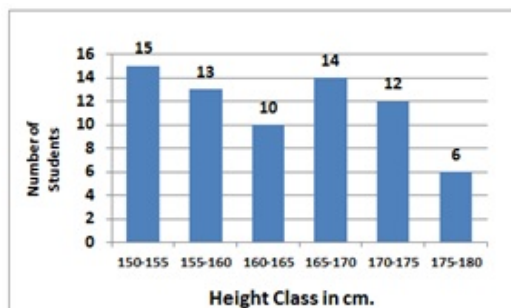
☐ 4. 216

Question ID : 98958010366

Status : Answered

Chosen Option : 1

Q.1 09



In the given histogram, which class is the median class?

Ans ☐ 1. 165 - 175

- ☒ 2. 150 - 155  
☒ 3. 155 - 160  
☒ 4. 160 - 165

Question ID : 98958010384  
 Status : Answered  
 Chosen Option : 1

Q.1 What is the sum of the digits of the least number, which when divided by 12, 16 and 54, leaves the same remainder 7 in each case, and is also completely divisible by 13?

- Ans ☒ 1. 36  
☒ 2. 16  
☒ 3. 9  
☒ 4. 27

Question ID : 98958010339  
 Status : Not Answered  
 Chosen Option : --

Q.1 The efficiency of A, B and C are in the ratio 5 : 6 : 9. Working together, they can complete a work in 18 days. In how many days can B alone complete 25% of that work?

- Ans ☒ 1. 16  
☒ 2. 10  
☒ 3. 18  
☒ 4. 15

Question ID : 98958010356  
 Status : Answered  
 Chosen Option : 4

Q.1 If the seven digit number  $74x29y6$  is divisible by 72, then what will be the value of  $(2x + 3y)$ ?

- Ans ☒ 1. 21  
☒ 2. 20  
☒ 3. 19  
☒ 4. 16

Question ID : 98958010337  
 Status : Not Answered  
 Chosen Option : --

Q.1 In  $\Delta ABC$ ,  $\angle A = 30^\circ$ . If the bisectors of the angle B and angle C meet at a point O in the interior of the triangle, then  $\angle BOC$  is equal to:

- Ans ☒ 1.  $75^\circ$   
☒ 2.  $105^\circ$   
☒ 3.  $120^\circ$   
☒ 4.  $90^\circ$

Question ID : 98958010371  
 Status : Answered

Chosen Option : 2

**Q.1** ABCD is a cyclic quadrilateral such that AB is the diameter of the circle circumscribing it and  $\angle ADC = 145^\circ$ . What is the measure of  $\angle BAC$ ?

- Ans**
- ☒ 1.  $40^\circ$
  - ☒ 2.  $50^\circ$
  - ☒ 3.  $35^\circ$
  - ☒ 4.  $55^\circ$

Question ID : 98958010369

Status : Answered

Chosen Option : 3

**Q.1** A sphere of radius 5 cm is melted and recast into spheres of radius 2 cm each. How many such spheres can be made?

- Ans**
- ☒ 1. 15
  - ☒ 2. 16
  - ☒ 3. 17
  - ☒ 4. 18

Question ID : 98958010364

Status : Answered

Chosen Option : 1

**Q.1** Two numbers are in the ratio 4 : 7. If their HCF is 26, then the sum of these two numbers will be:

- Ans**
- ☒ 1. 364
  - ☒ 2. 286
  - ☒ 3. 338
  - ☒ 4. 312

Question ID : 98958010338

Status : Not Answered

Chosen Option : --

**Q.1** The average of 18 numbers is 52. The average of the first 8 numbers is 62 and the average of the next 7 numbers is 45. If the 16<sup>th</sup> number is 6 less than the 17<sup>th</sup> number and the 17<sup>th</sup> number is one more than the 18<sup>th</sup> number, then what is the average of the 16<sup>th</sup> and 18<sup>th</sup> numbers?

- Ans**
- ☒ 1. 40.5
  - ☒ 2. 40
  - ☒ 3. 39
  - ☒ 4. 39.5

Question ID : 98958010344

Status : Not Answered

Chosen Option : --

**Q.1** A ladder leaning against a wall makes an angle  $\theta$  with the horizontal ground such that  $\sin \theta = \frac{12}{13}$ . If the foot of the ladder is 7.5 m from the wall, then what is the height of the point where the top of the ladder touches the wall?

- Ans**
- ☒ 1. 15 m

- ☒ 2. 8 m  
☒ 3. 18 m  
☒ 4. 12 m

Question ID : 98958010375  
 Status : Answered  
 Chosen Option : 3

Q.1  
19 The value of  $3\frac{1}{5} - [2\frac{1}{2} - \{\frac{5}{6} - (\frac{2}{5} + \frac{3}{10} - \frac{4}{15})\}]$  is:

- Ans
- ☒ 1.  $\frac{11}{10}$   
☒ 2.  $\frac{9}{10}$   
☒ 3.  $\frac{13}{5}$   
☒ 4.  $\frac{6}{5}$

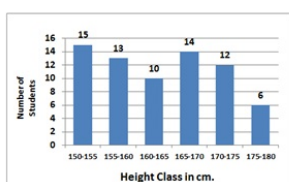
Question ID : 98958010340  
 Status : Not Answered  
 Chosen Option : --

Q.1  
20 If  $a^3 + b^3 = 5824$  and  $a + b = 28$ , then  $(a - b)^2 + ab$  is equal to:

- Ans
- ☒ 1. 208  
☒ 2. 180  
☒ 3. 236  
☒ 4. 152

Question ID : 98958010367  
 Status : Answered  
 Chosen Option : 1

Q.1  
21



In the given histogram, the number of students whose height is in the class interval 175 - 180 is what percent less than the number of students whose height is in the class interval 160 - 165?

- Ans
- ☒ 1.  $\frac{200}{3}\%$   
☒ 2. 60%  
☒ 3. 40%  
☒ 4.  $\frac{50}{3}\%$

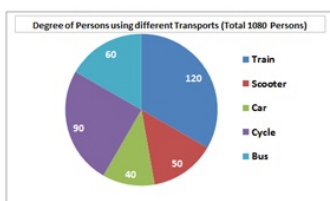
Question ID : 98958010385  
 Status : Answered  
 Chosen Option : 3

Q.1  
22 The value of  $\frac{\sin 30^\circ - \cos 60^\circ + \cot^2 45^\circ}{\cos 30^\circ - \tan 45^\circ + \sin 90^\circ}$  is equal to:

- Ans
- ☒ 1.  $\frac{3}{2}$
  - ☒ 2.  $\frac{\sqrt{3}}{4}$
  - ☒ 3.  $\frac{2\sqrt{3}}{3}$
  - ☒ 4.  $\frac{\sqrt{3}}{2}$

Question ID : 98958010374  
Status : Answered  
Chosen Option : 3

Q.1  
23



In the given pie-chart, the number of persons using a car is what percentage of persons using a scooter?

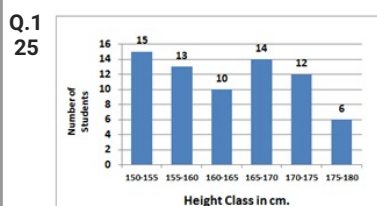
- Ans
- ☒ 1. 75%
  - ☒ 2. 50%
  - ☒ 3. 80%
  - ☒ 4. 60%

Question ID : 98958010380  
Status : Answered  
Chosen Option : 3

Q.1  
24 In an examination, 48% of candidates passed in science and 56% failed in mathematics. If 32% failed in both subjects, then what percent passed in both subjects?

- Ans
- ☒ 1. 28%
  - ☒ 2. 24%
  - ☒ 3. 32%
  - ☒ 4. 22%

Question ID : 98958010349  
Status : Answered  
Chosen Option : 2



In the given histogram, what is the percentage of students whose height is in the class interval 165 - 170?

- Ans
- ☒ 1. 18%



✓ 2. 20%

✗ 3. 25%

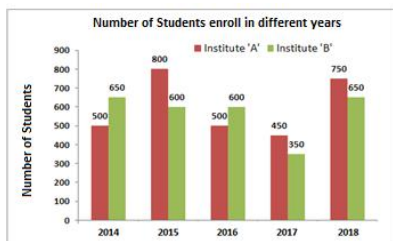
✗ 4. 15%

Question ID : 98958010383

Status : Answered

Chosen Option : 2

Q.1  
26



In the given bar graph, what is the ratio of students of A and B in the combine strength from 2016 to 2018?

Ans ✗ 1. 21 : 23

✓ 2. 20 : 19

✗ 3. 23 : 21

✗ 4. 19 : 20

Question ID : 98958010377

Status : Not Answered

Chosen Option : --

Q.1 Two pipes A and B can fill an empty tank in 8 hours and 12 hours respectively. They are opened alternately for 1 hour each, starting with pipe A first. In how many hours will the empty tank be filled?  
27

Ans ✗ 1.  $9\frac{1}{4}$

✗ 2. 9

✗ 3.  $9\frac{1}{3}$

✓ 4.  $9\frac{1}{2}$

Question ID : 98958010358

Status : Answered

Chosen Option : 4

Q.1 A boat can go 30 km downstream and 24 km upstream in 2 hours 27 minutes. Also, it can go 10 km downstream and 4 km upstream in 37 minutes. What is the speed of the boat upstream (in km/h)?  
28

Ans ✗ 1. 22

✗ 2. 18

✓ 3. 20

✗ 4. 24

Question ID : 98958010360

Status : Not Answered

Chosen Option : --

Q.1



29 The square root of which of the following is a rational number?

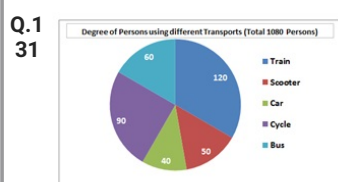
- Ans ☒ 1. 5823.82  
☒ 2. 1489.96  
☒ 3. 22504.9  
☒ 4. 2460.14

Question ID : 98958010336  
 Status : Not Answered  
 Chosen Option : --

Q.1 PA and PB are two tangents from a point P outside a circle with centre O. If A and B are points on the circle such that  $\angle APB = 80^\circ$ , then  $\angle OAB$  is equal to:

- Ans ☒ 1.  $45^\circ$   
☒ 2.  $40^\circ$   
☒ 3.  $55^\circ$   
☒ 4.  $50^\circ$

Question ID : 98958010370  
 Status : Answered  
 Chosen Option : 2



In the given pie-chart, what is the ratio of the total number of persons using train and car together to the total number of persons using other modes of transport to reach their workplace?

- Ans ☒ 1. 5 : 6  
☒ 2. 5 : 3  
☒ 3. 4 : 5  
☒ 4. 3 : 5

Question ID : 98958010382  
 Status : Answered  
 Chosen Option : 3

Q.1 A sum of ₹ 18,000 is invested for 16 months at 8% per annum compounded half-yearly. What is the percentage gain at the end of 16 months, to the nearest whole number?

- Ans ☒ 1. 9%  
☒ 2. 11%  
☒ 3. 10%  
☒ 4. 12%

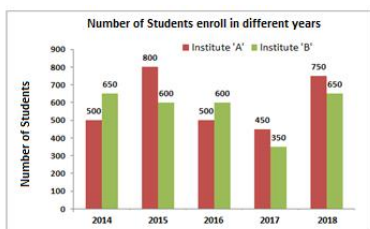
Question ID : 98958010354  
 Status : Not Answered  
 Chosen Option : --

Q.1 36 persons working 8 hours a day can do 3 units of work in 12 days. How many persons are required to do 5 units of that work in 16 days, if they work for 6 hours a day?

- Ans ☒ 1. 50  
☒ 2. 60  
☒ 3. 55  
☒ 4. 45

Question ID : 98958010355  
 Status : Answered  
 Chosen Option : 2

Q.1  
 34



In the given bar graph, the percentage decrease in the number of students in Institute A in 2016 is what percent of students in 2015.

- Ans ☒ 1. 37.5%  
☒ 2. 40.5%  
☒ 3. 35.5%  
☒ 4. 39.5%

Question ID : 98958010378  
 Status : Answered  
 Chosen Option : 1

Q.1  
 35 If  $(2x + 3)^3 + (x - 8)^3 + (x + 13)^3 = (2x + 3)(3x - 24)(x + 13)$ , then what is the value of  $x$ ?

- Ans ☒ 1. -2  
☒ 2. -2.5  
☒ 3. -1  
☒ 4. -1.5

Question ID : 98958010368  
 Status : Not Answered  
 Chosen Option : --

Q.1  
 36 A sum of ₹ 12,800 is invested partly at 15% per annum and the remaining at 12% per annum simple interest. If the total interest at the end of 3 years is ₹ 5,085, then how much money was invested at 15% per annum?

- Ans ☒ 1. ₹ 5,300  
☒ 2. ₹ 7,500  
☒ 3. ₹ 5,800  
☒ 4. ₹ 5,200

Question ID : 98958010353  
 Status : Answered  
 Chosen Option : 1

Q.1 What is the ratio of the mean proportional between 8.1 and 3.6 and the third proportional of 2 and 3?

37

- Ans
- ☒ 1. 5 : 6
  - ☒ 2. 5 : 4
  - ☒ 3. 6 : 5
  - ☒ 4. 4 : 5

Question ID : 98958010351

Status : Not Answered

Chosen Option : --

Q.1 38 If  $\tan 3x = \cot (30^\circ + 2x)$ , then what is the value of  $x$  ?

- Ans
- ☒ 1.  $12^\circ$
  - ☒ 2.  $18^\circ$
  - ☒ 3.  $10^\circ$
  - ☒ 4.  $15^\circ$

Question ID : 98958010373

Status : Answered

Chosen Option : 1

Q.1 39 In a class of 45 students, 40% are girls and the remaining are boys. The average marks of the girls is 64 and that of the boys is 60. What is the average marks of the whole class?

- Ans
- ☒ 1. 61.8
  - ☒ 2. 62.4
  - ☒ 3. 61.6
  - ☒ 4. 62.9

Question ID : 98958010343

Status : Answered

Chosen Option : 3

Q.1 40  $5\frac{5}{6} + \left[ 2\frac{2}{3} - \left\{ 3\frac{3}{4} \left( 3\frac{4}{5} \div 9\frac{1}{2} \right) \right\} \right]$  is equal to:

- Ans
- ☒ 1.  $\frac{44}{7}$
  - ☒ 2. 7
  - ☒ 3.  $\frac{43}{6}$
  - ☒ 4.  $\frac{22}{3}$

Question ID : 98958010341

Status : Not Answered

Chosen Option : --

Q.1 41 A shopkeeper marks his good at a price such that after giving a discount of 25%, the gains 20%. If the marked price of the article is ₹ 736, what is the cost price of the article?

- Ans
- ☒ 1. ₹ 460
  - ☒ 2. ₹ 450

☒ 3. ₹ 440

☒ 4. ₹ 455

Question ID : 98958010345

Status : Answered

Chosen Option : 1

Q.1 42 The sides of a triangle are 8 cm, 15 cm, and 17 cm respectively. At each of its vertices, circles of radius 3.5 cm are drawn. What is the area of the triangle excluding the portion covered by the sectors of the circles ( $\pi = \frac{22}{7}$ )?

Ans ☒ 1. 47 cm<sup>2</sup>

☒ 2. 23.5 cm<sup>2</sup>

☒ 3. 21.5 cm<sup>2</sup>

☒ 4. 40.75 cm<sup>2</sup>

Question ID : 98958010362

Status : Not Answered

Chosen Option : --

Q.1 43 A shopkeeper sold two articles for ₹ 9831 each. On one he gained 13% and on the other, he lost 13%. What is the overall percentage gain or loss?

Ans ☒ 1. 1.69% gain

☒ 2. 6.5% gain

☒ 3. 1.69% loss

☒ 4. 6.5% loss

Question ID : 98958010350

Status : Answered

Chosen Option : 3

Q.1 44 One side of a rhombus is 13 cm and one of its diagonals is 24 cm. What is the area of the rhombus?

Ans ☒ 1. 156 cm<sup>2</sup>

☒ 2. 120 cm<sup>2</sup>

☒ 3. 130 cm<sup>2</sup>

☒ 4. 312 cm<sup>2</sup>

Question ID : 98958010361

Status : Answered

Chosen Option : 2

Q.1 45 From the top of a 12 m high building, the angle of elevation of the top of a tower is 60° and the angle of depression of the foot of the tower is  $\theta$ , such that  $\tan \theta = \frac{3}{4}$ . What is the height of the tower ( $\sqrt{3} = 1.73$ )?

Ans ☒ 1. 36.22 m

☒ 2. 41.41 m

☒ 3. 37.95 m

☒ 4. 39.68 m

Question ID : 98958010376  
Status : Answered  
Chosen Option : 4

Q.1 Pipes A and B can fill a tank in 6 hours and 8 hours respectively and pipe C can empty the full tank in 12 hours. All three pipes are opened together, but pipe A is closed after 3 hours. In how many hours will the remaining part of the tank be filled?

- Ans
- ☒ 1. 10
  - ☒ 2. 11
  - ☒ 3. 12
  - ☒ 4. 9

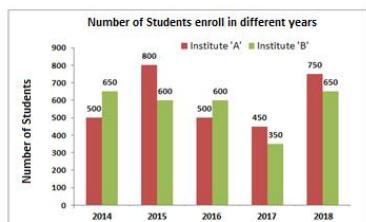
Question ID : 98958010357  
Status : Answered  
Chosen Option : 4

Q.1 The successive discount of 25%, 20% and 10% is equivalent to a single discount of:

- Ans
- ☒ 1. 44%
  - ☒ 2. 46%
  - ☒ 3. 54%
  - ☒ 4. 48%

Question ID : 98958010346  
Status : Answered  
Chosen Option : 2

Q.1  
48



In the given bar graph, the number of students enrolled in institute B in the year 2016 is what percentage of students enrolled in institute A in 2016?

- Ans
- ☒ 1. 120%
  - ☒ 2.  $\frac{250}{3}\%$
  - ☒ 3. 85%
  - ☒ 4.  $\frac{325}{6}\%$

Question ID : 98958010379  
Status : Answered  
Chosen Option : 1

Q.1 The radius of a cylinder is increased by 120% and its height is decreased by 40%. What is the percentage increase in its volume?

- Ans
- ☒ 1. 190.4%
  - ☒ 2. 175.4%
  - ☒ 3. 180.6%

✗ 4. 212.8%

Question ID : 98958010365  
Status : Answered  
Chosen Option : 1

Q.1 50 The price of sugar is decreased by 10%. By what percent can a person increase the consumption so that there is no change in the expenditure?

- Ans
- ✗ 1. 10%
  - ✗ 2.  $\frac{100}{11}$  %
  - ✗ 3.  $\frac{109}{11}$  %
  - ✓ 4.  $\frac{100}{9}$  %

Question ID : 98958010348  
Status : Answered  
Chosen Option : 4

Q.1 51 Select the word, which means the same as the group of words given.

to shorten a piece of writing without losing the sense

- Ans
- ✗ 1. crop
  - ✗ 2. allege
  - ✗ 3. edit
  - ✓ 4. abridge

Question ID : 98958010477  
Status : Answered  
Chosen Option : 4

Q.1 52 Select the synonym of the given word.

FEIGN

- Ans
- ✓ 1. pretend
  - ✗ 2. prefer
  - ✗ 3. prepare
  - ✗ 4. pester

Question ID : 98958010463  
Status : Answered  
Chosen Option : 1

Q.1 53 Identify the segment in the sentence, which contains the grammatical error.

He spends good deal of money on eating out.

- Ans
- ✓ 1. good deal

- ☒ 2. of money
- ☒ 3. He spends
- ☒ 4. on eating out.

Question ID : 98958010438  
 Status : Not Answered  
 Chosen Option : --

Q.1 54 Identify the segment in the sentence, which contains the grammatical error.

Neither Mohit nor Rohit were there at the shop when I went there.

- Ans
- ☒ 1. Neither Mohit nor Rohit
  - ☒ 2. at the shop
  - ☒ 3. when
  - ☒ 4. were there

Question ID : 98958010440  
 Status : Answered  
 Chosen Option : 4

Q.1 55 Select the most appropriate option to substitute the underlined segment in the given sentence. If there is no need to substitute it, select No improvement.

He will pass the driving test if he tries hard enough.

- Ans
- ☒ 1. if he is trying hard
  - ☒ 2. No improvement.
  - ☒ 3. if he had tried hard
  - ☒ 4. if he tried hard

Question ID : 98958010446  
 Status : Answered  
 Chosen Option : 2

Q.1 56 Select the word, which means the same as the group of words given.

a place where bees are kept

- Ans
- ☒ 1. apiary
  - ☒ 2. orchard
  - ☒ 3. aquarium
  - ☒ 4. aviary

Question ID : 98958010475  
 Status : Answered  
 Chosen Option : 1

Q.1 57



Select the word, which means the same as the group of words given.

A place where coins are made

- Ans
- ☐ 1. exchange
  - ☐ 2. bank
  - ☐ 3. reserve
  - ☒ 4. mint

Question ID : 98958010476  
Status : Answered  
Chosen Option : 4

Q.1  
58 Select the most appropriate word to fill in the blank.

Mr. Sharma may be late but I am sure Mr. Kapoor \_\_\_\_\_ be.

- Ans
- ☐ 1. would
  - ☐ 2. can't
  - ☐ 3. should
  - ☒ 4. won't

Question ID : 98958010448  
Status : Answered  
Chosen Option : 4

Q.1  
59 Select the wrongly spelt word.

- Ans
- ☐ 1. groom
  - ☐ 2. groggy
  - ☐ 3. gritty
  - ☒ 4. groovey

Question ID : 98958010481  
Status : Answered  
Chosen Option : 4

Q.1  
60 Identify the segment in the sentence, which contains the grammatical error.

The landlady made me changing the design of the kitchen three times.

- Ans
- ☐ 1. the design
  - ☒ 2. changing
  - ☐ 3. of the kitchen
  - ☐ 4. made me

Question ID : 98958010439  
Status : Answered  
Chosen Option : 2

Comprehension:

In the following passage some words have been deleted. Fill in the blanks with the help of the alternatives given. Select the most appropriate option for each number.

Lord Baden Powell, the founder of Scouting was himself an army scout. During \_\_\_\_\_ (1) war in South Africa, when soldiers \_\_\_\_\_ (2) not easily available, he selected a few boys \_\_\_\_\_ (3) worked as messengers and did a wonderful \_\_\_\_\_ (4) as little scouts. Since then, the Scout Movement has \_\_\_\_\_ (5) throughout the world.

SubQuestion No : 161

Q.1  
61 Select the most appropriate option to fill in blank  
No.1.

- Ans
- ☒ 1. an
  - ☒ 2. one
  - ☒ 3. any
  - ☒ 4. a

Question ID : 98958010454  
Status : Answered  
Chosen Option : 4

Comprehension:

In the following passage some words have been deleted. Fill in the blanks with the help of the alternatives given. Select the most appropriate option for each number.

Lord Baden Powell, the founder of Scouting was himself an army scout. During \_\_\_\_\_ (1) war in South Africa, when soldiers \_\_\_\_\_ (2) not easily available, he selected a few boys \_\_\_\_\_ (3) worked as messengers and did a wonderful \_\_\_\_\_ (4) as little scouts. Since then, the Scout Movement has \_\_\_\_\_ (5) throughout the world.

SubQuestion No : 162

Q.1  
62 Select the most appropriate option to fill in blank  
No.2.

- Ans
- ☒ 1. were
  - ☒ 2. are
  - ☒ 3. had
  - ☒ 4. have

Question ID : 98958010455  
Status : Answered  
Chosen Option : 1

Comprehension:

In the following passage some words have been deleted. Fill in the blanks with the help of the alternatives given. Select the most appropriate option for each number.

Lord Baden Powell, the founder of Scouting was himself an army scout. During \_\_\_\_\_ (1) war in South Africa, when soldiers \_\_\_\_\_ (2) not easily available, he selected a few boys \_\_\_\_\_ (3) worked as messengers and did a wonderful \_\_\_\_\_ (4) as little scouts. Since then, the Scout Movement has \_\_\_\_\_ (5) throughout the world.

SubQuestion No : 163

Q.1  
63 Select the most appropriate option to fill in blank  
No.3.

- Ans
- ☒ 1. whose
  - ☒ 2. whom
  - ☒ 3. which
  - ☒ 4. who

Question ID : 98958010456

Status : Answered

Chosen Option : 4

Comprehension:

In the following passage some words have been deleted. Fill in the blanks with the help of the alternatives given. Select the most appropriate option for each number.

Lord Baden Powell, the founder of Scouting was himself an army scout. During \_\_\_\_\_ (1) war in South Africa, when soldiers \_\_\_\_\_ (2) not easily available, he selected a few boys \_\_\_\_\_ (3) worked as messengers and did a wonderful \_\_\_\_\_ (4) as little scouts. Since then, the Scout Movement has \_\_\_\_\_ (5) throughout the world.

SubQuestion No : 164

Q.1  
64 Select the most appropriate option to fill in blank  
No.4.

- Ans
- ☒ 1. work
  - ☒ 2. thing
  - ☒ 3. job
  - ☒ 4. post

Question ID : 98958010457

Status : Answered

Chosen Option : 3

Comprehension:

In the following passage some words have been deleted. Fill in the blanks with the help of the alternatives given. Select the most appropriate option for each number.

Lord Baden Powell, the founder of Scouting was himself an army scout. During \_\_\_\_\_ (1) war in South Africa, when soldiers \_\_\_\_\_ (2) not easily available, he selected a few boys \_\_\_\_\_ (3) worked as messengers and did a wonderful \_\_\_\_\_ (4) as little scouts. Since then, the Scout Movement has \_\_\_\_\_ (5) throughout the world.

SubQuestion No : 165

Q.1  
65 Select the most appropriate option to fill in blank No. 5.

- Ans
- ☒ 1. spread
  - ☐ 2. extended
  - ☐ 3. stretched
  - ☐ 4. scattered

Question ID : 98958010458  
Status : Answered  
Chosen Option : 2

Q.1  
66 Select the wrongly spelt word.

- Ans
- ☒ 1. courtious
  - ☐ 2. laborious
  - ☐ 3. religious
  - ☐ 4. mysterious

Question ID : 98958010483  
Status : Answered  
Chosen Option : 1

Q.1  
67 Select the most appropriate meaning of the underlined idiom in the given sentence.

If you go for this training, it will be beneficial to you in the long run.

- Ans
- ☐ 1. regularly
  - ☒ 2. eventually
  - ☐ 3. immediately
  - ☐ 4. intermittently

Question ID : 98958010469  
Status : Answered  
Chosen Option : 2

Q.1  
68

Select the most appropriate meaning of the underlined idiom in the given sentence.

Let's hope they will bury the hatchet and be friends again.

- Ans
- ☒ 1. make plans cleverly
  - ☒ 2. keep quiet
  - ☒ 3. take courage
  - ☒ 4. forget past quarrels

Question ID : 98958010472  
Status : Answered  
Chosen Option : 4

Q.1  
69 Select the most appropriate word to fill in the blank.

His new job is connected \_\_\_\_\_ developing software for teaching.

- Ans
- ☒ 1. from
  - ☒ 2. with
  - ☒ 3. by
  - ☒ 4. about

Question ID : 98958010449  
Status : Answered  
Chosen Option : 2

Q.1  
70 Select the most appropriate word to fill in the blank.

The plant will die \_\_\_\_\_ you look after it.

- Ans
- ☒ 1. if
  - ☒ 2. unless
  - ☒ 3. otherwise
  - ☒ 4. until

Question ID : 98958010450  
Status : Answered  
Chosen Option : 2

Q.1  
71 Select the most appropriate word to fill in the blank.

Next week I \_\_\_\_\_ visiting my friend and staying with him for a day.

- Ans
- ☒ 1. intending
  - ☒ 2. intend
  - ☒ 3. intended
  - ☒ 4. intends

Question ID : 98958010452

Status : **Answered**  
Chosen Option : 2

Q.1  
72 Select the synonym of the given word.

AFFLUENT

- Ans
- ☒ 1. strong
  - ☒ 2. wealthy
  - ☒ 3. clever
  - ☒ 4. joyous

Question ID : 98958010460  
Status : **Answered**  
Chosen Option : 2

Q.1  
73 Select the wrongly spelt word.

- Ans
- ☒ 1. blizzard
  - ☒ 2. bitter
  - ☒ 3. bizzare
  - ☒ 4. bewitched

Question ID : 98958010479  
Status : **Answered**  
Chosen Option : 1

Q.1  
74 Select the synonym of the given word.

DAME

- Ans
- ☒ 1. girl
  - ☒ 2. man
  - ☒ 3. female
  - ☒ 4. lady

Question ID : 98958010459  
Status : **Not Answered**  
Chosen Option : --

Q.1  
75 Select the antonym of the given word.

HOSTILE

- Ans
- ☒ 1. aggressive
  - ☒ 2. rebel
  - ☒ 3. forceful
  - ☒ 4. friendly



Question ID : 98958010464  
Status : Answered  
Chosen Option : 4

Q.1  
76 Select the most appropriate meaning of the underlined idiom in the given sentence.

Getting the Fulbright Scholarship at this young age is a feather in his cap.

- Ans
- ☒ 1. a sign of his intelligence
  - ☒ 2. Something he can show off about
  - ☒ 3. an accomplishment to be proud of
  - ☒ 4. an award not to be given up

Question ID : 98958010471  
Status : Answered  
Chosen Option : 3

Q.1  
77 Select the most appropriate option to substitute the underlined segment in the given sentence. If there is no need to substitute it, select No improvement.

Did you do what I telling you to do yesterday.

- Ans
- ☒ 1. what I have told you
  - ☒ 2. what I told you
  - ☒ 3. No improvement.
  - ☒ 4. that I am telling you

Question ID : 98958010443  
Status : Answered  
Chosen Option : 1

Q.1  
78 Select the wrongly spelt word.

- Ans
- ☒ 1. benevolent
  - ☒ 2. beneath
  - ☒ 3. beneficial
  - ☒ 4. benign

Question ID : 98958010482  
Status : Answered  
Chosen Option : 3

Comprehension:



Read the following passage and answer the questions given after it.

The ocean will not look the same color in the future.

Essentially, climate change will make the blues of the ocean bluer and the greens greener. Scientists from MIT, Boston, figured this out by creating a global model that simulates the growth of a tiny creature that lives in the oceans and affects the color we see. Their research was published in the journal Nature Communications.

The ocean looks blue or green to us because of a combination of how sunlight interacts with water molecules and with whatever else lives in that water.

The molecules in water absorb all but the blue part of the spectrum of sunlight, and the water reflects that blue color back. That's the color we see.

The water looks greener when it has more phytoplankton, tiny, microscopic organisms that, like plants, can use chlorophyll to capture mostly the blue portions of the spectrum of sunlight. They then use photosynthesis to create the chemical energy they need to live. When there are more of these creatures in the water absorbing sunlight, they make the water look greener. Conversely, if there are fewer phytoplankton, the water looks bluer.

The creatures' growth is dependent on how much sunlight, carbon dioxide and nutrients are around. Climate change is altering the ocean currents, meaning there will be fewer nutrients for phytoplankton to feed on in some areas, so there will be a decline in their number in those regions.

Since the 1990s, satellites have taken regular measurements of how much chlorophyll is in the ocean. Those levels can change because of weather events or because of climate change.

The study predicts that the blues will intensify, most likely in subtropical regions where phytoplankton will decrease. These are areas near the equator like Bermuda and the Bahamas that are already quite low in phytoplankton.

Regions where there are a lot of nutrients, like in the Southern Ocean or parts of the North Atlantic, will see even faster-growing phytoplankton because those waters are warming with climate change. Those waters will look greener.

Climate change will bring a color change to half of the world's oceans by the end of the 21st century, the study says. That's bad on several levels: For one, phytoplankton remove about as much carbon dioxide from the air as plants and help regulate our climate, research shows. They are also key to other animals' survival." Phytoplankton are at the base, and if the base changes, it endangers everything else along the food web, going far enough to the polar bears or tuna or just about anything that you want to eat or love to see in pictures, "said Stephanie Dutkiewicz, a principal research scientist in MIT.

SubQuestion No : 179

Q.1  
79 The passage is mainly about:

Ans  
✓ 1. The change of the ocean color due to climate change.

- ✗ 2. Why ocean water looks blue.
- ✗ 3. How the growth of phytoplankton will impact the food web
- ✗ 4. The growth of phytoplankton in the ocean.

Question ID : 98958010485  
Status : Answered  
Chosen Option : 1

Comprehension:

Read the following passage and answer the questions given after it.

The ocean will not look the same color in the future.

Essentially, climate change will make the blues of the ocean bluer and the greens greener. Scientists from MIT, Boston, figured this out by creating a global model that simulates the growth of a tiny creature that lives in the oceans and affects the color we see. Their research was published in the journal Nature Communications.

The ocean looks blue or green to us because of a combination of how sunlight interacts with water molecules and with whatever else lives in that water.

The molecules in water absorb all but the blue part of the spectrum of sunlight, and the water reflects that blue color back. That's the color we see.

The water looks greener when it has more phytoplankton, tiny, microscopic organisms that, like plants, can use chlorophyll to capture mostly the blue portions of the spectrum of sunlight. They then use photosynthesis to create the chemical energy they need to live. When there are more of these creatures in the water absorbing sunlight, they make the water look greener. Conversely, if there are fewer phytoplankton, the water looks bluer.

The creatures' growth is dependent on how much sunlight, carbon dioxide and nutrients are around. Climate change is altering the ocean currents, meaning there will be fewer nutrients for phytoplankton to feed on in some areas, so there will be a decline in their number in those regions.

Since the 1990s, satellites have taken regular measurements of how much chlorophyll is in the ocean. Those levels can change because of weather events or because of climate change.

The study predicts that the blues will intensify, most likely in subtropical regions where phytoplankton will decrease. These are areas near the equator like Bermuda and the Bahamas that are already quite low in phytoplankton.


Regions where there are a lot of nutrients, like in the Southern Ocean or parts of the North Atlantic, will see even faster-growing phytoplankton because those waters are warming with climate change. Those waters will look greener.

Climate change will bring a color change to half of the world's oceans by the end of the 21st century, the study says. That's bad on several levels: For one, phytoplankton remove about as much carbon dioxide from the air as plants and help regulate our climate, research shows. They are also key to other animals' survival." Phytoplankton are at the base, and if the base changes, it endangers everything else along the food web, going far enough to the polar bears or tuna or just about anything that you want to eat or love to see in pictures, "said Stephanie Dutkiewicz, a principal research scientist in MIT.

SubQuestion No : 180

Q.1  
80 The colour of the ocean depends on:

- Ans
- ☒ 1. the growth of phytoplankton in the ocean.
  - ☒ 2. the sunlight's absorption by the sea organisms.

-  3. water molecules absorbing the blue of the sunlight
-  4. the sunlight's interaction with the water molecules and sea organisms.

Question ID : **98958010486**  
Status : **Answered**  
Chosen Option : **4**

Comprehension:



Read the following passage and answer the questions given after it.

The ocean will not look the same color in the future.

Essentially, climate change will make the blues of the ocean bluer and the greens greener. Scientists from MIT, Boston, figured this out by creating a global model that simulates the growth of a tiny creature that lives in the oceans and affects the color we see. Their research was published in the journal Nature Communications.

The ocean looks blue or green to us because of a combination of how sunlight interacts with water molecules and with whatever else lives in that water.

The molecules in water absorb all but the blue part of the spectrum of sunlight, and the water reflects that blue color back. That's the color we see.

The water looks greener when it has more phytoplankton, tiny, microscopic organisms that, like plants, can use chlorophyll to capture mostly the blue portions of the spectrum of sunlight. They then use photosynthesis to create the chemical energy they need to live. When there are more of these creatures in the water absorbing sunlight, they make the water look greener. Conversely, if there are fewer phytoplankton, the water looks bluer.

The creatures' growth is dependent on how much sunlight, carbon dioxide and nutrients are around. Climate change is altering the ocean currents, meaning there will be fewer nutrients for phytoplankton to feed on in some areas, so there will be a decline in their number in those regions.

Since the 1990s, satellites have taken regular measurements of how much chlorophyll is in the ocean. Those levels can change because of weather events or because of climate change.

The study predicts that the blues will intensify, most likely in subtropical regions where phytoplankton will decrease. These are areas near the equator like Bermuda and the Bahamas that are already quite low in phytoplankton.

Regions where there are a lot of nutrients, like in the Southern Ocean or parts of the North Atlantic, will see even faster-growing phytoplankton because those waters are warming with climate change. Those waters will look greener.

Climate change will bring a color change to half of the world's oceans by the end of the 21st century, the study says. That's bad on several levels: For one, phytoplankton remove about as much carbon dioxide from the air as plants and help regulate our climate, research shows. They are also key to other animals' survival." Phytoplankton are at the base, and if the base changes, it endangers everything else along the food web, going far enough to the polar bears or tuna or just about anything that you want to eat or love to see in pictures, "said Stephanie Dutkiewicz, a principal research scientist in MIT.

SubQuestion No : 181

Q.1  
81 In which areas will the ocean look bluer?

- Ans
- ☒ 1. North Atlantic ocean
  - ☒ 2. Southern ocean

- ✗ 3. Areas near poles
- ✓ 4. Areas near equator

Question ID : 98958010487  
Status : Answered  
Chosen Option : 4

Comprehension:

Read the following passage and answer the questions given after it.

The ocean will not look the same color in the future.

Essentially, climate change will make the blues of the ocean bluer and the greens greener. Scientists from MIT, Boston, figured this out by creating a global model that simulates the growth of a tiny creature that lives in the oceans and affects the color we see. Their research was published in the journal Nature Communications.

The ocean looks blue or green to us because of a combination of how sunlight interacts with water molecules and with whatever else lives in that water.

The molecules in water absorb all but the blue part of the spectrum of sunlight, and the water reflects that blue color back. That's the color we see.

The water looks greener when it has more phytoplankton, tiny, microscopic organisms that, like plants, can use chlorophyll to capture mostly the blue portions of the spectrum of sunlight. They then use photosynthesis to create the chemical energy they need to live. When there are more of these creatures in the water absorbing sunlight, they make the water look greener. Conversely, if there are fewer phytoplankton, the water looks bluer.

The creatures' growth is dependent on how much sunlight, carbon dioxide and nutrients are around. Climate change is altering the ocean currents, meaning there will be fewer nutrients for phytoplankton to feed on in some areas, so there will be a decline in their number in those regions.

Since the 1990s, satellites have taken regular measurements of how much chlorophyll is in the ocean. Those levels can change because of weather events or because of climate change.

The study predicts that the blues will intensify, most likely in subtropical regions where phytoplankton will decrease. These are areas near the equator like Bermuda and the Bahamas that are already quite low in phytoplankton.

Regions where there are a lot of nutrients, like in the Southern Ocean or parts of the North Atlantic, will see even faster-growing phytoplankton because those waters are warming with climate change. Those waters will look greener.

Climate change will bring a color change to half of the world's oceans by the end of the 21st century, the study says. That's bad on several levels: For one, phytoplankton remove about as much carbon dioxide from the air as plants and help regulate our climate, research shows. They are also key to other animals' survival." Phytoplankton are at the base, and if the base changes, it endangers everything else along the food web, going far enough to the polar bears or tuna or just about anything that you want to eat or love to see in pictures, "said Stephanie Dutkiewicz, a principal research scientist in MIT.

SubQuestion No : 182

Q.1  
82 Where do phytoplankton grow profusely?

- Ans
- ☒ 1. Where the ocean currents are cold
  - ☒ 2. Where the ocean waters are hot as at equator



- ✓ 3. Where there are a lot of nutrients in the ocean water
- ✗ 4. Where the sun rays are absorbed by ocean water

Question ID : **98958010488**  
Status : **Answered**  
Chosen Option : **3**

Comprehension:

Read the following passage and answer the questions given after it.

The ocean will not look the same color in the future.

Essentially, climate change will make the blues of the ocean bluer and the greens greener. Scientists from MIT, Boston, figured this out by creating a global model that simulates the growth of a tiny creature that lives in the oceans and affects the color we see. Their research was published in the journal Nature Communications.

The ocean looks blue or green to us because of a combination of how sunlight interacts with water molecules and with whatever else lives in that water.

The molecules in water absorb all but the blue part of the spectrum of sunlight, and the water reflects that blue color back. That's the color we see.

The water looks greener when it has more phytoplankton, tiny, microscopic organisms that, like plants, can use chlorophyll to capture mostly the blue portions of the spectrum of sunlight. They then use photosynthesis to create the chemical energy they need to live. When there are more of these creatures in the water absorbing sunlight, they make the water look greener. Conversely, if there are fewer phytoplankton, the water looks bluer.

The creatures' growth is dependent on how much sunlight, carbon dioxide and nutrients are around. Climate change is altering the ocean currents, meaning there will be fewer nutrients for phytoplankton to feed on in some areas, so there will be a decline in their number in those regions.

Since the 1990s, satellites have taken regular measurements of how much chlorophyll is in the ocean. Those levels can change because of weather events or because of climate change.

The study predicts that the blues will intensify, most likely in subtropical regions where phytoplankton will decrease. These are areas near the equator like Bermuda and the Bahamas that are already quite low in phytoplankton.

Regions where there are a lot of nutrients, like in the Southern Ocean or parts of the North Atlantic, will see even faster-growing phytoplankton because those waters are warming with climate change. Those waters will look greener.

Climate change will bring a color change to half of the world's oceans by the end of the 21st century, the study says. That's bad on several levels: For one, phytoplankton remove about as much carbon dioxide from the air as plants and help regulate our climate, research shows. They are also key to other animals' survival." Phytoplankton are at the base, and if the base changes, it endangers everything else along the food web, going far enough to the polar bears or tuna or just about anything that you want to eat or love to see in pictures, "said Stephanie Dutkiewicz, a principal research scientist in MIT.

SubQuestion No : 183

Q.1  
83 Which statement is not true according to the passage?

Ans

- ☒ 1. Phytoplankton has a key role in the survival of other animals.
- ☒ 2. By the end of 21<sup>st</sup> century the colour of ocean waters will change.
- ☒ 3. More blue colour in the ocean will affect the climate change.
- ☒ 4. In subtropical regions phytoplankton will decrease.

Question ID : 98958010489  
Status : Answered  
Chosen Option : 3

Q.1 84 Select the most appropriate word to fill in the blank.

The children had made a mess on the floor, so I asked Sana to clean \_\_\_\_\_ up.

- Ans ☒ 1. it
- ☒ 2. they
- ☒ 3. them
- ☒ 4. its

Question ID : 98958010451  
Status : Answered  
Chosen Option : 1

Q.1 85 Select the most appropriate option to substitute the underlined segment in the given sentence. If there is no need to substitute it, select No improvement.

It is not wise relying to anybody too much.

- Ans ☒ 1. to rely in anybody
- ☒ 2. relying at anybody
- ☒ 3. to rely on anybody
- ☒ 4. No improvement.

Question ID : 98958010444  
Status : Answered  
Chosen Option : 3

Q.1 86 Identify the segment in the sentence, which contains the grammatical error.

If the car hadn't broken down we will be at the office now.

- Ans ☒ 1. hadn't broken down
- ☒ 2. we will be
- ☒ 3. If the car
- ☒ 4. at the office

Question ID : 98958010442

Status : **Answered**  
Chosen Option : 2

Q.1  
87 Select the synonym of the given word.

ECSTASY

- Ans
- ☒ 1. grief
  - ☒ 2. danger
  - ☒ 3. happiness
  - ☒ 4. fear

Question ID : 98958010461  
Status : **Answered**  
Chosen Option : 3

Q.1  
88 Select the most appropriate option to substitute the underlined segment in the given sentence. If there is no need to substitute it, select No improvement.

The man who seen the accident to occur telephoned the police.

- Ans
- ☒ 1. saw the accident was occurring
  - ☒ 2. saw the accident occurred
  - ☒ 3. had seen the accident occur
  - ☒ 4. No improvement.

Question ID : 98958010447  
Status : **Answered**  
Chosen Option : 3

Q.1  
89 Select the antonym of the given word.

ASSEMBLE

- Ans
- ☒ 1. disperse
  - ☒ 2. gather
  - ☒ 3. resemble
  - ☒ 4. create

Question ID : 98958010465  
Status : **Answered**  
Chosen Option : 1

Q.1  
90 Select the most appropriate meaning of the underlined idiom in the given sentence.

I am fed up with his false promises.

- Ans
- ☒ 1. furious
  - ☒ 2. disgusted
  - ☒ 3. pleased

☒ 4. hopeful

Question ID : 98958010470  
Status : Answered  
Chosen Option : 2

Q.1  
91 Select the antonym of the given word.

MOROSE

- Ans ☒ 1. cheerful  
☒ 2. gloomy  
☒ 3. sick  
☒ 4. tasteless

Question ID : 98958010467  
Status : Answered  
Chosen Option : 1

Q.1  
92 Select the word, which means the same as the group of words given.

a person who compiles dictionaries

- Ans ☒ 1. calligrapher  
☒ 2. cartographer  
☒ 3. lexicographer  
☒ 4. choreographer

Question ID : 98958010474  
Status : Answered  
Chosen Option : 3

Q.1  
93 Identify the segment in the sentence, which contains the grammatical error.

He was surprised at me refusing his offer.

- Ans ☒ 1. He was  
☒ 2. at me refusing  
☒ 3. surprised  
☒ 4. his offer.

Question ID : 98958010441  
Status : Answered  
Chosen Option : 2

Q.1  
94 Select the antonym of the given word.

EXTRAVAGANT

- Ans ☒ 1. resentful



- ☒ 2. wasteful
- ☒ 3. thrifty
- ☒ 4. deficient

Question ID : 98958010468  
Status : Answered  
Chosen Option : 3

Q.1 95 Select the most appropriate meaning of the underlined idiom in the given sentence.

The cost of living has increased so much that many people find it difficult to make both ends meet.

- Ans
- ☒ 1. help other people
  - ☒ 2. buy something new
  - ☒ 3. buy expensive gadgets
  - ☒ 4. earn enough to survive

Question ID : 98958010473  
Status : Answered  
Chosen Option : 4

Q.1 96 Select the synonym of the given word.

COMMENDABLE

- Ans
- ☒ 1. satisfying
  - ☒ 2. grateful
  - ☒ 3. praiseworthy
  - ☒ 4. courteous

Question ID : 98958010462  
Status : Answered  
Chosen Option : 3

Q.1 97 Select the word, which means the same as the group of words given.

a gigantic statue

- Ans
- ☒ 1. column
  - ☒ 2. citadel
  - ☒ 3. castle
  - ☒ 4. colossus

Question ID : 98958010478  
Status : Answered  
Chosen Option : 4

Q.1 98 Select the most appropriate option to substitute the underlined segment in the given sentence. If there is no need to substitute it, select No improvement.

You must go to Bhopal if you are liking it or not.

- Ans
- ☒ 1. whether you have liked it
  - ☒ 2. if you like it
  - ☒ 3. No improvement.
  - ☒ 4. whether you like it

Question ID : 98958010445  
Status : Answered  
Chosen Option : 4

Q.1  
99 Select the antonym of the given word.

BONDAGE

- Ans
- ☒ 1. slavery
  - ☒ 2. liberty
  - ☒ 3. wealth
  - ☒ 4. affection

Question ID : 98958010466  
Status : Answered  
Chosen Option : 2

Q.2  
00 Select the wrongly spelt word.

- Ans
- ☒ 1. dribble
  - ☒ 2. dreamy
  - ☒ 3. droughth
  - ☒ 4. dreadful

Question ID : 98958010480  
Status : Answered  
Chosen Option : 3