

# SSC CPO Tier-I

Previous Year Paper  
(13 March 2019 shift 1)  
English

[www.freshersnow.com](http://www.freshersnow.com)

## Recruitment of Sub-Inspector in Delhi Police, CAPFs and Assistant Sub-Inspector in CISF Examination, 2018

Roll No. :	
Registration No.	
Name :	
Exam Venue :	
Exam Time :	10:00 AM - 12:00 PM
Exam Date :	13/03/2019

Section : SI CPO

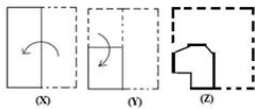
Q.1 Which two numbers should be interchanged to make the given equation correct?

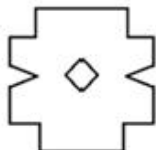
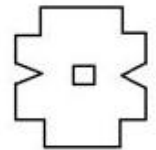


$$4 \times 2 - 8 + 9 \div 3 = 9 \div 3 + 4 \times 2 - 8$$

- Ans
- 1. 3 and 4
  - 2. 3 and 2
  - 3. 8 and 3
  - 4. 8 and 4

Question ID : 98958010627  
 Status : Not Answered  
 Chosen Option : --

Q.2 The sequence of folding a piece of square paper and the manner in which the folded paper has been cut is shown in figures X, Y and Z. How would this paper look when unfolded?



- Ans
- 1. 
  - 2. 
  - 3. 
  - 4. 

Question ID : 98958010638  
 Status : Answered  
 Chosen Option : 1

Q.3 Which letter-cluster will replace the question mark (?) in the following series?

CGE, HJI, LPN, SUT, ?

- Ans
- 1. XBZ
  - 2. YAZ
  - 3. YCA
  - 4. XZY

Question ID : 98958010595  
 Status : Answered  
 Chosen Option : 3

Q.4 Three of the following four number-pairs are alike in a certain way and one is different. Find the odd one out.

- Ans
- 1. 865 : 722
  - 2. 378 : 255
  - 3. 756 : 633
  - 4. 967 : 844

Question ID : 98958010623  
 Status : Not Answered  
 Chosen Option : --



Q.5 Three of the following four words are alike in a certain way and one is different. Find the odd one out.

- Ans
- 1. Potato
  - 2. Carrot
  - 3. Cabbage
  - 4. Turnip

Question ID : 98958010601  
 Status : Answered  
 Chosen Option : 4

Q.6 Select the correct mirror image of the given figure when the mirror is placed on the right of the figure.



- Ans
- 1. 
  - 2. 



Question ID : 98958010637  
 Status : Answered  
 Chosen Option : 4

Q.7 Three of the following four letter-clusters are alike in a certain way and one is different. Find the odd one out.

- Ans  1. CHEL  
 2. ZVXT  
 3. VSUP  
 4. MROV

Question ID : 98958010599  
 Status : Not Answered  
 Chosen Option : --

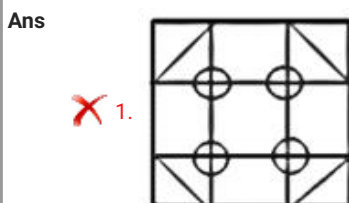
Q.8 Which letter will replace the question mark (?) in the following series?

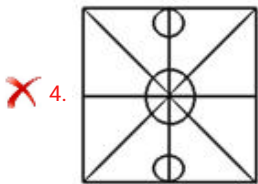
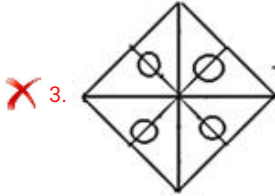
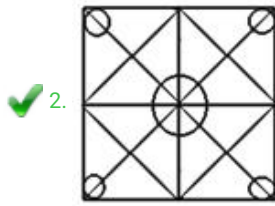
Y, X, V, S, ?, J

- Ans  1. O  
 2. N  
 3. Q  
 4. P

Question ID : 98958010594  
 Status : Answered  
 Chosen Option : 1

Q.9 Select the option in which the given figure is embedded.





Question ID : 98958010634  
 Status : Answered  
 Chosen Option : 2

Q.1 0 Two statements are given, followed by three conclusions numbered I, II and III. Assuming the statements to be true, even if they seem to be at variance with commonly known facts, decide which of the conclusions logically follow(s) from the statements.

**Statements:**

Some men are players.  
 All players are athletes.

**Conclusions:**

- I. No athlete is a man.
- II. All men are athletes.
- III. Some athletes are men.

- Ans
- ✗ 1. Only conclusion I follows.
  - ✗ 2. Only conclusions II and III follow.
  - ✗ 3. Only conclusion II follows.
  - ✓ 4. Only conclusion III follows.

Question ID : 98958010612  
 Status : Answered  
 Chosen Option : 4

Q.1 1 If DIG = 41 and GOAD = 55, then FACT = \_\_\_\_\_.

- Ans
- ✗ 1. 45
  - ✓ 2. 61
  - ✗ 3. 53
  - ✗ 4. 63

Question ID : 98958010610  
 Status : Not Answered

Chosen Option : --

Q.1 Three of the following four number-pairs are alike in a certain way and one is different. Find the odd one out.

2

- Ans
- 1. 8 : 80
  - 2. 6 : 48
  - 3. 4 : 26
  - 4. 10 : 120

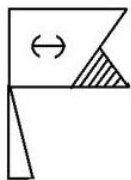
Question ID : 98958010622

Status : Answered

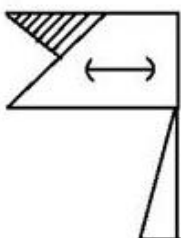
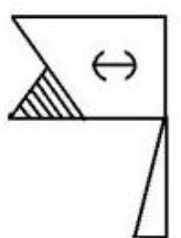
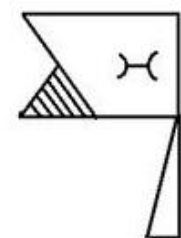
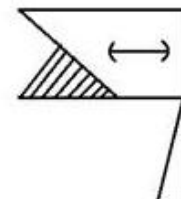
Chosen Option : 3

Q.1 Select the correct mirror image of the given figure when the mirror is placed on the right of the figure.

3



Ans

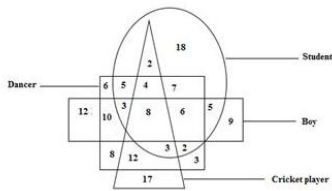
- 1. 
- 2. 
- 3. 
- 4. 

Question ID : 98958010636

Status : Answered

Chosen Option : 2

Q.1 In the following diagram, the triangle represents 'cricket players', the circle represents 'students', the rectangle represents 'boys' and the square represents 'dancers'. The numbers in different segments show the number of persons.



How many students are dancers and cricket players but not boys?

- Ans
- 1. 7
  - 2. 12
  - 3. 4
  - 4. 16

Question ID : 98958010643  
Status : Answered  
Chosen Option : 4

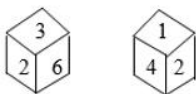
Q.1 Select the set of numbers that is similar to the following set.

{9, 15, 24}

- Ans
- 1. {21, 33, 55}
  - 2. {12, 20, 30}
  - 3. {6, 10, 16}
  - 4. {15, 25, 35}

Question ID : 98958010625  
Status : Answered  
Chosen Option : 3

Q.1 Two positions of the same dice are given. Which number will be at the top if '3' is at the bottom?



- Ans
- 1. 4
  - 2. 6
  - 3. 5
  - 4. 1

Question ID : 98958010633  
Status : Answered  
Chosen Option : 4

Q.1 Which number will replace the question mark (?) in the following series?

3, 7, 13, 27, ?, 107, 213

- Ans
- 1. 63
  - 2. 53
  - 3. 58
  - 4. 49

Question ID : 98958010616  
Status : Answered  
Chosen Option : 2

Q.1 Which number will replace the question mark (?) in the following series?

8

1, 3, 4, 7, ?, 18, 29

- Ans
- 1. 10
  - 2. 13
  - 3. 15
  - 4. 11

Question ID : 98958010615  
Status : Answered  
Chosen Option : 4

Q.1 In a code language, CONCERT is written as CNEROCT. How will SMARTER be written in that language?

9

- Ans
- 1. RATESMR
  - 2. RATEMSR
  - 3. RATMESR
  - 4. RETRAMS

Question ID : 98958010609  
Status : Answered  
Chosen Option : 1

Q.2 Select the option that is related to the third number in the same way as the second number is related to the first number.

0

12 : 145 : 8 :: \_\_\_\_\_

- Ans
- 1. 60
  - 2. 85
  - 3. 65
  - 4. 73

Question ID : 98958010618  
Status : Answered  
Chosen Option : 3

Q.2 Three of the following four number-pairs are alike in a certain way and one is different. Find the odd one out.

1

- Ans
- 1. 56 : 11
  - 2. 78 : 13
  - 3. 12 : 3



4. 34 : 7

Question ID : 98958010621  
Status : Not Attempted and Marked For Review  
Chosen Option : --

Q.2 Select the option that is related to the third number in the same way as the second number is related to the first number.

2

4 : 8 :: 25 : \_\_\_\_\_

- Ans
- 1. 100
  - 2. 75
  - 3. 625
  - 4. 125

Question ID : 98958010617  
Status : Answered  
Chosen Option : 4

Q.2 Select the word-pair in which the two words are related in the same way as are the two words in the given word-pair.

3

Wish : Desire

- Ans
- 1. Run : Ride
  - 2. Drive : Speed
  - 3. Morning : Evening
  - 4. Cool : Cold

Question ID : 98958010605  
Status : Answered  
Chosen Option : 4

Q.2 Three of the following four letter-clusters are alike in a certain way and one is different. Find the odd one out.

4

- Ans
- 1. DFIM
  - 2. FHKM
  - 3. MORV
  - 4. QSVZ

Question ID : 98958010598  
Status : Answered  
Chosen Option : 2

Q.2 Three of the following four number-pairs are alike in a certain way and one is different. Find the odd one out.

5

- Ans
- 1. 49 : 94
  - 2. 56 : 67
  - 3. 15 : 51
  - 4. 38 : 83

Question ID : 98958010620  
Status : Answered

Chosen Option : 2

Q.2 Starting from Anand's house, the school bus takes a right turn and covers 3 km. Then, it takes a left turn and covers 2 km. Finally, it takes a right turn again and covers 4 km to reach the school. On reaching the school, the bus faces south-east. In which direction was the bus facing when it left Anand's house?

- Ans
- 1. South-west
  - 2. South-east
  - 3. North-east
  - 4. North

Question ID : 98958010639  
 Status : Marked For Review  
 Chosen Option : 2

Q.2 Select the set of numbers that is similar to the following set.

{9, 54, 6}

- Ans
- 1. {3, 15, 6}
  - 2. {8, 64, 9}
  - 3. {7, 74, 12}
  - 4. {5, 35, 7}

Question ID : 98958010624  
 Status : Answered  
 Chosen Option : 4

Q.2 Which of the following interchanges of signs and numbers would make the given equation correct?

$$12 \times 18 \div 3 - 6 + 4 = 5$$

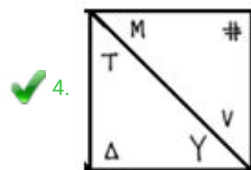
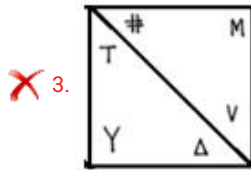
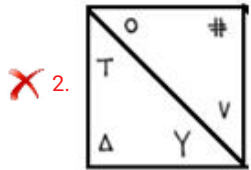
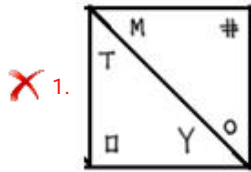
- Ans
- 1.  $\div$  and  $\times$ , 6 and 3
  - 2.  $\div$  and  $\times$ , 4 and 3
  - 3.  $\div$  and  $+$ , 3 and 4
  - 4.  $\times$  and  $+$ , 3 and 6

Question ID : 98958010628  
 Status : Answered  
 Chosen Option : 4

Q.2 Select the figure that will come next in the following series.



Ans



Question ID : 98958010631

Status : Not Attempted and Marked For Review

Chosen Option : --

Q.3 Which number will replace the question mark (?) in the following series?

1, 2, 6, 12, ?, 72, 216

Ans  1. 24

2. 32

3. 36

4. 48

Question ID : 98958010614

Status : Answered

Chosen Option : 3

Q.3 Select the correct alternative to indicate the arrangement of the following words in a logical and meaningful order.

1

1. Treatment
2. Diagnosis
3. Doctor
4. Discharge
5. Bill

Ans  1. 3, 2, 1, 5, 4

2. 4, 5, 3, 2, 1

3. 3, 2, 5, 1, 4

4. 2, 3, 1, 4, 5

Question ID : 98958010596

Status : Answered

Chosen Option : 1

Q.3 If MADE is coded as 12236 and BAD is coded as 123, then how will DECK be coded as?  
2

- Ans
- 1. 36212
  - 2. 34312
  - 3. 36201
  - 4. 44412

Question ID : 98958010611

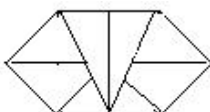
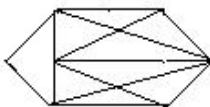
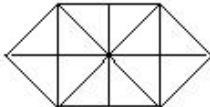
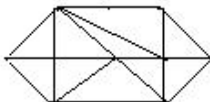
Status : Answered

Chosen Option : 1

Q.3 Select the option in which the given figure is embedded. (Rotation is not allowed)  
3



Ans

- 1. 
- 2. 
- 3. 
- 4. 

Question ID : 98958010635

Status : Answered

Chosen Option : 3

Q.3 Select the word-pair in which the two words are related in the same way as are the two words in the given word-pair.  
4

Weigh : Balance

- Ans
- 1. Volume : Liquid
  - 2. Pour : Water
  - 3. Swim : River
  - 4. Detect : Radar

Question ID : 98958010604

Status : Not Answered

Chosen Option : --

Q.3 In a code language, MONKEY is written as LPMLDZ. How will STROKE be written as in that language?  
5

- Ans
- 1. TSSNLD

- 2. RUQFJP
- 3. RUQNLD
- 4. RUQPJF

Question ID : 98958010608  
Status : Answered  
Chosen Option : 4

Q.3 6 Two statements are given, followed by three conclusions numbered I, II and III. Assuming the statements to be true, even if they seem to be at variance with commonly known facts, decide which of the conclusions logically follow(s) from the statements.

**Statements:**

All teachers are researchers.  
No researcher is unemployed.

**Conclusions:**

- I. Some unemployed are teachers.
- II. No teacher is unemployed.
- III. Some teachers are unemployed.

Ans  1. Only conclusion II follows.

- 2. Only conclusion I follows.
- 3. Only conclusions II and III follow.
- 4. Only conclusions I and III follow.

Question ID : 98958010613  
Status : Answered  
Chosen Option : 3

Q.3 7 Select the option that is related to the third term in the same way as the first term is related to the second term.  
DFIM : WURN :: CMHV : \_\_\_\_\_

- Ans  1. XNSE
- 2. XVTR
  - 3. XNTE
  - 4. YNSE

Question ID : 98958010607  
Status : Answered  
Chosen Option : 3

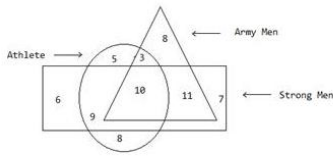
Q.3 8 'Star' is related to 'Galaxy' in the same way as 'Flower' is related to '\_\_\_\_\_'.  
Ans

- 1. Jasmine
- 2. Blossom
- 3. Bouquet
- 4. Petal

Question ID : 98958010602  
Status : Answered

Chosen Option : 3

Q.3 In the following diagram, the triangle represents 'army men', the circle represents 'athletes' and the rectangle represents 'strong men'. The numbers in different segments show the number of persons.



How many strong army men are not athletes?

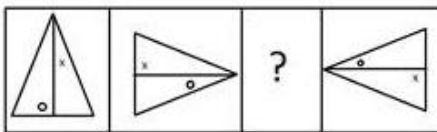
- Ans
- 1. 13
  - 2. 19
  - 3. 11
  - 4. 10

Question ID : 98958010641

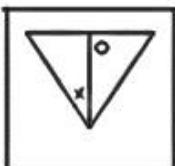
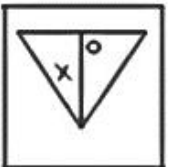

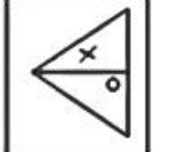
Status : Answered

Chosen Option : 3

Q.4 Identify the missing figure in the following series.



Ans

- 1. 
- 2. 
- 3. 
- 4. 

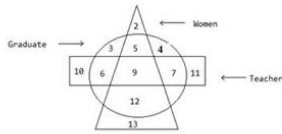
Question ID : 98958010629

Status : Answered

Chosen Option : 1

Q.4 In the following diagram, the triangle represents 'women', the circle represents 'graduates' and the rectangle represents 'teachers'. The numbers in different segments show the number of persons.

1



How many women graduates are not teachers?

- Ans
- 1. 9
  - 2. 12
  - 3. 17
  - 4. 5

Question ID : 98958010642  
 Status : Answered  
 Chosen Option : 2

Q.4 Select the number-pair in which the two numbers are related in the same way as are the two numbers of the given pair.

2

16 : 26

- Ans
- 1. 25 : 37
  - 2. 4 : 11
  - 3. 36 : 56
  - 4. 15 : 27

Question ID : 98958010619  
 Status : Answered  
 Chosen Option : 3

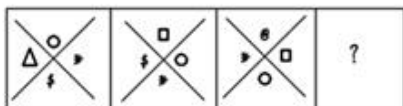
Q.4 Riya walked 90 m towards the north from her house, and then took a right turn and walked 60 m to reach the market.  
 3 Then, she took a left turn and walked a few meters from the market to reach the post office, from where she took a left turn again and walked 160 m to reach the school. If the air distance between Riya's house and the school is 260 m, what is the air distance between the market and the post office?

- Ans
- 1. 180 m
  - 2. 120 m
  - 3. 150 m
  - 4. 100 m

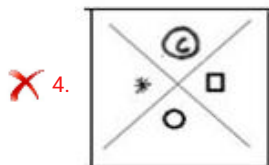
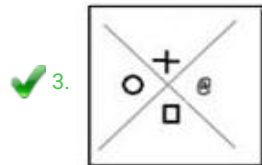
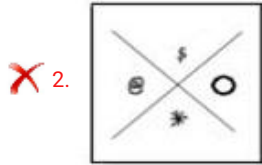
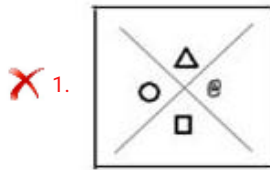
Question ID : 98958010640  
 Status : Not Attempted and Marked For Review  
 Chosen Option : --

Q.4 Identify the missing figure in the following series.

4



Ans



Question ID : 98958010630  
Status : Answered  
Chosen Option : 1

Q.4  
5 'Picture' is related to 'Coloured' in the same way as 'Letter' is related to '\_\_\_\_\_'.  
5

- Ans ✓ 1. Bold  
✗ 2. Alphabet  
✗ 3. Word  
✗ 4. Language

Question ID : 98958010603  
Status : Answered  
Chosen Option : 3

Q.4  
6 Which two signs should be interchanged to make the following equation correct?  
6

$$10 - 15 \times 9 + 6 \div 3 = 9$$

- Ans ✓ 1. - and ÷  
✗ 2. ÷ and +  
✗ 3. + and -  
✗ 4. × and -

Question ID : 98958010626  
Status : Answered  
Chosen Option : 1

Q.4  
7



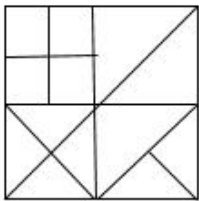
Select the option that is related to the third term in the same way as the second term is related to the first term.

HKNQ : IJPO :: DFHJ : \_\_\_\_\_

- Ans
- 1. EGJH
  - 2. CGLJ
  - 3. EEJH
  - 4. EEII

Question ID : 98958010606  
 Status : Answered  
 Chosen Option : 3

Q.4 How many triangles are there in the following figure?  
 8



- Ans
- 1. 20
  - 2. 17
  - 3. 16
  - 4. 14

Question ID : 98958010632  
 Status : Answered  
 Chosen Option : 3

Q.4 Three of the following four words are alike in a certain way and one is different. Find the odd one out.  
 9

- Ans
- 1. Pan
  - 2. Jug
  - 3. Mug
  - 4. Cup

Question ID : 98958010600  
 Status : Answered  
 Chosen Option : 4

Q.5 Select the correct alternative to indicate the arrangement of the following words in a logical and meaningful order.  
 0

1. Cloud
2. Shelter
3. Monsoon
4. Rain
5. Flood
6. Relief

- Ans
- 1. 4, 1, 2, 5, 2, 6
  - 2. 3, 1, 4, 5, 2, 6

3. 1, 3, 4, 5, 6, 2

4. 3, 1, 4, 2, 5, 6

Question ID : 98958010597  
Status : Answered  
Chosen Option : 2

Q.5  
1 Which of the following is NOT a tributary of the Indus River?

Ans  1. Zaskar

2. Nubra

3. Shyok

4. Lohit

Question ID : 98958010775  
Status : Not Answered  
Chosen Option : --

Q.5  
2 NASA's \_\_\_\_\_ spacecraft has been studying Jupiter for almost two years since the year 2016.

Ans  1. Muno

2. Bruno

3. Juno

4. Luno

Question ID : 98958010790  
Status : Not Answered  
Chosen Option : --

Q.5  
3 There are three types of heterotrophs. Which of the following is NOT one of them?

Ans  1. Consumers

2. Carnivores

3. Omnivores

4. Herbivores

Question ID : 98958010782  
Status : Not Answered  
Chosen Option : --

Q.5  
4 Which among the following is a dance form from the state of Arunachal Pradesh?

Ans  1. Popir

2. Bhavai

3. Sattriya

4. Purbi

Question ID : 98958010781  
Status : Not Answered

Chosen Option : --

Q.5  
5 Who was the first Vice President of independent India?

- Ans
- 1. Sarvepalli Radhakrishnan
  - 2. Kishan Kant
  - 3. Gopal Pathak
  - 4. KR Narayanan

Question ID : 98958010785

Status : Answered

Chosen Option : 1

Q.5  
6 Renowned writer Namita Gokhale was awarded \_\_\_\_\_ for her work 'Things to Leave Behind' under the 'Best Book of Fiction written by a Woman Author' category at the inaugural edition of Bhopal Literature and Art Festival.

- Ans
- 1. Sushila Devi Literature Award
  - 2. Jnanpith Award
  - 3. Sahitya Academy Award
  - 4. Yuva Puraskar Award

Question ID : 98958010751

Status : Answered

Chosen Option : 3

Q.5  
7 \_\_\_\_\_ is the study of fungi.

- Ans
- 1. Geobiology
  - 2. Mycology
  - 3. Chronobiology
  - 4. Gerontology

Question ID : 98958010749

Status : Not Answered

Chosen Option : --

Q.5  
8 Which of the following is NOT one of the great paradigms of biology?

- Ans
- 1. Mendel's laws of inheritance
  - 2. Archimedes' principle
  - 3. Establishment of comparative biochemistry
  - 4. Darwin's theory of evolution

Question ID : 98958010777

Status : Not Answered

Chosen Option : --

Q.5  
9 Tripura Chief Minister \_\_\_\_\_ launched the Sustainable Catchment Forest Management (SCATFORM) project.

- Ans
- 1. Bhupesh Baghel
  - 2. Nitish Kumar
  - 3. Biplab Kumar Deb
  - 4. Pema Khandu

Question ID : 98958010769  
Status : Answered  
Chosen Option : 4

Q.6 In January 2019, the Finance Ministry asked the Public Sector banks to gradually reduce the Government's equity to  
0 \_\_\_\_\_ per cent.

- Ans
- 1. 37
  - 2. 45
  - 3. 52
  - 4. 63

Question ID : 98958010789  
Status : Not Answered  
Chosen Option : --

Q.6 The Supreme Court has issued a notice to the Central Government on \_\_\_\_\_ questioning the centre's notification  
1 authorising 10 central agencies to intercept monitor and decrypt any computer system.

- Ans
- 1. IPL
  - 2. LPI
  - 3. PIL
  - 4. LIP

Question ID : 98958010778  
Status : Not Answered  
Chosen Option : --

Q.6 \_\_\_\_\_ became the fourth Indian wicket-keeper to take five catches on Test debut.  
2

- Ans
- 1. Dinesh Karthik
  - 2. Parthiv Patel
  - 3. Naman Ojha
  - 4. Rishabh Pant

Question ID : 98958010765  
Status : Not Answered  
Chosen Option : --

Q.6 Union Minister of State for \_\_\_\_\_ Shri Shripad Yesso Naik, inaugurated the 2nd World Integrated Medicine Forum  
3 2019.

- Ans
- 1. Human Resource Development
  - 2. Chemicals and Fertilizers
  - 3. AYUSH
  - 4. Health

Question ID : 98958010771  
Status : Answered  
Chosen Option : 3

Q.6 Nagaland became a part of the Union of India in the year 1963 by the \_\_\_\_\_ Amendment to the Constitution of India.

4

- Ans
- 1. 17<sup>th</sup>
  - 2. 13<sup>th</sup>
  - 3. 16<sup>th</sup>
  - 4. 14<sup>th</sup>

Question ID : 98958010784  
Status : Not Answered  
Chosen Option : --

Q.6 \_\_\_\_\_ is one of the most important technique for the separation of a mixture by passing it in solution or suspension through a medium in which the components move at different rates.

5

- Ans
- 1. Filtration
  - 2. Distillation
  - 3. Evaporation
  - 4. Chromatography

Question ID : 98958010746  
Status : Not Answered  
Chosen Option : --

Q.6 The Union Minister for Civil Aviation \_\_\_\_\_ released the Vision 2040 document in the Global Aviation Summit 2019.

6

- Ans
- 1. Suresh Prabhu
  - 2. Prakash Javadekar
  - 3. Piyush Goyal
  - 4. Nirmala Sitharaman

Question ID : 98958010744  
Status : Answered  
Chosen Option : 1

Q.6 It is believed that Lord Shiva assumed the form of \_\_\_\_\_ and married Parvati at the site of the Meenakshi Temple in South India.

7

- Ans
- 1. Pashupati
  - 2. Harihara
  - 3. Nataraja
  - 4. Sundareshwarar

Question ID : 98958010755  
Status : Not Answered  
Chosen Option : --

Q.6  
8 The Battle of \_\_\_\_\_ was fought in 326 BC by Alexander, the Great against King Porus.

- Ans
- 1. Hydaspes
  - 2. Tarain
  - 3. Panipat
  - 4. Plassey

Question ID : 98958010779  
Status : Answered  
Chosen Option : 2

Q.6  
9 The \_\_\_\_\_ dynasty which ruled North India from 1206 to 1290 was established by Qutbuddin Aibak.

- Ans
- 1. Lodi
  - 2. Tughlaq
  - 3. Khilji
  - 4. Slave

Question ID : 98958010763  
Status : Answered  
Chosen Option : 2

Q.7  
0 \_\_\_\_\_ is a New Year Celebration of Sikkimese Bhutia which falls in the 10<sup>th</sup> month of the Sikkimese Lunar calendar.

- Ans
- 1. Ashura
  - 2. Sonam Losoong
  - 3. Vesak
  - 4. Thai Pongal

Question ID : 98958010780  
Status : Not Answered  
Chosen Option : --

Q.7  
1 Molecular mass of Sulphurous acid is:

- Ans
- 1. 96.04
  - 2. 98.07
  - 3. 87.06
  - 4. 82.07

Question ID : 98958010787  
Status : Not Answered  
Chosen Option : --

Q.7  
2 The Traffic Police Department of \_\_\_\_\_ is looking at a futuristic model to maintain traffic flow and spread awareness about the traffic rules by introducing a robot named 'Roadeo'.

- Ans
- 1. Ahmedabad

- 2. Mumbai
- 3. Pune
- 4. Delhi

Question ID : 98958010747  
Status : Answered  
Chosen Option : 1

Q.7 India's ace sprinter and Asian Games gold-medalist, \_\_\_\_\_ was appointed as first ever youth ambassador of United Nations Children's Fund (UNICEF) India.

- Ans
- 1. Jisna Mathew
  - 2. Hima Das
  - 3. Mandeep Kaur
  - 4. Manjeet Kaur

Question ID : 98958010759  
Status : Answered  
Chosen Option : 2

Q.7 Andaman and Nicobar Islands is a group of \_\_\_\_\_ islands/islets.

- Ans
- 1. 275
  - 2. 450
  - 3. 780
  - 4. 572

Question ID : 98958010788  
Status : Answered  
Chosen Option : 4

Q.7 An Indian team of scientists led by \_\_\_\_\_ of Physical Research Laboratory (PRL), have discovered a sub-Saturn or super-Neptune size planet around a Sun-like star.

- Ans
- 1. Professor Abhijit Chakraborty
  - 2. K Radha Krishnan
  - 3. Padmanaban
  - 4. Abhas Mitra

Question ID : 98958010792  
Status : Not Answered  
Chosen Option : --

Q.7 Post the Anglo-Mysore wars, whom did the East India Company appoint as the Governor of Bengal?

- Ans
- 1. Robert Clive
  - 2. Sir Charles Metcalfe
  - 3. Lord Hardinge
  - 4. Warren Hastings

Question ID : 98958010757  
Status : Not Answered  
Chosen Option : --

Q.7  
7 Where is the Duncan Pass located?

- Ans
- 1. Goa
  - 2. Telangana
  - 3. Andhra Pradesh
  - 4. The Andaman and Nicobar Islands

Question ID : 98958010791  
Status : Not Answered  
Chosen Option : --

Q.7  
8 'Angry Akku' by \_\_\_\_\_ received The Hindu Young World-Goodbooks Award for Best Picture Book: Story in The Hindu Literary Prize 2018 which was awarded during The Hindu Lit for Life 2019.

- Ans
- 1. Rajiv Eipe
  - 2. Mamta Nainy
  - 3. Neelum Saran Gour
  - 4. Vinayak Varma

Question ID : 98958010748  
Status : Not Answered  
Chosen Option : --

Q.7  
9 The Union Cabinet chaired by Prime Minister Narendra Modi has approved the Agriculture Export Policy, 2018, with an aim to increase farmer's income by \_\_\_\_\_ % by 2022.

- Ans
- 1. 50%
  - 2. 100%
  - 3. 25 %
  - 4. 75 %

Question ID : 98958010793  
Status : Answered  
Chosen Option : 2

Q.8  
0 The Committee headed by Deputy Election Commissioner \_\_\_\_\_ has submitted the report on revisiting the Section 126 of the Representation of the People Act.

- Ans
- 1. Chandra Bhushan Kumar
  - 2. Nasim Zaidi
  - 3. Umesh Sinha
  - 4. Achal Kumar Jyoti

Question ID : 98958010754  
Status : Answered  
Chosen Option : 4

Q.8



1 The \_\_\_\_\_ was awarded the International Gandhi Peace Prize 2017 for its work in the field of education for rural and tribal children, rural empowerment and gender and social equality.

- Ans
- 1. Akshaya Patra Foundation
  - 2. Ekal Abhiyan Trust
  - 3. Vivekananda Kendra
  - 4. Sulabh International

Question ID : 98958010753  
Status : Answered  
Chosen Option : 4

Q.8  
2 Persea Americana is commonly known as \_\_\_\_\_.

- Ans
- 1. Avocado
  - 2. Watermelon
  - 3. Orange
  - 4. Grapes

Question ID : 98958010770  
Status : Not Answered  
Chosen Option : --

Q.8  
3 Kalhana penned the book named \_\_\_\_\_ in 12th century which is a metrical historical chronicle of the kings of Kashmir.

- Ans
- 1. Tarikh-i-Firuz Shahi
  - 2. Nuh Sipihir
  - 3. Rajatarangini
  - 4. Padmavat

Question ID : 98958010762  
Status : Not Answered  
Chosen Option : --

Q.8  
4 The Delhi High Court has allowed the release of the movie '72 Hours – Martyr who never died', based on the life of the 1962 war hero Rifleman \_\_\_\_\_ who was posthumously awarded the Maha Vir Chakra for gallantry.

- Ans
- 1. Jaswant Singh Rawat
  - 2. Harbans Singh Virk
  - 3. Man Mohan Khanna
  - 4. Rajendra Singh

Question ID : 98958010760  
Status : Answered  
Chosen Option : 1

Q.8  
5 The Hindu Literary Prize 2018 for non-fiction was awarded to Activist \_\_\_\_\_, author of 'Interrogating my Chandal Life: An Autobiography of a Dalit' during The Hindu Lit for Life 2019.

- Ans
- 1. Venita Coelho

- 2. Mamta Nainy
- 3. Manoranjan Byapari
- 4. Vinayak Varma

Question ID : 98958010745  
Status : Not Answered  
Chosen Option : --

Q.8 The Tropic of Cancer passes through 8 Indian states. Which of the following is NOT one of them?  
6

- Ans
- 1. Rajasthan
  - 2. Assam
  - 3. West Bengal
  - 4. Chhattisgarh

Question ID : 98958010776  
Status : Answered  
Chosen Option : 4

Q.8 Who is the Railway Minister of India as on January 2019?  
7

- Ans
- 1. Arun Jaitley
  - 2. Piyush Goyal
  - 3. Suresh Prabhu
  - 4. Nitin Gadkari

Question ID : 98958010768  
Status : Answered  
Chosen Option : 2

Q.8 India celebrates Army Day on \_\_\_\_\_ to salute the valiant soldiers who sacrificed their lives to protect the country.  
8

- Ans
- 1. February 15
  - 2. March 10
  - 3. January 15
  - 4. August 17

Question ID : 98958010750  
Status : Answered  
Chosen Option : 3

Q.8 The 18th Asian Games were held in the cities of \_\_\_\_\_ and \_\_\_\_\_ in Indonesia from August 18 to September 2,  
9 2018.

- Ans
- 1. Medan and Makassar
  - 2. Bandung and Surabaya
  - 3. Malang and Padang

✓ 4. Jakarta and Palembang

Question ID : 98958010774  
Status : Answered  
Chosen Option : 4

Q.9  
0 Panthi is a dance form from which of the following states?

- Ans
- ✗ 1. Odisha
  - ✗ 2. Rajasthan
  - ✓ 3. Chhattisgarh
  - ✗ 4. Bihar

Question ID : 98958010766  
Status : Not Answered  
Chosen Option : --

Q.9  
1 Who was appointed as the first Chief Justice of independent India?

- Ans
- ✗ 1. Bijan Mukherjee
  - ✗ 2. A R Sarkar
  - ✓ 3. Harilal Kania
  - ✗ 4. Y V Chandrachud

Question ID : 98958010758  
Status : Answered  
Chosen Option : 4

Q.9  
2 Shaktikanta Das took over as the \_\_\_\_\_ Governor of Reserve Bank of India after the resignation of Urjit Patel.

- Ans
- ✗ 1. 26th
  - ✗ 2. 27th
  - ✗ 3. 24th
  - ✓ 4. 25th

Question ID : 98958010764  
Status : Answered  
Chosen Option : 1

Q.9  
3 The High Court of Kerala had disqualified an independent MLA \_\_\_\_\_ from the Koduvally Assembly constituency for his defamatory campaign against the rival candidate during the 2016 Assembly polls.

- Ans
- ✗ 1. Kamal Nath
  - ✗ 2. Himanta Biswa Sarma
  - ✓ 3. Karat Razack
  - ✗ 4. Ahmed Patel

Question ID : 98958010756  
Status : Answered  
Chosen Option : 3

Q.9 India-Myanmar bilateral army exercise, IMBEX 2018-19, has begun at \_\_\_\_\_ Military Station which houses the  
4 headquarters of the Western Command.

- Ans
- 1. Tandur
  - 2. Chandi mandir
  - 3. Pasan
  - 4. Ramgarh

Question ID : 98958010772  
Status : Answered  
Chosen Option : 4

Q.9 Vesak commemorates the birth of \_\_\_\_\_.  
5

- Ans
- 1. Christ
  - 2. Mahavir
  - 3. Judas
  - 4. Buddha

Question ID : 98958010767  
Status : Not Answered  
Chosen Option : --

Q.9 Indian athlete \_\_\_\_\_ won gold medal in women's Heptathlon Athletics event at 18th edition of Asian Games held in  
6 Jakarta-Palembang in Indonesia.

- Ans
- 1. Anju Bobby
  - 2. Swapna Barman
  - 3. Anjali Bhagwat
  - 4. Sakshi Malik

Question ID : 98958010761  
Status : Not Answered  
Chosen Option : --

Q.9 Which amongst the following is NOT one of the four main factors of production?  
7

- Ans
- 1. Land
  - 2. Labour
  - 3. Expenditure
  - 4. Entrepreneurship

Question ID : 98958010783  
Status : Answered  
Chosen Option : 3

Q.9 \_\_\_\_\_ is the first institute in the country to launch a full-fledged bachelor's programme in Artificial Intelligence (AI)  
8 technology.

- Ans
- 1. IIT Hyderabad

- 2. IIT Kanpur
- 3. IIT Delhi
- 4. IIT Bombay

Question ID : 98958010752  
 Status : Answered  
 Chosen Option : 2

Q.9 By whom was the play 'Caesar and Cleopatra' written?

- Ans
- 1. Joy Adamson
  - 2. Thomas Powers
  - 3. George Bernard Shaw
  - 4. Ernest Hemingway

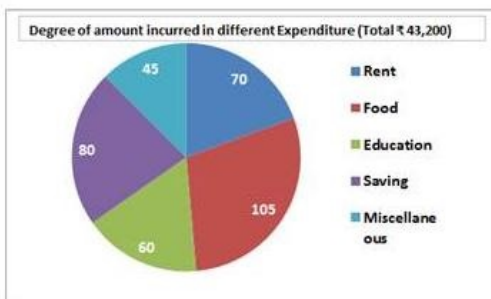
Question ID : 98958010786  
 Status : Not Answered  
 Chosen Option : --

Q.1 Eminent economist and columnist \_\_\_\_\_ has resigned as part-time member of Economic Advisory Council to the Prime Minister (EAC-PM) in December 2018.

- Ans
- 1. Surjit Bhalla
  - 2. Arvind Subramanian
  - 3. Shivshankar Menon
  - 4. Urijit Patel

Question ID : 98958010773  
 Status : Answered  
 Chosen Option : 2

Q.1  
01



In the given pie-chart, the amount spend on education is what percent of the savings?

- Ans
- 1. 80%
  - 2. 60%
  - 3. 70%
  - 4. 75%

Question ID : 98958010889  
 Status : Answered  
 Chosen Option : 4

Q.1 Two numbers are in the ratio 5 : 11. If their HCF is 24, then the sum of two these numbers is:

02

- Ans
- 1. 384
  - 2. 408
  - 3. 120
  - 4. 264

Question ID : 98958010846

Status : Not Attempted and Marked For Review

Chosen Option : --

Q.1 One side of a rhombus is 26 cm and one of the diagonal is 48 cm. What is the area of the rhombus?

03

- Ans
- 1. 624 cm<sup>2</sup>
  - 2. 580 cm<sup>2</sup>
  - 3. 520 cm<sup>2</sup>
  - 4. 480 cm<sup>2</sup>

Question ID : 98958010869

Status : Not Answered

Chosen Option : --

Q.1 If the seven digit number  $56x34y4$  is divisible by 72, then what is the least value of  $(x + y)$ ?

04

- Ans
- 1. 8
  - 2. 12
  - 3. 5
  - 4. 14

Question ID : 98958010845

Status : Not Attempted and Marked For Review

Chosen Option : --

Q.1 ABCD is a cyclic quadrilateral such that AB is the diameter of the circle circumscribing it and  $\angle ADC = 155^\circ$ , then what is the measure of  $\angle BAC$ ?

05

- Ans
- 1. 35°
  - 2. 55°
  - 3. 65°
  - 4. 45°

Question ID : 98958010877

Status : Not Answered

Chosen Option : --

Q.1 In a class of 70 students, 40% are girls and remaining are boys. The average marks of the boys are 63 and that of the girls are 70. What is the average marks of the whole class?

06

- Ans
- 1. 65.4
  - 2. 65.8

3. 65.2

4. 64.8

Question ID : 98958010851

Status : **Not Attempted and Marked For Review**

Chosen Option : --

Q.1 The sides of a triangle are 16 cm, 30 cm and 34 cm respectively. At each vertices, circles of radius 7 cm are drawn.

07 What is the area of the triangle, excluding the portion covered by the sectors of the triangle? ( $\pi = \frac{22}{7}$ )

Ans  1. 172 cm<sup>2</sup>

2. 163 cm<sup>2</sup>

3. 196 cm<sup>2</sup>

4. 86 cm<sup>2</sup>

Question ID : 98958010870

Status : **Not Answered**

Chosen Option : --

Q.1 If  $a^3 - b^3 = 1603$  and  $(a - b) = 7$ , then  $(a + b)^2 - ab$  is equal to:

08 Ans  1. 458

2. 338

3. 229

4. 648

Question ID : 98958010875

Status : **Not Attempted and Marked For Review**

Chosen Option : --

Q.1 If a train runs with the speed of 36 km/h, it reaches its destination 15 minutes late. However, if its speed is 45 km/h, it is

09 late by only 4 minutes. The correct time to cover its journey in minutes is:

Ans  1. 22

2. 27

3. 25

4. 40

Question ID : 98958010867

Status : **Not Attempted and Marked For Review**

Chosen Option : --

Q.1 From a point P outside the circle with centre O, two tangents PA and PB are drawn to meet the circle at A and B respectively. If  $\angle APB = 70^\circ$ , then  $\angle OAB$  is equal to:

10 Ans  1.  $35^\circ$

2.  $65^\circ$

3.  $45^\circ$

4.  $55^\circ$

Question ID : 98958010878

Status : **Not Answered**

Chosen Option : --

**Q.1** The price sugar has increased by 18%. By what percentage can a person decrease the consumption so that, there is no change in the expenditure? (correct to one decimal place)

- Ans**
- 1. 15.9%
  - 2. 15.7%
  - 3. 15.5%
  - 4. 15.3%

Question ID : 98958010856

Status : Not Answered

Chosen Option : --

**Q.1** 18 persons working 8 hours a day can complete 3 units of works in 10 days. How many persons are required to complete 5 units of that work in 16 days working 6 hours a day?

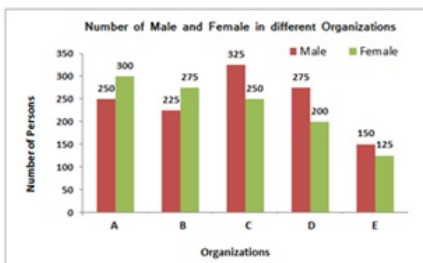
- Ans**
- 1. 25
  - 2. 15
  - 3. 20
  - 4. 9

Question ID : 98958010863

Status : Answered

Chosen Option : 4

**Q.1**  
**13**



In the given bar graph, what is the average number of females in all five organisations?

- Ans**
- 1. 245
  - 2. 235
  - 3. 230
  - 4. 225

Question ID : 98958010887

Status : Answered

Chosen Option : 3

**Q.1** A boat can go 20 km downstream and 30 km upstream in 2 hours 20 minutes. Also, it can go 10 km downstream and 8 km upstream in 49 minutes. What is the speed of boat downstream in km/h?

- Ans**
- 1. 18
  - 2. 20
  - 3. 16
  - 4. 24

Question ID : 98958010868

Status : Not Attempted and Marked For Review



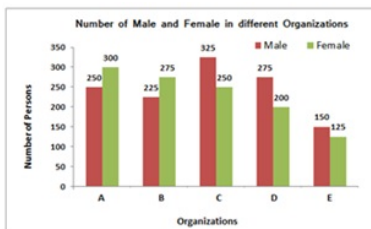
Chosen Option : --

Q.1  
15 The value of  $\sin^2 30^\circ \cdot \cos^2 45^\circ + 2 \tan^2 30^\circ - \sec^2 60^\circ$  is equal to:

- Ans
- 1.  $-\frac{13}{12}$
  - 2.  $-\frac{77}{24}$
  - 3.  $-\frac{25}{12}$
  - 4.  $-\frac{1}{12}$

Question ID : 98958010882  
Status : Not Answered  
Chosen Option : --

Q.1  
16



In the given bar graph, what is the ratio of the total males and females working in all organisations?

- Ans
- 1. 49 : 46
  - 2. 35 : 46
  - 3. 46 : 40
  - 4. 46 : 35

Question ID : 98958010885  
Status : Answered  
Chosen Option : 1

Q.1  
17 The average of 22 numbers is 52. The average of the first 8 numbers is 48 and the average of next 11 numbers is 54. The 20<sup>th</sup> number is 7 less than the 21<sup>st</sup> number and 21<sup>st</sup> number is 4 more than 22<sup>nd</sup> number. What is the average of the 20<sup>th</sup> and 22<sup>nd</sup> numbers?

- Ans
- 1. 52
  - 2. 52.5
  - 3. 53
  - 4. 53.5

Question ID : 98958010852  
Status : Not Attempted and Marked For Review  
Chosen Option : --

Q.1  
18 From the top of 75 m high tower, the angle of depression of two points P and Q on opposite side of the base of the tower on level ground is  $\theta$  and  $\phi$ , such that  $\tan \theta = \frac{3}{4}$  and  $\tan \phi = \frac{5}{8}$ . What is the distance between the points P and Q?

- Ans
- 1. 190 m
  - 2. 200 m
  - 3. 180 m

✓ 4. 220 m

Question ID : 98958010884  
 Status : Not Answered  
 Chosen Option : --

Q.1 19 The radius of a cylinder is increased by 150% and its height is increased by 50%. What is the percentage increase in its volume?

- Ans
- ✗ 1. 375%
  - ✗ 2. 625.5%
  - ✗ 3. 775.75%
  - ✓ 4. 837.5%

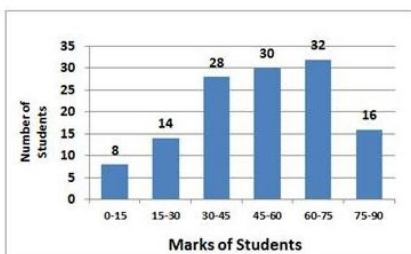
Question ID : 98958010873  
 Status : Not Answered  
 Chosen Option : --

Q.1 20 A, B and C started a business by investing ₹ 27,500, ₹ 32,500 and ₹ 37,500 respectively. A is a working partner and gets 20% of profit as working allowance and the remaining is distributed in proportion of their investments. If the money received by C is ₹ 13,500, What is total profit?

- Ans
- ✗ 1. ₹ 35,100
  - ✗ 2. ₹ 38,425
  - ✗ 3. ₹ 42,750
  - ✓ 4. ₹ 43,875

Question ID : 98958010860  
 Status : Not Attempted and Marked For Review  
 Chosen Option : --

Q.1 21



In the given histogram, what percentage of students got marks less than 45? (Correct to one decimal place)

- Ans
- ✗ 1. 39.4%
  - ✓ 2. 39.1%
  - ✗ 3. 39.6%
  - ✗ 4. 38.8%

Question ID : 98958010891  
 Status : Answered  
 Chosen Option : 2

Q.1 22 The Square root of which of the following is a rational number?

- Ans
- ✓ 1. 2361.96

- 2. 2758.28
- 3. 72568.4
- 4. 62504.9

Question ID : 98958010844  
 Status : **Not Attempted and Marked For Review**  
 Chosen Option : --

Q.1 23 What is the sum of the digits of the least number, which when divided by 15, 15 and 27 leaves the same remainder 9 in each case and is also completely divisible by 11?

- Ans
- 1. 20
  - 2. 17
  - 3. 18
  - 4. 19

Question ID : 98958010847  
 Status : **Not Attempted and Marked For Review**  
 Chosen Option : --

Q.1 24  $\frac{6.75 \times 6.75 \times 6.75 - 4.25 \times 4.25 \times 4.25}{67.5 \times 67.5 + 42.5 \times 42.5 + 67.5 \times 42.5}$  is equal to:

- Ans
- 1. 2.5
  - 2. 0.25
  - 3. 0.0025
  - 4. 0.025

Question ID : 98958010850  
 Status : **Not Attempted and Marked For Review**  
 Chosen Option : --

Q.1 25 A shopkeeper marks an article at a price such that after giving a discount of 25%, the gains  $x\%$ . If the cost price and the marked price of the article are ₹ 460 and ₹ 736 respectively, what is the value of  $x$ ?

- Ans
- 1. 20%
  - 2. 18%
  - 3. 24%
  - 4. 16%

Question ID : 98958010853  
 Status : **Not Attempted and Marked For Review**  
 Chosen Option : --

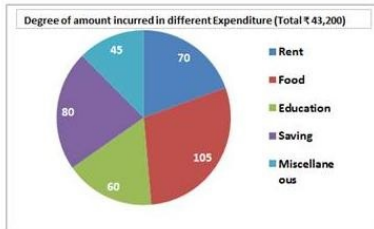
Q.1 26 Let  $\Delta ABC \sim \Delta RPQ$  and  $\frac{ar(\Delta ABC)}{ar(\Delta PQR)} = \frac{1}{4}$ . If  $PQ = 4$  cm,  $QR = 6$  cm and  $PR = 7$  cm, then  $AC$  is equal to:

- Ans
- 1. 2 cm
  - 2. 4 cm
  - 3. 3 cm
  - 4. 3.5 cm

Question ID : 98958010880  
 Status : **Not Answered**

Chosen Option : --

Q.1  
27



In the given pie-chart, total expenditure together on rent and education is what percent less than total expenditure of food and miscellaneous items?

- Ans
- 1. 26%
  - 2. 30%
  - 3.  $\frac{200}{13}$  %
  - 4.  $\frac{40}{3}$  %

Question ID : 98958010890

Status : Answered

Chosen Option : 4

Q.1  
28  $5\frac{1}{5} - \left[ 3\frac{1}{2} - \left\{ 5 - \left( \frac{3}{5} + \frac{1}{10} - \frac{4}{15} \right) \right\} \right]$  is equal to:

- Ans
- 1.  $\frac{21}{10}$
  - 2.  $\frac{7}{5}$
  - 3.  $\frac{7}{3}$
  - 4.  $\frac{8}{3}$

Question ID : 98958010849

Status : Not Attempted and Marked For Review

Chosen Option : --

Q.1  
29 The efficiencies of A, B and C are in the ratio 2 : 5 : 7 working together, they can complete a work in 10 days. In how many days will, A alone be able to complete 30% of that work?

- Ans
- 1. 20
  - 2. 28
  - 3. 30
  - 4. 21

Question ID : 98958010864

Status : Not Attempted and Marked For Review

Chosen Option : --

Q.1  
30 In an examination, 53% of the candidates failed in science and 48% failed in mathematics. If 40% failed in both subjects, what percentage passed in both subjects?

- Ans
- 1. 51%
  - 2. 39%

3. 49%

4. 43%

Question ID : 98958010857  
 Status : Answered  
 Chosen Option : 2

Q.1 31 Two pipes A and B can fill an empty tank in 10 hours and 16 hours respectively. They are opened alternately for 1 hour each, starting with pipe A first. In how many hours, the empty tank will be filled?

Ans  1.  $12\frac{1}{3}$

2.  $12\frac{1}{8}$

3.  $12\frac{1}{4}$

4.  $12\frac{1}{6}$

Question ID : 98958010866  
 Status : Not Attempted and Marked For Review  
 Chosen Option : --

Q.1 32 The successive discounts of 20%, 10% and 8% is equivalent to a single discount of:

Ans  1. 66.24%

2. 32.84%

3. 38%

4. 33.76%

Question ID : 98958010854  
 Status : Answered  
 Chosen Option : 1

Q.1 33 If  $\sin(A + B) = \frac{\sqrt{3}}{2}$  and  $\tan(A - B) = \frac{1}{\sqrt{3}}$ , then  $(2A + 3B)$  is equal to:

Ans  1.  $120^\circ$

2.  $135^\circ$

3.  $130^\circ$

4.  $125^\circ$

Question ID : 98958010881  
 Status : Not Answered  
 Chosen Option : --

Q.1 34 A sum of ₹ 12,000 is invested for 15 months at 10% per annum compounded half yearly. What is the percentage gain, at the end of 15 months, correct to one decimal place?

Ans  1. 13.0%

2. 13.1%

3. 12.8%

4. 12.9%

Question ID : 98958010862  
Status : Not Attempted and Marked For Review  
Chosen Option : --

Q.1 35 What is the ratio of mean proportional between 1.8 and 3.2 and the third proportional of 5 and 3?

- Ans
- 1. 3 : 5
  - 2. 4 : 3
  - 3. 3 : 4
  - 4. 5 : 3

Question ID : 98958010859  
Status : Not Attempted and Marked For Review  
Chosen Option : --

Q.1 36 In  $\Delta ABC$ ,  $\angle A = 40^\circ$ . If the bisectors of the  $\angle B$  and  $\angle C$ , meet at a point O, then  $\angle BOC$  is equal to:

- Ans
- 1.  $130^\circ$
  - 2.  $90^\circ$
  - 3.  $70^\circ$
  - 4.  $110^\circ$

Question ID : 98958010879  
Status : Not Answered  
Chosen Option : --

Q.1 37 Pipes A and B can fill a tank in 12 hours and 16 hours respectively and pipe C can empty the full tank in 24 hours. All three pipes are opened together, but after 4 hours pipe A is closed. In how many hours from the beginning the tank be filled?

- Ans
- 1. 24
  - 2. 28
  - 3. 30
  - 4. 32

Question ID : 98958010865  
Status : Not Attempted and Marked For Review  
Chosen Option : --

Q.1 38 8 cubes, each of edge 5 cm, are joined end to end. What is the total surface area of the resulting cuboid?

- Ans
- 1.  $850 \text{ cm}^2$
  - 2.  $825 \text{ cm}^2$
  - 3.  $1200 \text{ cm}^2$
  - 4.  $800 \text{ cm}^2$

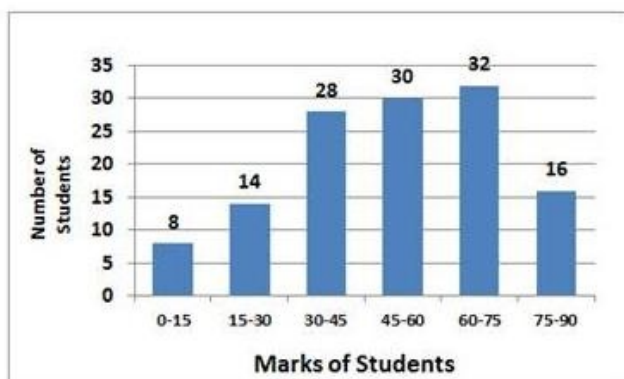
Question ID : 98958010871  
Status : Not Attempted and Marked For Review  
Chosen Option : --

Q.1 39 A shopkeeper sold two articles for ₹ 9639 each. On one, he gained 19% and on the other, he lost 19%. What is the overall percentage gain or loss?

- Ans
- 1. 3.81% loss
  - 2. 3.61% gain
  - 3. 3.81% gain
  - 4. 3.61% loss

Question ID : 98958010858  
 Status : Answered  
 Chosen Option : 4

Q.1  
40



In the given histogram, in which class interval, the median marks lies?

- Ans
- 1. 30-45
  - 2. 45-60
  - 3. 60-75
  - 4. 15-30

Question ID : 98958010892  
 Status : Answered  
 Chosen Option : 4

Q.1  
41 If  $(x + 4)^3 + (2x + 1)^3 + (2x + 5)^3 = (3x + 12)(2x + 1)(2x + 5)$ , then what is the value of  $x$ ?

- Ans
- 1. -3
  - 2. -2
  - 3. 2
  - 4. 3

Question ID : 98958010876  
 Status : Not Attempted and Marked For Review  
 Chosen Option : --

Q.1  
42 The value of  $3\frac{5}{6} + \left[3\frac{2}{3} - \left\{\frac{15}{4} \left(5\frac{4}{5} \div 14\frac{1}{2}\right)\right\}\right]$  is equal to:

- Ans
- 1.  $\frac{37}{6}$
  - 2.  $\frac{35}{6}$
  - 3. 6

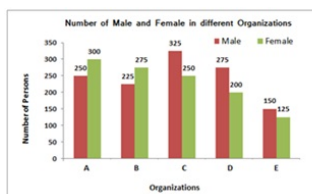
~~4.~~  $\frac{19}{3}$

Question ID : 98958010848

Status : Answered

Chosen Option : 2

Q.1  
43



In the given bar graph, in which organisation, the percentage difference between the males and females is maximum, by considering total persons in that organisation as base?

- Ans
- 1. D
  - 2. E
  - 3. B
  - 4. C

Question ID : 98958010886

Status : Answered

Chosen Option : 1

Q.1  
44 The angle of elevation of top of a tower from a point P, on the ground is  $\theta$  such that  $\tan \theta = \frac{12}{5}$ . If distance of the point P, from the base of the tower is 75 m, what is the height of the tower?

- Ans
- 1. 160 m
  - 2. 200 m
  - 3. 190 m
  - 4. 180 m

Question ID : 98958010883

Status : Not Answered

Chosen Option : --

Q.1  
45 If the income of A is 40% more than the income of B, then by what percentage is B's income less than that income of A?

- Ans
- 1.  $\frac{230}{7}\%$
  - 2. 56%
  - 3. 25%
  - 4.  $\frac{200}{7}\%$

Question ID : 98958010855

Status : Answered

Chosen Option : 1

Q.1  
46 If  $x + \frac{1}{x} = 8$ , then  $x^2 + \frac{1}{x^2}$  is equal to:

- Ans
- 1. 62
  - 2. 68



~~X~~ 3. 64

~~X~~ 4. 66

Question ID : 98958010874  
 Status : Answered  
 Chosen Option : 4

Q.1 47 A sum of ₹ 15,600 is invested partly at 7% per annum and the remaining at 9% per annum simple interest. If the total interest at the end of 3 years is ₹ 3,738, how much money was invested at 7% per annum?

Ans ~~X~~ 1. ₹ 7,800

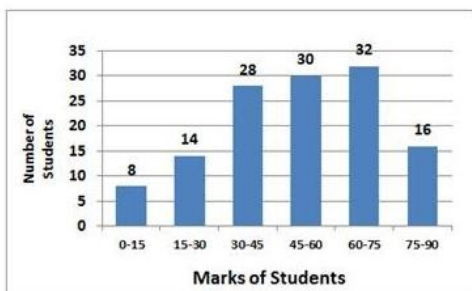
✓ 2. ₹ 7,900

~~X~~ 3. ₹ 7,600

~~X~~ 4. ₹ 7,700

Question ID : 98958010861  
 Status : Not Attempted and Marked For Review  
 Chosen Option : --

Q.1 48



In the given histogram, what is the mean marks of the students, correct to one decimal place?

Ans ~~X~~ 1. 51.2

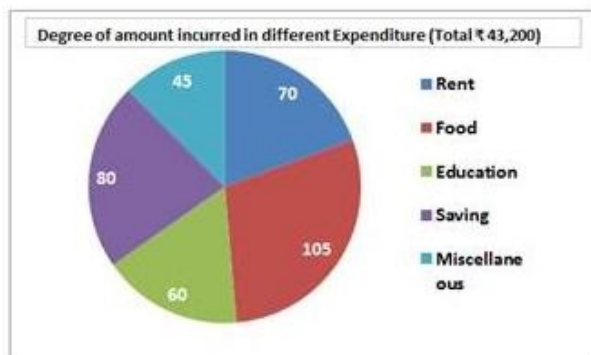
~~X~~ 2. 53.5

~~X~~ 3. 52.7

✓ 4. 50.6

Question ID : 98958010893  
 Status : Not Attempted and Marked For Review  
 Chosen Option : --

Q.1 49



In the given pie-chart, what is the total expenditure on rent?

Ans

✓ 1. ₹ 8,400

✗ 2. ₹ 8,600

✗ 3. ₹ 8,800

✗ 4. ₹ 8,900

Question ID : 98958010888  
Status : Answered  
Chosen Option : 1

Q.1 50 A sphere of radius 7 cm is melted and recast into small spheres of radius 2 cm each. How many such spheres can be made?

Ans ✗ 1. 40

✓ 2. 42

✗ 3. 41

✗ 4. 43

Question ID : 98958010872  
Status : Not Answered  
Chosen Option : --

Q.1 51 Select the wrongly spelt word.

Ans ✗ 1. devilish

✗ 2. device

✗ 3. deviation

✓ 4. deveous

Question ID : 98958010531  
Status : Not Answered  
Chosen Option : --

Q.1 52 Select the wrongly spelt word.

Ans ✗ 1. evaporation

✗ 2. establish

✗ 3. essential

✓ 4. evaluation

Question ID : 98958010532  
Status : Answered  
Chosen Option : 4

Q.1 53 Select the most appropriate words to fill in the blanks.

I expect to return \_\_\_\_\_ Mumbai \_\_\_\_\_ March 15.

Ans ✓ 1. from; on

- 2. to; at
- 3. from; in
- 4. at; in

Question ID : 98958010501  
Status : Answered  
Chosen Option : 1

Q.1  
54 Select the most appropriate word to fill in the blank.

After three months of practice, I \_\_\_\_\_ now swim quite fast.

- Ans
- 1. cannot
  - 2. should
  - 3. can
  - 4. could

Question ID : 98958010500  
Status : Answered  
Chosen Option : 3

Q.1  
55 Select the antonym of the given word.

STINGY

- Ans
- 1. kind
  - 2. generous
  - 3. mean
  - 4. miserly

Question ID : 98958010519  
Status : Not Answered  
Chosen Option : --

Q.1  
56 In the sentence identify the segment which contains the grammatical error.

Either Avika or Nikunj are going to win the prize in the handwriting competition.

- Ans
- 1. Either Avika
  - 2. or Nikunj
  - 3. in the
  - 4. are going to

Question ID : 98958010493  
Status : Answered  
Chosen Option : 4

Q.1  
57 Select the most appropriate meaning of the given idiom.

get out of hand

- Ans
- 1. to act irresponsibly
  - 2. to become uncontrollable
  - 3. to be indecisive
  - 4. to lose courage

Question ID : 98958010522  
Status : Answered  
Chosen Option : 2

Q.1  
58 In the sentence identify the segment which contains the grammatical error.

Neither I nor my sisters was interested in learning music.

- Ans
- 1. nor my sisters
  - 2. in learning music.
  - 3. was interested
  - 4. Neither I

Question ID : 98958010491  
Status : Answered  
Chosen Option : 3

Comprehension:

Read the following passage and answer the questions given after it.

The much-awaited expansion of Delhi's Indira Gandhi International Airport is expected to begin by March-end as the airport operator has received three bids for the R 9,000-crore project, two officials familiar with the matter said.

Two bids are from foreign companies while one is from an Indian firm. The airport operator, the GMR Group-led Delhi International Airport Ltd (DIAL), is expected to finalise the bidder this week. After the announcement, the successful bidder is expected to take around two months to mobilise the workforce and begin expansion work.

The bid document says the selected company has to complete work in 42 months. All the three bidders are reported to have quoted 39 months, the sources said.

The expansion is aimed to meet the rapid traffic growth that has already made IGI Asia's seventh busiest airport. The selected company will work on the expansion of Terminal 1 and Terminal 3 and the construction of a new runway and taxiways. Roads leading to the airport will be widened and new approach roads will be built.

The operator expects the expansion, which will start with Terminal 1, to be completed by 2021 — taking the overall handling capacity of the airport to 85 million passengers per year from the current 70 million. It will be followed by Phase 2 of the expansion, which includes construction of another brand new terminal.

Data released last year by Airports Council International showed that the passenger traffic at the Delhi Airport grew 14.1% year on year to 63.45 million in 2017. It was the first time it breached the 60-million passenger mark. In 2018, it was just below 70-million mark.

The new air traffic control (ATC) tower, which will open in 2019, and the fourth runway, to be launched in 2021, would help it reduce air congestion and handle more flights.

“Terminal 1 handles domestic traffic for low-cost carriers. These have registered a phenomenal growth in the last few years, calling for an expansion of the terminal. Delhi Metro under its Phase 3 programme is connecting this terminal to catchment areas of central and south Delhi. Since T1 is operating beyond its capacity, the expansion will begin from there and cover the airside, terminal building and city side,” said a DIAL official.

According to the Master Plan, T1's capacity will increase from 20 million to 40 million and that of Terminal 3 from 34 million to 45 million.

Inter-terminal connectivity through the Airport Metro between T1 and T3 is also part of the expansion plan.

DIAL has appointed AECOM, a design and development consultant for infrastructure projects, to complete the preliminary design for the expansion work.

SubQuestion No : 159

Q.1  
59 From the reading of the paragraph it can be inferred that it is:

- Ans
- 1. a news item
  - 2. a survey report
  - 3. an airport novel
  - 4. a promotional article

Question ID : 98958010537  
Status : Not Answered  
Chosen Option : --

Comprehension:

Read the following passage and answer the questions given after it.

The much-awaited expansion of Delhi's Indira Gandhi International Airport is expected to begin by March-end as the airport operator has received three bids for the R 9,000-crore project, two officials familiar with the matter said.

Two bids are from foreign companies while one is from an Indian firm. The airport operator, the GMR Group-led Delhi International Airport Ltd (DIAL), is expected to finalise the bidder this week. After the announcement, the successful bidder is expected to take around two months to mobilise the workforce and begin expansion work.

The bid document says the selected company has to complete work in 42 months. All the three bidders are reported to have quoted 39 months, the sources said.

The expansion is aimed to meet the rapid traffic growth that has already made IGI Asia's seventh busiest airport. The selected company will work on the expansion of Terminal 1 and Terminal 3 and the construction of a new runway and taxiways. Roads leading to the airport will be widened and new approach roads will be built.

The operator expects the expansion, which will start with Terminal 1, to be completed by 2021 — taking the overall handling capacity of the airport to 85 million passengers per year from the current 70 million. It will be followed by Phase 2 of the expansion, which includes construction of another brand new terminal.

Data released last year by Airports Council International showed that the passenger traffic at the Delhi Airport grew 14.1% year on year to 63.45 million in 2017. It was the first time it breached the 60-million passenger mark. In 2018, it was just below 70-million mark.

The new air traffic control (ATC) tower, which will open in 2019, and the fourth runway, to be launched in 2021, would help it reduce air congestion and handle more flights.

“Terminal 1 handles domestic traffic for low-cost carriers. These have registered a phenomenal growth in the last few years, calling for an expansion of the terminal. Delhi Metro under its Phase 3 programme is connecting this terminal to catchment areas of central and south Delhi. Since T1 is operating beyond its capacity, the expansion will begin from there and cover the airside, terminal building and city side,” said a DIAL official.

According to the Master Plan, T1's capacity will increase from 20 million to 40 million and that of Terminal 3 from 34 million to 45 million.

Inter-terminal connectivity through the Airport Metro between T1 and T3 is also part of the expansion plan.

DIAL has appointed AECOM, a design and development consultant for infrastructure projects, to complete the preliminary design for the expansion work.

SubQuestion No : 160

Q.1  
60 The expansion of the airport will begin from:

- Ans
- 1. Construction of a new terminal to handle the increasing load.
  - 2. Terminal 3 which handles international traffic.
  - 3. Construction of a new runway and taxiways.
  - 4. Terminal 1 which handles fast growing domestic traffic.

Question ID : 98958010538

Status : Not Answered

Chosen Option : --

Comprehension:



Read the following passage and answer the questions given after it.

The much-awaited expansion of Delhi's Indira Gandhi International Airport is expected to begin by March-end as the airport operator has received three bids for the R 9,000-crore project, two officials familiar with the matter said.

Two bids are from foreign companies while one is from an Indian firm. The airport operator, the GMR Group-led Delhi International Airport Ltd (DIAL), is expected to finalise the bidder this week. After the announcement, the successful bidder is expected to take around two months to mobilise the workforce and begin expansion work.

The bid document says the selected company has to complete work in 42 months. All the three bidders are reported to have quoted 39 months, the sources said.

The expansion is aimed to meet the rapid traffic growth that has already made IGI Asia's seventh busiest airport. The selected company will work on the expansion of Terminal 1 and Terminal 3 and the construction of a new runway and taxiways. Roads leading to the airport will be widened and new approach roads will be built.

The operator expects the expansion, which will start with Terminal 1, to be completed by 2021 — taking the overall handling capacity of the airport to 85 million passengers per year from the current 70 million. It will be followed by Phase 2 of the expansion, which includes construction of another brand new terminal.

Data released last year by Airports Council International showed that the passenger traffic at the Delhi Airport grew 14.1% year on year to 63.45 million in 2017. It was the first time it breached the 60-million passenger mark. In 2018, it was just below 70-million mark.

The new air traffic control (ATC) tower, which will open in 2019, and the fourth runway, to be launched in 2021, would help it reduce air congestion and handle more flights.

“Terminal 1 handles domestic traffic for low-cost carriers. These have registered a phenomenal growth in the last few years, calling for an expansion of the terminal. Delhi Metro under its Phase 3 programme is connecting this terminal to catchment areas of central and south Delhi. Since T1 is operating beyond its capacity, the expansion will begin from there and cover the airside, terminal building and city side,” said a DIAL official.

According to the Master Plan, T1's capacity will increase from 20 million to 40 million and that of Terminal 3 from 34 million to 45 million.

Inter-terminal connectivity through the Airport Metro between T1 and T3 is also part of the expansion plan.

DIAL has appointed AECOM, a design and development consultant for infrastructure projects, to complete the preliminary design for the expansion work.

SubQuestion No : 161

Q.1  
61 In 2018, the number of passengers that the Delhi Airport handled was:

- Ans
- 1. 63.45 million
  - 2. 40 million
  - 3. just below 70 million
  - 4. 45 million

Question ID : 98958010539

Status : Not Answered

Chosen Option : --

Comprehension:

Read the following passage and answer the questions given after it.

The much-awaited expansion of Delhi's Indira Gandhi International Airport is expected to begin by March-end as the airport operator has received three bids for the R 9,000-crore project, two officials familiar with the matter said.

Two bids are from foreign companies while one is from an Indian firm. The airport operator, the GMR Group-led Delhi International Airport Ltd (DIAL), is expected to finalise the bidder this week. After the announcement, the successful bidder is expected to take around two months to mobilise the workforce and begin expansion work.

The bid document says the selected company has to complete work in 42 months. All the three bidders are reported to have quoted 39 months, the sources said.

The expansion is aimed to meet the rapid traffic growth that has already made IGI Asia's seventh busiest airport. The selected company will work on the expansion of Terminal 1 and Terminal 3 and the construction of a new runway and taxiways. Roads leading to the airport will be widened and new approach roads will be built.

The operator expects the expansion, which will start with Terminal 1, to be completed by 2021 — taking the overall handling capacity of the airport to 85 million passengers per year from the current 70 million. It will be followed by Phase 2 of the expansion, which includes construction of another brand new terminal.

Data released last year by Airports Council International showed that the passenger traffic at the Delhi Airport grew 14.1% year on year to 63.45 million in 2017. It was the first time it breached the 60-million passenger mark. In 2018, it was just below 70-million mark.

The new air traffic control (ATC) tower, which will open in 2019, and the fourth runway, to be launched in 2021, would help it reduce air congestion and handle more flights.

“Terminal 1 handles domestic traffic for low-cost carriers. These have registered a phenomenal growth in the last few years, calling for an expansion of the terminal. Delhi Metro under its Phase 3 programme is connecting this terminal to catchment areas of central and south Delhi. Since T1 is operating beyond its capacity, the expansion will begin from there and cover the airside, terminal building and city side,” said a DIAL official.

According to the Master Plan, T1's capacity will increase from 20 million to 40 million and that of Terminal 3 from 34 million to 45 million.

Inter-terminal connectivity through the Airport Metro between T1 and T3 is also part of the expansion plan.

DIAL has appointed AECOM, a design and development consultant for infrastructure projects, to complete the preliminary design for the expansion work.

SubQuestion No : 162

Q.1  
62 Which of the following measures will help the airport reduce air congestion and handle more flights for the time being?

- Ans
- 1. building Inter-terminal connectivity between T1 and T3
  - 2. construction of air control tower and a new runway
  - 3. construction of taxiways and widening of approach roads
  - 4. construction of a brand new terminal

Question ID : 98958010540

Status : Not Answered

Chosen Option : --

Comprehension:

Read the following passage and answer the questions given after it.

The much-awaited expansion of Delhi's Indira Gandhi International Airport is expected to begin by March-end as the airport operator has received three bids for the R 9,000-crore project, two officials familiar with the matter said.

Two bids are from foreign companies while one is from an Indian firm. The airport operator, the GMR Group-led Delhi International Airport Ltd (DIAL), is expected to finalise the bidder this week. After the announcement, the successful bidder is expected to take around two months to mobilise the workforce and begin expansion work.

The bid document says the selected company has to complete work in 42 months. All the three bidders are reported to have quoted 39 months, the sources said.

The expansion is aimed to meet the rapid traffic growth that has already made IGI Asia's seventh busiest airport. The selected company will work on the expansion of Terminal 1 and Terminal 3 and the construction of a new runway and taxiways. Roads leading to the airport will be widened and new approach roads will be built.

The operator expects the expansion, which will start with Terminal 1, to be completed by 2021 — taking the overall handling capacity of the airport to 85 million passengers per year from the current 70 million. It will be followed by Phase 2 of the expansion, which includes construction of another brand new terminal.

Data released last year by Airports Council International showed that the passenger traffic at the Delhi Airport grew 14.1% year on year to 63.45 million in 2017. It was the first time it breached the 60-million passenger mark. In 2018, it was just below 70-million mark.

The new air traffic control (ATC) tower, which will open in 2019, and the fourth runway, to be launched in 2021, would help it reduce air congestion and handle more flights.

“Terminal 1 handles domestic traffic for low-cost carriers. These have registered a phenomenal growth in the last few years, calling for an expansion of the terminal. Delhi Metro under its Phase 3 programme is connecting this terminal to catchment areas of central and south Delhi. Since T1 is operating beyond its capacity, the expansion will begin from there and cover the airside, terminal building and city side,” said a DIAL official.

According to the Master Plan, T1's capacity will increase from 20 million to 40 million and that of Terminal 3 from 34 million to 45 million.

Inter-terminal connectivity through the Airport Metro between T1 and T3 is also part of the expansion plan.

DIAL has appointed AECOM, a design and development consultant for infrastructure projects, to complete the preliminary design for the expansion work.

SubQuestion No : 163

Q.1  
63 Which agency has been appointed to prepare the design for the expansion of the Delhi airport?

- Ans
- 1. Airports Council International
  - 2. G M R group
  - 3. AECOM
  - 4. DIAL

Question ID : 98958010541  
Status : Not Answered  
Chosen Option : --

Q.1  
64 Select the antonym of the given word.

IMPECCABLE

- Ans
- 1. faultless
  - 2. unsullied
  - 3. imperfect
  - 4. methodical

Question ID : 98958010520  
Status : Answered  
Chosen Option : 1

Q.1  
65 Select the most appropriate meaning of the given idiom.

to drive someone up the wall

- Ans
- 1. to help someone in difficulty
  - 2. to keep at a distance
  - 3. to irritate someone very much
  - 4. to frighten someone

Question ID : 98958010525  
Status : Answered  
Chosen Option : 1

Q.1  
66 Select the synonym of the given word.

VELOCITY

- Ans
- 1. flight
  - 2. race

- 3. speed
- 4. hurry

Question ID : 98958010511  
Status : Answered  
Chosen Option : 3

Q.1  
67 Select the most appropriate option to substitute the underlined segment in the given sentence. If there is no need to substitute it, Select No improvement.

People arrive from all parts of the country and had walked miles to take a dip at the confluence of the Rivers Ganga and Yamuna.

- Ans
- 1. are walking miles to take a dip
  - 2. walk for miles to take a dip
  - 3. had walked miles taking a dip
  - 4. No improvement

Question ID : 98958010498  
Status : Answered  
Chosen Option : 2

Q.1  
68 Select the wrongly spelt word.

- Ans
- 1. releive
  - 2. recruit
  - 3. receipt
  - 4. realm

Question ID : 98958010533  
Status : Not Answered  
Chosen Option : --

Q.1  
69 Select the most appropriate option to substitute the underlined segment in the given sentence. If there is no need to substitute it, Select No improvement.

He has not taken any coaching in the game but he plays good than many professional players.

- Ans
- 1. He is playing good than
  - 2. he plays the best than
  - 3. he plays better than
  - 4. No improvement

Question ID : 98958010496  
Status : Answered  
Chosen Option : 3

Q.1  
70

Select the antonym of the given word.

AMIABLE

- Ans
- 1. comfortable
  - 2. friendly
  - 3. hostile
  - 4. cordial

Question ID : 98958010518  
Status : Answered  
Chosen Option : 3

Q.1  
71 Select the most appropriate option to substitute the underlined segment in the given sentence. If there is no need to substitute it, Select No improvement.

Not only she objected to his proposal but also condemned it in strong terms.

- Ans
- 1. Not only did she object
  - 2. Not only did she objected
  - 3. Not only she had objected
  - 4. No improvement

Question ID : 98958010497  
Status : Answered  
Chosen Option : 1

Q.1  
72 Select the wrongly spelt word.

- Ans
- 1. violin
  - 2. visionary
  - 3. vecious
  - 4. voyage

Question ID : 98958010534  
Status : Not Answered  
Chosen Option : --

Q.1  
73 Select the synonym of the given word.

ACCURATE

- Ans
- 1. precise
  - 2. truthful
  - 3. condensed
  - 4. pacify



Question ID : 98958010512  
Status : Answered  
Chosen Option : 4

Q.1  
74 Select the most appropriate word to fill in the blank.

There was a lot of rubbish on the floor so I asked Sangeeta to sweep \_\_\_\_\_ away.

- Ans
- 1. them
  - 2. this
  - 3. it
  - 4. its

Question ID : 98958010503  
Status : Answered  
Chosen Option : 3

Q.1  
75 Select the antonym of the given word.

COHERENT

- Ans
- 1. constant
  - 2. illegible
  - 3. consistent
  - 4. illogical

Question ID : 98958010517  
Status : Not Answered  
Chosen Option : --

Q.1  
76 Select the antonym of the given word.

WEARY

- Ans
- 1. quick
  - 2. alert
  - 3. tired
  - 4. refreshed

Question ID : 98958010516  
Status : Answered  
Chosen Option : 3

Q.1  
77

Select the most appropriate word for the given group of words.

a large bound bundle of paper, hay or cotton

- Ans
- 1. barrel
  - 2. bale
  - 3. gale
  - 4. cache

Question ID : 98958010526  
Status : Not Answered  
Chosen Option : --

Q.1  
78 Select the most appropriate word to fill in the blank.

I felt something hard \_\_\_\_\_ my cheek.

- Ans
- 1. hit
  - 2. to hitting
  - 3. to be hitting
  - 4. to hit

Question ID : 98958010504  
Status : Answered  
Chosen Option : 4

Q.1  
79 Select the wrongly spelt word.

- Ans
- 1. competition
  - 2. explanation
  - 3. acquisition
  - 4. illumination

Question ID : 98958010535  
Status : Answered  
Chosen Option : 1

Q.1  
80 Select the most appropriate option to substitute the underlined segment in the given sentence. If there is no need to substitute it, Select No improvement.

The Kumbh Mela has been held at Allahabad, since centuries now because in the past two decades it has grown into a mega event.

- Ans
- 1. for centuries now but in the past
  - 2. No improvement
  - 3. since centuries now but in the past

4. for centuries now moreover in the past

Question ID : 98958010499  
Status : Answered  
Chosen Option : 4

Q.1  
81 In the sentence identify the segment which contains the grammatical error.

She is always finding fault with the food I cook.

- Ans
- 1. I cook.
  - 2. fault with
  - 3. the food
  - 4. is always finding

Question ID : 98958010494  
Status : Answered  
Chosen Option : 2

Q.1  
82 In the sentence identify the segment which contains the grammatical error.

This test comprises of grammar, vocabulary and reading comprehension.

- Ans
- 1. grammar, vocabulary
  - 2. This test
  - 3. and reading comprehension
  - 4. comprises of

Question ID : 98958010492  
Status : Not Answered  
Chosen Option : --

Q.1  
83 Select the most appropriate word for the given group of words.

instrument used for coding and decoding messages

- Ans
- 1. chronometer
  - 2. cryptograph
  - 3. cardiograph
  - 4. crescograph

Question ID : 98958010530  
Status : Answered  
Chosen Option : 2

Q.1

84 Select the most appropriate meaning of the given idiom.

to give the slip

- Ans
- 1. to keep low
  - 2. to escape
  - 3. to hit someone
  - 4. to hide

Question ID : 98958010521  
Status : Not Answered  
Chosen Option : --

Q.1  
85 Select the synonym of the given word.

IMMERSE

- Ans
- 1. drown
  - 2. bathe
  - 3. shower
  - 4. submerge

Question ID : 98958010513  
Status : Answered  
Chosen Option : 4

Q.1  
86 Select the synonym of the given word.

AWKWARD

- Ans
- 1. skillful
  - 2. clumsy
  - 3. pleasant
  - 4. graceful

Question ID : 98958010514  
Status : Answered  
Chosen Option : 1

Q.1  
87 Select the most appropriate word for the given group of words.

the base frame of a car or other wheeled vehicle

- Ans
- 1. fuselage
  - 2. bonnet

- 3. chassis
- 4. cockpit

Question ID : 98958010527  
Status : Not Answered  
Chosen Option : --

Q.1  
88 Select the synonym of the given word.

RADICAL

- Ans
- 1. trivial
  - 2. absolute
  - 3. minor
  - 4. moderate

Question ID : 98958010515  
Status : Answered  
Chosen Option : 4

Q.1  
89 Select the most appropriate word to fill in the blank.

The offer is good. You will regret \_\_\_\_\_ you decline it.

- Ans
- 1. unless
  - 2. whether
  - 3. if
  - 4. therefore

Question ID : 98958010502  
Status : Answered  
Chosen Option : 1

Q.1  
90 Select the most appropriate meaning of the given idiom.

the whole nine yards

- Ans
- 1. an act of kindness
  - 2. the entirety of something
  - 3. an essential part
  - 4. an enjoyable situation

Question ID : 98958010524  
Status : Answered  
Chosen Option : 2

Q.1  
91 Select the most appropriate word for the given group of words.

things or people of the same kind

- Ans
- 1. contemporaries
  - 2. homogeneous
  - 3. fellows
  - 4. colleagues

Question ID : 98958010528  
Status : Answered  
Chosen Option : 2

Q.1  
92 In the sentence identify the segment which contains the grammatical error.

The village, with all its houses, were flooded by the river.

- Ans
- 1. by the river
  - 2. were flooded
  - 3. its houses
  - 4. with all

Question ID : 98958010490  
Status : Not Answered  
Chosen Option : --

Q.1  
93 Select the most appropriate option to substitute the underlined segment in the given sentence. If there is no need to substitute it, Select No improvement.

It is difficult to distinguish in the two brothers.

- Ans
- 1. No improvement
  - 2. in both the two brothers.
  - 3. among the two brothers.
  - 4. between the two brothers.

Question ID : 98958010495  
Status : Answered  
Chosen Option : 4

Q.1  
94 Select the most appropriate meaning of the given idiom.

hit the nail on the head

- Ans
- 1. to make the precisely correct point

- 2. to hit someone on the head
- 3. to assess the situation immediately
- 4. to handle a difficult situation

Question ID : 98958010523  
Status : Answered  
Chosen Option : 4

Q.1  
95 Select the most appropriate word for the given group of words.

a small group of people having control of a country

- Ans
- 1. oligarchy
  - 2. plutocracy
  - 3. aristocracy
  - 4. theocracy

Question ID : 98958010529  
Status : Not Answered  
Chosen Option : --

**Comprehension:**

In the following passage some words have been deleted. Fill in the blanks with the help of the alternatives given. Select the most appropriate option for each number.

Wild monkeys are a problem for farmers in many areas in Japan. \_\_\_\_\_ (1) often come out of the woods to \_\_\_\_\_ (2) the tasty vegetables and fruit on farms. \_\_\_\_\_ (3) year, they cause heavy damage to crops. \_\_\_\_\_ (4) the farmers are fighting back. In 2005, a small village in Nagano \_\_\_\_\_ (5) a program to protect crops with the help of dogs. They are known as monkey dogs, and they are trained to scare monkeys away.

SubQuestion No : 196

Q.1  
96 Select the most appropriate option to fill in blank No.1.

- Ans
- 1. It
  - 2. They
  - 3. Those
  - 4. Them

Question ID : 98958010506  
Status : Answered  
Chosen Option : 2

**Comprehension:**

In the following passage some words have been deleted. Fill in the blanks with the help of the alternatives given. Select the most appropriate option for each number.

Wild monkeys are a problem for farmers in many areas in Japan. \_\_\_\_\_ (1) often come out of the woods to \_\_\_\_\_ (2) the tasty vegetables and fruit on farms. \_\_\_\_\_ (3) year, they cause heavy damage to crops. \_\_\_\_\_ (4) the farmers are fighting back. In 2005, a small village in Nagano \_\_\_\_\_ (5) a program to protect crops with the help of dogs. They are known as monkey dogs, and they are trained to scare monkeys away.

SubQuestion No : 197

Q.1  
97 Select the most appropriate option to fill in blank No.2.

- Ans
- 1. get
  - 2. cut
  - 3. eat
  - 4. waste

Question ID : 98958010507  
Status : Answered  
Chosen Option : 3

Comprehension:

In the following passage some words have been deleted. Fill in the blanks with the help of the alternatives given. Select the most appropriate option for each number.

Wild monkeys are a problem for farmers in many areas in Japan. \_\_\_\_\_ (1) often come out of the woods to \_\_\_\_\_ (2) the tasty vegetables and fruit on farms. \_\_\_\_\_ (3) year, they cause heavy damage to crops. \_\_\_\_\_ (4) the farmers are fighting back. In 2005, a small village in Nagano \_\_\_\_\_ (5) a program to protect crops with the help of dogs. They are known as monkey dogs, and they are trained to scare monkeys away.

SubQuestion No : 198

Q.1  
98 Select the most appropriate option to fill in blank No.3.

- Ans
- 1. All
  - 2. Whole
  - 3. This
  - 4. Every

Question ID : 98958010508  
Status : Answered  
Chosen Option : 4

Comprehension:



In the following passage some words have been deleted. Fill in the blanks with the help of the alternatives given. Select the most appropriate option for each number.

Wild monkeys are a problem for farmers in many areas in Japan. \_\_\_\_\_ (1) often come out of the woods to \_\_\_\_\_ (2) the tasty vegetables and fruit on farms. \_\_\_\_\_ (3) year, they cause heavy damage to crops. \_\_\_\_\_ (4) the farmers are fighting back. In 2005, a small village in Nagano \_\_\_\_\_ (5) a program to protect crops with the help of dogs. They are known as monkey dogs, and they are trained to scare monkeys away.

SubQuestion No : 199

Q.1  
99 Select the most appropriate option to fill in blank No.4.

- Ans
- 1. Because
  - 2. However
  - 3. Moreover
  - 4. Though

Question ID : 98958010509  
Status : Answered  
Chosen Option : 2

Comprehension:

In the following passage some words have been deleted. Fill in the blanks with the help of the alternatives given. Select the most appropriate option for each number.

Wild monkeys are a problem for farmers in many areas in Japan. \_\_\_\_\_ (1) often come out of the woods to \_\_\_\_\_ (2) the tasty vegetables and fruit on farms. \_\_\_\_\_ (3) year, they cause heavy damage to crops. \_\_\_\_\_ (4) the farmers are fighting back. In 2005, a small village in Nagano \_\_\_\_\_ (5) a program to protect crops with the help of dogs. They are known as monkey dogs, and they are trained to scare monkeys away.

SubQuestion No : 200

Q.2  
00 Select the most appropriate option to fill in blank No.5.

- Ans
- 1. continued
  - 2. started
  - 3. embarked
  - 4. instigated

Question ID : 98958010510  
Status : Answered  
Chosen Option : 2