

SSC CHSL Tier 1
2017
(10th March - Shift 2)
Hindi

101. In the following question, some part of the sentence may have errors. Find out which part of the sentence has an error and select the appropriate option. If a sentence is free from error, select 'No Error'.
To his opinion (1)/ every entertainment (2)/ movie is foolish. (3)/ No error (4)

- A. 1 B. 2
C. 3 D. 4

Ans. A

102. In the following question, some part of the sentence may have errors. Find out which part of the sentence has an error and select the appropriate option. If a sentence is free from error, select 'No Error'.
The Hellenistic period covering the period of Mediterranean (1)/ history between the death of Alexander the Great in (2)/ 323 BC and the emergence of the Roman Empire. (3)/ No error (4)

- A. 1 B. 2
C. 3 D. 4

Ans. A

103. In the following question, the sentence given with blank to filled in with an appropriate word. Select the correct alternative out of the four and indicate it by selective the appropriate option.
The police took _____ from there.

- A. after B. over
C. upon D. on

Ans. B

104. In the following question, the sentence given with blank to be filled in with an appropriate word. Select the correct alternative out of the four and indicate it by selecting the appropriate option.

One is caught in the box with what one knows and hence no new ideas _____.

A. emerge
B. destroy
C. rooted
D. innovate

Ans. A

105. In the following question, out of the given four alternatives. select the

one which best expresses the meaning of the given word.

Clandestine

- A. Truthful
B. Secret
C. Frank
D. Upright

Ans. B

106. In the following question, out of the given four alternatives, select the one which best expresses the meaning of the given word.

Cloistered

- A. Isolated
B. Mendable
C. Improvement
D. Crowded

Ans. A

107. In the following question, out of the given four alternative, select the one which is opposite in meaning of the given word.

Consanguinity

- A. Affinity
B. Kin
C. Race
D. Disunion

Ans. D

108. In the following question, out of the given four alternatives, select the one which is opposite in meaning of the given word.

Deathly

- A. Wasted
B. Blooming
C. Horrible
D. Sick

Ans. B

109. Rearrange the parts of the sentence in correct order.

There needs to be a

P : more coordinated effort

Q : forest diseases in India

R : towards dealing with

- A. PQR B. RQP
C. PRQ D. QPR

Ans. C

110. A sentence has been given in Active/Passive Voice. Out of four given alternatives, select the one which best express the same sentence in passive/Active Voice.

A policeman caught her.

- A. She was caught by a policeman.
- B. She is catch by a policeman.
- C. she caught by a policeman.
- D. She is caught by a policeman.

Ans. 111.

A sentence has been given in Direct/Indirect Speech. Out of the four given alternatives, select the one which best expresses the same sentence in Indirect/Direct Speech. Raju wrote, "He will be going to Mumbai the next weekend."

- A. Raju wrote that he will be going to Mumbai the next weekend.
- B. Raju wrote that he would be going to Mumbai the last weekend.
- C. Raju wrote that he would be going to Mumbai the next weekend.
- D. Raju wrote that he should be gone to Mumbai the next weekend

Ans. 112.

In the following question, a word has been written in four different ways out of which only one is correctly spelt. Select the correctly spelt word.

- A. Preferred
- B. Prefereed
- C. Prrefored
- D. Prefearred

Ans. 113.

In the following passage, some of the words have been left out. Read the passage carefully and select the correct answer for the given blank out of the four alternatives.

One who has witnessed a debate People may see, and hear, and feel all their lives without _____ learning the nature of things they see. But reason is the mind's eye, and enables us to see why things are, and when and how events may be made to happen _____ not to happen. The logician endeavours to _____ exactly what this reason is which makes the power of men. We all, as I have said, must reason well or ill, but logic is the science of reasoning and enables us to distinguish _____ the good reasoning which leads to truth, and the bad reasoning which every

day betrays people into error _____ misfortune.

Their lives without _____ learning the nature

- A. really
- B. real
- C. reality
- D. realise

Ans. 114.

In the following passage, some of the words have been left out. Read the passage carefully and select the correct answer for the given blank out of the four alternatives.

One who has witnessed a debate People may see, and hear, and feel all their lives without _____

learning the nature of things they see. But reason is the mind's eye, and enables us to see why things are, and when and how events may be made to happen _____ not

to happen. The logician endeavours to _____ exactly what this

reason is which makes the power of men. We all, as I have said, must reason well or ill, but logic is the science of reasoning and enables us to distinguish _____ the

good reasoning which leads to truth, and the bad reasoning which every day betrays people into error _____ misfortune

made to happen _____ not to happen

- A. or
- B. but
- C. so
- D. at

Ans. 115.

In the following passage, some of the words have been left out. Read the passage carefully and select the correct answer for the given blank out of the four alternatives.

People may see, and hear, and feel all their lives without _____

learning the nature of things they see. But reason is the mind's eye, and enables us to see why things are, and when and how events may be made to happen _____ not

to happen. The logician endeavours to _____ exactly what this

reason is which makes the power of men. We all, as I have said, must reason well or ill, but logic is the science of reasoning and enables us to distinguish _____ the

good reasoning which leads to truth, and the bad reasoning which every day betrays people into error

Logical endeavours to _____ exactly what this reason

- A. learnt
- B. leams
- C. learn
- D. learning

Ans.
116.

In the following passage, some of the words have been left out. Read the passage carefully and select the correct answer for the given blank out of the four alternatives.

People may see, and hear, and feel all their lives without _____ learning the nature of things they see. But reason is the mind's eye, and enables us to see why things are, and when and how events may be made to happen _____ not to happen. The logician endeavours to _____ exactly what this reason is which makes the power of men. We all, as I have said, must reason well or ill, but logic is the science of reasoning and enables us to distinguish _____ the good reasoning which leads to truth, and the bad reasoning which every day betrays people into error _____ misfortune.

Us to distinguish _____ the good reasoning

- A. in
- B. within
- C. between
- D. amidst

Ans.
117.

In the following passage, some of the words have been left out. Read the passage carefully and select the correct answer for the given blank out of the four alternatives.

People may see, and hear, and feel all their lives without _____ learning the nature of things they see. But reason is the mind's eye, and enables us to see why things are, and when and how events may be made to happen _____ not to happen. The logician endeavours to _____ exactly what this reason is which makes the power of men. We all, as I have said, must reason well or ill, but logic is the science of reasoning and enables us to distinguish _____ the good reasoning which leads to truth, and the bad reasoning which every day betrays people into error _____ misfortune.

People into error _____ misfortune.

- A. nor
- B. neither
- C. also
- D. and

Ans.
118.

In the following question, out of the four alternatives, select the alternative which best expresses the meaning of the idiom/phrase.

Be worlds apart

- A. Travel a very long distance.
- B. To go from heaven to hell.
- C. Be very different.
- D. To sustain affection despite living very far away.

Ans.
119.

In the following question, out of the four alternatives, select the alternative which best expresses the meaning of the idiom/phrase.

Silver bullet

- A. A very expensive solution used only as the last measure.
- B. A simple and seemingly magical solution to a complicated problem.
- C. A solution which is worse than the problem.
- D. A thing of beauty but which is actually deadly.

Ans.
120.

In the following question, out of the four alternatives, select the alternative which is the best substitute of the words/sentence.

The ability to make good judgements and take quick decisions

- A. Puerility
- B. Acumen
- C. Stupor
- D. Sanity

Ans.
121.

In the following question, out of the four alternatives, select the alternative which is the best substitute of the words/sentence.

A high degree of skill

- A. Proficiency
- B. Maladroit
- C. Amateur
- D. Gawkinsness

Ans.
122.

In the following question, out of the four alternatives, select the alternative which will improve the bracketed part of the sentence. In case no improvement is needed,

- From the early 1990s, salaries shot up and stock options **(were introduced)**.
- A. are introduced
B. is introduced
C. was introduced
D. no improvement
- Ans. D
123. In the following question, out of the four alternatives, select the alternative which will improve the bracketed part of the sentence. In case no improvement is needed, select "no improvement".
I have always (baffle) by the unique melange of languages and dialects that India is home to.
- A. being baffled
B. been baffled
C. baffling
D. no improvement
- Ans. B
124. The question below consists of a set of labelled sentences. Out of the four options given, select the most logical order of the sentences to form a coherent paragraph.
There was an old study
A-of marathon runners which
B-heart muscle during post- mortem
C-showed significant fibrosis of the
- A. ABC B. ACB
C. CBA D. CAB
- Ans. B
125. In the following question, four words are given out of which one word is correctly spelt. Select the correctly spelt word.
- A. exacerbate
B. exacarbate
C. exacerbat
D. exacarb
- Ans. A
126. In the following question, select the related word pair from the given alternatives.
Bulb : Electricity : : ? : ?
- A. Fuel:Diesel
B. Car:Petrol
C. Scooter:Vechile
D. Pen:Pencil
- Ans. B
127. In the following question, select the related number pair from the given alternatives.
432 : 234 : : 789 : ?
- A. 876 B. 795
C. 987 D. 894
128. In the following question, select the related letter/letters from the given alternatives.
TMP : QJM : : PIK : ?
- A. MFH B. RHK
C. GFI D. AHK
- Ans. A
129. In the following question, select the odd word pair from the given alternatives.
- A. Red-Colour
B. Colour-Green
C. Pink-Colour
D. Blue-Colour
- Ans. B
130. In the following question, four number pairs are given. The number on left side of (-) is related to the number of the right side of (-) with some Logic/Rule/Relation. Three are similar on basis of same Logic/Rule/Relation. Select the odd one out from the given alternatives.
- A. 23-25
B. 27-29
C. 21-23
D. 25-29
- Ans. D
131. In the following question, select the odd letter/letters from the given alternatives.
- A. IJLO
B. EFHI
C. KLNQ
D. GHJM
- Ans. B
132. Arrange the given words in the sequence in which they occur in the dictionary.
1. Participle 2. Parking
3. Parrot 4. Pedestrian
5. Peach
- A. 13245
B. 23154
C. 54213
D. 43125
- Ans. B
133. In the following question, select the missing number from the given series.
5, 8, 11, 14, 17, ?
- A. 21 B. 19
C. 20 D. 23
- Ans. C
134. A series is given with one term missing. Select the correct alternative from the given ones that will complete the series.
KNJ, NQM, QTP, TWS, ?

- Ans. C. WYZ D. WZV
D
135. The ratio of the present ages of Shreya and her husband is 8 : 9. 9 years from now, ages of her husband and her son will be in the ratio of 9 : 4. If the present age of Shreya is 56 years, then what will be her son's present age (in years)?
A. 23 B. 24
C. 19 D. 25

- Ans. A
136. From the given alternatives, select the word which **CANNOT** be formed using the letters of the given word. Components
A. Cool B. Come
C. Most D. Men

- Ans. A
137. In a certain code language, "TRAP" is written as "53" and "MADE" is written as "21". How is "LATE" written in that code language?
A. 37 B. 36
C. 38 D. 35

- Ans. B
138. In a certain code language, '-' represents 'x', '÷' represents '+', '+' represents '÷' and 'x' represents '-'. Find out the answer to the following question.
 $24 + 12 \times 30 \div 2 - 6 = ?$
A. 18 B. 13
C. 37 D. 22

- Ans. D
139. The following equation is incorrect. Which two signs should be interchanged to correct the equation?
 $21 + 16 \times 35 - 70 \div 20 = 9$
A. ÷ and x
B. + and ÷
C. - and +
D. ÷ and -

- Ans. D
140. If $2 * 10 = 6$, $14 * 16 = 15$ and $4 * 16 = 10$, then find the value of $16 * 8 = ?$
A. 12 B. 8
C. 10 D. 18

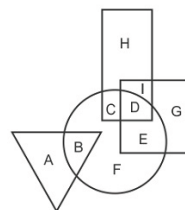
- Ans. A
141. Which of the following terms follows the trend of the given list? YYYYYX, YYYYYX, YYYXX, YYYXXXX, YYYXXXX, YYYXXXX, _____.
A. XXXXXXX
B. yXXXXXX
C. YYYYYXX
D. YYYYYXX

- Ans. B
142. Two autos start from the same stand.

- to its right and travels a further 3 km. Meanwhile auto B travels 5 km North, then turns West and travels 3 km, then it turns to its left and travels 8 km. Where is auto B with respect to auto A?
A. 5 km West
B. 1 km West
C. 5 km East
D. 1 km East

- Ans. A
143. In the question two statements are given, followed by two conclusions, I and II. You have to consider the statements to be true even if it seems to be at variance from commonly known facts. You have to decide which of the given conclusions, if any, follows from the given statements.
Statement I: No rubber are plastic
Statement II: All polymers are rubber
Conclusion I: Some plastic are polymers
Conclusion II: No polymers are plastic
A. Only conclusion I follows
B. Only conclusion II follows
C. Both conclusions I and follow
D. Neither conclusion I nor conclusion II follows

- Ans. B
144. In the following figure, rectangle represents Cartoonists, triangle represents poets and square represents Golfers. Which set of letters represents physicians who are Golfers?



- A. GE B. HC
C. HCIDGE D. ID

- Ans. D
145. A series is given with one term missing. Select the correct alternative from the given ones that will complete the series.
ONU, NKP, MHK, LEF, ?
A. KBA B. KAA
C. KBZ D. KAZ

- Ans. C

146. In the following question, select the missing number from the given series.

123, 120, 116, 111, ?, 98

- A. 100 B. 105
C. 103 D. 99

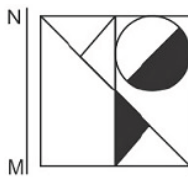
Ans. B





147. In the following question, four groups of three numbers are given. In each group the second and third number are related to the first number by a Logic/Rule/Relation. Three are similar on basis of same Logic/Rule/Relation. Select the odd one out from the given alternatives.

- A. (19,22,27)
B. (41,44,49)
C. (61,64,71)
D. (83,86,91)

Ans. C

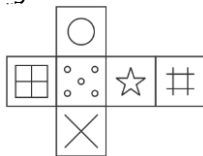
148. If a mirror is placed on the line MN, then which of the answer figures is the right image of the given figure?



- A. 
B. 
C. 
D. 

Ans. D

149. Which of the following cube in the answer figure cannot be made based on the unfolded cube in the question figure?



Ans. C

150. A word is represented by only set of numbers as given by any one of the alternatives. The sets of numbers given in the alternatives are represented by two classes of alphabets as shown in the given two matrices. The columns and rows of Matrix-I are numbered from 0 to 4 and that of Matrix-II are numbered from 5 to 9. A letter matrices can be represented first by its row and next by its column, for example 'G' can be represented by 31,24 etc and 'Y' can be represented by 86,97 etc. Similarly, you have to identify the set for the word 'COWS'.

Matrix I					
	0	1	2	3	4
0	C	C	D	I	J
1	E	K	I	B	E
2	I	F	A	K	G
3	C	G	E	L	I
4	J	H	I	F	A

Matrix II					
	5	6	7	8	9
5	O	X	N	W	X
6	N	Q	N	X	O
7	Z	T	V	N	T
8	O	Y	W	O	R
9	N	P	Y	S	Z

- A. 12,88,12,99
B. 36,68,21,57
C. 30,55,87,98

- Ans. D. 32,98,42,77
C
151. Find the value of $\sqrt{7\sqrt{7\sqrt{7\sqrt{7\sqrt{7\sqrt{7\sqrt{7}}}}}}}$
- A. $7^{\frac{31}{64}}$ B. $7^{\frac{1}{64}}$
C. $7^{\frac{63}{64}}$ D. $7^{\frac{7}{64}}$
- Ans. C
152. Find the value of $\sqrt{1 - \frac{x}{324}} = \frac{13}{18}$
- A. 155 B. 157
C. 159 D. 161
- Ans. A
153. if $x - \frac{1}{x} = 10$, then find the value of $\frac{x^4 + 1}{x^2}$
- A. 98 B. 100
C. 102 D. 106
- Ans. C
154. If $7^{m+1} = 2401$, then find the value of 2^{2m+2}
- A. 224 B. 256
C. 264 D. 286
- Ans. B
155. If the triangle ABC and DEF follows the given equation, then these two triangles are similar by which of the following criterion?
- $$\frac{AB}{DE} = \frac{BC}{EF} = \frac{AC}{DF}$$
- A. SAS similarity
B. AAA Similarity
C. SSS Similarity
D. None of these
- Ans. C
156. Which of the following is the CORRECT option for the triangles having sides in the ratio of 3:4:6?
- A. Acute angled
B. Obtuse angled
C. Right angled
D. Either acute right angled
- Ans. B
157. If 35% of A is equal to 60% of B, then what is the ratio of A and B?
- A. 8:13
B. 12:7
C. 2:3
D. 13:7
- Ans. B
158. A bag contain equal number of 1 rupee, 50 paisa and 25 paisa coins. If

- the total amount is Rs 105, then how many coins of each type are there?
- A. 15 B. 45
C. 60 D. 80
- Ans. C
159. The alcohol and water in a mixture are in the ratio of 7 : 8 respectively. If 11 litre water is added to it, then the ratio of alcohol and water in the new mixture becomes 3 : 5. What is the total quantity (in litres) of the alcohol in the new mixture?
- A. 21 B. 24
C. 35 D. 32
- Ans. A
160. In a committee there are 15 members. If two members whose ages are 45 years and 55 years are replaced by the two new members, then average age of 15 members is increased by 2 years. What is the average age (in years) of the new members?
- A. 59 B. 61
C. 65 D. 68
- Ans. C
161. Simple interest on a sum of Rs 1400 for 3 years and 4 months is Rs 700. What is the rate (in percentage) of interest per annum?
- A. 17 B. 15
C. 18 D. 12
- Ans. B
162. The difference between cost price and selling price is Rs 12.54. If loss percentage is 33%, then what is the cost price (in Rs)?
- A. 35.44 B. 50.54
C. 41 D. 38
- Ans. D
163. Selling price of an article is Rs 494 and discount of 5% is offered. What is the marked price (in Rs)?
- A. 524.5 B. 587
C. 520 D. 540
- Ans. C
164. What is the simplified value of $\sqrt{\frac{(0.07)^2 + (0.29)^2 - 0.0203}{(0.0)^3 + (0.29)^3}}$?
- A. 0.6
B. 0.06
C. (1/0.6)
D. (1/0.06)
- Ans. D
165. X alone can do a piece of work in 12 days and Y alone can do the same work in 6 days. In how many days

will both together complete the same work?

- A. 3 B. 4
C. 5 D. 2

Ans. B

166. A 800 metres long train is running at the speed of 90 km/hr. If it crosses a bridge in 50 seconds, then what is the length (in metres) of the bridge?

- A. 250 B. 300
C. 350 D. 450

Ans. D

167. The line graph shows the number of vacancies for management trainees in a certain company. Study the diagram and the answer the following questions.



In which year were number of vacancies lesser than that of the previous year?

- A. 2012 B. 2014
C. 2013 D. 2015

Ans. B

168. The line graph shows the number of vacancies for management trainees in a certain company. Study the diagram and the answer the following questions.



What was the difference in the number of vacancies between the years 2011 and 2014?

- A. 25 B. 20
C. 15 D. 30

169. The line graph shows the number of vacancies for management trainees in a certain company. Study the diagram and the answer the following questions

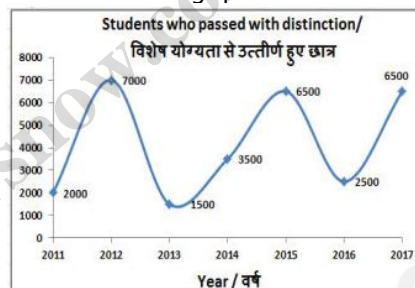


the Number of vacancies in 2015 were lesser than that in 2011 by _____.

- A. 0.3 B. 11.67
C. 0.7 D. 0.428

Ans. A

170. The line graph shows the number of vacancies for management trainees in a certain company. Study the diagram and the answer the following questions



The salary of a management trainee in the company is Rs 15,000, then what was the increase in the expense (in Rs lakhs) due to salaries that had to be paid when posts were filled for the vacancies in the year 2012?

- A. 13 B. 13.5
C. 14 D. 14.5

Ans. B

171. The length and breadth of a diagonal are 26 cm and 10 cm respectively. Calculate its area (in cm²)?

- A. 480 B. 96
C. 240 D. 192

Ans. C

172. If a regular polygon has 10 sides then the measure of its interior angle is greater than the measure of its exterior angle by how many degrees?

- A. 120 B. 132
C. 140 D. 108

Ans. D
173. Find the total surface area (in cm^2) of a cuboid of length, breadth and height of 10.5 cm, 8cm and 9cm respectively.

- A. 607 B. 767
C. 769 D. 501

Ans. D
174. What is the value of $(\cot 45^\circ - \sqrt{2})$?

- A. $(\sqrt{3}-1)/2\sqrt{3}$
B. $(\sqrt{3}-1)/2$
C. $1-\sqrt{2}$
D. $1-\sqrt{3}$

Ans. C
175. In $\triangle DEF$ measure of angle E is 90° . If $\tan D = 4/3$, and $DE = 6\text{cm}$, then what is the length (in cm) of side EF?

- A. 10 B. 5
C. 8 D. 4

Ans. C
176. Permanent settlement was a feature of _____.

- A. Zamindari System
B. Mahalwari System
C. Ryotwari System
D. No option is correct

Ans. A
177. Who was the Finance Minister of India during the New Economic Policy (1991)?

- A. Manmohan Singh
B. Uma Kapila
C. Pranab Mukherjee
D. Jaswant Singh

Ans. A
178. Which of the following elements were not found in the form of archaeological remains from Kalibanga?

- A. Black bangles
B. Fire pit
C. Ploughed field
D. Couple burial

Ans. D
179. Who led the English Army in the Battle of Buxar?

- A. Lord Clive
B. Vensittart
C. Hector Munro
D. Eyre Coot

Ans. C
180. Which of the following planets has the highest average density?

- A. Jupiter
B. Mars
C. Earth
D. Mercury

Ans. D
181. Where is the Girnar hills located?

- B. Gujarat
C. karnataka
D. Rajasthan

Ans. B
82. The birthplace of the tenth and last guru of Sikhs Guru Gobind Singh is:

- _____.
- A. Guwahti
B. Hemkund Sahib
C. Amritsar
D. Patna Sahib

Ans. D
183. How many agreements have been signed by India and Israel on January 15, 2018?

- A. 6 B. 9
C. 12 D. 15

Ans. B
184. Which Player has been awarded Padma Bhushan in the year 2018 for his contribution to Cricket?

- A. Saurabh Ganguli
B. Rahul Dravid
C. Mahendra singh Dhoni
D. Virat Kohali

Ans. C
185. Which state of India does not get the border from Pakistan?

- A. Gujarat
B. Rajasthan
C. Punjab
D. Himachal Pradesh

Ans. D
186. In which of the following, Nylon is used?

- A. Sleeping bags
B. Parachute
C. Toothbrush
D. All options are correct

Ans. D
187. Match the following items of column (A) with column (B).

- | Column A/ | Column B/ |
|------------------------------------|-----------------------------|
| i. Carbon/ | 1. In making electric wire/ |
| ii. Copper/ | 2. As fuel/ |
| iii. Iron/ | 3. In wrapping food items/ |
| iv. Aluminium/ | 4. For machinery/ |
| A. I - 2, I I - 1, III - 4, IV - 3 | |
| B. I - 3, II - 1, III - 2, IV - 4 | |
| C. I - 1, II - 2, III - 3, IV - 4 | |
| D. I - 4, II - 3, III - 1, IV - 2 | |

Ans. A
188. If any Fundamental Right of a citizen is breached, then under Article 32 of Indian Constitution he can directly go

- A. Chief Minister of India
 B. Prime Minister of India
 C. Supreme Court of India
 D. Governor of state
 Ans. C
 189. Which type of city administration controls transitional areas (from rural to urban)?
 A. Nagar panchayat
 B. Municipal Council
 C. Municipal Corporation
 D. No option is correct.
 Ans. A
 190. The process of acquiring oxygen from outside the body and to use it in the process of breakdown of food sources for cellular needs is commonly called _____.
 A. respiration
 B. nutrition
 C. digestion
 D. transportation
 Ans. A
 191. What is the function of guard cells of stomata?
 A. Opening of stomata only
 B. closing of stomata only
 C. Both opening and closing of stomata
 D. Neither opening nor closing of stomata
 Ans. C
 192. In August 2017, Indian Government has launched a portal to provide a platform to sell agricultural produce called 'e-RAKAM'. What does 'M' stand for?
 A. Market
 B. Mandi
 C. Management
 D. Messaging
 Ans. B
 193. SARAS PT1N, the new upgraded version of indigenous transport aircraft. SARAS has been developed by _____.
 A. Hindustan Aeronautics Limited
 B. National Aeronautics Laboratory
 C. Bharat Dynamics Limited
 D. Defence Research and Development Organisation
 Ans. B
 194. In April 2017, N. K. Singh Committee recommended a fiscal deficit of how much percent of GDP by Financial Year 2022-23?
 A. 2.50%
 C. 3.50%
 D. 4.00%
 Ans. A
 195. On 12 April 2017, Parliament passed the HIV/AIDS (Prevention and Control) Bill, 2017. This Bill provides essential support to National AIDS control programme. It aims to achieve the target of ending this Epidemic by year _____.
 A. 2025
 B. 2022
 C. 2030
 D. 2020
 Ans. C
 196. Calculate the time period (in seconds) of a sound wave of wavelength 2m travelling with a speed of 250 m/s.
 A. 500
 B. 0.008
 C. 250
 D. 0.016
 Ans. B
 197. Calculate the time period (in seconds) of a sound wave of wavelength 2m travelling with a speed of 250 m/s.
 A. instantaneous velocity
 B. liner velocity
 C. average speed
 D. acceleration
 Ans. C
 198. The average weather pattern taken over a long time, say 25 years, is called the _____ of the place.
 A. ecology
 B. environment
 C. climate
 D. habitat
 Ans. C
 199. Which of the statements given below are correct?
 A) Rajiv Ouseph won the Badminton 2017 BWF Super Series Finals Men's Singles.
 B) In 2017, Anthony Davis played for the NBA team New Orleans Pelicans.
 C) Lewis Hamilton won the Formula One 2017 Australian Grand Prix.
 A. Only A
 B. Only B
 C. Only C
 D. B and C
 Ans. B
 200. In Microsoft Word, _____ refers to the way our text will look like.
 A. inserting
 B. Formatting
 C. Cutting
 D. Pasting
 Ans. B