

Combined Higher Secondary Level Examination 2019

	Tier I
Roll Number	2201864604
Candidate Name	G
Venue Name	Logiconic Mind & Co
Exam Date	13/10/2020

Section : English Language (Basic Knowledge)

Q.1 Select the INCORRECTLY spelt word.

- Ans
- 1. Rogue
 - 2. Lacquer
 - 3. Placque
 - 4. Boutique

Question ID : 8161612657

Status : Answered

Chosen Option : 3

Q.2 Select the option that will improve the underlined part of the sentence. In case noimprovement is needed, select 'No improvement'.

As we've been neighbours, I have known Mrs. Shashi Singh since more than 16 years.

- Ans
- 1. by more than 16 years
 - 2. from more than 16 years
 - 3. No improvement
 - 4. for more than 16 years

Question ID : 8161612652

Status : Answered

Chosen Option : 4

Q.3 Identify the segment in the given sentence which contains the grammatical error.

If India will win this match they will win the series.

- Ans
- 1. If India will win
 - 2. this match
 - 3. they will win
 - 4. the series

Question ID : 8161612649

Status : Answered

Chosen Option : 1

Q.4 Select the word which means the same as the group of words given.

A collection of drawings, documents, etc. That represent a person's, especially an artist's, work

- Ans 1. Portfolio
 2. Profile
 3. Dossier
 4. Sketch

Question ID : 8161612659

Status : Answered

Chosen Option : 1

Comprehension:

In the following passage some words have been deleted. Fill in the blanks with the help of the alternatives given. Select the most appropriate option for each blank.

Hampi is a UNESCO World Heritage Site in India located near Hospet town in the Karnataka state, India. (1)_____the attractions of Hampi (2) _____beautiful temples, ruins of palaces (3)____of aquatic structures, ancient market streets, royal pavilions, bastions, royal platforms, treasury buildings...the list is practically (4)____. Most of the visitors to Hampi arrive at the well-connected Hospet Junction railway station, (5)_____about 13km from

Hampi. Roads to Hampi are in great shape. Driving all the way to Hampi from the neighbouring cities is not a bad idea either.

SubQuestion No : 5

Q.5 Select the most appropriate option to fill in blank number

1. Ans 1. Along
 2. Aside
 3. Away
 4. Among

Question ID : 8161612641

Status : Answered

Chosen Option : 4

Comprehension:

In the following passage some words have been deleted. Fill in the blanks with the help of the alternatives given. Select the most appropriate option for each blank.

Hampi is a UNESCO World Heritage Site in India located near Hospet town in the Karnataka state, India. (1)_____the attractions of Hampi (2)_____beautiful temples, ruins of palaces (3)_____of aquatic structures, ancient market streets, royal pavilions, bastions, royal platforms, treasury buildings...the list is practically (4)____. Most of the visitors to Hampi arrive at the well-connected Hospet Junction railway station, (5)_____about 13km from Hampi. Roads to Hampi are in great shape. Driving all the way to Hampi from the neighbouring cities is not a bad idea either.

SubQuestion No : 6

Q.6 Select the most appropriate option to fill in blank number

2. Ans 1. are

2. is

3. was

4. were

Question ID : 8161612642

Status : Answered

Chosen Option : 1

Comprehension:

In the following passage some words have been deleted. Fill in the blanks with the help of the alternatives given. Select the most appropriate option for each blank.

Hampi is a UNESCO World Heritage Site in India located near Hospet town in the Karnataka state, India. (1)_____the attractions of Hampi (2)_____beautiful temples, ruins of palaces (3)_____of aquatic structures, ancient market streets, royal pavilions, bastions, royal platforms, treasury buildings...the list is practically (4)____. Most of the visitors to Hampi arrive at the well-connected Hospet Junction railway station, (5)_____about 13km from Hampi. Roads to Hampi are in great shape. Driving all the way to Hampi from the neighbouring cities is not a bad idea either.

SubQuestion No : 7

Q.7 Select the most appropriate option to fill in blank number

3. Ans 1. returns

2. remains

3. refunds

4. revenues

Question ID : 8161612643

Status : Answered

Chosen Option : 2

Comprehension:

In the following passage some words have been deleted. Fill in the blanks with the help of the alternatives given. Select the most appropriate option for each blank.

Hampi is a UNESCO World Heritage Site in India located near Hospet town in the Karnataka state, India. (1)_____the attractions of Hampi (2) _____beautiful temples, ruins of palaces (3)____of aquatic structures, ancient market streets, royal pavilions, bastions, royal platforms, treasury buildings...the list is practically (4)____. Most of the visitors to Hampi arrive at the well-connected Hospet Junction railway station, (5)_____about 13km from Hampi. Roads to Hampi are in great shape. Driving all the way to Hampi from the neighbouring cities is not a bad idea either.

SubQuestion No : 8

Q.8 Select the most appropriate option to fill in blank number

4. Ans  1. endless

 2. finite

 3. finished

 4. written

Question ID : 8161612644

Status : Answered

Chosen Option : 1

Comprehension:

In the following passage some words have been deleted. Fill in the blanks with the help of the alternatives given. Select the most appropriate option for each blank.

Hampi is a UNESCO World Heritage Site in India located near Hospet town in the Karnataka state, India. (1)_____the attractions of Hampi (2) _____beautiful temples, ruins of palaces (3)____of aquatic structures, ancient market streets, royal pavilions, bastions, royal platforms, treasury buildings...the list is practically (4)____. Most of the visitors to Hampi arrive at the well-connected Hospet Junction railway station, (5)_____about 13km from Hampi. Roads to Hampi are in great shape. Driving all the way to Hampi from the neighbouring cities is not a bad idea either.

SubQuestion No : 9

Q.9 Select the most appropriate option to fill in blank number

5. Ans  1. located

 2. fitted

 3. placed

 4. settled

Question ID : 8161612645

Status : Answered

Chosen Option : 1

Q.10 Select the option that will improve the underlined part of the sentence. In case noimprovement is needed, select 'No improvement'.

Finally, Ananya found her pet kitten over the top branch of a tree in their garden.

- Ans 1. in a top branch of a tree
 2. across the top branch in the tree
 3. No improvement
 4. on the top branch of the tree

Question ID : 8161612651

Status : Answered

Chosen Option : 4

Q.11 Given below are four jumbled sentences. Select the option that gives their correct order.

A. "Today, respect is shown in different ways," she said, "students have a more questioningbent of mind."

B. Vidya Subramaniam occupies a small but privileged place in the dance world that hasseen the old guard giving place to the new.

C. Back in the day, respect meant not sitting on even the same level as one's gurus but that'sno longer true, especially for those who live in Western milieus.

D. For instance, she spoke of how the very idea of 'respect' has changed

- over time. Ans 1. BCAD
 2. BDCA
 3. DCAB
 4. DBAC

Question ID : 8161612650

Status : Answered

Chosen Option : 2

Q.12 Select the most appropriate ANTONYM of the given word.

ALTRUISTIC

- Ans 1. Outstanding
 2. Selfish
 3. Soft-spoken
 4. Serene

Question ID : 8161612637

Status : Answered

Chosen Option : 2

Q.13 Select the most appropriate synonym of the given word.

FOLIAGE

- Ans 1. Firmness
 2. Greenery
 3. Foolishness
 4. Urgency

Question ID : 8161612638

Status : Answered

Chosen Option : 3

Q.14 Given below are four jumbled sentences. Select the option that gives their correct order.

- A. He put it down to dry and went to count his coins.
B. When he came back, it seemed like the teapot had moved.
C. Akito walked into an old curiosity shop and bought a teapot and took it home.
D. Later that day, he cleaned the teapot till it shone like

- the sun. Ans 1. CDAB
 2. BCDA
 3. CABD
 4. ABDC

Question ID : 8161612636

Status : Answered

Chosen Option : 1

Q.15 Select the most appropriate option to fill in the blank in the given sentence.

Timers at traffic signals, that help motorists save fuel by switching off their engines while waiting, will soon be phased out due to technical ____.

- Ans 1. symbols
 2. glitches
 3. illuminations
 4. streamers

Question ID : 8161612661

Status : Answered

Chosen Option : 2

Q.16 Select the word which means the same as the group of words given.

A group of ships sailing

together Ans 1. Cruisers

2. Navy

3. Vessels

4. Fleet

Question ID : 8161612658

Status : Answered

Chosen Option : 4

Q.17 Select the most appropriate synonym of the given word.

CONSTRAINT

Ans 1. Control

2. Concern

3. Hazard

4. Burden

Question ID : 8161612660

Status : Answered

Chosen Option : 1

Q.18 Select the most appropriate option to fill in the blank in the given sentence.

A _____ of small stones is called a mosaic.

Ans 1. Design

2. Pattern

3. Mound

4. Structure

Question ID : 8161612639

Status : Answered

Chosen Option : 2

Q.19 Select the most appropriate ANTONYM of the given word.

DISCLOSE

Ans 1. Conceal

2. Disguise

3. Complete

4. Disrupt

Question ID : 8161612653

Status : Answered

Chosen Option : 1

Q.20 Select the option that is the direct form of the given sentence.

Brinda told her doctor that she was leaving for Boston the next day.

- Ans
- 1. Brinda told to her doctor, "I will be leaving for Boston the next day".
 - 2. Brinda told her doctor, "I was leaving for Boston tomorrow".
 - 3. Brinda said to her doctor, "I am leaving for Boston tomorrow."
 - 4. Brinda had told her doctor, "She was leaving for Boston the next day".

Question ID : 8161612647

Status : Answered

Chosen Option : 3

Q.21 Select the most appropriate meaning of the underlined idiom in the given sentence.

It took Rohan a long time to get the hang of the machine in the new factory.

- Ans
- 1. Clean and dry
 - 2. Put up safely
 - 3. Learn how to use
 - 4. Bring someone to run

Question ID : 8161612654

Status : Answered

Chosen Option : 3

Q.22 Select the correctly spelt

- word. Ans
- 1. Fassion
 - 2. Injecshun
 - 3. Intention
 - 4. Transishion

Question ID : 8161612656

Status : Answered

Chosen Option : 3

Q.23 Select the option that is the passive form of the given sentence.

She did not forget me even though I have been away for a year.

- Ans
- 1. I have not been forgotten even though I have been away for a year.
 - 2. Even though I have been away for a year she had not been forgotten.
 - 3. Even though I have been away for a year she did not forget me.
 - 4. Though I have been away for a year she has not forgot me.

Question ID : 8161612646

Status : Answered

Chosen Option : 2

Q.24 Select the most appropriate meaning of the given idiom.

Fit as a fiddle

- Ans
- 1. Of the right size
 - 2. Singing happily
 - 3. Playing a musical instrument
 - 4. Healthy and strong

Question ID : 8161612655

Status : Answered

Chosen Option : 4

Q.25 Identify the segment in the given sentence which contains the grammatical error.

I don't recognise none of the politicians who have been invited to be the speakers today.

- Ans
- 1. the politicians who have been
 - 2. invited to be
 - 3. the speakers today
 - 4. I don't recognise none of

Question ID : 8161612648

Status : Answered

Chosen Option : 4

Section : General

Q.1 Select the correct combination of mathematical signs to sequentially replace the * signs and to balance the following equation.

$$11 * 15 * 78 * 6 * 18 * 160$$

- Ans
- 1. +, ×, ÷, -, =
 - 2. ×, +, -, ÷, =
 - 3. ×, +, ÷, -, =
 - 4. +, ×, -, ÷, =

Question ID : 8161612663

Status : Answered

Chosen Option : 3

Q.2 Four letter-clusters have been given, out of which three are alike in some manner and one is different. Select the odd letter-cluster.

- Ans
- 1. NTZ
 - 2. LRX
 - 3. FLR
 - 4. BGQ

Question ID : 8161612677

Status : Answered

Chosen Option : 4

Q.3

Select the option that is related to the third number in the same way as the second number is related to the first number and the sixth number is related to the fifth number.

8 : 81 :: 11 : 144

- Ans 1. 196
2. 256
3. 169
4. 144

Question ID : 8161612664

Status : Answered

Chosen Option : 3

Q.4

Read the given statements & conclusions carefully. Assuming that the information given is true, even if it appears to be at a variance with commonly known facts, decide which of the given conclusion logically follows from the statement.

Statements”

All Boys are Robots

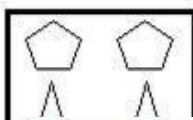
All Girls are Robots

Conclusion

I. Some Robots are boys

II. No robot is a girl

III. Some robots are girl



- Ans 1. Only conclusions I and III follow.
2. Only conclusion III follows.
3. All conclusions I, II and III follow.
4. Only conclusions I and II follow.

Question ID : 8161612679

Status : Answered

Chosen Option : 1

Q.6

Four number-pairs have been given, out of which three are alike in some manner and one is different. Select the number-pair that is different from the rest.

- Ans 1. 11 : 142
 2. 22 : 506
 3. 17 : 306
 4. 14 : 210

Question ID : 8161612668

Status : Answered

Chosen Option : 1

Q.7

Select the option in which the numbers are related in the same way as are the numbers in the given set.

(13, 17, 442)

- Ans 1. (11, 19, 628)
 2. (15, 14, 415)
 3. (18, 15, 540)
 4. (17, 21, 367)

Question ID : 8161612666

Status : Marked For Review

Chosen Option : 3

Q.8

In a certain code language, 'BEAUTY' is written as 'ZUVBFC'. How will 'MARTYR' be written as in that language?

- Ans 1. SZUSBN
 2. SYUSDM
 3. TXURBN
 4. SZUQDN

Question ID : 8161612670

Status : Answered

Chosen Option : 1

Q.9

letter-cluster.

KRZ : HOW :: CUX : ?

- Ans 1. YTU
 2. ZRU
 3. YSU
 4. ZTV

Question ID : 8161612672

Status : Answered

Chosen Option : 2

Q.10

Which option represents the correct order of the given words as they would appear in an English dictionary?

1. Dovetail
2. Domestic
3. Dominate
4. Donate
5. Dorsal

Ans 1.

2, 4, 3, 5, 1

2. 2, 3, 4, 5, 1

3. 2, 3, 4, 1, 5

4. 1, 3, 5, 4, 2

Question ID : 8161612669

Status : Answered

Chosen Option : 2

Select the letter that can replace the question mark (?) in the following series.

Q.11 K, B, N, D, Q, F, T, H, ?

Ans 1.

K

2. V

3. J

4. W

Question ID : 8161612674

Status : Answered

Chosen Option : 4

Q.12 'Nagaland' is related to 'Kohima' in the same way as 'Assam' is related to '_____'.
Ans 1. Dispur

2. Itanagar

3. Konkani

4. Assamese


Question ID : 8161612673


Status : Answered


Chosen Option : 2

Q.13 Select the option in which the words share the same relationship as that shared by the given pair of words.

Wheat : Cereal

Ans  1. Tea : Coffee

 2. City : Traffic

 3. Cinnamon : Spices

 4. Winner : Prize

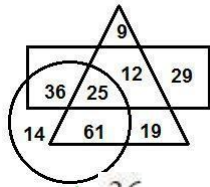
Question ID : 8161612676

Status : Answered

Chosen Option : 3

Q.14

In the given Venn Diagram, if the 'circle' represents 'senior lawyers', the 'triangle' represents 'fathers' and the 'rectangle' represents 'Indians', then how many Indian senior lawyers are there who are NOT fathers?



Ans 1. 36

2. 12

3. 25

4. 61

Question ID : 8161612686

Status : Answered

Chosen Option : 1

Q.15

Select the option in which the numbers are related in the same way as are the numbers in the given set.

(789, 501, 645)

Ans 1. (455, 573, 514)

2. (645, 705, 573)

3. (224, 640, 330)

4. (701, 538, 600)

Question ID : 8161612665

Status : Marked For Review

Four words have been given, out of which three are alike in some manner and one is different. Select the odd one.

Chosen Option : 1

Q.16

Ans 1. Spade

2. Spoon

3. Knife

4. Fork

Question ID : 8161612678

Status : Answered

Chosen Option : 1

Select the number that can replace the question mark (?) in the following series.

Q.17

65, 70, 80, 95, 115, ?, 170



Ans

1. 130

2. 140

3. 165

4.

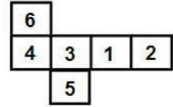
Question ID : 8161612667

A cube is made by folding the given sheet. In the cube so formed, which of the following pairs of numbers will be on opposite faces?

Status : Answered

Chosen Option : 3

Q.18



Ans

2 and 3

1. 1 and 5

1 and 6

2. 6 and 3

3.

4.

If 29 January 2003 is a Wednesday, then what day of the week will be 26 February 2005?

Status : Answered

Chosen Option : 2

Q.19



Ans

1. Sunday

2. Thursday

3. Friday

4. Saturday

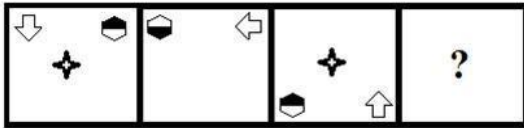
Question ID : 8161612662

Status : Not Answered

Chosen Option : --

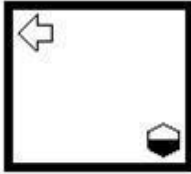
Q.23

Select the option figure that can replace the question mark (?) in the following figure series.




Ans

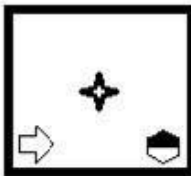
1.



2.



3.



4.

Question ID : 8161612681

Status : Answered

Chosen Option : 2

Q.24

$A + B$ means 'A is the mother of B';

$A - B$ means 'A is the sister of B';

$A \times B$ means 'A is the son of B';

$A \div B$ means 'A is the father of B'.

If, $K + U - T \times R \div M$, then how is K related to M?

Ans

1. Mother

2. Sister

3. Wife

4. Maternal grandmother

Question ID : 8161612675

Status : Answered

Chosen Option : 1

Q.25 In a certain code language, 'REQUIRE' is coded as '100'. How will 'ARRANGE' be coded as in that language?

Ans 1.

77

2. 68

3. 71

4. 88

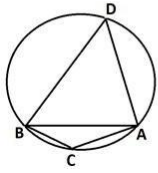
Question ID : 8161612671

Status : Answered

Chosen Option : 3

Section : Quantitative Aptitude(Basic Arithmetic Skill)

Q.1 If in the following figure (not to the scale), $\angle ACB = 135^\circ$ and the radius of the circle is $2\sqrt{2}$ cm, then the length of the chord AB is:



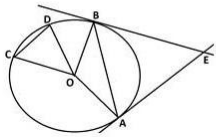
- Ans
- 1. 6 cm
 - 2. $4\sqrt{2}$ cm
 - 3. $3\sqrt{2}$ cm
 - 4. 4 cm

Question ID : 8161612697

Status : Answered

Chosen Option : 4

Q.2 In the following figure (not to scale), at the centre O, if the chord AB subtends double the angle that is subtended by chord CD and the angle $\angle AEB = 2\angle AOB$, then $\angle COD$ is equal to:



- Ans
- 1. 75°
 - 2. 60°
 - 3. 30°
 - 4. 45°

Question ID : 8161612696

Status : Marked For Review

Chosen Option : 2

Q.3

Ans If $\sec A = \frac{\sqrt{11}}{3}$, then the value of $\frac{\operatorname{Cosec}^2 A + \tan^2 A}{\sin^2 A + \cot^2 A}$ is:

1. $\frac{4}{9}$

2. $\frac{9}{4}$

3. $\frac{11}{9}$

4. $\frac{2}{11}$

Question ID : 8161612705

Status : Answered

Chosen Option : 3

Q.4

Ans If $A = \frac{(0.1)^3 + (0.2)^3 + (0.3)^3 + 3(0.005 + 0.016 + 0.027) + 0.036}{(0.1)^2 + (0.2)^2 + (0.3)^2 + 0.04 + 0.06 + 0.12}$, then the value of $60A$ is:

1. 36

2. 60

3. 20

4. 30

Question ID : 8161612701

Status : Not Answered

Chosen Option : --

Q.5

The ratio of man's age to his father's age is 4:5 and the ratio of his age to his son's age is 6:1. Four years ago these ratios were 11:14 and 11:1 respectively. The ratio of age of grandfather to that of grandson 12 years from now will be

Ans 1. 12 : 5

2. 18 : 7

3. 18 : 5

4. 14 : 3

Question ID : 8161612694

Status : Not Answered

Chosen Option : --


Q.6

A triangle has sides 25, 39, 34 units. If the area of a square exceeds the area of this triangle by 21 units, then the side of the square is:

Ans  1.

21 units

 2. 25 units

 3. 18 units

 4. 22 units

Question ID : 8161612698

Status : Answered

Chosen Option : 1

Q.7 If the number $59a44b$ is divisible by 36, then the maximum value of $a + b$ is:

Ans  1.

14

 2. 16

 3. 12

 4. 10

Question ID : 8161612703

Status : Marked For Review


Chosen Option : 1

Q.9

A sphere is placed in a cube so that it touches all the faces of the cube. If 'a' is the ratio of the volume of the cube to the volume of the sphere, and 'b' is the ratio of the surface area of the sphere to the surface area of the cube, then the value of ab is:

Ans

 1. $\frac{36}{\pi^2}$

 2. π^2

 3. 1

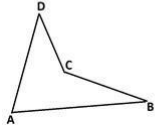
 4. 4

Question ID : 8161612689

Status : Marked For Review

Chosen Option : 3

Q.10 If in the following figure (not to scale), $\angle DAB + \angle CBA = 90^\circ$, $BC = AD$, $AB = 20$ cm, $CD = 10$ cm then the area of the quadrilateral ABCD is:



Ans 1.

150 cm²

2. 120 cm²

3. 100 cm²

4. 75 cm²

Question ID : 8161612699

Status : Not Answered

Chosen Option : --

Q.12

The numbers 24, 45, a, 35, 59, 83, 46, b, 29, 74 are serially numbered as they appear in the sequence. When each number is added to its serial number, then the average of the new numbers formed is 55. The average of the missing numbers (a and b) is:

- Ans
- 1. 50
 - 2. 62
 - 3. 38
 - 4. 58

Question ID : 8161612690

Status : Not Answered

Chosen Option : --

Q.13 If $a + b = 8$ and $a + a^2b + b + ab^2 = 128$ then the positive value of $a^3 + b^3$ is:

- Ans
- 1. 152
 - 2. 224
 - 3. 96
 - 4. 344

Question ID : 8161612700

Status : Answered

Chosen Option : 1

Q.14 The distance between H and O is D units. The average speed that gets a person from H to O in a stipulated time is S units. He takes 20 minutes more than usual if he travels at 60km/hr and reaches 44 minutes early if he travels at a speed of 75km/hr. The sum of numerical value of D & S is

- Ans
- 1. 358
 - 2. 384
 - 3. 376
 - 4. 344

Question ID : 8161612688

Status : Not Answered

Chosen Option : --

Q.15 If $\cos A, \sin A, \cot A$ are in geometric progression, then the value of $\tan^6 A - \tan^2 A$ is:

Ans  1. 3

 2. $\frac{1}{3}$

 3. $\frac{1}{2}$

 4. 1

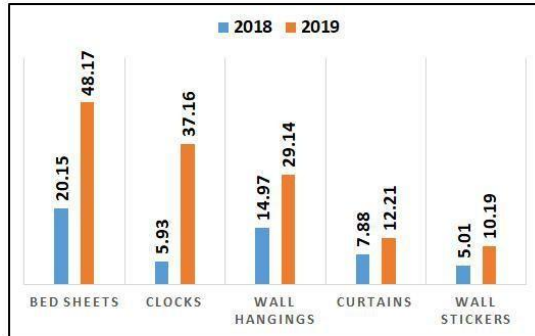
Question ID : 8161612706

Status : Not Answered

Chosen Option : --

Q.16

A home decor company produces five different products - Bed sheets, Clocks, Wall hangings, Curtains and Wall stickers. The sales of these five products (in lakh number of packs) during 2018 and 2019 are shown in the following bar-graph.



Based on the given information, sales have increased by nearly 55% from 2018 to 2019 in the case of:

- Ans
- 1. Wall stickers
 - 2. Bed sheets
 - 3. Curtains
 - 4. Wall hangings

Question ID : 8161612708

Status : Answered

Chosen Option : 4

Q.18 If each edge of a cube is increased by 10%, then the percentage increase in its surface area is:

- Ans
- 1. 20%
 - 2. 19%
 - 3. 21%
 - 4. 22%

Question ID : 8161612692

Status : Answered

Chosen Option : 3

Q.19 Evaluate $45 - 5$ of $(6.3 \div 9) + 7 \times 0.5$.

- Ans
- 1. 40
 - 2. 42
 - 3. 50
 - 4. 45

Question ID : 8161612704

Status : Answered

Chosen Option : 4

Q.20 A person makes his 40 items at 20% of the cost price. He sells 10 items at a 10% discount and 20 items at 15% discount on the marked price. What is the maximum discount he can offer on the remaining items if he still gets some profit?

- Ans
- 1. 21%
 - 2. 26%
 - 3. 28%
 - 4. 25%

Question ID : 8161612691

Status : Not Answered

Chosen Option : --

Q.21 If $x^2 + \frac{1}{x^4} = \frac{257}{16}$ then find $\frac{6}{13} \left(x^3 + \frac{1}{x^3} \right)$, where $x > 0$.

- Ans
- 1. 5
 - 2. 8
 - 3. 4
 - 4. 6

Question ID : 8161612702

Status : Answered

Chosen Option : 1

Q.22 A can finish a piece of work in a certain number of days. B takes 45% more number of days to finish the same work independently. They worked together for 58 days and then the remaining work was done by B alone in 29 days. In how many days could A have completed the work, had he worked alone?

- Ans
- 1. ₹1,130.70
 - 2. ₹1,333.30
 - 3. ₹1,444.40
 - 4. ₹1,888.80

Question ID : 8161612695

Status : Answered

Chosen Option : 1

Q.23 An oil merchant wants to make a minimum profit of ₹2,100 by selling 50 litres of oil he purchased at ₹236 per litre. For this, he adds a few litres of duplicate oil whose cost price is ₹180 per litre and sells at ₹250 per litre. How many litres of duplicate oil is needed for this purpose?

- Ans
- 1. 18 litres
 - 2. 22 litres
 - 3. 20 litres
 - 4. 16 litres

Question ID : 8161612693

Status : Not Answered

Chosen Option : --

Q.1 Which of the following companies was conferred with Maharatna status in October

2019? Ans 1. Hindustan Petroleum Corporation Limited

- 2. GAIL (India) Limited
- 3. Bharat Petroleum Corporation Limited
- 4. Steel Authority of India limited

Question ID : 8161612720

Status : Answered

Chosen Option : 1

Q.2 Which Chola ruler was popularly called 'Victor of the

Ganges'? Ans 1. Vijayalaya Chola

- 2. Gandaraditya Chola
- 3. Parantaka Chola I
- 4. Rajendra Chola I

Question ID : 8161612728

Status : Answered

Chosen Option : 2

Q.3 In which year did the JavaScript Programming language come into

existence? Ans 1. 1999

- 2. 2000
- 3. 1995
- 4. 1990

Question ID : 8161612713

Status : Not Answered

Chosen Option : --

Q.4 When was the first Constituent Assembly election held in

India? Ans 1. 1949

- 2. 1946
- 3. 1947
- 4. 1948

Question ID : 8161612732

Status : Answered

Chosen Option : 1

Q.5 Which Indian banknote released in November 2016 features Mangalyaan on the reverse side?

Ans 1. ₹500

- 2. ₹2,000
- 3. ₹200
- 4. ₹100

Question ID : 8161612719

Status : Answered

Chosen Option : 2

Q.6 India shares its land boundaries with which countries in the

east? Ans 1. China, Nepal and Bhutan

- 2. Bhutan and Afghanistan
- 3. Myanmar and Bangladesh
- 4. Pakistan and Afghanistan

Question ID : 8161612724

Status : Answered

Chosen Option : 1

Q.7 Which function key displays the Print Preview window in Microsoft

Office? Ans 1. Alt + Ctrl + F2

- 2. Alt + F2
- 3. Shift + F2
- 4. Ctrl + F2

Question ID : 8161612712

Status : Not Answered

Chosen Option : --

Q.8 How many agro-climatic zones (ACZ) are characterised by the Planning Commission of India?

- Ans 1. 20
 2. 10
 3. 15
 4. 30

Question ID : 8161612726
Status : Not Answered
Chosen Option : --

Q.9 Which famous personality said the following?

“Don't take rest after your first victory because if you fail in second, more lips are waiting to say that your first victory was just luck?”

- Ans 1. APJ Abdul Kalam
 2. Amartya Sen
 3. Homi Bhabha
 4. Atal Bihari Vajpayee

Question ID : 8161612731
Status : Answered
Chosen Option : 3

Q.10 The Maharaja Ranjit Singh Gold Cup is associated with_ _.

- Ans 1. Polo
 2. Hockey
 3. Cricket
 4. Football

Question ID : 8161612734
Status : Marked For Review
Chosen Option : 2

Q.11 In which state was the 8th edition of the India-China joint training exercise 'Hand-in-Hand 2019' held?

- Ans 1. Meghalaya
 2. Maharashtra
 3. Manipur
 4. Kerala

Question ID : 8161612716
Status : Answered
Chosen Option : 4

Q.12 Which former Indian cricketer was honored with the 'Bharat Gaurav Award' by the EastBengal Football Club in 2019?

- Ans 1. Sachin Tendulkar
 2. Kapil Dev
 3. Rahul Dravid
 4. Sunil Gavaskar

Question ID : 8161612735
Status : Not Answered
Chosen Option : --

Q.13 What is the mission life of the Cartosat-3 satellite launched by PSLV C-47 on 27 November 2019?

- Ans 1. 5 years
 2. 4 years
 3. 3 years
 4. 2 years

Question ID : 8161612718
Status : Not Answered
Chosen Option : --

Q.14 'Sattriya' is a traditional Hindu classical dance form of which state? Ans

1. Odisha
 2. Assam
 3. Manipur
 4. Goa

Question ID : 8161612714
Status : Marked For Review
Chosen Option : 2

Q.15 Which of the following is a famous fossil site in India where a full-fledged skeleton of a dinosaur was found?

- Ans 1. Hathnora, Madhya Pradesh
 2. Waddham, Maharashtra
 3. Manendragarh, Chhattisgarh
 4. Zaskar Valley, Kashmir

Question ID : 8161612727
Status : Not Answered
Chosen Option : --

Q.16 Which Indian writer was awarded the 'Rabindranath Tagore Literary Prize

2019'? Ans 1. Shashi Tharoor

2. Ramachandra Guha

3. Rana Dasgupta

4. Arundhati Roy

Question ID : 8161612730

Status : Answered

Chosen Option : 3

Q.17 Which governor general of India abolished Sati system in 1829 by declaring it an

offence? Ans 1. Lord Dalhousie

2. Lord Cornwallis

3. Lord Wellesley

4. Lord William Bentinck

Question ID : 8161612729

Status : Answered

Chosen Option : 4

Q.18 Which of the following is an example of the most explosive type of

volcano? Ans 1. Shield volcanoes

2. Flood basalt volcanoes

3. Calderas volcanoes

4. Cinder cones volcanoes

Question ID : 8161612725

Status : Not Answered

Chosen Option : --

Q.19 How many parathyroid glands are present on the back side of the thyroid gland in

humans? Ans 1. Six

2. Five

3. Three

4. Four

Question ID : 8161612722

Status : Not Answered

Chosen Option : --

Q.20 In 1930, which scientist was awarded the Nobel Prize for describing the human ABO bloodgroup system?

- Ans 1. Karl Landsteiner
 2. Albert Claude
 3. George Wald
 4. Roger Guillemin

Question ID : 8161612723
Status : Not Answered
Chosen Option : --

Q.21 As per 'India State of Forest Report 2019', which state secured first position for the highest growth in forest area in the country?

- Ans 1. Karnataka
 2. Andhra Pradesh
 3. Madhya Pradesh
 4. Odisha

Question ID : 8161612717
Status : Answered
Chosen Option : 3

Q.22 Who was conferred with the 'Female Sportsperson of the Year' award at the 'FICCI IndiaSports Awards 2019'?

- Ans 1. Mary Kom
 2. Rani Rampal
 3. PV Sindhu
 4. Geeta Phogat

Question ID : 8161612736
Status : Answered
Chosen Option : 3

Q.23 How many elements of India were listed in the UNESCO Representative List of the Intangible Cultural Heritage of Humanity as of March 2018?

- Ans 1. 18
 2. 14
 3. 13
 4. 15

Question ID : 8161612715
Status : Not Answered
Chosen Option : --

Q.24 Cinnabar (HgS) is an ore of which

metal? Ans 1. Aluminum

2. Mercury

3. Gold

4. Silver

Question ID : 8161612721

Status : Answered

Chosen Option : 2

Q.25 When was the Backward and Minority Communities Employees Federation (BAMCEF) established in India?

Ans 1.
1980

2. 1978

3. 1979

4. 1982

Question ID : 8161612733

Status : Not Answered

Chosen Option : --