

SSC MTS 2021

Previous Year Paper
(Held On 5 July 2022 Shift 2)

www.freshersnow.com

Multi Tasking Non Technical Staff Havaldar CBIC and CBN Examination 2021

Roll Number	
Candidate Name	
Venue Name	iON Digital Zone iDZ 2 Sector 62
Exam Date	05/07/2022
Exam Time	1:00 PM - 2:30 PM
Subject	MTS Non technical and Havaldar Examination 2021

Section : General English

Q.1 Select the most appropriate synonym of the given word.

Humble

- Ans
- 1. Bold
 - 2. Assertive
 - 3. Modest
 - 4. Inactive

Question ID : 26433050913
Status : Answered
Chosen Option : 3

Q.2 Parts of the given sentence have been given as options. One of them may contain an error. Select the part that contains the error from the given options. If you don't find any error, mark 'No error' as your answer.

Southern states has made an impressive comeback in the latest rankings.

- Ans
- 1. No error
 - 2. in the latest rankings
 - 3. an impressive comeback
 - 4. Southern states has made

Question ID : 26433050924
Status : Answered
Chosen Option : 4

Q.3 Select the option that corrects the misspelt words in the given sentence.

Evryone was talking and laufhing during the trip.

- Ans
- 1. Everyone was talking and lauhging during the trip.
 - 2. Everyone was talking and laughing during the trip.
 - 3. Everyone was talking and laffing during the trip.
 - 4. Evryone was talking and laughing during the trip.

Question ID : 26433050946
Status : Answered
Chosen Option : 2

Q.4 Select the most appropriate meaning of the underlined idiom in the given sentence.

The eldest sister received the lion's share of her father's property.

- Ans
- 1. the largest portion
 - 2. the entire amount
 - 3. the smallest part
 - 4. no portion at all

Question ID : 26433050621
Status : Answered
Chosen Option : 1

Q.5 The following sentence has been divided into parts. One of them may contain an error. Select the part that contains the error from the given options. If you don't find any error, mark 'No error' as your answer.

Marine vertebrates are / valuable for / many reasons.

- Ans
- 1. valuable for
 - 2. No error
 - 3. many reasons
 - 4. Marine vertebrates are

Question ID : 26433050897
Status : Answered
Chosen Option : 2

Q.6 Select the most appropriate option to fill in the blank.

Thank you so _____ for helping me with this project.

- Ans
- 1. too
 - 2. many
 - 3. most
 - 4. much

Question ID : 26433050874
Status : Answered
Chosen Option : 4

Q.7 Select the most appropriate option to fill in the blank.

My niece is very kind and _____ to everyone in the family.

- Ans
- 1. callous
 - 2. ruthless
 - 3. generous
 - 4. stern

Question ID : 26433050705
Status : Answered
Chosen Option : 3

Q.8 Select the most appropriate option to fill in the blank.

Hardly had I called him _____ my mother started screaming.

- Ans 1. when
 2. then
 3. so
 4. than

Question ID : 26433051057
Status : Answered
Chosen Option : 1

Q.9 Select the option that will improve the underlined part of the given sentence. In case no improvement is needed, select 'No improvement required'.

The eighteenth century saw the middle classes becoming most prosperous.

- Ans 1. been more than
 2. No improvement required
 3. become more
 4. became most

Question ID : 26433051498
Status : Answered
Chosen Option : 3

Q.10 Select the most appropriate synonym of the underlined word.

This medicine can make you feel lethargic and dizzy.

- Ans 1. Inactive
 2. Kinetic
 3. Vivacious
 4. Mysterious

Question ID : 26433050888
Status : Answered
Chosen Option : 1

Q.11 Select the option that can be used as a one-word substitute for the given group of words.

The science or art of political government

- Ans 1. Politics
 2. Sociology
 3. Economics
 4. Theology

Question ID : 26433051198
Status : Answered
Chosen Option : 1

Q.12 Select the correctly spelt word.

- Ans 1. Promenant
 2. Prominent
 3. Promneant
 4. Prominant

Question ID : 26433050919
Status : Answered
Chosen Option : 2

Q.13 Select the most appropriate meaning of the given idiom.

Through thick and thin

- Ans 1. In good and bad times
 2. With great pride
 3. To work hard to the point of exhaustion
 4. In every possible way

Question ID : 26433051359
Status : Answered
Chosen Option : 1

Q.14 Select the most appropriate ANTONYM of the given word.

Salient

- Ans 1. Chief
 2. Remarkable
 3. Insignificant
 4. Eminent

Question ID : 26433050911
Status : Answered
Chosen Option : 3

Q.15 Select the option that will improve the underlined part of the given sentence. In case no improvement is needed, select 'No improvement required'.

I don't know why he is such secretly.

- Ans 1. are so secretly
 2. No improvement required
 3. is many secretive
 4. is so secretive

Question ID : 26433050587
Status : Answered
Chosen Option : 4

Q.16 Select the most appropriate option to fill in the blank.

The _____ of the knife in his hand made her sick.

- Ans
- 1. site
 - 2. sight
 - 3. slight
 - 4. cite

Question ID : 26433050921
Status : Answered
Chosen Option : 2

Q.17 Select the most appropriate option to fill in the blank.

The _____ needs of the inhabitants seem to be fruit, iced drinks, shiny boots and lottery tickets.

- Ans
- 1. amiable
 - 2. principle
 - 3. invincible
 - 4. principal

Question ID : 26433051286
Status : Answered
Chosen Option : 2

Q.18 Select the most appropriate option to fill in the blank.

There are good points to each side and we need more _____ people that are willing to look at them from all angles.

- Ans
- 1. ubiquitous
 - 2. unbiased
 - 3. undermined
 - 4. unadorned

Question ID : 26433051597
Status : Answered
Chosen Option : 2

Q.19 Select the most appropriate option to fill in the blank.

About three years ago, an old man, _____ name was Paul, used to live in this house.

- Ans
- 1. whom
 - 2. who
 - 3. which
 - 4. whose

Question ID : 26433050606
Status : Answered
Chosen Option : 4

Q.20 Parts of the given sentence have been given as options. One of them may contain an error. Select the part that contains the error from the given options. If you don't find any error, mark 'No error' as your answer.

In many places, restoring mangrove forests can be an extreme effective strategy.

- Ans
- 1. forests can be an
 - 2. No error
 - 3. In many places, restoring mangrove
 - 4. extreme effective strategy

Question ID : 26433050769

Status : Answered

Chosen Option : 4

Comprehension:

In the following passage, some words have been deleted. Read the passage carefully and select the most appropriate option to fill in each blank.

Different foods in (1) _____ food group have different nutrients. Picking an assortment within every food group (2) _____ the week will help you get (3) _____ nutrients. For example, choose seafood (4) _____ of meat twice a week. The variety of foods will make (5) _____ meals more interesting, too.

SubQuestion No : 21

Q.21 Select the most appropriate option to fill in blank number 1.

- Ans
- 1. various
 - 2. everybody
 - 3. each
 - 4. other

Question ID : 26433050877

Status : Answered

Chosen Option : 3

Comprehension:

In the following passage, some words have been deleted. Read the passage carefully and select the most appropriate option to fill in each blank.

Different foods in (1) _____ food group have different nutrients. Picking an assortment within every food group (2) _____ the week will help you get (3) _____ nutrients. For example, choose seafood (4) _____ of meat twice a week. The variety of foods will make (5) _____ meals more interesting, too.

SubQuestion No : 22

Q.22 Select the most appropriate option to fill in blank number 2.

- Ans
- 1. complete
 - 2. between
 - 3. throughout
 - 4. every

Question ID : 26433050878

Status : Answered

Chosen Option : 3

Comprehension:

In the following passage, some words have been deleted. Read the passage carefully and select the most appropriate option to fill in each blank.

Different foods in (1) _____ food group have different nutrients. Picking an assortment within every food group (2) _____ the week will help you get (3) _____ nutrients. For example, choose seafood (4) _____ of meat twice a week. The variety of foods will make (5) _____ meals more interesting, too.

SubQuestion No : 23

Q.23 Select the most appropriate option to fill in blank number 3.

- Ans
- 1. too
 - 2. almost
 - 3. many
 - 4. very

Question ID : 26433050879
Status : Answered
Chosen Option : 3

Comprehension:

In the following passage, some words have been deleted. Read the passage carefully and select the most appropriate option to fill in each blank.

Different foods in (1) _____ food group have different nutrients. Picking an assortment within every food group (2) _____ the week will help you get (3) _____ nutrients. For example, choose seafood (4) _____ of meat twice a week. The variety of foods will make (5) _____ meals more interesting, too.

SubQuestion No : 24

Q.24 Select the most appropriate option to fill in blank number 4.

- Ans
- 1. replace
 - 2. instead
 - 3. despite
 - 4. away

Question ID : 26433050880
Status : Answered
Chosen Option : 2

Comprehension:

In the following passage, some words have been deleted. Read the passage carefully and select the most appropriate option to fill in each blank.

Different foods in (1) _____ food group have different nutrients. Picking an assortment within every food group (2) _____ the week will help you get (3) _____ nutrients. For example, choose seafood (4) _____ of meat twice a week. The variety of foods will make (5) _____ meals more interesting, too.

SubQuestion No : 25

Q.25 Select the most appropriate option to fill in blank number 5.

- Ans
- 1. your's
 - 2. yours
 - 3. you
 - 4. your

Question ID : 26433050881
Status : Answered
Chosen Option : 4

Section : General Intelligence and Reasoning

Q.1 Read the given statements and conclusions carefully. Assuming that the information given in the statements is true, even if it appears to be at variance with commonly known facts, decide which of the given conclusions logically follow(s) from the statements.

Statements:

Only a few Bs are Qs.
Only a few Qs are Vs.

Conclusions:

I. Some Bs are Vs.
II. All Qs can never be Vs.

- Ans
- 1. Neither conclusion I nor II follow.
 - 2. Only conclusion II follows.
 - 3. Both conclusions I and II follow.
 - 4. Only conclusion I follows.

Question ID : 26433048280
Status : Answered
Chosen Option : 2

Q.2 Select the option in which the numbers are related in the same way as are the numbers of the following sets.

NOTE: Operations should be performed on the whole numbers, without breaking down the numbers into its constituent digits. E.g. 13 – Operations on 13 such as adding/deleting/multiplying etc. to 13 can be performed. Breaking down 13 into 1 and 3 and then performing mathematical operations on 1 and 3 is not allowed)

(4, 16, 64)
(7, 49, 343)

- Ans 1. (9, 81, 729)
 2. (11, 121, 1231)
 3. (5, 25, 115)
 4. (8, 64, 412)

Question ID : 26433048259
Status : Answered
Chosen Option : 1

Q.3 In a class, 5 girls are sitting in a straight row, facing the North. A sits to the immediate left of C and to the immediate right of D. E sits to the immediate right of B but to the immediate left of D. Who is sitting in the middle position of the row?

- Ans 1. C
 2. D
 3. E
 4. A

Question ID : 26433048301
Status : Answered
Chosen Option : 2

Q.4 Select the option that can replace the question mark (?) in the following series.

QD, OB, MZ, KX, ?

- Ans 1. JV
 2. IW
 3. JW
 4. IV

Question ID : 26433048268
Status : Answered
Chosen Option : 4

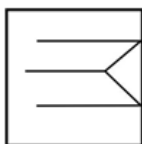
Q.5 Select the option that is related to the fifth letter-cluster in the same way as the second letter-cluster is related to the first letter-cluster and the fourth letter-cluster is related to the third letter-cluster.

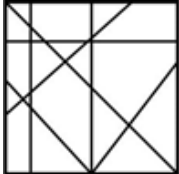
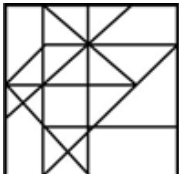
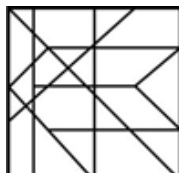
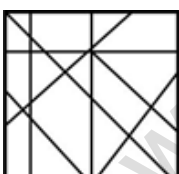
BEWMTT : ACTION :: KWQMTX : JUNIOR :: QTRJNZ : ?

- Ans
- 1. PROFTI
 - 2. PROFIT
 - 3. PROFIU
 - 4. PROEIT

Question ID : 26433048270
 Status : Answered
 Chosen Option : 2

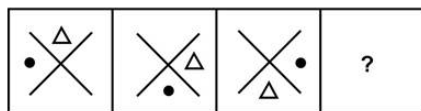
Q.6 Select the option in which the given figure is embedded (rotation is NOT allowed).



- Ans
- 1. 
 - 2. 
 - 3. 
 - 4. 

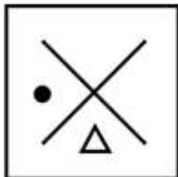
Question ID : 26433048264
 Status : Answered
 Chosen Option : 3

Q.7 Select the figure from among the given options that can replace the question mark (?) in the following series.

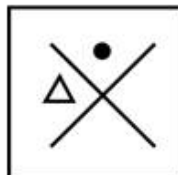


Ans

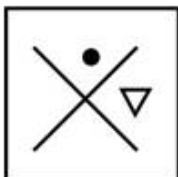
✗ 1.



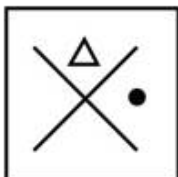
✓ 2.



✗ 3.



✗ 4.



Question ID : 26433048287

Status : Answered

Chosen Option : 2

Q.8 Select the option that is related to the fifth term in the same way as the second term is related to the first term and the fourth term is related to the third term.

P 16 : R 18 :: I 9 : K 11 :: T 20 : ?

Ans ✓ 1. V 22

✗ 2. A 1

✗ 3. U 22

✗ 4. V 21

Question ID : 26433048069

Status : Answered

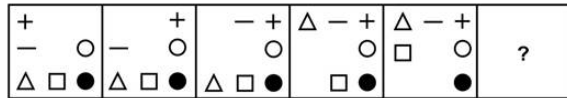
Chosen Option : 1

Q.9 In a certain code language, 'nu vu du' is written as 'water is life', 'hu du ru' is written as 'bring me water', and 'tu vu ru' is written as 'bring is well'. What is the code for the word 'well' in that language?

- Ans
- 1. ru
 - 2. vu
 - 3. tu
 - 4. nu

Question ID : 26433048073
 Status : Answered
 Chosen Option : 3

Q.10 Select the figure from among the given options that can replace the question mark (?) in the following series.



Ans

- 1.

-	△	+
□		○
●		
- 2.

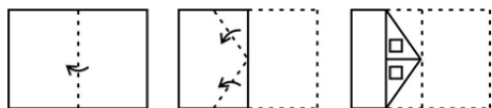
△	-	+
□		●
○		
- 3.

△	-	+
□		○
●		
- 4.

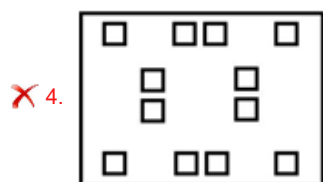
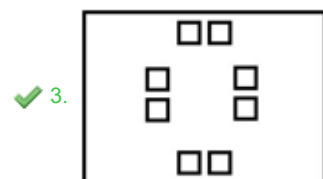
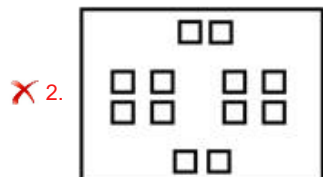
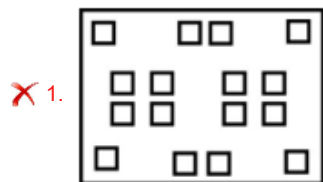
	□	△
		-
●	○	+

Question ID : 26433048313
 Status : Answered
 Chosen Option : 3

Q.11 The sequence of folding a piece of paper and the manner in which the folded paper has been cut is shown in the following figures. How would this paper look when unfolded?



Ans



Question ID : 26433048412
 Status : Answered
 Chosen Option : 3

Q.12 Select the option that is related to the third letter-cluster in the same way as the second letter-cluster is related to the first letter-cluster.

GRAM : EPYK :: HALT : ?

- Ans
- ✗ 1. FYKR
 - ✗ 2. FYJS
 - ✗ 3. FXJR
 - ✓ 4. FYJR

Question ID : 26433048700
 Status : Answered
 Chosen Option : 4

Q.13 In a certain code language, 'HINDER' is written as 'ABGWXK', and 'GOLBMA' is written as 'ZHEUFT'. How will 'AJKSTU' be written in that code language?

- Ans
- 1. TDCLNM
 - 2. TCDLMN
 - 3. TDCLMN
 - 4. TCDLNM

Question ID : 26433048723
 Status : Answered
 Chosen Option : 2

Q.14 Select the number from among the given options that can replace the question mark (?) in the following series.



72, 71, 75, 66, 82, 57, ?

- Ans
- 1. 79
 - 2. 91
 - 3. 93
 - 4. 86

Question ID : 26433048156
 Status : Answered
 Chosen Option : 3

Q.15 Select the figure from the given options that can replace the question mark (?) and complete the pattern (rotation is not allowed).



- Ans
- 1. 
 - 2. 
 - 3. 
 - 4. 

Question ID : 26433048863
 Status : Answered
 Chosen Option : 3

Q.16 Select the option that will replace the question mark (?) in the given series.

68, 79, 88, 95, 100, ?

Ans 1. 103

2. 101

3. 105

4. 107

Question ID : 26433048307

Status : Answered

Chosen Option : 1

Q.17 What will come in the place of '?' in the following equation, if '+' and '-' are interchanged and also 'x' and '÷' are interchanged?

$4 \div 6 - 9 + 48 \times 8 = ?$

Ans 1. 38

2. 27

3. 42

4. 24

Question ID : 26433048160

Status : Answered

Chosen Option : 2

Q.18 Select the option that is related to the fifth number in the same way as the second number is related to the first number and the fourth number is related to the third number.

7 : 345 :: 5 : 127 :: 6 : ?

Ans 1. 228

2. 208

3. 238

4. 218

Question ID : 26433048283

Status : Answered

Chosen Option : 4

Q.19 The age of five sisters Sita, Gita, Babita, Lalita and Anita are compared. Gita is elder than Babita but younger than Sita. Lalita is the eldest. Babita is not the youngest. Who is the second eldest sister?

Ans 1. Babita

2. Anita

3. Sita

4. Geeta

Question ID : 26433048153

Status : Answered

Chosen Option : 3

Q.20 Read the given statements and conclusions carefully. Assuming that the information given in the statements is true, even if it appears to be at variance with commonly known facts, decide which of the given conclusions logically follow(s) from the statements.

Statements:

All cars are trucks.
Some bikes are cars.

Conclusions:

I. All bikes are trucks.
II. Some trucks are bikes.

- Ans** 1. Neither conclusion I nor II follows
 2. Only conclusion II follows
 3. Both conclusions I and II follow
 4. Only conclusion I follows

Question ID : 26433048254

Status : Answered

Chosen Option : 2

Q.21 In a certain code language, 'POND' is coded as '48', and 'HELO' is coded as '39'. How will 'PINK' be coded in that language?

- Ans** 1. 48
 2. 52
 3. 49
 4. 51

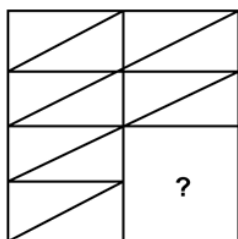
Question ID : 26433048696

Status : Answered

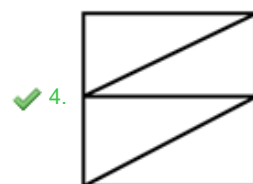
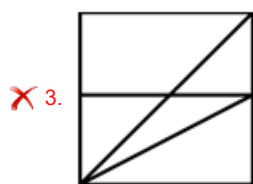
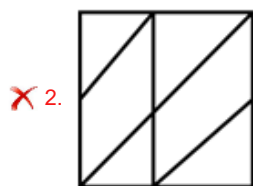
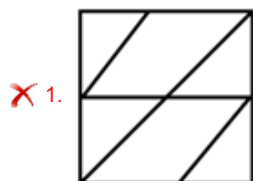
Chosen Option : 3

www.freshersnow.com

Q.22 Select the figure from the options that can replace the question mark (?) and complete the pattern.



Ans



Question ID : 26433048017

Status : Answered

Chosen Option : 4

Q.23 Five students I, J, K, L and M are sitting on a bench in a straight row, facing North. M and J are immediate neighbours. M and K are also immediate neighbours, I is on the extreme left of the bench. J is sitting second from the extreme right. Who is sitting between I and J?

- Ans
- ✗ 1. L
 - ✗ 2. K and L
 - ✗ 3. L and M
 - ✓ 4. K and M

Question ID : 26433048152

Status : Answered

Chosen Option : 4

Q.24 In a certain code language, '476' is written as 'wrong and sharp', '428' is written as 'knife is sharp', and '859' is written as 'right is good'. What is the code for the word 'knife' in that language?

- Ans
- 1. 4
 - 2. 2
 - 3. 5
 - 4. 8

Question ID : 26433048072
Status : Answered
Chosen Option : 2

Q.25 Which of the mathematical signs should be interchanged in the given equation to make it mathematically correct?

$$102 - 17 + 12 \times 4 \div 27 + 5 = 32$$

- Ans
- 1. - and ÷
 - 2. - and ×
 - 3. × and +
 - 4. - and +

Question ID : 26433048286
Status : Answered
Chosen Option : 1

Section : Numerical Aptitude

Q.1 Rahul bought 120 tables for ₹56,500. If the average price of 70 of those tables is ₹450, then what is the average price of the remaining 50 tables?

- Ans
- 1. ₹500
 - 2. ₹460
 - 3. ₹550
 - 4. ₹480

Question ID : 26433049629
Status : Answered
Chosen Option : 1

Q.2 Param can do a piece of work alone in 24 hours, and Charan can do the same work alone in 30 hours. If they work together, what fraction of the work can they complete in 1 day?

- Ans**
- 1. $\frac{3}{10}$
 - 2. $\frac{3}{8}$
 - 3. $\frac{3}{40}$
 - 4. $\frac{3}{55}$

Question ID : 26433049411
Status : Answered
Chosen Option : 3

Q.3 The area of the base of a closed cylinder is 1386 cm^2 . If the height of the cylinder is 20 cm, then what is the total surface area of the cylinder? [Use $\pi = \frac{22}{7}$]

- Ans**
- 1. 7032 cm^2
 - 2. 5412 cm^2
 - 3. 6112 cm^2
 - 4. 8132 cm^2

Question ID : 26433049986
Status : Answered
Chosen Option : 2

Q.4 In how much time can a person cover a distance of 300 metres at a speed of 27 km/h?

- Ans**
- 1. 30 seconds
 - 2. 25 seconds
 - 3. 35 seconds
 - 4. 40 seconds

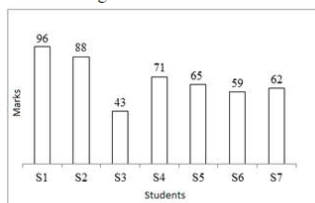
Question ID : 26433049645
Status : Answered
Chosen Option : 4

Q.5 A sofa costs ₹24,000 before tax. What is the percentage of sales tax charged, if the sales tax on it is ₹1,200?

- Ans**
- 1. 5%
 - 2. 4%
 - 3. 6%
 - 4. 8%

Question ID : 26433049350
Status : Answered
Chosen Option : 1

Q.6 The following bar chart shows the marks obtained (out of 100) by a student in 7 different subjects in an examination.



The total marks obtained by the student in S1 and S6 taken together is approximately what percentage of the marks obtained by the student in S4?

- Ans**
- 1. 225.11%
 - 2. 236.32%
 - 3. 218.31%
 - 4. 206.11%

Question ID : 26433049666
 Status : Answered
 Chosen Option : 3

Q.7 The cost price of a table to Ravi, was ₹1,600. Ravi sold this table at a loss of 10%. What was the price at which Ravi sold the table?

- Ans**
- 1. ₹1,380
 - 2. ₹1,520
 - 3. ₹1,510
 - 4. ₹1,440

Question ID : 26433049597
 Status : Answered
 Chosen Option : 4

Q.8 If the three sides of a triangle are 21 cm, 20 cm and 29 cm long, what is the area of the triangle?

- Ans**
- 1. 290 cm²
 - 2. 200 cm²
 - 3. 190 cm²
 - 4. 210 cm²

Question ID : 26433049442
 Status : Answered
 Chosen Option : 4

Q.9 If $\frac{P}{3} = \frac{Q}{5} = \frac{R}{2}$, then what is the value of $(P + 2Q + 3R) : (P + Q + R)$?

- Ans 1. 19 : 10
 2. 6 : 5
 3. 11 : 13
 4. 10 : 9

Question ID : 26433049655
 Status : Answered
 Chosen Option : 1

Q.10 If, on a certain sum, the simple interest for 2 years is ₹1,200, then what is the simple interest on the same sum for 5 years, if the rate of interest remains unchanged?

- Ans 1. ₹3,000
 2. ₹2,800
 3. ₹3,500
 4. ₹2,500

Question ID : 26433049632
 Status : Answered
 Chosen Option : 1

Q.11 The following table shows the number of students from different schools, choosing their favourite game.

GAME \ SCHOOL	AMERICAN FOOTBALL	SOCCER	TENNIS	CRICKET
A	57	56	64	72
B	29	53	53	37
C	46	73	38	46
D	59	47	56	47

Which school has the maximum number of students choosing American Football as their favourite game?

- Ans 1. C
 2. A
 3. B
 4. D

Question ID : 26433049512
 Status : Answered
 Chosen Option : 4

Q.12 Tap A can fill an empty tank alone in 6 hours. Tap B alone can empty the same tank, when filled, in 8 hours. If they are opened in alternate hours starting with A, then in how much time will the tank be full for the first time?

- Ans**
- 1. 44 hours
 - 2. 47 hours
 - 3. 48 hours
 - 4. 41 hours

Question ID : 26433050043
Status : Answered
Chosen Option : 4

Q.13 The salaries of two friends are in the ratio of 3 : 4. If the difference in their salaries is ₹3,000, then find the sum of their salaries.

- Ans**
- 1. ₹19,000
 - 2. ₹18,000
 - 3. ₹21,000
 - 4. ₹24,000

Question ID : 26433049504
Status : Answered
Chosen Option : 3

Q.14 The length of a rectangle is 5 times of its breadth. If the breadth is 10 cm, then what is the area of this rectangle?

- Ans**
- 1. 600 cm²
 - 2. 250 cm²
 - 3. 500 cm²
 - 4. 1000 cm²

Question ID : 26433049634
Status : Answered
Chosen Option : 3

Q.15 If $P = \frac{6 \times 4 \div 2}{8 \times 3 \div 6}$ and $Q = \frac{12 \div 4 - 2}{4 \div 3 \times 12}$, then what is the value of $\left(\frac{P}{Q}\right)^2$?

- Ans**
- 1. 4064
 - 2. 2304
 - 3. 1024
 - 4. 4096

Question ID : 26433049664
Status : Answered
Chosen Option : 2

Q.16 Two trains are moving towards each other at the speeds of 70 km/h and 85 km/h. Their lengths are 210 m and 255 m, respectively. How much time will they take to cross each other completely?

- Ans**
- 1. 10.8 seconds
 - 2. 18.2 seconds
 - 3. 14.0 seconds
 - 4. 18.0 seconds

Question ID : 26433049509
Status : Answered
Chosen Option : 1

Q.17 What is the value of $\frac{3}{7}$ of $\frac{5}{11} + \frac{8}{7} \div \frac{24}{21} - \frac{11}{56} \times \frac{18}{33}$?

- Ans**
- 1. $\frac{335}{308}$
 - 2. $\frac{308}{325}$
 - 3. $\frac{175}{316}$
 - 4. $\frac{118}{311}$

Question ID : 26433049638
Status : Answered
Chosen Option : 1

Q.18 A bag is sold at a discount of 12.5%. The marked price of the bag is ₹6,400 and the profit earned is 25%. What is the cost price of the bag?

- Ans**
- 1. ₹4,260
 - 2. ₹4,480
 - 3. ₹4,640
 - 4. ₹4,120

Question ID : 26433049624
Status : Answered
Chosen Option : 2

Q.19 For a sum of ₹5,000, what is the difference between the compound interest and simple interest for 2 years if the rate of interest is 5% per annum, and in the case of compound interest, the interest is compounded annually?

- Ans
- 1. ₹7.5
 - 2. ₹10.5
 - 3. ₹25
 - 4. ₹12.5

Question ID : 26433049608
Status : Answered
Chosen Option : 4

Q.20 How many numbers are there between 200 and 400 that are divisible by both 6 and 5?

- Ans
- 1. 9
 - 2. 6
 - 3. 7
 - 4. 8

Question ID : 26433049612
Status : Answered
Chosen Option : 3

Q.21 The selling price of an article is three times of the loss incurred on selling this article. What is the loss percentage?

- Ans
- 1. 50%
 - 2. 33.33%
 - 3. 40%
 - 4. 25%

Question ID : 26433049623
Status : Answered
Chosen Option : 4

Q.22 What is the average of 512, 620, 428, and 580?

- Ans
- 1. 560
 - 2. 480
 - 3. 495
 - 4. 535

Question ID : 26433049422
Status : Answered
Chosen Option : 4

Q.23 If 35% of $x = 42.5\%$ of 700, then what is the value of x ?

- Ans
- 1. 950
 - 2. 800
 - 3. 850
 - 4. 900

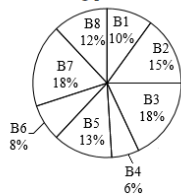
Question ID : 26433050050
 Status : Answered
 Chosen Option : 3

Q.24 The average of X and Y is $10X$. What is the value of Y ?

- Ans
- 1. $16X$
 - 2. $9X$
 - 3. $18X$
 - 4. $19X$

Question ID : 26433049978
 Status : Answered
 Chosen Option : 4

Q.25 The following pie chart shows percentage figures of the number of cars sold of 8 different brands in a particular year.



If the total number of cars sold of these 8 brands taken together during the given year is 2800, then what is the difference between the numbers of cars sold of B2 and of B6?

- Ans
- 1. 196
 - 2. 140
 - 3. 252
 - 4. 224

Question ID : 26433049642
 Status : Answered
 Chosen Option : 1

Q.1 Which of the following is the standard means by which elections are conducted in India?

- Ans
- 1. Blockchain
 - 2. Email
 - 3. Ballot paper
 - 4. Electronic Voting Machine

Question ID : 26433047039
Status : Answered
Chosen Option : 4

Q.2 As per Census 2011, which of the following is India's most populated metropolitan city?

- Ans
- 1. Kolkata
 - 2. Mumbai
 - 3. Delhi
 - 4. Chennai

Question ID : 26433046830
Status : Answered
Chosen Option : 2

Q.3 Which of the following festivals is associated with Rajasthan?

- Ans
- 1. Gudi Padwa
 - 2. Bundi Utsav
 - 3. Bonalu
 - 4. Matho Narang

Question ID : 26433046896
Status : Marked For Review
Chosen Option : 2

Q.4 Who among the following Indian musicians received the 'Best Original Song' award for his composition in 'Slumdog Millionaire', at Oscars 2009?

- Ans
- 1. AR Rahman
 - 2. Asha Bhosle
 - 3. Lata Mangeshkar
 - 4. Gulzar

Question ID : 26433047036
Status : Answered
Chosen Option : 1

Q.5 _____ is the international air carrier of India and handles foreign traffic, which includes both cargo and passenger services.

- Ans
- 1. Air India
 - 2. Pawan Hans
 - 3. Dove Airlines
 - 4. Taj Air

Question ID : 26433047002
Status : **Marked For Review**
Chosen Option : 1

Q.6 As per the new tax regime of India, what is the exemption limit of income tax for financial year 2022-23?

- Ans
- 1. Up to ₹5,00,000
 - 2. Up to ₹1,00,000
 - 3. Up to ₹7,50,000
 - 4. Up to ₹2,50,000

Question ID : 26433047042
Status : **Marked For Review**
Chosen Option : 4

Q.7 Who among the following became the first woman Vice Chancellor of Jawaharlal Nehru University (JNU), India in February 2022?

- Ans
- 1. Madhuri Dixit
 - 2. Supriya Sule
 - 3. Smriti Irani
 - 4. Santishree Dhulipudi Pandit

Question ID : 26433047019
Status : **Marked For Review**
Chosen Option : 2

Q.8 Namita talks about an example of metamorphic rock. Which of the following can it be?

- Ans
- 1. Halite
 - 2. Marble
 - 3. Limestone
 - 4. Shale

Question ID : 26433047001
Status : **Answered**
Chosen Option : 2

Q.9 Who among the following was NOT a ruler of the Tughlaq dynasty?

- Ans 1. Muhammad-Bin-Tughlaq
 2. Rukunuddin Tughlaq
 3. Ghiyasuddin Tughlaq
 4. Firuz Shah Tughlaq

Question ID : 26433047007
Status : Answered
Chosen Option : 2

Q.10 What is the chemical name of the ionic compound NaCl?

- Ans 1. Lithium chloride
 2. Cesium fluoride
 3. Calcium iodide
 4. Sodium chloride

Question ID : 26433046898
Status : Answered
Chosen Option : 4

Q.11 _____ indicates the realm of living organisms and their interactions with the environment.

- Ans 1. Atmosphere
 2. Biosphere
 3. Hydrosphere
 4. Lithosphere

Question ID : 26433047025
Status : Answered
Chosen Option : 2

Q.12 What was the pedestrian path for devotees to wave in homage to Stupa called in Buddhist architecture?

- Ans 1. Medhi
 2. Torana
 3. Anda
 4. Chattra

Question ID : 26433046997
Status : Marked For Review
Chosen Option : 2

Q.13 Which of the following Acts of 1947 regulates the Indian labour law with regard to trade unions as well as individual workmen?

- Ans
- 1. Indian Councils Act
 - 2. Charter Act
 - 3. Rowlatt Act
 - 4. Industrial Disputes Act

Question ID : 26433047033
Status : Answered
Chosen Option : 4

Q.14 Which team won the UEFA European Football Championship 2020?

- Ans
- 1. England
 - 2. Spain
 - 3. Germany
 - 4. Italy

Question ID : 26433047465
Status : Answered
Chosen Option : 4

Q.15 Savi is suffering from Kwashiorkor. Which of the following deficiencies causes it?

- Ans
- 1. Deficiency of iron
 - 2. Deficiency of protein
 - 3. Deficiency of calcium
 - 4. Deficiency of vitamin A

Question ID : 26433047049
Status : Answered
Chosen Option : 2

Q.16 Who among the following Mauryan rulers fought the Kalinga War in 261 BC?

- Ans
- 1. Ashoka
 - 2. Bindusara
 - 3. Brihadratha
 - 4. Chandragupta Maurya

Question ID : 26433047031
Status : Answered
Chosen Option : 1

Q.17 The Ministry of Labour & Employment launched _____ under the Pradhan Mantri Shram Yogi Maan-Dhan (PM-SYM) scheme in March 2022.

- Ans
- 1. Stand-Up India scheme
 - 2. Donate-a-Pension initiative
 - 3. Atal Pension Yojana
 - 4. India Water Pitch-Pilot-Scale Start-up Challenge

Question ID : 26433046993
Status : Answered
Chosen Option : 2

Q.18 Who among the following was awarded the Padma Shri in 2021 for keeping the adivasi dance form 'Gussadi' alive?

- Ans
- 1. Ramsahay Pandey
 - 2. Pandit Birju Maharaj
 - 3. Kanaka Raju
 - 4. Srimanta Sankardev

Question ID : 26433047037
Status : Marked For Review
Chosen Option : 3

Q.19 India is bordered by Myanmar in the _____.

- Ans
- 1. east
 - 2. north
 - 3. south
 - 4. west

Question ID : 26433047380
Status : Answered
Chosen Option : 1

Q.20 The FIDE 44th Chess Olympiad 2022 will be held in _____, India, during the summer of 2022.

- Ans
- 1. Chennai
 - 2. Mumbai
 - 3. Kolkata
 - 4. Gurgaon

Question ID : 26433046766
Status : Marked For Review
Chosen Option : 4

Q.21 Who among the following Indian authors wrote the famous novel 'Gora' during the Nationalist Movement of India?

- Ans
- 1. Jawaharlal Nehru
 - 2. Rabindranath Tagore
 - 3. Bhagat Singh
 - 4. Mahatma Gandhi

Question ID : 26433047035
Status : Answered
Chosen Option : 2

Q.22 In a drama, Naresh spoke, "Swaraj is my birth right and I shall have it." Who among the following Indian freedom fighters said this slogan?

- Ans
- 1. Ambika Charan Majumdar
 - 2. Lokmanya Bal Gangadhar Tilak
 - 3. Mahatma Gandhi
 - 4. Bhagat Singh

Question ID : 26433047059
Status : Answered
Chosen Option : 2

Q.23 Which Article of the Constitution of India provides equal protection of the laws and equality before the law?

- Ans
- 1. Article 30
 - 2. Article 42
 - 3. Article 60
 - 4. Article 14

Question ID : 26433047013
Status : Answered
Chosen Option : 4

Q.24 Which of the following is NOT a regional name for the full or part of the East Coast of India?

- Ans
- 1. Coromandel coast
 - 2. Tamil Nadu coast
 - 3. Malabar coast
 - 4. Utkal coast

Question ID : 26433047028
Status : Answered
Chosen Option : 3

Q.25 Rita performs 'Giddha' dance form. Which state does this dance form belong to?

- Ans 1. Punjab
 2. Rajasthan
 3. Haryana
 4. Uttarakhand

Question ID : 26433047045
Status : Answered
Chosen Option : 1