

Multi Tasking (Non-Technical) Staff Examination 2019



Roll No.	
Registration No.	
Name	
Test Venue	iON Digital Zone iDZ Qualapatty
Test Time	4:00 PM - 5:30 PM
Test Date	02/08/2019

Section : General English

Comprehension:

In the following passage some words have been deleted. Fill in the blanks with the help of the alternatives given. Select the most appropriate option for each blank.

Deforestation 1._____ the permanent destruction of forests in order to 2._____ the land available for other uses. It 3._____ around the world, though tropical rainforests are particularly 4.____. If current deforestation levels 5._____, the world's rainforests may completely vanish in as little as 100 years, according to National Geographic.

SubQuestion No : 1

Q.1 Select the most appropriate option for blank No. 1.

- Ans
- 1. have
 - 2. are
 - 3. is
 - 4. has

Question ID : 23908762

Status : Answered

Chosen Option : 3

Comprehension:

In the following passage some words have been deleted. Fill in the blanks with the help of the alternatives given. Select the most appropriate option for each blank.

Deforestation 1._____ the permanent destruction of forests in order to 2._____ the land available for other uses. It 3._____ around the world, though tropical rainforests are particularly 4.____. If current deforestation levels 5._____, the world's rainforests may completely vanish in as little as 100 years, according to National Geographic.

SubQuestion No : 2

Q.2 Select the most appropriate option for blank No. 2.

- Ans
- 1. makes
 - 2. make
 - 3. made
 - 4. making

Question ID : 23908763

Status : Answered

Chosen Option : 2

Comprehension:

In the following passage some words have been deleted. Fill in the blanks with the help of the alternatives given. Select the most appropriate option for each blank.

Deforestation 1._____ the permanent destruction of forests in order to 2._____ the land available for other uses. It 3._____ around the world, though tropical rainforests are particularly 4.____. If current deforestation levels 5._____, the world's rainforests may completely vanish in as little as 100 years, according to National Geographic.

SubQuestion No : 3

Q.3 Select the most appropriate option for blank No. 3.

- Ans
- 1. occurs
 - 2. occurred

3. occurring

4. occur



Question ID : 23908764
Status : Answered
Chosen Option : 1

Comprehension:

In the following passage some words have been deleted. Fill in the blanks with the help of the alternatives given. Select the most appropriate option for each blank.

Deforestation 1._____ the permanent destruction of forests in order to 2._____ the land available for other uses. It 3._____ around the world, though tropical rainforests are particularly 4._____. If current deforestation levels 5._____, the world's rainforests may completely vanish in as little as 100 years, according to National Geographic.

SubQuestion No : 4

Q.4 Select the most appropriate option for blank No. 4.

Ans 1. targeted

2. robbed

3. looted

4. aimed

Question ID : 23908765
Status : Answered
Chosen Option : 1

Comprehension:

In the following passage some words have been deleted. Fill in the blanks with the help of the alternatives given. Select the most appropriate option for each blank.

Deforestation 1._____ the permanent destruction of forests in order to 2._____ the land available for other uses. It 3._____ around the world, though tropical rainforests are particularly 4._____. If current deforestation levels 5._____, the world's rainforests may completely vanish in as little as 100 years, according to National Geographic.

SubQuestion No : 5

Q.5 Select the most appropriate option for blank No. 5.

Ans 1. maintain

2. continue

3. follow

4. proceed

Question ID : 23908766
Status : Answered
Chosen Option : 2

Q.6 Select the most appropriate synonym of the given word.

Demolish

Ans 1. Repair

2. Taunt

3. Reveal

4. Dismantle

Question ID : 23908768
Status : Answered
Chosen Option : 4

Q.7 Select the most appropriate word for the given group of words.

Something no longer in use

Ans 1. Obdurate

- 2. Odious
- 3. Obsolete
- 4. Ominous

Question ID : 23908773
Status : Answered
Chosen Option : 3

Q.8 Find the part of the given sentence that has an error in it. If there is no error, choose 'No error'.

My visiting to my family are few and far between. /No error

- Ans
- 1. No error
 - 2. few and far between
 - 3. My visiting to
 - 4. my family are

Question ID : 23908754
Status : Answered
Chosen Option : 3

Q.9 Select the most appropriate option to fill in the blank.

It is quite tough to _____ which candidate will win the presidential elections.

- Ans
- 1. pretend
 - 2. elect
 - 3. predict
 - 4. argue

Question ID : 23908777
Status : Answered
Chosen Option : 3

Q.10 Select the most appropriate antonym of the given word.
Fluctuate

- Ans
- 1. Stabilize
 - 2. Mobilize
 - 3. Waver
 - 4. Stumble

Question ID : 23908769
Status : Answered
Chosen Option : 1

Q.11 In the following question, out of the given four alternatives, select the alternative which best expresses the meaning of the Idiom/Phrase.

Fit as a fiddle

- Ans
- 1. To play a melodious tune
 - 2. In a perfectly healthy condition
 - 3. A severe and conclusive test
 - 4. To be a perfect match

Question ID : 23908771
Status : Answered
Chosen Option : 4

Q.12 In the following question, out of the given four alternatives, select the alternative which best expresses the meaning of the Idiom/Phrase.

Nail-biting

- Ans 1. Suspenseful
 2. Plentiful
 3. Peaceful
 4. Joyful

Question ID : 23908772
Status : Answered
Chosen Option : 1

Q.13 Select the most appropriate option to substitute the underlined segment in the given sentence. If there is no need to substitute it, select No Improvement.
The government seems to have no interest for the welfare of the common man.

- Ans 1. any interest in
 2. no interest to
 3. No Improvement
 4. no interest in

Question ID : 23908757
Status : Answered
Chosen Option : 3

Q.14 Choose the correctly spelt word.

- Ans 1. Dominent
 2. Diseese
 3. Deminish
 4. Dependent

Question ID : 23908775
Status : Answered
Chosen Option : 4

Q.15 Select the most appropriate option to fill in the blank.
Though I am tall, I feel inferior _____ others.

- Ans 1. to
 2. than
 3. upon
 4. from

Question ID : 23908760
Status : Answered
Chosen Option : 1

Q.16 Select the most appropriate antonym of the given word.
Disperse

- Ans 1. Gather
 2. Neglect
 3. Send
 4. Hold

Question ID : 23908770
Status : Answered
Chosen Option : 1

Q.17 Find the part of the given sentence that has an error in it. If there is no error, choose 'No error'.

She wanted telling you who you could approach for your problem. /No error

- Ans
- 1. No error
 - 2. who you could approach
 - 3. for your problem
 - 4. She wanted telling you

Question ID : 23908753
Status : Answered
Chosen Option : 4

Q.18 Select the most appropriate option to substitute the underlined segment in the given sentence. If there is no need to substitute it, select No Improvement.

I don't think many people will be able to attend the meeting tomorrow.

- Ans
- 1. is able
 - 2. No Improvement
 - 3. have able
 - 4. are able

Question ID : 23908756
Status : Answered
Chosen Option : 2

Q.19 Select the most appropriate option to fill in the blank.

I watched him _____.

- Ans
- 1. to falling
 - 2. to fell
 - 3. fell
 - 4. fall

Question ID : 23908759
Status : Not Answered
Chosen Option : --

Q.20 Select the most appropriate synonym of the given word.

Chide

- Ans
- 1. Flatter
 - 2. Commend
 - 3. Approve
 - 4. Rebuke

Question ID : 23908767
Status : Not Answered
Chosen Option : --

Q.21 Select the most appropriate word for the given group of words.

Something which leads to death

- Ans
- 1. Fatal
 - 2. Trial
 - 3. Penal
 - 4. Vital

Question ID : 23908774
Status : Answered

Q.22 Select the most appropriate option to substitute the underlined segment in the given sentence. If there is no need to substitute it, select No Improvement.
She insisted to driving her kids to school.

- Ans
- 1. to be driving
 - 2. on driving
 - 3. to drive
 - 4. No Improvement

Question ID : 23908758
Status : Answered
Chosen Option : 2

Q.23 Find the part of the given sentence that has an error in it. If there is no error, choose 'No error'.

Their friendship will not last long. /No error

- Ans
- 1. will not
 - 2. last long
 - 3. No error
 - 4. Their friendship

Question ID : 23908755
Status : Answered
Chosen Option : 3

Q.24 Choose the correctly spelt word.

- Ans
- 1. Bachelor
 - 2. Existence
 - 3. Calender
 - 4. Antedote

Question ID : 23908776
Status : Answered
Chosen Option : 2

Q.25 Select the most appropriate option to fill in the blank.
The businessman has _____ connections in the industry.

- Ans
- 1. respective
 - 2. respectable
 - 3. receptive
 - 4. responsible

Question ID : 23908778
Status : Answered
Chosen Option : 1

Section : General Intelligence & Reasoning

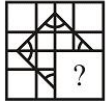
Q.1 Select the option in which the letters share the same relationship as that shared by the given pair of letters.

DP : FR





- Ans
- 1. DJ : BH
 - 2. JZ : HB
 - 3. LQ : NU

Question ID : 239087309
 Status : Answered
 Chosen Option : 4

Q.2 Study the given pattern carefully and select the figure that will complete the pattern given in the question figure.



Ans

- 1. 
- 2. 
- 3. 
- 4. 

Question ID : 239087326
 Status : Answered
 Chosen Option : 2

Q.3 Select the number that can replace the question mark (?) in the following series.
 137, 148, 161, 176, 193, ?

- 1. 214
- 2. 212
- 3. 224
- 4. 232

Question ID : 239087319
 Status : Answered
 Chosen Option : 2

Q.4 Select the number that can replace the question mark (?) in the following series.

5, 10, 17, 26, 37, ?

- 1. 48
- 2. 50
- 3. 47
- 4. 49

Question ID : 239087320
 Status : Answered
 Chosen Option : 2

Q.5 Select the option that is related to the third term in the same way as the second term is related to the first term.

Circumference : Circle :: Perimeter : ?

- 1. 3D
- 2. Big

3. Breadth

4. Square



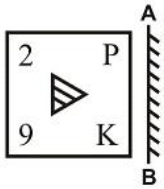
FRESHERS NOW

Question ID : 239087307

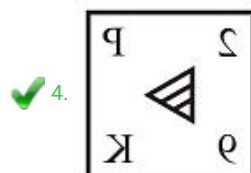
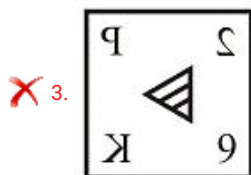
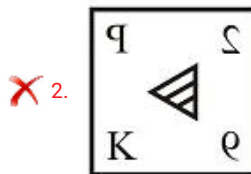
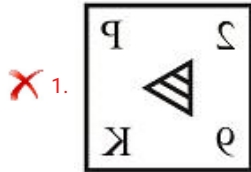
Status : Answered

Chosen Option : 4

Q.6 Select the correct mirror image of the given figure when the mirror is placed at line AB.



Ans



Question ID : 239087328

Status : Answered

Chosen Option : 4

Q.7 Read the given statements and conclusions carefully. Assuming that the information given in the statements is true, even if it appears to be at variance with commonly known facts, decide which of the given conclusions logically follow(s) from the statements.

Statements:

I. All red are cars.

II. Some yellow are red.

Conclusions:

I. Some yellow are cars.

II. No yellow is red.

Ans 1. Only conclusion II follows.

2. None of the conclusions follows.

3. Both conclusions I and II follow.

4. Only conclusion I follows.

Question ID : 239087318

Status : Answered

Chosen Option : 4

Q.8 Read the given statements and conclusions carefully. Assuming that the information given in the statements is true, even if it appears to be at variance with commonly known facts, decide which of the given conclusions logically follow(s) from the statements.

Statements:

- I. All wood are chairs.
- II. All chairs are blue.
- III. No chair is a table.

Conclusions:

- I. Some tables are blue.
- II. No wood is a table.
- III. Some blue are wood.

- Ans
- 1. Only conclusion II follows.
 - 2. Only conclusion III follows.
 - 3. All conclusions, I, II and III, follow
 - 4. Both conclusions II and III follow.

Question ID : 239087317
Status : Answered
Chosen Option : 4

Q.9 Five articles, K, L, P, R and T, are kept one above the other (not necessarily in the same order). K is just above T and just below R. L is just above P and just below T. Which article is at the second position from the bottom?

- Ans
- 1. L
 - 2. T
 - 3. P
 - 4. K

Question ID : 239087316
Status : Answered
Chosen Option : 1

Q.10 In a certain code language, 'TOPAS' is written as 'WRSDV'. What will be the code for 'FREIGHT' in that code language?

- Ans
- 1. KWJNLMY
 - 2. JVIMKLX
 - 3. IUHLJKW
 - 4. IVHLJKW

Question ID : 239087310
Status : Answered
Chosen Option : 3

Q.11 Six computers labelled E, F, G, H, I and J are placed in a row facing towards the north (not necessarily in the same order). Two computers are placed between E and I. G is placed second to the right of J. F is placed second to the right of E. I is placed to the left of E. Which computer is placed to the right of G?

- Ans
- 1. E
 - 2. H
 - 3. F
 - 4. G

Question ID : 239087315
Status : Answered
Chosen Option : 3

Q.12 Which two numbers need to be interchanged to make the following equation correct?
 $4 + 2 \div 3 \times 8 - 1 = 6$

- Ans
- 1. 8 and 4
 - 2. 2 and 4
 - 3. 3 and 8
 - 4. 3 and 4

Question ID : 239087323
 Status : Answered
 Chosen Option : 4

Q.13 Select the word pair in which the two words are related in the same way as the two words in the following word-pair.

Pen : Author

- Ans
- 1. Knife : Chef
 - 2. Surgeon : Scalpel
 - 3. Carpenter : Saw
 - 4. Gun : Gardener

Question ID : 239087308
 Status : Answered
 Chosen Option : 1

Q.14 Select the letter-cluster that can replace the question mark (?) in the following series.

RAP, SCS, TEV, UGY, ?

- Ans
- 1. VJB
 - 2. WJC
 - 3. VIB
 - 4. WJB

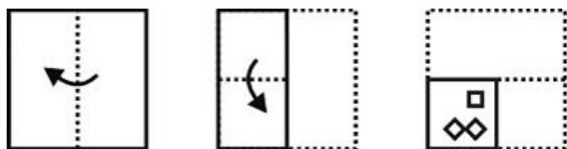
Question ID : 239087306
 Status : Answered
 Chosen Option : 3

Q.15 In a certain code language, 'ROAD' is written as '40' and 'HEAR' is written as '34'. What will be the code for 'POEM' in that code language?

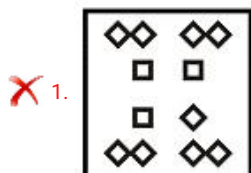
- Ans
- 1. 50
 - 2. 47
 - 3. 51
 - 4. 49

Question ID : 239087313
 Status : Answered
 Chosen Option : 3


Q.16 A paper is folded and cut as shown below. How will it appear when unfolded?




Ans




✗ 2.



✗ 3.



✓ 4.

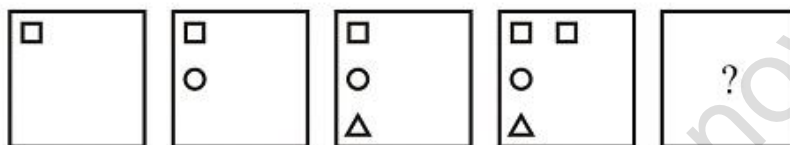


Question ID : 239087329

Status : Answered

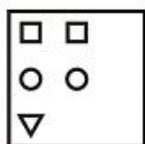
Chosen Option : 4

Q.17 Select the figure that will come next in the following series.

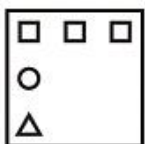


Ans

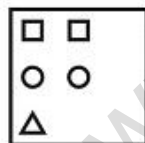
✗ 1.



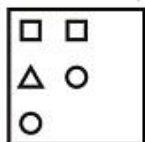
✗ 2.



✓ 3.



✗ 4.



Question ID : 239087325

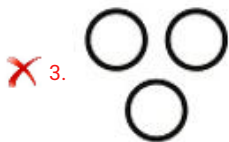
Status : Answered

Chosen Option : 2

Q.18 Identify the Venn diagram that best represents the relationship between the given classes.

Males, Brothers, Daughters

Ans



Question ID : 239087330
 Status : Answered
 Chosen Option : 1

Q.19 In a certain code language, 'ROCKER' is written as 'SNDJFQ'. What will be the code for 'PRIEST' in that code language?

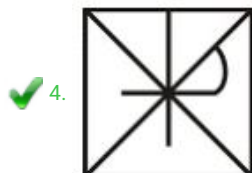
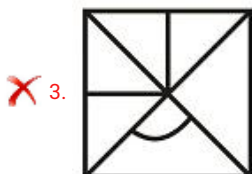
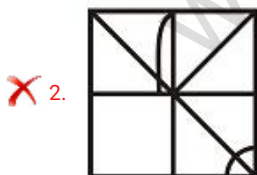
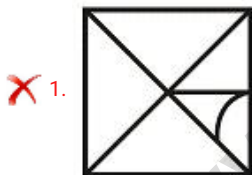
- Ans
- ✗ 1. SSLFVU
 - ✓ 2. QQJDTS
 - ✗ 3. QQJDTU
 - ✗ 4. RRKEUT

Question ID : 239087311
 Status : Answered
 Chosen Option : 2

Q.20 Select the option in which the given figure is embedded. (Rotation is not allowed)



Ans



Question ID : 239087327

Status : Answered

Chosen Option : 4



Q.21 Five products, N, L, T, V and R, are placed in a row facing towards the east (not necessarily in the same order). T is second to the left of U. N is second to the right of L. R is to the immediate right of U. Which product is at the second position from the north end?

- Ans
- 1. T
 - 2. U
 - 3. N
 - 4. L

Question ID : 239087314

Status : Answered

Chosen Option : 1

Q.22 Select the option that is related to the third number in the same way as the second number is related to the first number.

32 : 61 :: 44 : ?

- Ans
- 1. 71
 - 2. 89
 - 3. 73
 - 4. 67

Question ID : 239087321

Status : Answered

Chosen Option : 3

Q.23 In a certain code language, 'PAIN' is written as '161914' and 'TYRE' is written as '2025185'. What will be the code for 'LONG' in that code language?

- Ans
- 1. 1215917
 - 2. 1215197
 - 3. 1215147
 - 4. 1215417

Question ID : 239087312

Status : Answered

Chosen Option : 3

Q.24 Study the given pattern carefully and select the number that can replace the question mark (?) in it.

5 7 9
6 8 2
3 4 1
48 ? 20

- Ans
- 1. 94
 - 2. 84
 - 3. 88
 - 4. 98

Question ID : 239087322

Status : Not Answered

Chosen Option : --

Q.25 If digit 3 is interchanged with digit 1, then what will be the value of the following equation?
 $6 + 9 \div 1 \times 3 - 2 = ?$

Ans

- 1. 8
- 2. 9
- 3. 6
- 4. 7

Question ID : 239087324
Status : Answered
Chosen Option : 4

Section : Numerical Aptitude

Q.1 An article is sold for ₹2070 at a 15% profit. If the article is sold for ₹1890, then what will be the gain/loss percent?

- Ans
- 1. 10% loss
 - 2. 5% loss
 - 3. 10% gain
 - 4. 5% gain

Question ID : 239087440
Status : Answered
Chosen Option : 4

Q.2 What is the smallest number which when increased by 5 is divisible by 12, 18 and 30?

- Ans
- 1. 175
 - 2. 115
 - 3. 235
 - 4. 195

Question ID : 239087431
Status : Answered
Chosen Option : 1

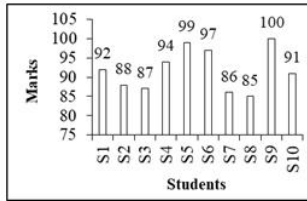
Q.3 What is the value of $\frac{\frac{2}{3} \text{ of } \frac{9}{4} + \frac{1}{2} \div \frac{5}{4}}{1 - \frac{1}{3} + \frac{1}{4} \times (1 + \frac{1}{3})}$?

- Ans
- 1. $\frac{7}{10}$
 - 2. $\frac{9}{19}$
 - 3. $\frac{19}{10}$
 - 4. $\frac{7}{11}$

Question ID : 239087433
Status : Answered
Chosen Option : 3

Q.4

The Bar graph given below presents the marks (out of 100) obtained by 10 students in a subject.



What is the average of the marks obtained by all the students?

- Ans
- 1. 91.9
 - 2. 90.9
 - 3. 82.9
 - 4. 89.9

Question ID : 239087453
Status : Answered
Chosen Option : 1

Q.5 A is 20% more than B, which is 25% less than C. Which of the following is true about A and C?

- Ans
- 1. $A = 0.9C$
 - 2. $A = 1.1C$
 - 3. $A = 0.95C$
 - 4. $A = C$

Question ID : 239087438
Status : Answered
Chosen Option : 1

Q.6 A mixture has milk and water in the ratio (by volume) of 8 : 3. If 3 litres of water is added to it, then new ratio of milk and water becomes 2 : 1. What are the quantities of milk and water respectively in the mixture initially?

- Ans
- 1. 24 litres and 9 litres
 - 2. 32 litres and 12 litres
 - 3. 40 litres and 15 litres
 - 4. 16 litres and 6 litres

Question ID : 239087441
Status : Answered
Chosen Option : 1

Q.7 What is the average of first seven prime numbers (correct to two decimal places)?

- Ans
- 1. 7.14
 - 2. 8.76
 - 3. 7.64
 - 4. 8.29

Question ID : 239087434
Status : Answered
Chosen Option : 1

Q.8 An article is sold for ₹810 at a loss of 10%. What should be the selling price if the loss is 20%?

- Ans
- 1. ₹750
 - 2. ₹630

3. ₹600

4. ₹720



Question ID : 239087439

Status : Answered

Chosen Option : 4

Q.9 The side of a cube is 15 cm. What is the base area of a cuboid whose volume is 175 cm^3 less than that of the cube and whose height is 32 cm?

Ans 1. 200 cm^2

2. 100 cm^2

3. 160 cm^2

4. 325 cm^2

Question ID : 239087450

Status : Not Answered

Chosen Option : --

Q.10 An article is sold for ₹7650 after two successive discounts of 15% and 25%. What is the marked price of the article?

Ans 1. ₹15000

2. ₹10000

3. ₹14000

4. ₹12000

Question ID : 239087436

Status : Answered

Chosen Option : 4

Q.11 The total surface area of a hollow cuboid is 340 cm^2 . If the length and the breadth of the cuboid are 10 cm and 8 cm respectively, then what is the length of the longest stick that can be fitted inside the cuboid?

Ans 1. 10 cm

2. $4\sqrt{41}$ cm

3. $3\sqrt{21}$ cm

4. 21 cm

Question ID : 239087452

Status : Not Answered

Chosen Option : --

Q.12 A sum of money becomes 3 times in 10 years at the rate of compound interest (compounded annually). In how many years will it become 81 times?

Ans 1. 40 years

2. 50 years

3. 35 years

4. 30 years

Question ID : 239087445

Status : Not Answered

Chosen Option : --

Q.13 The ratio of monthly incomes of Ram and Rahim is 4 : 3 and the ratio of their monthly expenditures is 3 : 2. If each saves ₹5000 per month, then what are the respective monthly incomes of Ram and Rahim?

- Ans
- 1. ₹12000 and ₹9000
 - 2. ₹10000 and ₹7500
 - 3. ₹16000 and ₹12000
 - 4. ₹20000 and ₹15000

Question ID : 239087443
 Status : Answered
 Chosen Option : 4

Q.14 A boat can travel 60 km in 3 hours while going downstream, It can travel 90 km in 5 hours while going upstream. What is the ratio of the speed of boat in still water to the speed of the stream?

- Ans
- 1. 6 : 1
 - 2. 4 : 1
 - 3. 19 : 1
 - 4. 10 : 9

Question ID : 239087449
 Status : Not Answered
 Chosen Option : --

Q.15 The simple interest for 9 years on a principal is $\frac{3}{5}$ of the principal. What is the rate of interest per annum?

- Ans
- 1. 6%
 - 2. 4%
 - 3. $6\frac{2}{3}\%$
 - 4. $5\frac{2}{3}\%$

Question ID : 239087444
 Status : Answered
 Chosen Option : 3

Q.16 A can do a piece of work alone in 8 days. B can do the same work alone in 21 days. If they work together for 3 days, then how much work is completed?

- Ans
- 1. $\frac{29}{67}$
 - 2. $\frac{31}{65}$
 - 3. $\frac{27}{64}$
 - 4. $\frac{29}{56}$

Question ID : 239087446
 Status : Answered
 Chosen Option : 4

Q.17 What is the value of $\frac{3}{7} \div \frac{9}{21} + 2 - \frac{4}{3} + \frac{1}{2}$ of $\frac{12}{5} \times \frac{25}{18} \div \frac{5}{9}$?

- Ans
- 1. 2
 - 2. $\frac{17}{3}$
 - 3. $\frac{14}{3}$

4. 4



Question ID : 239087432
Status : Answered
Chosen Option : 3

Q.18 What is the average of first six natural numbers, which are multiples of 3?

- Ans 1. 10.5
 2. 11
 3. 12
 4. 9.5

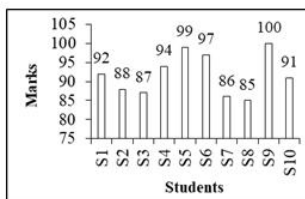
Question ID : 239087435
Status : Answered
Chosen Option : 1

Q.19 A train crosses a 600 metres long platform in 50 seconds. It crosses another 900 metres long platform in 60 seconds. What are the length and the speed of the train?

- Ans 1. 900 metres, 96 km/h
 2. 900 metres, 108 km/h
 3. 600 metres, 108 km/h
 4. 700 metres, 96 km/h

Question ID : 239087448
Status : Answered
Chosen Option : 2

Q.20 The Bar graph given below presents the marks (out of 100) obtained by 10 students in a subject.



The average of marks obtained by S3 and S5 is what percent less than the marks obtained by S9?

- Ans 1. 7%
 2. 9%
 3. 8%
 4. 10%

Question ID : 239087455
Status : Answered
Chosen Option : 1

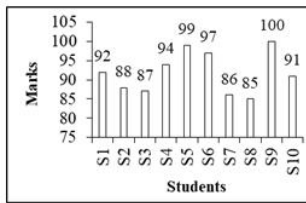
Q.21 The height of a right circular cone is 5 cm and its base radius is 12 cm. What is the curved surface area of the cone?

- Ans 1. $132\pi\text{cm}^2$
 2. $143\pi\text{cm}^2$
 3. $156\pi\text{cm}^2$
 4. $168\pi\text{cm}^2$

Question ID : 239087451



Q.22 The Bar graph given below presents the marks (out of 100) obtained by 10 students in a subject.



The marks obtained by S5 is how much percent more than the average marks of the students (correct to two decimal)?

- Ans
- 1. 7.73%
 - 2. 22.73%
 - 3. 12.73%
 - 4. 17.73%

Question ID : 239087454
Status : **Answered**
Chosen Option : 1

Q.23 Pipe P can fill a tank alone in 7 hours. Pipe Q can fill the same tank alone in 13 hours. In how much time can they together fill the tank?

- Ans
- 1. 3 hours 18 minutes
 - 2. 3 hours 45 minutes
 - 3. 4 hours 12 minutes
 - 4. 4 hours 33 minutes

Question ID : 239087447
Status : **Answered**
Chosen Option : 3

Q.24 For three numbers, the ratio of the first and the second number is 2 : 3 and that of the second and the third number is 4 : 5. If the sum of the three numbers is 140, then what is the second number?

- Ans
- 1. 60
 - 2. 48
 - 3. 96
 - 4. 32

Question ID : 239087442
Status : **Answered**
Chosen Option : 2

Q.25 What is the median of 6, 9, 13, 8, 3, 2, 5, 7 and 11?

- Ans
- 1. 7
 - 2. 6.5
 - 3. 8
 - 4. 6

Question ID : 239087437
Status : **Answered**
Chosen Option : 1

Q.1 Who among the following tennis player has won the most Grand Slam tournament titles (as of January 2019)?

- Ans
- 1. Rafael Nadal
 - 2. Serena Williams
 - 3. Steffi Graf
 - 4. Roger Federar

Question ID : 239087202
Status : Answered
Chosen Option : 4

Q.2 Book 'A brief history of time' is written by:

- Ans
- 1. John Green
 - 2. J K Rowling
 - 3. Suzame Colling
 - 4. Stephen Hawking

Question ID : 239087203
Status : Answered
Chosen Option : 4

Q.3 Anna Rajam Malhotra who died in 2018 was:

- Ans
- 1. First female Indian MLA
 - 2. First female Indian Chief Secretary
 - 3. First female Indian IAS officer
 - 4. First female Indian IPS officer

Question ID : 239087205
Status : Answered
Chosen Option : 4

Q.4 Which of the following pairs is INCORRECTLY matched?

- Ans
- 1. Tawa - Gujarat
 - 2. Korba - Chattisgarh
 - 3. Nagarjunasagar - Andhra Pradesh
 - 4. Farakka - West Bengal

Question ID : 239087191
Status : Not Answered
Chosen Option : --

Q.5 Reserve Bank of India (RBI) does not transact the business of which of the following State Government?

- Ans
- 1. Bihar
 - 2. Jammu and Kashmir
 - 3. Telangana
 - 4. Meghalaya

Question ID : 239087192
Status : Answered
Chosen Option : 2

Q.6 Vyas Samman 2018 conferred to:

- Ans
- 1. Mamta Kalia
 - 2. Amitav Ghosh
 - 3. Leeladhar Jagudi
 - 4. K Siva Reddy

Question ID : 239087204
Status : Answered
Chosen Option : 4

Q.7 Which of the following writs provides a remedy for a person who has been unlawfully held in prison?

- Ans
- 1. Certiorari
 - 2. Habeas Corpus
 - 3. Mandamus
 - 4. Prohibition

Question ID : 239087185
Status : Answered
Chosen Option : 2

Q.8 Which of the following pairs is INCORRECTLY matched?

- Ans
- 1. Colosseum - Italy
 - 2. Chichen Itza - Brazil
 - 3. Petra - Jordan
 - 4. Machu Picchu - Peru

Question ID : 239087190
Status : Not Answered
Chosen Option : --

Q.9 The Dargah of Sheikh Khwaja Qutubuddin Bakhtiyar Kaki is located in:

- Ans
- 1. Ajmer
 - 2. Ajodhan
 - 3. Delhi
 - 4. Agra

Question ID : 239087187
Status : Answered
Chosen Option : 3

Q.10 Who among the following became the country's Vice President twice?

- Ans
- 1. Bhairon Singh Shekhawat
 - 2. Mohammad Hidayatullah
 - 3. Sarvapalli RadhaKrishnan
 - 4. K R Narayanan

Question ID : 239087186
Status : Answered
Chosen Option : 3

Q.11 Kishtwar National Park is located in:

- Ans
- 1. Jharkhand
 - 2. Jammu and Kashmir

- 3. Himachal Pradesh
- 4. Uttrakhand



Question ID : 239087198
Status : Answered
Chosen Option : 3

Q.12 Who was the President of Congress during Belgaum Summit of Congress in 1924?

- Ans
- 1. K.L. Nehru
 - 2. Charu Majumdar
 - 3. J.L. Nehru
 - 4. M.K. Gandhi

Question ID : 239087189
Status : Answered
Chosen Option : 4

Q.13 With reference to the steel plants in India, which of the following pairs is correct?

- Ans
- 1. Durgapur - Odisha
 - 2. Salem - Tamil Nadu
 - 3. Rourkela - West Bengal
 - 4. Bokaro - Bihar

Question ID : 239087193
Status : Not Answered
Chosen Option : --

Q.14 Who of the following is referred to as Dhing Express?

- Ans
- 1. Hima Das
 - 2. Milkha Singh
 - 3. Dutee Chand
 - 4. P.T. Usha

Question ID : 239087201
Status : Answered
Chosen Option : 1

Q.15 Which of the following is NOT related to fundamental rights?

- Ans
- 1. Right to form association
 - 2. Right to education
 - 3. Right to life
 - 4. Right to property

Question ID : 239087184
Status : Answered
Chosen Option : 4

Q.16 Gir National Park is situated in:

- Ans
- 1. West Bengal
 - 2. Gujarat
 - 3. Rajasthan
 - 4. Assam

Question ID : 239087200
Status : Answered
Chosen Option : 2



Q.17 Fiscal Policy is formulated by _____ in India.

- Ans
- 1. NITI Ayog
 - 2. Finance Ministry
 - 3. RBI
 - 4. Different Banks

Question ID : 239087194
Status : Answered
Chosen Option : 3

Q.18 Who among the following is NOT associated to the Mughal empire?

- Ans
- 1. Kamran Mirza
 - 2. Sher Shah Suri
 - 3. Shah Alam II
 - 4. Dara Sikoh

Question ID : 239087188
Status : Answered
Chosen Option : 2

Q.19 Muga silk is associated to which of the following states of India?

- Ans
- 1. Assam
 - 2. Bihar
 - 3. Arunachal Pradesh
 - 4. Maharashtra

Question ID : 239087182
Status : Answered
Chosen Option : 1

Q.20 Einstein was awarded the Nobel Prize for:

- Ans
- 1. Theory of relativity
 - 2. Theory of photoelectric effect
 - 3. Theory of specific heat
 - 4. Theory of Brownian motion

Question ID : 239087196
Status : Answered
Chosen Option : 1

Q.21 Graphene is:

- Ans
- 1. Isotope of boron
 - 2. An alloy of iron
 - 3. Allotrope of Carbon
 - 4. An alloy of tin

Question ID : 239087195
Status : Answered
Chosen Option : 3

Q.22 Which of the following disease is caused by virus?

- Ans
- 1. Tetanus
 - 2. Leprosy
 - 3. Rubella
 - 4. Malaria

Question ID : 239087199
Status : Answered
Chosen Option : 3

Q.23 Kumbh Mela is NOT held at:

- Ans
- 1. Allahabad
 - 2. Ujjain
 - 3. Puri
 - 4. Haridwar

Question ID : 239087183
Status : Answered
Chosen Option : 4

Q.24 Which of the following is richest in Vitamin C?

- Ans
- 1. Soya Milk
 - 2. Apple
 - 3. Amla
 - 4. Carrot

Question ID : 239087197
Status : Answered
Chosen Option : 3

Q.25 In which of the following is reference of Indian Dance forms found?

- Ans
- 1. Abhang
 - 2. Natya Shashtra
 - 3. Kama sutra
 - 4. Bramha Sutra

Question ID : 239087181
Status : Answered
Chosen Option : 2