

Multi Tasking Non Technical Staff Havaladar CBIC and CBN Examination 2021

Roll Number	
Candidate Name	
Venue Name	
Exam Date	11/07/2022
Exam Time	9:00 AM - 10:30 AM
Subject	MTS Non technical and Havaladar Examination 2021

Section : **General English**

Q.1 The following sentence has been split into four segments. Identify the segment that contains a grammatical error.

To descend a cragged / mountain, however, was most/ difficult and dangerous / than to ascend it.

- Ans
- 1. To descend a cragged
 - 2. difficult and dangerous
 - 3. mountain however was most
 - 4. than to ascend it

Question ID : 26433051696
Status : Answered
Chosen Option : 3

Q.2 Select the most appropriate ANTONYM of the given word.

Impartial

- Ans
- 1. Intellectual
 - 2. objective
 - 3. Biased
 - 4. Pious

Question ID : 26433051713
Status : Answered
Chosen Option : 3

Q.3 Select the option that will improve the underlined part of the sentence. In case no improvement is needed, select 'No improvement required'.

Austin can be saw chasing cops with a sickle.

- Ans
- 1. be seen chasing
 - 2. No improvement required
 - 3. been saw chasing
 - 4. being seen chase

Question ID : 26433050779
Status : Answered
Chosen Option : 3

Q.4 Select the most appropriate option to fill in the blank.

The defendant's lawyer argued that his past offenses were _____ to this case.

- Ans
- 1. contagious
 - 2. spacious
 - 3. arrogant
 - 4. irrelevant

Question ID : 26433051772
Status : Answered
Chosen Option : 4

Q.5 Select the most appropriate synonym of the given word.

Provoke

- Ans
- 1. Inhibit
 - 2. Slack
 - 3. Arouse
 - 4. Constrain

Question ID : 26433050861
Status : Answered
Chosen Option : 3

Q.6 Select the option that will improve the underlined part of the given sentence. In case no improvement is needed, select 'No improvement required'.

None only did the men aid in the work, but the women also did their part.

- Ans
- 1. Only
 - 2. No improvement required
 - 3. No only
 - 4. Not only

Question ID : 26433051292
Status : Answered
Chosen Option : 4

Q.7 Select the most appropriate meaning of the given idiom.

Spill the beans

- Ans
- 1. To drop something
 - 2. To find out something
 - 3. Give away a secret
 - 4. To get a new idea

Question ID : 26433051333
Status : Answered
Chosen Option : 3

Q.8 Select the correctly spelt word.

- Ans
- 1. Millennia
 - 2. Monothistic
 - 3. Hypothesis
 - 4. Prihistoric

Question ID : 26433051388
 Status : Answered
 Chosen Option : 3

Q.9 Select the most appropriate synonym of the underlined word in the given sentence.

These figures have been greatly exaggerated.

- Ans
- 1. understated
 - 2. magnified
 - 3. belittled
 - 4. ignore

Question ID : 26433050723
 Status : Answered
 Chosen Option : 2

Q.10 The following sentence has been divided into parts. One of them may contain an error. Select the part that contains the error from the given options. If you don't find any error, mark 'No error' as your answer.

Anosmia is the / completed loss or / absence of the sense of smell.

- Ans
- 1. No error
 - 2. completed loss or
 - 3. absence of the sense of smell
 - 4. Anosmia is the

Question ID : 26433050845
 Status : Answered
 Chosen Option : 2

Q.11 Select the most appropriate ANTONYM of the underlined word in the given sentence.

These types of insects are usually very difficult to eradicate.

- Ans
- 1. emancipate
 - 2. annihilate
 - 3. conserve
 - 4. devastate

Question ID : 26433050938
 Status : Answered
 Chosen Option : 3

Q.12 Select the most appropriate option to fill in the blank.

Your explanation was simpler _____ Rekha's explanation.

- Ans
- 1. of
 - 2. that
 - 3. then
 - 4. than

Question ID : 26433050709
 Status : Answered
 Chosen Option : 4

Q.13 Select the most appropriate meaning of the underlined idiom in the given sentence.

If you keep dodging your manager's call, you will be on thin ice.

- Ans
- 1. In a risky situation
 - 2. Perform adequately
 - 3. Change plans in the middle of a process
 - 4. Go to jail

Question ID : 26433051072
 Status : Answered
 Chosen Option : 1

Q.14 Select the option that can be used as a one-word substitute for the given group of words.

Climb or move with difficulty or a lot of effort, typically using one's hands and feet

- Ans
- 1. Pedagogy
 - 2. Clamber
 - 3. Quack
 - 4. Retreat

Question ID : 26433051683
 Status : Answered
 Chosen Option : 2

Q.15 Select the option that will improve the underlined part of the given sentence. In case no improvement is needed, select 'No improvement required'.

The probable side effects of this medication include burning and itching.

- Ans
- 1. including burning and itching
 - 2. can be including burning and itching
 - 3. includes burning and itching
 - 4. No improvement required

Question ID : 26433051594
 Status : Answered
 Chosen Option : 4

Q.16 Select the INCORRECTLY spelt word.

- Ans
- 1. Appease
 - 2. Aberrant
 - 3. Arbitrary
 - 4. Incipid

Question ID : 26433051717
Status : Answered
Chosen Option : 4

Q.17 Select the most appropriate option to fill in the blank.

Today, your presentation was _____ better than Saba's presentation.

- Ans
- 1. more
 - 2. many
 - 3. most
 - 4. much

Question ID : 26433050554
Status : Answered
Chosen Option : 4

Q.18 The following sentence has been divided into parts. One of them may contain an error. Select the part that contains the error from the given options. If you don't find any error, mark 'No error' as your answer.

My teacher said to me that / all that / glitters were not gold.

- Ans
- 1. glitters were not gold
 - 2. My teacher said to me that
 - 3. No error
 - 4. all that

Question ID : 26433051367
Status : Answered
Chosen Option : 1

Q.19 Select the most appropriate option to fill in the blank.

His autobiography will be one of the most _____ awaited books.

- Ans
- 1. eagerly
 - 2. deftly
 - 3. badly
 - 4. slowly

Question ID : 26433051424
Status : Answered
Chosen Option : 1

Q.20 Select the option that will improve the underlined part of the sentence. In case no improvement is needed, select 'No improvement required'.

Thank you all for coming so earlier at the morning.

Ans 1. No improvement required

2. early in the

3. the early in a

4. earliest on the

Question ID : 26433051038

Status : Answered

Chosen Option : 2

Comprehension:

In the following passage, some words have been deleted. Read the passage carefully and select the most appropriate option to fill in each blank.

With up to 50,000 species of spiders, spider habitats vary (1) _____. Spiders are (2) _____ to live anywhere in the world except Antarctica. They (3) _____ not live in bodies of water or in the air, but can adapt (4) _____ almost any type of environment: hot or cool, wet or (5) _____, in the garden or in your house.

SubQuestion No : 21

Q.21 Select the most appropriate option to fill in blank number 1.

Ans 1. widely

2. wide

3. widest

4. wider

Question ID : 26433050712

Status : Answered

Chosen Option : 1

Comprehension:

In the following passage, some words have been deleted. Read the passage carefully and select the most appropriate option to fill in each blank.

With up to 50,000 species of spiders, spider habitats vary (1) _____. Spiders are (2) _____ to live anywhere in the world except Antarctica. They (3) _____ not live in bodies of water or in the air, but can adapt (4) _____ almost any type of environment: hot or cool, wet or (5) _____, in the garden or in your house.

SubQuestion No : 22

Q.22 Select the most appropriate option to fill in blank number 2.

Ans 1. authorised

2. courageous

3. able

4. harboured

Question ID : 26433050713

Status : Answered

Chosen Option : 3

Comprehension:

In the following passage, some words have been deleted. Read the passage carefully and select the most appropriate option to fill in each blank.

With up to 50,000 species of spiders, spider habitats vary (1) _____. Spiders are (2) _____ to live anywhere in the world except Antarctica. They (3) _____ not live in bodies of water or in the air, but can adapt (4) _____ almost any type of environment: hot or cool, wet or (5) _____, in the garden or in your house.

SubQuestion No : 23

Q.23 Select the most appropriate option to fill in blank number 3.

Ans 1. done

2. do

3. does

4. did

Question ID : 26433050714

Status : Answered

Chosen Option : 2

Comprehension:

In the following passage, some words have been deleted. Read the passage carefully and select the most appropriate option to fill in each blank.

With up to 50,000 species of spiders, spider habitats vary (1) _____. Spiders are (2) _____ to live anywhere in the world except Antarctica. They (3) _____ not live in bodies of water or in the air, but can adapt (4) _____ almost any type of environment: hot or cool, wet or (5) _____, in the garden or in your house.

SubQuestion No : 24

Q.24 Select the most appropriate option to fill in blank number 4.

Ans 1. of

2. at

3. on

4. to

Question ID : 26433050715

Status : Answered

Chosen Option : 4

Comprehension:

In the following passage, some words have been deleted. Read the passage carefully and select the most appropriate option to fill in each blank.

With up to 50,000 species of spiders, spider habitats vary (1) _____. Spiders are (2) _____ to live anywhere in the world except Antarctica. They (3) _____ not live in bodies of water or in the air, but can adapt (4) _____ almost any type of environment: hot or cool, wet or (5) _____, in the garden or in your house.

SubQuestion No : 25

Q.25 Select the most appropriate option to fill in blank number 5.

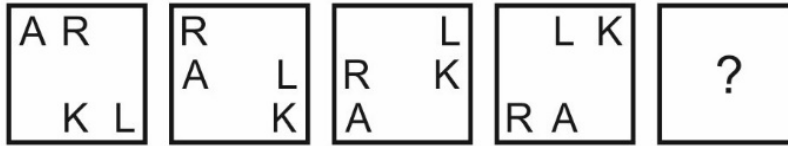
- Ans
- 1. damp
 - 2. muggy
 - 3. dewy
 - 4. dry

Question ID : 26433050716
Status : Answered
Chosen Option : 4

Section : General Intelligence and Reasoning

<https://www.freshersnow.com>

Q.1 Select the figure from the given options that can replace the question mark (?) in the following series.



Ans

✗ 1.



✓ 2.



✗ 3.



✗ 4.



Question ID : 26433049033

Status : Answered

Chosen Option : 2

Q.2 Select the option that is related to the sixth number in the same way as the first number is related to the second number and the third number is related to the fourth number.

56 : 11 :: 34 : 7 :: ? : 13

Ans ✓ 1. 76

✗ 2. 54

✗ 3. 84

✗ 4. 62

Question ID : 26433049016

Status : Answered

Chosen Option : 1

Q.3 In a certain code language, 'GOP' is coded as '38', and 'HVN' is coded as '44'. How will 'PNG' be coded in that language?

- Ans
- 1. 42
 - 2. 37
 - 3. 29
 - 4. 32

Question ID : 26433048621
Status : Answered
Chosen Option : 2

Q.4 In a certain code language, 'COFFEE' is coded as '40', 'LEMON' is coded as '59', and 'GINGER' is coded as '60'. How will 'TEA' be coded in that language?

- Ans
- 1. 43
 - 2. 26
 - 3. 29
 - 4. 32

Question ID : 26433048047
Status : Answered
Chosen Option : 2

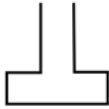
Q.5 Select the option that is related to the third letter-cluster in the same way as the second letter-cluster is related to the first letter-cluster.

TV : MO :: GR : ?

- Ans
- 1. AK
 - 2. ZL
 - 3. ZK
 - 4. AM

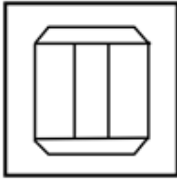
Question ID : 26433048625
Status : Not Answered
Chosen Option : --

Q.6 Select the option figure in which the given figure is embedded (rotation is NOT allowed).

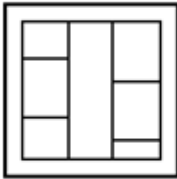


Ans

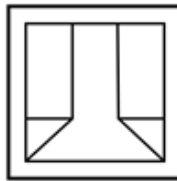
✗ 1.



✗ 2.



✓ 3.



✗ 4.



Question ID : 26433048114

Status : Answered

Chosen Option : 3

Q.7 In a certain code language, 'hairs are golden black' is coded as '@ rm pr kt', 'golden bells are sound' is coded as 'ak @ kt #', and 'bells being loud' is coded as '# jm jk'. What can be the code for 'bell sound' in that language?

Ans ✗ 1. ak @

✓ 2. ak #

✗ 3. ak jm

✗ 4. jm jk

Question ID : 26433048947

Status : Answered

Chosen Option : 2

Q.8 After interchanging the given two numbers (not digits), what will be the value of the given equation?

5 and 6

$$6 \times 12 - 4 + 5 - 1 = ?$$

- Ans
- 1. 41
 - 2. 61
 - 3. 51
 - 4. 71

Question ID : 26433049014
 Status : Answered
 Chosen Option : 2

Q.9 Select the letter-cluster from among the given options that can replace the question mark (?) in the following series.

IDK, LFL, OHM, RJN, ?

- Ans
- 1. TLN
 - 2. ULO
 - 3. STO
 - 4. SLP

Question ID : 26433048218
 Status : Answered
 Chosen Option : 2

Q.10 In a certain code language, 'TAPE' is coded as '4825', 'SHART' is coded as '93814', and 'TUBE' is coded as '4675'. What is the code for the letter 'E' in that code language?

- Ans
- 1. 5
 - 2. 4
 - 3. 6
 - 4. 8

Question ID : 26433048445
 Status : Answered
 Chosen Option : 1

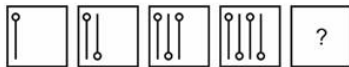
Q.11 Select the number from among the given options that can replace the question mark (?) in the following series.

57, 59, 56, 60, ?, 61, 54

- Ans
- 1. 55
 - 2. 53
 - 3. 54
 - 4. 63

Question ID : 26433048743
 Status : Answered
 Chosen Option : 1

Q.12 Select the figure from the given options that can replace the question mark (?) in the following series.



Ans

✓ 1.



✗ 2.



✗ 3.



✗ 4.



Question ID : 26433048759

Status : Answered

Chosen Option : 1

Q.13 6 boys, J, K, L, M, N and P, are sitting around a rectangular table facing towards the centre (not necessarily in the same order). 4 boys are sitting in the corners, and 1 boy is sitting in the middle of each shorter side of the table. N is second to the right of K and second to the left of J. M is exactly opposite to N, and M is not sitting in the corner.

Which of the following statements is definitely correct?

I. L and P are both next to N.

II. K is diagonally opposite to L.

Ans ✗ 1. Only II is correct.

✗ 2. Neither I nor II is correct.

✗ 3. Both I and II are correct.

✓ 4. Only I is correct.

Question ID : 26433049031

Status : Answered

Chosen Option : 4

Q.14 Select the number from among the given options that can replace the question mark (?) in the following series.

12, 37, 110, 331, 992, ?

Ans ✗ 1. 2947

✗ 2. 2867

✓ 3. 2977

✗ 4. 2877

Question ID : 26433049019

Status : Answered

Chosen Option : 4

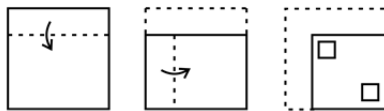
Q.15 Select the option that is related to the fifth term in the same way as the second term is related to the first term and the fourth term is related to the third term.

USER : USRE :: TIRING : TRNIIG :: DEVOTED : ?


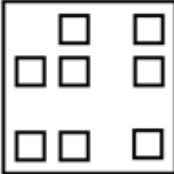
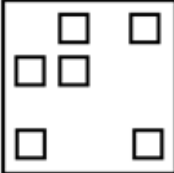
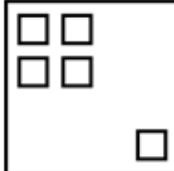
- Ans
- 1. DOVTEED
 - 2. DDEEVTO
 - 3. DEDETOV
 - 4. VTOEEDD

Question ID : 26433048044
 Status : Answered
 Chosen Option : 4

Q.16 The sequence of folding a piece of paper and the manner in which the folded paper has been cut is shown in the following figures. How would this paper look when unfolded?



Ans

- 1. 
- 2. 
- 3. 
- 4. 

Question ID : 26433048166
 Status : Answered
 Chosen Option : 4

Q.17 The weight of seven women W1, W2, W3, W4, W5, W6 and W7 are compared. The weight of W4 is more than W7. The weight of W5 is more than only three women and the weight of W2 is less than only W1 and W3. If the weight of W7 is the lowest, then the minimum number of women who have weight more than W6 is?

- Ans 1. 1
 2. 4
 3. 2
 4. 3

Question ID : 26433049032
 Status : Not Answered
 Chosen Option : --

Q.18 Read the given statements and conclusions carefully. Assuming that the information given in the statements is true, even if it appears to be at variance with commonly known facts, decide which of the given conclusions logically follow(s) from the statements.

Statements:

Akshay earns more than Rajnish who earns more than Sam.
 Sam earns less than Dixit.

Conclusions:

I: Akshay earns more than Sam.
 II: Dixit earns more than Akshay.

- Ans 1. Both I and II follow
 2. Only I follows
 3. Neither I nor II follows
 4. Only II follows

Question ID : 26433048104
 Status : Answered
 Chosen Option : 2

Q.19 Select the set in which the numbers are related in the same way as are the numbers of the following sets.

(13, 12, 2)
 (25, 22, 6)

- Ans 1. (26, 22, 10)
 2. (15, 5, 15)
 3. (6, 3, 6)
 4. (24, 12, 19)

Question ID : 26433048109
 Status : Answered
 Chosen Option : 1

Q.20 Read the given statements and conclusions carefully. Assuming that the information given in the statements is true, even if it appears to be at variance with commonly known facts, decide which of the given conclusions logically follow(s) from the statements.

Statements:

- I. No yellow is green.
- II. Some pink are yellow.

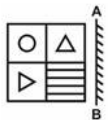
Conclusions:

- I. No green is yellow.
- II. Some yellow are pink.
- III. All green are pink.


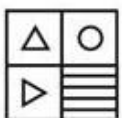

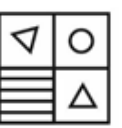
- Ans**
- 1. Only conclusions I and II follow.
 - 2. Only conclusion III follows.
 - 3. Conclusion I, II and III follows.
 - 4. Only conclusions II and III follow.

Question ID : 26433049029
 Status : Answered
 Chosen Option : 1

Q.21 Select the correct mirror image of the given figure when the mirror is placed at AB as show.



Ans

- 1. 
- 2. 
- 3. 
- 4. 

https://www.freshersnow.com

Question ID : 26433048861
 Status : Answered
 Chosen Option : 3

Q.22 8 boys G, H, I, J, K, L, M and N are sitting around a square table facing towards the centre (not necessarily in the same order). Four boys are sitting at the corners and four boys are sitting in the middle of the sides. J is the immediate neighbour of G and H and he is sitting at a corner. M is the immediate neighbour of N and K. L is the sitting in the middle of the side. G is not sitting opposite to L. N is towards the immediate right of H.
Who is sitting diagonally opposite to I?

- Ans
- 1. L
 - 2. K
 - 3. N
 - 4. J

Question ID : 26433048755
Status : Not Answered
Chosen Option : --

Q.23 Which two numbers should be interchanged to make the given equation correct?

$$20 \div 6 + 10 - 5 \times 2 = 2$$

- Ans
- 1. 5 and 10
 - 2. 6 and 10
 - 3. 10 and 20
 - 4. 5 and 6

Question ID : 26433048236
Status : Answered
Chosen Option : 4

Q.24 Select the option that is related to the third term in the same way as the second term is related to the first term.

CRAW : DZIX :: MOCK : ?

- Ans
- 1. PYLN
 - 2. PLXN
 - 3. PXMN
 - 4. PXLN

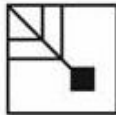
Question ID : 26433049026
Status : Not Answered
Chosen Option : --

Q.25 Select the figure from the options that can replace the question mark (?) and complete the pattern (rotation not allowed).



Ans

✓ 1.



✗ 2.



✗ 3.



✗ 4.



Question ID : 26433048688
 Status : Answered
 Chosen Option : 1

Section : Numerical Aptitude

Q.1 In a family of six males and a few females, the average monthly consumption of grain per head is 14.4 kg. If the average monthly consumption per head is 20 kg in the case of males and 6 kg in the case of females, find the number of females in the family?

Ans ✗ 1. 8

✓ 2. 4

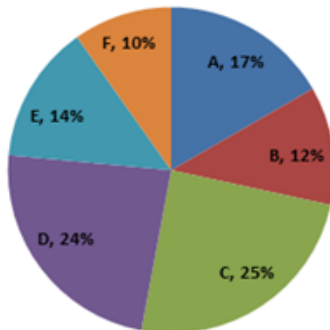
✗ 3. 6

✗ 4. 7

Question ID : 26433050398
 Status : Answered
 Chosen Option : 2

Q.2 Read the given pie chart and answer the given question.

Percentage of Scale I officers in different Banks in January 2020.



Total number of Scale I officers in all the six banks, put together = 500

What is the average number of Scale I officers in banks D, E and F?

- Ans
- 1. 90
 - 2. 85
 - 3. 80
 - 4. 75

Question ID : 26433050364
 Status : Answered
 Chosen Option : 3

Q.3 At what rate of simple interest per annum will a sum triple itself in 30 years? [Give your answer correct to 2 decimal places.]

- Ans
- 1. 6.67%
 - 2. 4.75%
 - 3. 8.33%
 - 4. 3.33%

Question ID : 26433049582
 Status : Answered
 Chosen Option : 1

Q.4 24 women and 9 men can complete a certain piece of work in 18 days. Each women takes twice the amount of time taken by a man to finish the work. In how many days can only 9 men finish the same work?

- Ans
- 1. 42
 - 2. 35
 - 3. 39
 - 4. 48

Question ID : 26433050411
 Status : Answered
 Chosen Option : 4

Q.5 The average age of eight girls is y years. 5 new girls having ages (in years) given by $y + 3$, $y - 6$, $y + 15$, $y + 8$, and $y + 6$, join the class. What is the new average age of the class?

- Ans**
- ✓ 1. $(y + 2)$ years
 - ✗ 2. $(y + 6)$ years
 - ✗ 3. $(y + 3)$ years
 - ✗ 4. $(y + 1)$ years

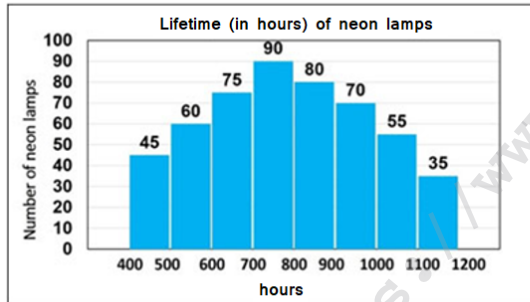
Question ID : 26433049579
 Status : Answered
 Chosen Option : 1

Q.6 The total surface area of a closed cube is 128 cm^2 more than the area of a square. If the length of each side of the cube is 8 cm, then what is the length of each side of the square?

- Ans**
- ✓ 1. 16 cm
 - ✗ 2. 12 cm
 - ✗ 3. 18 cm
 - ✗ 4. 9 cm

Question ID : 26433049660
 Status : Answered
 Chosen Option : 2

Q.7 The bar graph given below provides information about the lifetime (in hours) of neon lamps. Study the given bar graph and answer the question that follows.



The number of neon lamps that have a life of 600 hours or more but less than 900 hours is:

- Ans**
- ✗ 1. 180
 - ✓ 2. 245
 - ✗ 3. 270
 - ✗ 4. 305

Question ID : 26433050088
 Status : Answered
 Chosen Option : 2

Q.8 The average of ten numbers is 24. If each number is divided by 2, then what will be the new average?

- Ans**
- 1. 12
 - 2. 6
 - 3. 20
 - 4. 5

Question ID : **26433049652**
Status : **Answered**
Chosen Option : **1**

Q.9 The difference between the simple interest and the compound interest at the same rate for ₹32,000 for 2 years is ₹80. What is the rate of interest, if, in the case of compound interest, interest is compounded annually?

- Ans**
- 1. 8% per annum
 - 2. 2% per annum
 - 3. 5% per annum
 - 4. 12% per annum

Question ID : **26433049457**
Status : **Not Answered**
Chosen Option : **--**

Q.10 $600 - A = 65\%$ of 200. What is the value of A?

- Ans**
- 1. 450
 - 2. 470
 - 3. 490
 - 4. 460

Question ID : **26433050025**
Status : **Answered**
Chosen Option : **2**

Q.11 What is the greatest number which, on dividing 342 and 480, leaves remainders of 6 and 4, respectively?

- Ans**
- 1. 14
 - 2. 4
 - 3. 7
 - 4. 28

Question ID : **26433049445**
Status : **Answered**
Chosen Option : **4**

Q.12 What should come in place of the question mark (?) for the following mathematical statement to be true?

$$(9576 \div 21) \times (462 \div 42) - 563 \times 8 = (?)^3$$

- Ans**
- 1. 5
 - 2. 7
 - 3. 8
 - 4. 3

Question ID : **26433050069**
 Status : **Answered**
 Chosen Option : **3**

Q.13 The side of a square is equal to 40% of the radius of a sphere. If the volume of the sphere is $\frac{500\pi}{3} \text{ m}^3$, then what is the area of the square?

- Ans**
- 1. 2 m^2
 - 2. 1 m^2
 - 3. 9 m^2
 - 4. 4 m^2

Question ID : **26433050417**
 Status : **Answered**
 Chosen Option : **4**

Q.14 A fabric seller sells 65 m of cloth for ₹5,850 at a profit of ₹11 per metre of cloth. What is the cost price of 1 m of cloth?

- Ans**
- 1. ₹70
 - 2. ₹89
 - 3. ₹80
 - 4. ₹79

Question ID : **26433049451**
 Status : **Answered**
 Chosen Option : **4**

Q.15 As per the data shown in the table given, what is the ratio of the students aged below 18 years to the students aged 18 years or above?

Age group	6-9	9-12	12-15	15-18	18-21	21-24
Number of Students	14	26	18	12	17	7

- Ans
- 1. 4 : 3
 - 2. 35 : 27
 - 3. 35 : 12
 - 4. 5 : 9

Question ID : **26433050362**
 Status : **Answered**
 Chosen Option : **3**

Q.16 A teacher distributes some sweets among his four students in the ratio of $\frac{1}{3} : \frac{1}{5} : \frac{1}{6} : \frac{1}{4}$. What is the minimum number of sweets that the teacher should have, so that no sweet needs to be broken into parts to be shared?

- Ans
- 1. 57
 - 2. 77
 - 3. 76
 - 4. 71

Question ID : **26433050355**
 Status : **Not Answered**
 Chosen Option : --

Q.17 2 candidates contested an election. The winning candidate got 52% of the valid votes and won by a margin of 360 votes. If 10% of votes were declared invalid, then what was the total number of votes polled?

- Ans
- 1. 11,000
 - 2. 10,000
 - 3. 8,000
 - 4. 12,000

Question ID : **26433049776**
 Status : **Answered**
 Chosen Option : **2**

Q.18 Prakash bought 2 items, paying the same price for each of them. He sold one item at a profit of 20% and the other item at a profit of 25%. What is the overall percentage profit he made?

- Ans
- 1. 37.5%
 - 2. 24.5%
 - 3. 16.5%
 - 4. 22.5%

Question ID : **26433050352**
 Status : **Answered**
 Chosen Option : **4**

Q.19 The speed of Ashu is 15 km/h more than the speed of Vishu. They start moving in the same direction at the same time, but initially Vishu is ahead of Ashu by a certain distance. If Ashu crosses Vishu 6 hours after they start moving, what is the initial distance between them?

- Ans**
- 1. 45 km
 - 2. 60 km
 - 3. 90 km
 - 4. 80 km

Question ID : 26433050083
 Status : Answered
 Chosen Option : 3

Q.20 If 25% discount is given on an article, then there will be a loss of 15%. If the article is sold at its marked price, then what will the profit percentage be? [Give your answer correct to 2 decimal places.]

- Ans**
- 1. 15.66%
 - 2. 12.66%
 - 3. 13.33%
 - 4. 10.22%

Question ID : 26433049574
 Status : Not Answered
 Chosen Option : --

Q.21 What should come in place of the question mark (?) in the following mathematical statement?

$$8^2 + 16^2 - 19^2 = ?^3 - 257$$

- Ans**
- 1. 9
 - 2. 2
 - 3. 6
 - 4. 8

Question ID : 26433050343
 Status : Answered
 Chosen Option : 3

Q.22 The radius of a sphere and that of the base of a cylinder are equal. The ratio of the radius of the base of the cylinder and the height of the cylinder is 3 : 4. What is the ratio of the volume of the sphere to that of the cylinder?

- Ans**
- 1. 27 : 64
 - 2. 1 : 2
 - 3. 1 : 1
 - 4. 9 : 16

Question ID : 26433050365
 Status : Answered
 Chosen Option : 3

Q.23 Sonu can do a work in 15 days, Monu can do it in 10 days, and Tipu can do it in 12 days. In how many days can Sonu, Monu and Tipu together complete the work?

- Ans**
- 1. 8 days
 - 2. 10 days
 - 3. 4 days
 - 4. 5 days

Question ID : 26433049336
 Status : Answered
 Chosen Option : 3

Q.24 A number, when subtracted from 3 times the second number, gives a result equal to $\frac{3}{4}$ of the first number. What is the ratio of the first number to the second number?

- Ans**
- 1. 11 : 6
 - 2. 12 : 7
 - 3. 9 : 5
 - 4. 10 : 7

Question ID : 26433050079
 Status : Answered
 Chosen Option : 2

Q.25 In a 100-m race, A beats B by 20 m and B beats C by 5 m. In the same race, A beats C by:

- Ans**
- 1. 26 m
 - 2. 22 m
 - 3. 25 m
 - 4. 24 m

Question ID : 26433050359
 Status : Answered
 Chosen Option : 3

Section : General Awareness

Q.1 Temperate grasslands are ideal for _____ cultivation.

- Ans**
- 1. grape
 - 2. apple
 - 3. cotton
 - 4. wheat

Question ID : 26433046851
 Status : Answered
 Chosen Option : 4

Q.2 Which of the following statements is INCORRECT?

- Ans 1. Metals are used in making cookware.
 2. Metals are used in the manufacture of automobiles.
 3. Living beings inhale metals during respiration.
 4. Metals are used in manufacturing jewellery.

Question ID : 26433047748
Status : Answered
Chosen Option : 3

Q.3 Bangladesh shares its borders with which of the following states of India?

- Ans 1. Nagaland
 2. Meghalaya
 3. Bihar
 4. Manipur

Question ID : 26433047805
Status : Answered
Chosen Option : 2

Q.4 Which of the following is a work by famous Indian author Khushwant Singh?

- Ans 1. A Suitable Boy
 2. Train to Pakistan
 3. The Guide
 4. Sacred Games

Question ID : 26433046985
Status : Answered
Chosen Option : 2

Q.5 Who was the first ruler of Ilbari dynasty (Delhi Sultanate)?

- Ans 1. Qutubuddin Aibak
 2. Ghiyasuddin Tughlaq
 3. Iltutmish
 4. Raziya Sultan

Question ID : 26433046857
Status : Answered
Chosen Option : 1

Q.6 The Indian constitution borrowed 'procedure of amending the constitution' from the constitution of _____.

- Ans 1. France
 2. South Africa
 3. United Kingdom
 4. Australia

Question ID : 26433046863
Status : Answered
Chosen Option : 3

Q.7 As per the 2011 census, what was the percentage of the urban population in India? (Provide an approximate range.)

- Ans
- 1. Between 30% and 35%
 - 2. Between 40% and 45%
 - 3. Between 10% and 15%
 - 4. Between 20% and 25%

Question ID : 26433047054
Status : Answered
Chosen Option : 4

Q.8 Which of the following was the capital of Mahajanapada Gandhara in 6th century BC?

- Ans
- 1. Hastinapur
 - 2. Mathura
 - 3. Taxila
 - 4. Varanasi

Question ID : 26433046981
Status : Answered
Chosen Option : 3

Q.9 What does 'L' stand for in the LPG Strategy of 1991?

- Ans
- 1. Legislative
 - 2. Landmark
 - 3. Liquid
 - 4. Liberalisation

Question ID : 26433046992
Status : Answered
Chosen Option : 4

Q.10 Which of the following peaks is at the highest altitude in India?

- Ans
- 1. Namcha Barwa
 - 2. Kamet
 - 3. Nanda Devi
 - 4. Makalu

Question ID : 26433047753
Status : Answered
Chosen Option : 3

Q.11 What was the main reason for the defeat of Sirajuddaulah at the Battle of Plassey?

- Ans
- 1. Britishers cut the food supplies of Sirajuddaulah forces compelling them to surrender.
 - 2. Forces led by commander Mir Jafar never fought the battle.
 - 3. Sirajuddaulah's prime minister misinformed the location of Britishers.
 - 4. Britishers knew the secret way to enter Sirajuddaulah's palace.

Question ID : 26433047758
Status : Answered
Chosen Option : 2

Q.12 Who was the Viceroy of India when Morley-Minto Reforms were introduced?

- Ans
- 1. Lord Linlithgow
 - 2. Lord Attlee
 - 3. Lord Minto
 - 4. Lord Wavell

Question ID : 26433047484
Status : Answered
Chosen Option : 3

Q.13 The Chera Panhara ritual is associated with:

- Ans
- 1. Baisakhi in Punjab
 - 2. Durga Puja in West Bengal
 - 3. Navratri in Gujarat
 - 4. Rath Yatra in Odisha

Question ID : 26433047746
Status : Answered
Chosen Option : 4

Q.14 The percentage of nitrogen in air is about _____ by volume.

- Ans
- 1. 76%
 - 2. 78%
 - 3. 82%
 - 4. 74%

Question ID : 26433047475
Status : Answered
Chosen Option : 2

Q.15 Which of the following is a tough, porous and black substance, and almost a pure form of carbon?

- Ans
- 1. Coke
 - 2. Bitumen
 - 3. Coal tar
 - 4. Coal gas

Question ID : 26433047749
Status : Answered
Chosen Option : 1

Q.16 'Eelakkaradi' is a tribal dance form of which Indian state?

- Ans
- 1. Goa
 - 2. Kerala
 - 3. Rajasthan
 - 4. Jharkhand

Question ID : 26433047470
Status : Answered
Chosen Option : 2

Q.17 What is the total duration of a hockey match as of April 2022?

- Ans 1. 60 minutes
 2. 70 minutes
 3. 80 minutes
 4. 50 minutes

Question ID : 26433047191
Status : Answered
Chosen Option : 2

Q.18 'SVANidhi se Samridधि' programme launched in 2022 is associated with the Ministry of _____.

- Ans 1. Finance
 2. Education
 3. Defence
 4. Housing and Urban Affairs

Question ID : 26433046843
Status : Answered
Chosen Option : 4

Q.19 In which of the following events did India win a gold medal in the Summer Olympics 2020 (played in 2021)?

- Ans 1. Javelin Throw
 2. Wrestling
 3. Weightlifting
 4. Badminton

Question ID : 26433047440
Status : Answered
Chosen Option : 1

Q.20 Gorakhpur is the headquarter of _____ Railway of India.

- Ans 1. North-Eastern
 2. Northern
 3. Eastern
 4. Western

Question ID : 26433046852
Status : Answered
Chosen Option : 1

Q.21 What is the stone-like disc seen at the top of the temple in Odisha and nearby district's Temple architecture called?

- Ans
- 1. Kalasha
 - 2. Antarala
 - 3. Amalaka
 - 4. Jagati

Question ID : 26433046847
Status : Not Answered
Chosen Option : --

Q.22 _____ was appointed the new Foreign Secretary of India in April 2022.

- Ans
- 1. Harsh Vardhan Shringla
 - 2. Meenakshi Lekhi
 - 3. Subrahmanyam Jaishankar
 - 4. Vinay Mohan Kwatra

Question ID : 26433046969
Status : Answered
Chosen Option : 1

Q.23 Who among the following has sung the famous Bollywood song 'Channa Mereya'?

- Ans
- 1. Neeti Mohan
 - 2. Arijit Singh
 - 3. Shreya Ghoshal
 - 4. Sukhbir

Question ID : 26433046986
Status : Answered
Chosen Option : 2

Q.24 Who among the following is the co-founder of Darpana Academy of Performing Arts?

- Ans
- 1. Pt. Birju Maharaj
 - 2. Uday Shankar
 - 3. Mallika Sarabhai
 - 4. Mrinalini Sarabhai

Question ID : 26433047762
Status : Not Answered
Chosen Option : --

Q.25 Abolition of Titles comes under:

- Ans
- 1. Cultural and Educational rights
 - 2. Right against Exploitation
 - 3. Right to Freedom
 - 4. Right to Equality

Question ID : 26433047764
Status : Answered
Chosen Option : 4

<https://www.freshersnow.com/>

Multi Tasking Non Technical Staff Havaladar CBIC and CBN Examination 2021

Roll Number	
Candidate Name	
Venue Name	
Exam Date	11/07/2022
Exam Time	1:00 PM - 2:30 PM
Subject	MTS Non technical and Havaladar Examination 2021

Section : **General English**

Q.1 Select the most appropriate option to substitute the underlined segment in the given sentence. If there is no need to substitute it, select 'No substitution required'.

It is a story about Mr. and Mrs. Ansari, who had look to rent an apartment in the city.

- Ans
- 1. is looking to
 - 2. No substitution required
 - 3. were looking for
 - 4. were looking to

Question ID : **26433051186**
 Status : **Answered**
 Chosen Option : **3**

Q.2 Select the most appropriate synonym of the given word.

Innate

- Ans
- 1. Learnt
 - 2. Inured
 - 3. Inane
 - 4. Inherent

Question ID : **26433051737**
 Status : **Answered**
 Chosen Option : **1**

Q.3 Select the most appropriate meaning of the underlined idiom in the given sentence.

It was raining cats and dogs when I reached there.

- Ans
- 1. Lots of appreciation
 - 2. To rain very heavily
 - 3. Not raining at all
 - 4. Place full of animals

Question ID : **26433050725**
 Status : **Answered**
 Chosen Option : **2**

Q.4 Select the most appropriate meaning of the given idiom.

Ignorance is bliss

- Ans
- 1. To gain attention and be the topic of conversation
 - 2. To remain ignorant of things that may cause stress
 - 3. To want something that has been denied
 - 4. To have rage underneath a calm expression

Question ID : 26433051820
Status : Answered
Chosen Option : 4

Q.5 Select the option that can be used as a one-word substitute for the given group of words.

The expression of a wish that misfortune or doom befall a person

- Ans
- 1. Curse
 - 2. Praise
 - 3. Blessing
 - 4. Oath

Question ID : 26433051250
Status : Answered
Chosen Option : 1

Q.6 The following sentence has been divided into parts. One of them may contain an error. Select the part that contains the error from the given options. If you don't find any error, mark 'No error' as your answer.

The students looked confused, / so the teacher / explain the topic again.

- Ans
- 1. explain the topic again
 - 2. so the teacher
 - 3. No error
 - 4. The students looked confused

Question ID : 26433051799
Status : Answered
Chosen Option : 1

Q.7 Select the most appropriate ANTONYM of the underlined word in the given sentence.

It is important to verify the credibility of an online master's program.

- Ans
- 1. serenity
 - 2. improbability
 - 3. integrity
 - 4. accuracy

Question ID : 26433050808
Status : Answered
Chosen Option : 2

Q.8 Select the most appropriate option to fill in the blank.

The girl ran into the house to get some _____ of bread, cold potatoes and other such morsels as were suitable for the fowls.

- Ans
- 1. heaps
 - 2. shells
 - 3. crumbs
 - 4. bars

Question ID : 26433051390
Status : Answered
Chosen Option : 3

Q.9 Select the most appropriate option to fill in the blank.

Your district is exposed to _____ and also to destructive floods.

- Ans
- 1. draught
 - 2. dot
 - 3. drought
 - 4. draft

Question ID : 26433050678
Status : Marked For Review
Chosen Option : 2

Q.10 Select the correctly spelt word.

- Ans
- 1. Monotonous
 - 2. Meticulous
 - 3. Narrative
 - 4. Exilerate

Question ID : 26433051128
Status : Answered
Chosen Option : 3

Q.11 Select the correctly spelt word.

- Ans
- 1. Privelege
 - 2. Indispensable
 - 3. Persaverance
 - 4. Inadvertant

Question ID : 26433051309
Status : Answered
Chosen Option : 2

Q.12 Select the most appropriate option to fill in the blank.

Officials said thousands of office-goers were _____ the Metro, and the trains were running full during peak hours.

- Ans
- 1. fasting
 - 2. running
 - 3. taking
 - 4. adapting

Question ID : 26433051745
Status : Answered
Chosen Option : 4

Q.13 Select the option that will improve the underlined part of the given sentence. In case no improvement is needed, select 'No improvement required'.

Your doctor will recommend a treatment based to the types of infection.

- Ans
- 1. basing of the type
 - 2. bases to the types
 - 3. No improvement required
 - 4. based on the type

Question ID : 26433050884
Status : Answered
Chosen Option : 4

Q.14 Select the most appropriate ANTONYM of the given word.

Frail

- Ans
- 1. Unreliable
 - 2. Fresh
 - 3. Robust
 - 4. Fragile

Question ID : 26433051306
Status : Answered
Chosen Option : 3

Q.15 Select the most appropriate synonym of the given word.

Luxuriant

- Ans
- 1. Meagre
 - 2. Sparse
 - 3. Flourishing
 - 4. Combative

Question ID : 26433051816
Status : Answered
Chosen Option : 3

Q.16 Select the most appropriate option to fill in the blank.

Sun Tzu says that _____ the enemy without battle requires greater skill than winning on the battlefield.

- Ans
- 1. defeated
 - 2. defeating
 - 3. in defeating
 - 4. defeat

Question ID : 26433051598
 Status : Answered
 Chosen Option : 2

Q.17 Select the option that can be used as a one-word substitute for the given group of words.

A place for ammunition and weapons

- Ans
- 1. Arena
 - 2. Abattoir
 - 3. Arsenal
 - 4. Aviary

Question ID : 26433050969
 Status : Answered
 Chosen Option : 3

Q.18 Parts of the following sentence have been given as options. One of them may contain an error. Select the part that contains the error from the given options. If you don't find any error, mark 'No error' as your answer.

One of the most important tasks in agriculture is turning the soil and loosening it.

- Ans
- 1. No error
 - 2. the soil and loosening it
 - 3. in agriculture is turning
 - 4. One of the most important tasks

Question ID : 26433051107
 Status : Answered
 Chosen Option : 1

Q.19 The following sentence has been divided into parts. One of them may contain an error. Select the part that contains the error from the given options. If you don't find any error, mark 'No error' as your answer.

As a game, astrology and / its predictions of fate / and personality can being fun.

- Ans
- 1. No error
 - 2. its predictions of fate
 - 3. and personality can being fun
 - 4. As a game, astrology and

Question ID : 26433050977
 Status : Answered
 Chosen Option : 3

Q.20 Select the option that can be used as a one-word substitute for the given group of words.

Property left to someone by a will

- Ans 1. Prophecy
 2. Legacy
 3. Alimony
 4. Windfall

Question ID : 26433051814

Status : Answered

Chosen Option : 2

Comprehension:

In the following passage, some words have been deleted. Read the passage carefully and select the most appropriate option to fill in each blank.

More (1) _____ half the States (2) _____ Union Territories, including Covid-19 hotspots Maharashtra and Tamil Nadu, have not yet decided on a date (3) _____ reopening schools, the Centre was told at a meeting. The remaining States are split between those (4) _____ to reopen in August, (5) _____ include Delhi and Bihar, and others who will not open until September, such as Andhra Pradesh, Karnataka and Kerala.

SubQuestion No : 21

Q.21 Select the most appropriate option to fill in blank number 1.

- Ans 1. where
 2. than
 3. then
 4. when

Question ID : 26433051730

Status : Answered

Chosen Option : 2

Comprehension:

In the following passage, some words have been deleted. Read the passage carefully and select the most appropriate option to fill in each blank.

More (1) _____ half the States (2) _____ Union Territories, including Covid-19 hotspots Maharashtra and Tamil Nadu, have not yet decided on a date (3) _____ reopening schools, the Centre was told at a meeting. The remaining States are split between those (4) _____ to reopen in August, (5) _____ include Delhi and Bihar, and others who will not open until September, such as Andhra Pradesh, Karnataka and Kerala.

SubQuestion No : 22

Q.22 Select the most appropriate option to fill in blank number 2.

- Ans 1. though
 2. yet
 3. or
 4. and

Question ID : 26433051731

Status : Answered

Chosen Option : 4

Comprehension:

In the following passage, some words have been deleted. Read the passage carefully and select the most appropriate option to fill in each blank.

More (1) _____ half the States (2) _____ Union Territories, including Covid-19 hotspots Maharashtra and Tamil Nadu, have not yet decided on a date (3) _____ reopening schools, the Centre was told at a meeting. The remaining States are split between those (4) _____ to reopen in August, (5) _____ include Delhi and Bihar, and others who will not open until September, such as Andhra Pradesh, Karnataka and Kerala.

SubQuestion No : 23

Q.23 Select the most appropriate option to fill in blank number 3.

- Ans
- 1. at
 - 2. since
 - 3. for
 - 4. from

Question ID : 26433051732
Status : Answered
Chosen Option : 3

Comprehension:

In the following passage, some words have been deleted. Read the passage carefully and select the most appropriate option to fill in each blank.

More (1) _____ half the States (2) _____ Union Territories, including Covid-19 hotspots Maharashtra and Tamil Nadu, have not yet decided on a date (3) _____ reopening schools, the Centre was told at a meeting. The remaining States are split between those (4) _____ to reopen in August, (5) _____ include Delhi and Bihar, and others who will not open until September, such as Andhra Pradesh, Karnataka and Kerala.

SubQuestion No : 24

Q.24 Select the most appropriate option to fill in blank number 4.

- Ans
- 1. willing
 - 2. will
 - 3. wills
 - 4. willed

Question ID : 26433051733
Status : Answered
Chosen Option : 1

Comprehension:

In the following passage, some words have been deleted. Read the passage carefully and select the most appropriate option to fill in each blank.

More (1) _____ half the States (2) _____ Union Territories, including Covid-19 hotspots Maharashtra and Tamil Nadu, have not yet decided on a date (3) _____ reopening schools, the Centre was told at a meeting. The remaining States are split between those (4) _____ to reopen in August, (5) _____ include Delhi and Bihar, and others who will not open until September, such as Andhra Pradesh, Karnataka and Kerala.

SubQuestion No : 25

Q.25 Select the most appropriate option to fill in blank number 5.

- Ans 1. whom
 2. which
 3. whose
 4. what

Question ID : 26433051734
 Status : Answered
 Chosen Option : 2

Section : **General Intelligence and Reasoning**

Q.1 In a certain code language, 591 means 'sky is blue', 256 means 'sea is deep', and 609 means 'sea looks blue'. Which number is the code for 'blue' in that language?

- Ans 1. 0
 2. 9
 3. 1
 4. 5

Question ID : 26433048496
 Status : Answered
 Chosen Option : 2

Q.2 Which two signs should be interchanged to make the following equation correct?

$$18 - 60 \div 45 + 6 \times 128 = 138$$

- Ans 1. + and ×
 2. + and ÷
 3. × and -
 4. - and =

Question ID : 26433049131
 Status : Answered
 Chosen Option : 1

Q.3 Z, Y, X, W and V are sitting on a sofa facing north. Z is sitting immediately next to Y. X is sitting immediately next to W. V is sitting on the leftmost seat. X is at the second position from the right. Z and X are sitting together. Who is sitting at the middle position?

- Ans 1. Z
 2. X
 3. U
 4. W

Question ID : 26433048497
Status : Answered
Chosen Option : 1

Q.4 Select the option that is related to the fifth alphanumeric-cluster in the same way as the second alphanumeric-cluster is related to the first alphanumeric-cluster and the fourth alphanumeric-cluster is related to the third alphanumeric-cluster.

I81 : K121 :: D16 : F36 :: O225 : ?

- Ans 1. P256
 2. P265
 3. Q289
 4. R324

Question ID : 26433048492
Status : Answered
Chosen Option : 3


<https://www.freshersnow.com/>

Q.5 Select the option in which the given figure is embedded. (Rotation is not allowed)



Ans

✓ 1.




✗ 2.



✗ 3.



✗ 4.



Question ID : 26433049060
 Status : Answered
 Chosen Option : 1

Q.6 Which two digits should be interchanged in the given equation to make it mathematically correct?

$$20 \div 7 \times 2 + 5 - 3 = 12$$

Ans 1. 2 and 3

2. 7 and 5

3. 7 and 2

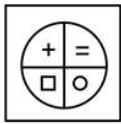
4. 2 and 5

Question ID : 26433048360

Status : Answered

Chosen Option : 2

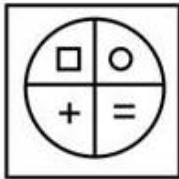
Q.7 Select the correct mirror image of the given figure when the mirror is placed at line AB as shown.



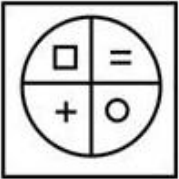
A  B

Ans

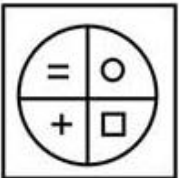
1.



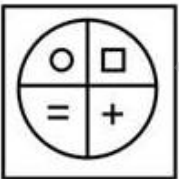
2.



3.



4.



Question ID : 26433048486

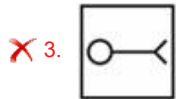
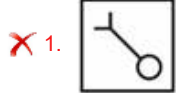
Status : Answered

Chosen Option : 1

Q.8 Select the figure from among the given options that can replace the question mark (?) in the following series.



Ans

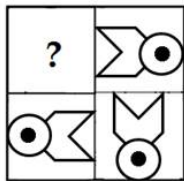


Question ID : 26433048683

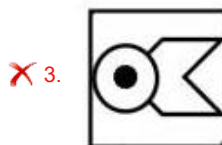
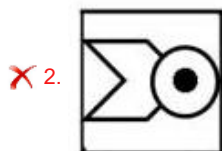
Status : Answered

Chosen Option : 4

Q.9 Select the figure from the options that can replace the question mark (?) and complete the given pattern.



Ans



Question ID : 26433049138

Status : Answered

Chosen Option : 1

Q.10 Read the given statements and conclusions carefully. Assuming that the information given in the statements is true, even if it appears to be at variance with commonly known facts, decide which of the given conclusions logically follow(s) from the statements.

Statements:

- I. Some X are B.
- II. Some Y are X.

Conclusions:

- I. Some B are Y.
- II. Some B are X.
- III. Some X are Y.

- Ans**
- 1. Only conclusions II and III follow
 - 2. Only conclusion II follows
 - 3. Only conclusion III follows
 - 4. Only conclusions I and II follow

Question ID : 26433048679

Status : Answered

Chosen Option : 1

Q.11 Seven girls — A, B, C, D, E, F and G are sitting in a straight row, facing the North (but not necessarily in the same order). D sits third to the right of C, who sits at second position from the left end. E is the immediate neighbour of B and C. G sits to the left of C. A sits at second position from the right end. Which of the following statements is true?

- Ans**
- 1. F sits at the extreme left end.
 - 2. B sits exactly between D and A.
 - 3. F sits at the extreme right end.
 - 4. E sits to the immediate left of D.

Question ID : 26433048352

Status : Answered

Chosen Option : 3

Q.12 In a certain code language, 'TRAIN' is coded as '14911820' and 'POLIT' is coded as '209121516'. How will 'SHNKE' be coded in that language?

- Ans**
- 1. 51114819
 - 2. 5114819
 - 3. 51114919
 - 4. 51411819

Question ID : 26433048822

Status : Answered

Chosen Option : 1

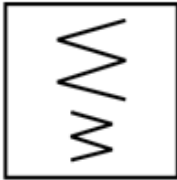
Q.13 Select the correct mirror image of the given combination when the mirror is placed at line AB as shown.



A  B

Ans

✗ 1.



✗ 2.



✓ 3.



✗ 4.



Question ID : 26433048090
 Status : Answered
 Chosen Option : 3

Q.14 Select the option that will replace the question mark (?) in the given series.

48, 52, 61, 77, 102, ?

Ans ✗ 1. 148

✗ 2. 238

✓ 3. 138

✗ 4. 128

Question ID : 26433048356
 Status : Answered
 Chosen Option : 3

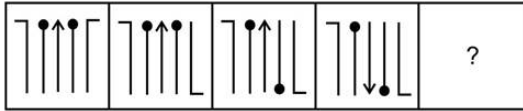
Q.15 Select the option in which the words share the same relationship as that shared by the given pair of words.

Desert : Sand

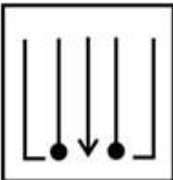
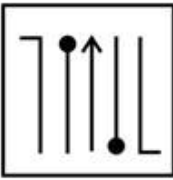
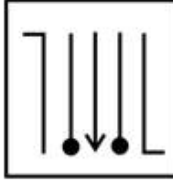
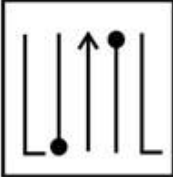
- Ans** 1. Sea : Water
 2. River : Ship
 3. Mud : Forest
 4. Respiration : Air

Question ID : 26433049091
 Status : Answered
 Chosen Option : 1

Q.16 Select the figure from among the given options that can replace the question mark (?) in the following series.



Ans

1. 
2. 
3. 
4. 

<https://www.freshersnow.com/>

Question ID : 26433048509
 Status : Answered
 Chosen Option : 3

Q.17 In a certain code language, 'BOOK' is coded as '47', and 'PEN' is coded as '38'. How will 'NOTEPAD' be coded in that language?

- Ans
- 1. 84
 - 2. 82
 - 3. 75
 - 4. 80

Question ID : 26433048249
 Status : Answered
 Chosen Option : 2

Q.18 Select the option in which the pair of letter-clusters share the same relationship as that shared by the given pair of letter-clusters.

TANK : NATK :: ?

- Ans
- 1. KORB : ROBK
 - 2. LEFT : ELFT
 - 3. PING : NIPG
 - 4. SAMP : AMSP

Question ID : 26433048676
 Status : Answered
 Chosen Option : 3

Q.19 Select the option that is related to the fifth number in the same way as the second number is related to the first number and fourth number is related to third number.

63 : 36 :: 94 : 49 :: 81 : ?

- Ans
- 1. 18
 - 2. 54
 - 3. 36
 - 4. 44

Question ID : 26433048666
 Status : Answered
 Chosen Option : 1

Q.20 Select the letter-cluster from among the given options that can replace the question mark (?) in the following series.

ZC, XF, VI, TL, ?

- Ans
- 1. RO
 - 2. RQ
 - 3. LQ
 - 4. KO

Question ID : 26433049114
 Status : Answered
 Chosen Option : 1

Q.21 Seven friends A, B, C, D, E, F and G study in the same college. F and G are second eldest and eldest respectively, between them. E is elder than only A and C. D is the fourth eldest. A is not the youngest. How many friends are older than E?

- Ans
- 1. 2
 - 2. 1
 - 3. 3
 - 4. 4

Question ID : 26433048353
 Status : Answered
 Chosen Option : 4

Q.22 दिए गए कथन और निष्कर्षों को ध्यानपूर्वक पढ़ें। यह मानते हुए कि कथनों में दी गई जानकारी सत्य है, भले ही वह सामान्य रूप से ज्ञात तथ्यों से भिन्न प्रतीत होती हो, तय करें कि दिए गए निष्कर्षों में से कौन सा/से निष्कर्ष तार्किक रूप से कथनों का अनुसरण करता/ते है/हैं।

कथन:

- I. कोई भी F, A नहीं है।
- II. कोई भी A, K नहीं है।

निष्कर्ष:

- I. कुछ F's, K नहीं हैं।
- II. कुछ K's, A नहीं हैं।

- Ans
- 1. निष्कर्ष I और II दोनों अनुसरण करते हैं।
 - 2. केवल निष्कर्ष I अनुसरण करता है।
 - 3. केवल निष्कर्ष II अनुसरण करता है।
 - 4. न तो निष्कर्ष I और न ही निष्कर्ष II अनुसरण करता है।

Question ID : 26433049053
 Status : Answered
 Chosen Option : 4

Q.23 Numbers given on the left side of (::) are related with each other by some Logic/Rule/Relation. Select the missing number pair on the right side of (::) from the given alternatives based on the same Logic/Rule/Relation.

1331 : 11 :: ?

- Ans
- 1. 2197 : 13
 - 2. 10 : 1000
 - 3. 3375 : 14
 - 4. 1728 : 15

Question ID : 26433049042
 Status : Answered
 Chosen Option : 1

Q.24 If JPG = 19 and PNG = 23, then TIF = ?

- Ans 1. 23
 2. 20
 3. 15
 4. 13

Question ID : 26433049095
 Status : Answered
 Chosen Option : 1

Q.25 Select the option that is related to the fifth number in the same way as the second number is related to the first number and the fourth number is related to the third number.

3462 : 2250 :: 4424 : 3212 :: 2424 : ?

- Ans 1. 1221
 2. 1122
 3. 2211
 4. 1212

Question ID : 26433048503
 Status : Answered
 Chosen Option : 4

Section : Numerical Aptitude

Q.1 ₹4,500 is divided among four friends in the ratio of $\frac{1}{6} : \frac{1}{4} : \frac{1}{3} : \frac{1}{2}$. What is the amount received by the person who got the smallest share?

- Ans 1. ₹1,100
 2. ₹600
 3. ₹500
 4. ₹800

Question ID : 26433049830
 Status : Answered
 Chosen Option : 2

Q.2 A hemispherical bowl of radius 30 cm is filled with water by using a cylindrical glass. If the water from the cylindrical glass is poured 72 times to fill the bowl completely and the height of the glass is 10 cm, then what is the base radius of the cylindrical glass?

- Ans 1. 7.5 cm
 2. 8 cm
 3. 5 cm
 4. 6 cm

Question ID : 26433050092
 Status : Answered
 Chosen Option : 3

Q.3 Reema went to a shopping mall to buy a gift. She saw a shop giving successive discounts of 50% and 30%, and from there selected a gift whose MRP was ₹1,700. How much did Reema have to pay to buy the gift?

- Ans**
- 1. ₹255
 - 2. ₹850
 - 3. ₹340
 - 4. ₹595

Question ID : 26433050453
 Status : Answered
 Chosen Option : 4

Q.4 A batsman scored 120 runs, which included 4 sixes and 6 fours. What percentage of his total score did he make by running between the wickets (runs that were scored only by running between the wickets and not by hitting fours and sixes)?

- Ans**
- 1. 30%
 - 2. 50%
 - 3. 60%
 - 4. 40%

Question ID : 26433050450
 Status : Answered
 Chosen Option : 3

Q.5 Find the smallest number which when divided by 19 and 23 gives remainders of 13 and 17, respectively.

- Ans**
- 1. 419
 - 2. 429
 - 3. 431
 - 4. 437

Question ID : 26433050370
 Status : Answered
 Chosen Option : 3

Q.6 A solid copper sphere of radius 6 cm is melted and redrawn into a wire, whose radius of cross-section is 8 cm. Find the length of the wire.

- Ans**
- 1. 9 cm
 - 2. 2.25 cm
 - 3. 4.5 cm
 - 4. 6 cm

Question ID : 26433049541
 Status : Answered
 Chosen Option : 3

Q.7 The average age of a husband and his wife 3 years ago was 39 years. The average age of the husband, wife and their child 2 years hence will be 34 years. Find the present age of the child.

- Ans**
- 1. 12 years
 - 2. 16 years
 - 3. 15 years
 - 4. 18 years

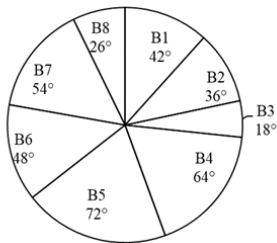
Question ID : **26433049521**
 Status : **Answered**
 Chosen Option : **1**

Q.8 The selling price of an article is four times of its cost price. If the selling price is reduced by ₹300, then the profit becomes 250%. What is the cost price of the article?

- Ans**
- 1. ₹400
 - 2. ₹450
 - 3. ₹800
 - 4. ₹600

Question ID : **26433049998**
 Status : **Answered**
 Chosen Option : **4**

Q.9 The following pie chart gives the measures of the central angles of the sectors that reflect the number of questions in each of 8 different books with respect to the total number of questions in these 8 books taken together.



If the number of questions in the books B3 and B6 taken together is 165, then what is the total number of questions in the 8 books taken together?

- Ans**
- 1. 800
 - 2. 850
 - 3. 750
 - 4. 900

Question ID : **26433050017**
 Status : **Answered**
 Chosen Option : **4**

Q.10 100 m की दौड़ में A ने B को 10 m से हरा दिया। 100 m की दौड़ में B ने C को 10 m से हरा दिया। 100 m की दौड़ में A, C को कितनी दूरी से हराएगा?

- Ans**
- 1. 19 m
 - 2. 21 m
 - 3. 18 m
 - 4. 20 m

Question ID : **26433049820**
 Status : **Answered**
 Chosen Option : **1**

Q.11 The marks obtained by 5 children in a test are as follows:12, 14, 8, 10 and 16. What is the average marks obtained by these 5 children?

- Ans**
- 1. 11
 - 2. 14
 - 3. 10
 - 4. 12

Question ID : **26433050073**
 Status : **Answered**
 Chosen Option : **4**

Q.12 In a mixture, water and milk are in the ratio of 2 : 3. What is the amount of water that is to be added to 20 kg of this mixture to make the ratio of water and milk in the new mixture 1 : 1?

- Ans**
- 1. 3 kg
 - 2. 2 kg
 - 3. 4 kg
 - 4. 5 kg

Question ID : **26433050448**
 Status : **Answered**
 Chosen Option : **3**

Q.13 If a sum triples in 4 years at simple interest, find the time that it would take to become 5 times itself at the same rate of interest.

- Ans**
- 1. 6 years
 - 2. 8 years
 - 3. 5 years
 - 4. 3 years

Question ID : **26433050382**
 Status : **Answered**
 Chosen Option : **2**

Q.14 The perimeter of a square is 36 cm. What is the length of each side of this square?

- Ans**
- 1. 9 cm
 - 2. 6 cm
 - 3. 8 cm
 - 4. 12 cm

Question ID : 26433050009
Status : Answered
Chosen Option : 1

Q.15 Train P crosses train Q completely in 45 seconds, while running in opposite directions. The lengths of train P and train Q are 1200 metres and 1500 metres, respectively. The speed of train Q is 144 km/h. In how much time can train P cross an 1800-metre long platform?

- Ans**
- 1. 180 seconds
 - 2. 175 seconds
 - 3. 120 seconds
 - 4. 150 seconds

Question ID : 26433049696
Status : Answered
Chosen Option : 4

Q.16 If 20 men can complete a piece of work in 18 days working 5 hours per day, in how many days can 25 men complete it, working 6 hours per day?

- Ans**
- 1. 10 days
 - 2. 13 days
 - 3. 11 days
 - 4. 12 days

Question ID : 26433050236
Status : Answered
Chosen Option : 4

Q.17 What is the value of $[0.7 \times 0.4 \div (0.28 - 0.2 \times 0.3) + 1.2 \times 1.6]$?

- Ans
- ✓ 1. $\frac{878}{275}$
 - ✗ 2. $\frac{1161}{550}$
 - ✗ 3. $\frac{1273}{550}$
 - ✗ 4. $\frac{971}{275}$

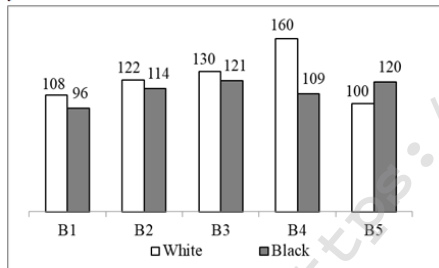
Question ID : 26433050013
 Status : Answered
 Chosen Option : 1

Q.18 What is the approximate rate of simple interest per annum, if a sum of money becomes 6 times of itself in 15 years?

- Ans
- ✗ 1. 30%
 - ✗ 2. 2.5%
 - ✓ 3. 33.33%
 - ✗ 4. 25%

Question ID : 26433050456
 Status : Answered
 Chosen Option : 3

Q.19 The following bar chart shows the numbers of white and black cars sold of 5 different brands in a city during a given year.



X = Average number of black cars sold per brand.
 Y = Average number of white cars sold per brand.
 What is the value of $Y - X$?

- Ans
- ✗ 1. 20
 - ✗ 2. 18
 - ✓ 3. 12
 - ✗ 4. 16

Question ID : 26433049841
 Status : Answered
 Chosen Option : 3

Q.20 The following table shows the number of watches of 5 brands sold by two showrooms.

	Showroom 1	Showroom 2
Brand 1	60	35
Brand 2	55	75
Brand 3	75	50
Brand 4	48	62
Brand 5	52	38

M = per brand average number of watches sold from Showroom 1

What is the ratio of the number of watches of Brand 3 sold from Showroom 2 to M?

- Ans**
- 1. 27 : 31
 - 2. 28 : 37
 - 3. 25 : 29
 - 4. 26 : 33

Question ID : 26433049715
 Status : Answered
 Chosen Option : 3

Q.21 The lengths of the three sides of a triangle are in the ratio of 2 : 2 : 3. If the perimeter of the triangle is 42 cm, then what is the length of the largest side?

- Ans**
- 1. 12 cm
 - 2. 18 cm
 - 3. 20 cm
 - 4. 15 cm

Question ID : 26433049706
 Status : Answered
 Chosen Option : 2

Q.22 The price of a certain item is increased by 4%. If the price of the item after the increase is ₹832, then what was the original price of the item?

- Ans**
- 1. ₹800
 - 2. ₹812
 - 3. ₹900
 - 4. ₹940

Question ID : 26433049450
 Status : Answered
 Chosen Option : 1

Q.23 If an article is sold at a 6% profit instead of a 6% loss, the seller gets ₹60.72 more. Find the CP of the article?

- Ans
- ✓ 1. ₹506
 - ✗ 2. ₹606
 - ✗ 3. ₹572
 - ✗ 4. ₹672

Question ID : 26433050376
 Status : Answered
 Chosen Option : 1

Q.24

What is the value of $\frac{\frac{1}{2} \times \frac{1}{24} \div \frac{1}{36} + \frac{1}{48} - \frac{1}{60}}{\frac{1}{12} + \frac{1}{24} + \frac{1}{36} \times \frac{1}{6}}$?

- Ans
- ✗ 1. $\frac{1841}{119}$
 - ✓ 2. $\frac{1629}{280}$
 - ✗ 3. $\frac{1131}{124}$
 - ✗ 4. $\frac{733}{145}$

Question ID : 26433049839
 Status : Answered
 Chosen Option : 2

Q.25 J_1 can do a piece of work alone in 10 days, J_2 can do the same work alone in 12 days, while J_3 can do it alone in 15 days. They work together and complete the work, and receive a total of ₹2,250 for doing the work. What is the difference in the shares of J_1 and J_3 ?

- Ans
- ✗ 1. ₹450
 - ✗ 2. ₹400
 - ✓ 3. ₹300
 - ✗ 4. ₹350

Question ID : 26433049793
 Status : Answered
 Chosen Option : 3

Q.1 Who among the following was one of the founders of the Deccan Education Society (1884)?

- Ans
- 1. Dadoba Pandurang
 - 2. V R Shinde
 - 3. Tulsi Ram
 - 4. G G Agarkar

Question ID : 26433047856
Status : Answered
Chosen Option : 1

Q.2 Who became the Chief Minister of Punjab after the 2022 state elections?

- Ans
- 1. Bhagwant Mann
 - 2. Sukhbir Singh Badal
 - 3. Charanjit Singh Channi
 - 4. Raghav Chadha

Question ID : 26433047844
Status : Answered
Chosen Option : 1

Q.3 Who among the following founded the Mohammedan Anglo-Oriental college?

- Ans
- 1. Sri Aurobindo
 - 2. Mohammad Ali Jinnah
 - 3. Khan Abdul Ghaffar Khan
 - 4. Sir Syed Ahmad Khan

Question ID : 26433047234
Status : Answered
Chosen Option : 4

Q.4 One Astronomical Unit and one Parsec are units of _____.

- Ans
- 1. current
 - 2. mass
 - 3. length
 - 4. volume

Question ID : 26433047098
Status : Answered
Chosen Option : 2

Q.5 _____ was the first Indian woman to become the president of the Indian National Congress.

- Ans 1. Sarojini Naidu
 2. Aruna Asaf Ali
 3. Sucheta Kripalani
 4. Ashalata Sen

Question ID : 26433047408
Status : Answered
Chosen Option : 1

Q.6 Sonal Mansingh was awarded the Sangeet Natak Akademi Award in 1987. She is a trained _____ dancer.

- Ans 1. Manipuri
 2. Kuchipudi
 3. Odissi
 4. Bihu

Question ID : 26433047412
Status : Answered
Chosen Option : 3

Q.7 As per Census 2011, what is the female literacy rate of India (provide an approximate range)?

- Ans 1. 80-89%
 2. 70-79%
 3. 60-69%
 4. 50-59%

Question ID : 26433046929
Status : Answered
Chosen Option : 3

Q.8 Which cultural festival of India held at Shilpgram, is a ten day feast of classical dances, folk art and light music?

- Ans 1. Taj Mahotsav
 2. Natyanjali Utsav
 3. Nishagandhi Festival
 4. Mamallapuram Utsav

Question ID : 26433047096
Status : Answered
Chosen Option : 2

Q.9 Which of the following is NOT a part of Buddhist stupas?

- Ans 1. Harmika
 2. Gopura
 3. Anda
 4. Chhatra

Question ID : 26433047772
Status : Answered
Chosen Option : 3

Q.10 With which of the following countries does India NOT share a land border?

- Ans 1. Bangladesh
 2. China
 3. Myanmar
 4. Sri Lanka

Question ID : 26433047480
Status : Answered
Chosen Option : 4

Q.11 Which ancient Indian sport pits crowds of brave young men against angry bulls?

- Ans 1. Kho-Kho
 2. Jallikattu
 3. Kabaddi
 4. Mallakhamb

Question ID : 26433046866
Status : Answered
Chosen Option : 2

Q.12 In which year was the Border Roads Organisation established?

- Ans 1. 1954
 2. 1966
 3. 1960
 4. 1958

Question ID : 26433047777
Status : Answered
Chosen Option : 4

Q.13 The Pradhan Mantri Garib Kalyan Anna Yojana has been approved extension by the Union Cabinet till:

- Ans 1. January 2023
 2. October 2022
 3. September 2022
 4. November 2022

Question ID : 26433047768
Status : Answered
Chosen Option : 3

Q.14 Pt Hariprasad Chaurasia is a well-known:

- Ans 1. tabla-player
 2. sitarist
 3. vocalist
 4. flautist

Question ID : 26433047861
Status : Answered
Chosen Option : 1

Q.15 Since which year did the IPL start?

- Ans 1. 2010
 2. 2007
 3. 2008
 4. 2009

Question ID : 26433047866
Status : Answered
Chosen Option : 3

Q.16 As of 2021, Which is the only country in the world that has both tigers and lions?

- Ans 1. Tanzania
 2. India
 3. Mexico
 4. South Africa

Question ID : 26433047403
Status : Answered
Chosen Option : 2

Q.17 Rajya Sabha is chaired by _____ whereas Lok Sabha is chaired by _____.

- Ans 1. President, Prime Minister
 2. Vice President, Speaker
 3. Speaker, Vice-President
 4. Vice - President, Prime minister

Question ID : 26433047788
Status : Answered
Chosen Option : 2

Q.18 Which of the following is NOT a polar animal?

- Ans 1. Ringed seals
 2. Musk oxen
 3. Lemur
 4. Walrus

Question ID : 26433047776
Status : Answered
Chosen Option : 2

Q.19 Which of the following statements is/are correct?
I. Amoeba ingests its food with the help of pseudopodia.
II. Amoeba constantly changes its shape and position.

- Ans
- 1. Only II
 - 2. Neither I nor II
 - 3. Only I
 - 4. Both I and II

Question ID : 26433047225
Status : Answered
Chosen Option : 4

Q.20 In 1526, Babur defeated the Sultan of Delhi, Ibrahim Lodi, at _____ and captured Delhi and Agra.

- Ans
- 1. Mathura
 - 2. Malwa
 - 3. Lahore
 - 4. Panipat

Question ID : 26433047782
Status : Answered
Chosen Option : 4

Q.21 Which of the following cell organelles is also known as the 'suicide bag' of a cell?

- Ans
- 1. Lysosome
 - 2. Ribosome
 - 3. Vacuole
 - 4. Mitochondria

Question ID : 26433047399
Status : Answered
Chosen Option : 1

Q.22 The Parliament while in session begins with a _____.

- Ans
- 1. zero hour
 - 2. recess
 - 3. question hour
 - 4. calling attention motion

Question ID : 26433047414
Status : Answered
Chosen Option : 4

Q.23 Kuchipudi is a classical dance form of which Indian state?

- Ans 1. Kerala
 2. Karnataka
 3. Tamil Nadu
 4. Andhra Pradesh

Question ID : 26433047220
Status : Answered
Chosen Option : 4

Q.24 Which of the following is an asset that the borrower owns (such as land, building, vehicle, livestock, deposits with banks) and uses this as a guarantee to a lender until the loan is repaid?

- Ans 1. Frills
 2. Lease
 3. Collateral
 4. Credit

Question ID : 26433047867
Status : Answered
Chosen Option : 3

Q.25 Who is the author of 'Anna Karenina'?

- Ans 1. Gabriel Garcia Marquez
 2. EM Forster
 3. George Eliot
 4. Leo Tolstoy

Question ID : 26433047860
Status : Answered
Chosen Option : 1

Multi Tasking Non Technical Staff Havaladar CBIC and CBN Examination 2021

Roll Number	
Candidate Name	
Venue Name	
Exam Date	11/07/2022
Exam Time	5:00 PM - 6:30 PM
Subject	MTS Non technical and Havaladar Examination 2021

Section : **General English**

Q.1 Select the option that can be used as a one-word substitute for the given group of words.

One who is unable to pay his debts

- Ans
- 1. Debonair
 - 2. Novice
 - 3. Fatalist
 - 4. Bankrupt

Question ID : **26433050596**
Status : **Answered**
Chosen Option : **4**

Q.2 Select the most appropriate synonym of the given word.

Dissolve

- Ans
- 1. Emerge
 - 2. Consolidate
 - 3. Fade
 - 4. Repair

Question ID : **26433050991**
Status : **Answered**
Chosen Option : **4**

Q.3 Select the option that will improve the underlined part of the given sentence. In case no improvement is needed, select 'No improvement required'.

Adam and I are planning a grand party at our office.

- Ans
- 1. me are planning
 - 2. I is planning
 - 3. me is planning
 - 4. No improvement required

Question ID : **26433050909**
Status : **Answered**
Chosen Option : **2**

Q.4 Select the most appropriate meaning of the underlined idiom in the given sentence.

Samuel accused Jane of stealing the thunder on the capital punishment issue.

- Ans 1. Get praise for doing something before someone
 2. Go on a futile search
 3. Fail miserably at something
 4. Pass wrong judgments

Question ID : 26433050786
Status : Answered
Chosen Option : 1

Q.5 Select the option that will improve the underlined part of the given sentence. In case no improvement is needed, select 'No improvement required'.

I would agreed that these programs can be good for learning things that nobody else will teach you.

- Ans 1. I agree that these programs
 2. No improvement required
 3. I will have agreed that these programs
 4. I will have to agreed that these program

Question ID : 26433051622
Status : Answered
Chosen Option : 1

Q.6 Select the most appropriate ANTONYM of the given word.

Stormy

- Ans 1. Ferocious
 2. Sporadic
 3. Serene
 4. Rough

Question ID : 26433050963
Status : Answered
Chosen Option : 3

Q.7 Select the option that can be used as a one-word substitute for the given group of words.

One who does not tire easily

- Ans 1. Indefatigable
 2. Pedantic
 3. Recluse
 4. Libertine

Question ID : 26433051074
Status : Answered
Chosen Option : 1

Q.8 Parts of the following sentence have been given as options. One of them may contain an error. Select the part that contains the error from the given options. If you don't find any error, mark 'No error' as your answer.

Over the years, the threat of cyberattacks on satellites has gotten more direr.

- Ans
- 1. No error
 - 2. has gotten more direr
 - 3. threat of cyberattacks on satellites
 - 4. Over the years, the

Question ID : 26433051081
 Status : Answered
 Chosen Option : 2

Q.9 Select the option that rectifies the incorrectly spelt words in the given sentence.

The young worms are fedd tendar leaves.

- Ans
- 1. The young worms are fed tander leaves.
 - 2. The young worms are fed tender leaves.
 - 3. The young worms are fed tendor leaves.
 - 4. The young worms are feid tendre leaves.

Question ID : 26433050894
 Status : Answered
 Chosen Option : 1

Q.10 Select the most appropriate option to fill in the blank.

You need to put the baby very _____ on the bed.

- Ans
- 1. much gently
 - 2. gently
 - 3. more gentle
 - 4. gentle

Question ID : 26433050579
 Status : Answered
 Chosen Option : 2

Q.11 Select the option that can be used as a one-word substitute for the given group of words.

A person who looks at the bright side of things

- Ans
- 1. Oculist
 - 2. Optimist
 - 3. Pessimist
 - 4. Atheist

Question ID : 26433051276
 Status : Answered
 Chosen Option : 2

Q.12 Select the most appropriate option to fill in the blank.

A person must speak eloquently and _____ while making a speech.

- Ans
- 1. rudely
 - 2. politely
 - 3. hurriedly
 - 4. disrespectfully

Question ID : 26433051442
Status : Answered
Chosen Option : 2

Q.13 Select the option that will improve the underlined part of the sentence. In case no improvement is needed, select 'No improvement required'.

Either Supriya or Nikunj are lying off this situation.

- Ans
- 1. is lying in relation to
 - 2. has lie on
 - 3. No improvement required
 - 4. were lying to

Question ID : 26433050511
Status : Answered
Chosen Option : 2

Q.14 Select the most appropriate synonym of the bracketed word in the given sentence.

They saw fit to (banish) him from the party and exclude him from the election campaign.

- Ans
- 1. persevere
 - 2. revolt
 - 3. distress
 - 4. exile

Question ID : 26433050679
Status : Answered
Chosen Option : 4

Q.15 The following sentence has been divided into parts. One of them may contain an error. Select the part that contains the error from the given options. If you don't find any error, mark 'No error' as your answer.

Wind is one / of biggest factors / in the spread of fire.

- Ans
- 1. of biggest factors
 - 2. No error
 - 3. in the spread of fire
 - 4. Wind is one

Question ID : 26433050975
Status : Answered
Chosen Option : 1

Q.16 The following sentence has been divided into parts. One of them may contain an error. Select the part that contains the error from the given options. If you don't find any error, mark 'No error' as your answer.

The new media / is more faster / and more popular.

- Ans 1. No error
 2. is more faster
 3. and more popular
 4. The new media

Question ID : 26433050872
Status : Answered
Chosen Option : 3

Q.17 Select the option that will improve the underlined part of the given sentence. In case no improvement is needed, select 'No improvement required'.

As a young girl, Mary lived in France, where she have married the king of France, Francis II.

- Ans 1. she has married
 2. No improvement required
 3. she married
 4. she did married

Question ID : 26433051473
Status : Answered
Chosen Option : 3

Q.18 Select the most appropriate synonym of the underlined word in the given sentence.

The laws are strong but never enforced.

- Ans 1. Diluted
 2. Abandoned
 3. Imposed
 4. Disregarded

Question ID : 26433050593
Status : Answered
Chosen Option : 3

Q.19 Select the correctly spelt word.

- Ans 1. Concsent
 2. Concent
 3. Conscent
 4. Consent

Question ID : 26433050971
Status : Answered
Chosen Option : 3

Q.20 Select the most appropriate meaning of the given idiom.

To smell a rat

- Ans 1. To suspect something
 2. To catch someone during a crime
 3. To leave things undisturbed
 4. To detect a dead rat

Question ID : 26433051386
 Status : Answered
 Chosen Option : 1

Comprehension:

In the following passage, some words have been deleted. Read the passage carefully and select the most appropriate option to fill in each blank.

The Small Indian Mongoose, (1) _____ its little round ears, is an (2) _____ hunter and has a long snout-like face and short legs that have sharp claws. It (3) _____ brown or grey-grizzly fur and (4) _____ in abandoned burrows or tunnels. (5) _____ the rat-like appearance, mongooses are not rodents.

SubQuestion No : 21

Q.21 Select the most appropriate option to fill in blank number 1.

- Ans 1. of
 2. to
 3. from
 4. with

Question ID : 26433050582
 Status : Answered
 Chosen Option : 4

Comprehension:

In the following passage, some words have been deleted. Read the passage carefully and select the most appropriate option to fill in each blank.

The Small Indian Mongoose, (1) _____ its little round ears, is an (2) _____ hunter and has a long snout-like face and short legs that have sharp claws. It (3) _____ brown or grey-grizzly fur and (4) _____ in abandoned burrows or tunnels. (5) _____ the rat-like appearance, mongooses are not rodents.

SubQuestion No : 22

Q.22 Select the most appropriate option to fill in blank number 2.

- Ans 1. alive
 2. alike
 3. awake
 4. agile

Question ID : 26433050583
 Status : Answered
 Chosen Option : 4

Comprehension:

In the following passage, some words have been deleted. Read the passage carefully and select the most appropriate option to fill in each blank.

The Small Indian Mongoose, (1) _____ its little round ears, is an (2) _____ hunter and has a long snout-like face and short legs that have sharp claws. It (3) _____ brown or grey-grizzly fur and (4) _____ in abandoned burrows or tunnels. (5) _____ the rat-like appearance, mongooses are not rodents.

SubQuestion No : 23

Q.23 Select the most appropriate option to fill in blank number 3.

- Ans 1. has
 2. had
 3. have
 4. having

Question ID : 26433050584
Status : Answered
Chosen Option : 1

Comprehension:

In the following passage, some words have been deleted. Read the passage carefully and select the most appropriate option to fill in each blank.

The Small Indian Mongoose, (1) _____ its little round ears, is an (2) _____ hunter and has a long snout-like face and short legs that have sharp claws. It (3) _____ brown or grey-grizzly fur and (4) _____ in abandoned burrows or tunnels. (5) _____ the rat-like appearance, mongooses are not rodents.

SubQuestion No : 24

Q.24 Select the most appropriate option to fill in blank number 4.

- Ans 1. learns
 2. leans
 3. leaves
 4. lives

Question ID : 26433050585
Status : Answered
Chosen Option : 4

Comprehension:

In the following passage, some words have been deleted. Read the passage carefully and select the most appropriate option to fill in each blank.

The Small Indian Mongoose, (1) _____ its little round ears, is an (2) _____ hunter and has a long snout-like face and short legs that have sharp claws. It (3) _____ brown or grey-grizzly fur and (4) _____ in abandoned burrows or tunnels. (5) _____ the rat-like appearance, mongooses are not rodents.

SubQuestion No : 25

Q.25 Select the most appropriate option to fill in blank number 5.

- Ans 1. Instead
 2. Apart
 3. Often
 4. Despite

Question ID : 26433050586
Status : Answered
Chosen Option : 4

Section : General Intelligence and Reasoning

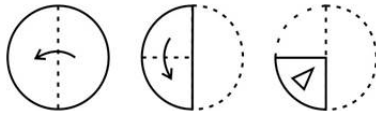
Q.1 Select the option that is related to the fifth number in the same way as the second number is related to the first number and the fourth number is related to the third number.

196: 226:: 256: 290:: 324: ?

- Ans 1. 362
 2. 358
 3. 352
 4. 372

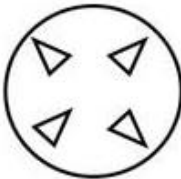
Question ID : 26433048333
Status : Answered
Chosen Option : 1

Q.2 The sequence of folding a piece of paper and the manner in which the folded paper has been cut is shown in the following figures. How would this paper look when unfolded?

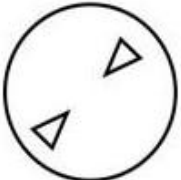


Ans

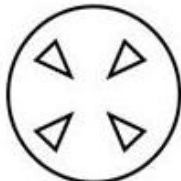
1.



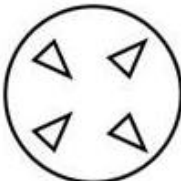
2.



3.



4.



Question ID : 26433048512

Status : Answered

Chosen Option : 3

Q.3 In a certain code language, if February is called March, March is called April, April is called June, June is called September, and September is called November, then which month will have the most number of days?

Ans 1. September

2. March

3. April

4. June

Question ID : 26433048100

Status : Answered

Chosen Option : 3

Q.4 Select the set in which the numbers are related in the same way as are the numbers of the following sets.

(NOTE : Operations should be performed on the whole numbers, without breaking down the numbers into its constituent digits. E.g 13 – Operations on 13 such as adding /deleting /multiplying etc. to 13 can be performed. Breaking down 13 into 1 and 3 and then performing mathematical operations on 1 and 3 is NOT allowed)

(3, 4, 24)
(4, 5, 40)

- Ans 1. (4, 6, 36)
 2. (5, 7, 42)
 3. (3, 7, 21)
 4. (2, 7, 28)

Question ID : 26433047984
 Status : Answered
 Chosen Option : 4

Q.5 The ages of seven students of a tuition class, Prem, Qazi, Rishav, Subham, Tania, Urvashi and Vinita, are as follows:
 Prem is the second oldest. Vinita is older than only one person in the class. Subham is older than Tania but younger than Prem. Three students are older than Tania and three are younger than Tania. Neither Rishav nor Qazi is the youngest.
 Given that no two students have the same age, who is the youngest?

- Ans 1. Subham
 2. Urvashi
 3. Vinita
 4. Tania

Question ID : 26433048474
 Status : Answered
 Chosen Option : 2

Q.6 In a certain code language, 'Toys are hard' is coded as '# % @', and 'Games magnet is toys' is coded as 'fr lm ag #'. What is the code for 'Toys' in that language?

- Ans 1. @
 2. #
 3. %
 4. fr

Question ID : 26433048570
 Status : Answered
 Chosen Option : 2

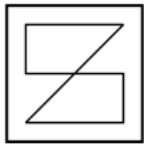
Q.7 Select the option that is related to the fifth letter-cluster in the same way as the second letter-cluster is related to the first letter-cluster and the fourth letter-cluster is related to the third letter-cluster.

METHOD : OIZPYP :: SAFETY : UELMDK :: YELLOW : ?

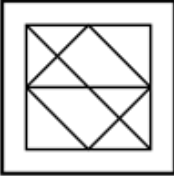
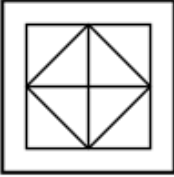
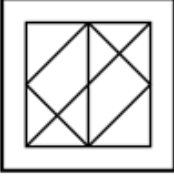
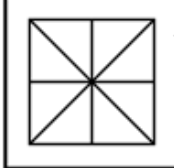
- Ans
- 1. AIRTXI
 - 2. AIRTYJ
 - 3. AIRTXJ
 - 4. AIRTYI

Question ID : 26433048320
 Status : Answered
 Chosen Option : 2

Q.8 Select the option in which the given figure is embedded (rotation is NOT allowed).



Ans

- 1. 
- 2. 
- 3. 
- 4. 

Question ID : 26433047989
 Status : Answered
 Chosen Option : 4

Q.9 Five people I, II, III, IV and V standing in a line facing north. V and II are standing together. V and III are standing together. I is at the extreme left. II is second from the extreme right. Who is standing at the extreme right?

- Ans
- 1. II
 - 2. V
 - 3. IV
 - 4. III

Question ID : 26433048473
Status : Answered
Chosen Option : 3

Q.10 Which two signs should be interchanged in the given equation to make it mathematically correct?

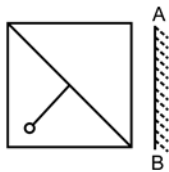
$$26 \div 24 + 6 \times 27 - 105 = 29$$

- Ans
- 1. \times and \div
 - 2. $+$ and \div
 - 3. $+$ and \times
 - 4. \times and $-$

Question ID : 26433048361
Status : Answered
Chosen Option : 2

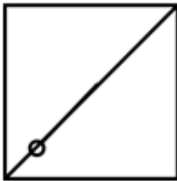
<https://www.freshersnow.com/>

Q.11 Select the correct mirror image of the given figure when the mirror is placed at the right side.

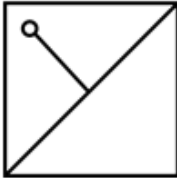


Ans

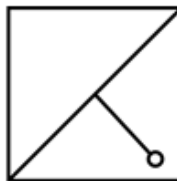
✗ 1.



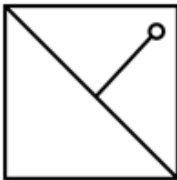
✗ 2.



✓ 3.



✗ 4.



Question ID : 26433048015

Status : Answered

Chosen Option : 3

Q.12 Five people, I, J, K, L, and M, are sitting in a straight row, facing north. K sits to the immediate right of L. Only two people sit between L and I. M sits to the immediate right of I and to the immediate left of J. Who sits in the middle of the row?

Ans ✓ 1. J

✗ 2. L

✗ 3. M

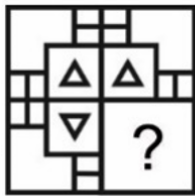
✗ 4. K

Question ID : 26433048251

Status : Answered

Chosen Option : 1

Q.13 Select the figure from the given options that can replace the question mark (?) and complete the pattern (rotation is not allowed).

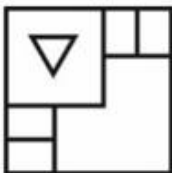


Ans

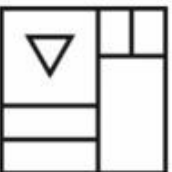
✗ 1.



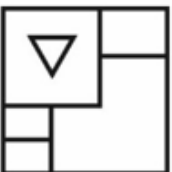
✓ 2.



✗ 3.



✗ 4.



Question ID : 2643304888
 Status : Answered
 Chosen Option : 2

Q.14 Read the given statements and conclusions carefully. Assuming that the information given in the statements is true, even if it appears to be at variance with commonly known facts, decide which of the given conclusions logically follow(s) from the statements.

Statements:

Some pilots are cutes.

All ballers are cutes.

Conclusions:

I. All cutes are ballers.

II. Some pilots are ballers.

Ans ✓ 1. Neither conclusion I nor II follows.

✗ 2. Only conclusion I follows.

✗ 3. Only conclusion II follows.

✗ 4. Both conclusions I and II follow.

Question ID : 26433048330
 Status : Answered
 Chosen Option : 3

Q.15 Select the number from among the given options that can replace the question mark (?) in the following series.

16, 23, 31, 40, 50, ?

- Ans
- 1. 60
 - 2. 62
 - 3. 61
 - 4. 63

Question ID : 26433048257
Status : Answered
Chosen Option : 3

Q.16 Select the option that is related to the third letter-cluster in the same way as the second letter-cluster is related to the first letter-cluster.

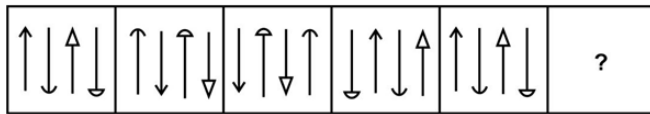
GMP : IKS :: FOL : ?

- Ans
- 1. HMP
 - 2. HNP
 - 3. HMO
 - 4. HNO

Question ID : 26433048574
Status : Answered
Chosen Option : 4

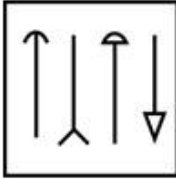
<https://www.freshersnow.com/>

Q.17 Select the figure from among the given options that can replace the question mark (?) in the following series.

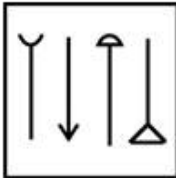


Ans

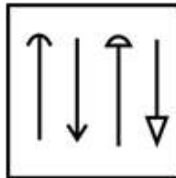
✗ 1.



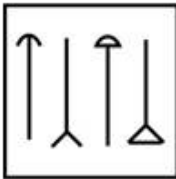
✗ 2.



✓ 3.



✗ 4.



Question ID : 26433048337
 Status : Answered
 Chosen Option : 3

Q.18 Select the option that can replace the question mark (?) in the following series.

E, H, K, N, Q, ?

Ans ✗ 1. V

✓ 2. T

✗ 3. U

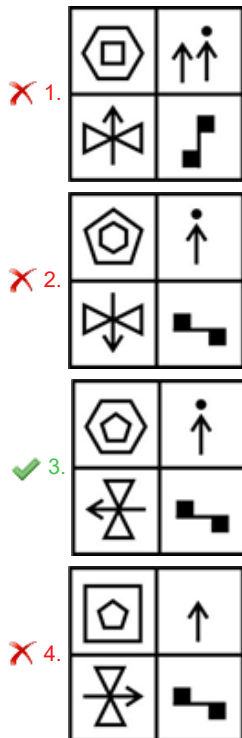
✗ 4. S

Question ID : 26433048343
 Status : Answered
 Chosen Option : 2

Q.19 Select the figure from among the given options that can replace the question mark (?) in the following series.



Ans



Question ID : 26433048263

Status : Answered

Chosen Option : 3

Q.20 Read the given statements and conclusions carefully. Assuming that the information given in the statements is true, even if it appears to be at variance with commonly known facts, decide which of the given conclusions logically follow(s) from the statements.

Statements:

All chips are lays.

Some lays are snacks.

Conclusions:

I. All lays are chips.

II. All chips are snacks.

- Ans
1. Both conclusions I and II follow.
2. Only conclusion II follows.
3. Neither conclusion I nor II follow.
4. Only conclusion I follows.

Question ID : 26433047979

Status : Answered

Chosen Option : 3

Q.21 Select the option that is related to the fifth term in the same way as the second term is related to the first term and the fourth term is related to the third term.

ERA : ETA :: HONEST : JOPEUV :: GRAIN : ?

- Ans
- 1. GTCIN
 - 2. ITCIP
 - 3. IRAKP
 - 4. ITAIP

Question ID : 26433048096
 Status : Answered
 Chosen Option : 4

Q.22 In a certain code language, 'WATER' is written as 'RETAW', 'CERTAIN' is written as 'NIATREC', and 'GENERAL' is written as 'LARENEG'. How will 'LOVELY' be written in that language?

- Ans
- 1. LOVELY
 - 2. YLEVOL
 - 3. YOVELL
 - 4. YLVEOL

Question ID : 26433048098
 Status : Answered
 Chosen Option : 4

Q.23 Select the number from among the given options that can replace the question mark (?) in the following series.

31, 62, 65, 260, 265, ?

- Ans
- 1. 860
 - 2. 1240
 - 3. 555
 - 4. 1590

Question ID : 26433048477
 Status : Answered
 Chosen Option : 4

Q.24 In a certain code language, 'TEAM' is coded as '41', and 'FEAD' is coded as '18'. How will 'GROW' be coded in that language?

- Ans
- 1. 67
 - 2. 63
 - 3. 65
 - 4. 61

Question ID : 26433048698
 Status : Answered
 Chosen Option : 2

Q.25 What will be the value of the following expression, if '+' and '-' are interchanged and 'x' and '÷' are interchanged?

$$5 - 3 \div 4 + 6 \times 2 = ?$$

- Ans
- 1. 16
 - 2. 14
 - 3. 12
 - 4. 18

Question ID : 26433048481
 Status : Answered
 Chosen Option : 2

Section : Numerical Aptitude

Q.1 What is the average of the natural numbers from 1 to 43?

- Ans
- 1. 32
 - 2. 22
 - 3. 44
 - 4. 43

Question ID : 26433049397
 Status : Answered
 Chosen Option : 2

Q.2 If $a : b : c = 2 : 3 : 7$, then what is $2a : 3b : 7c$?

- Ans
- 1. 4 : 9 : 49
 - 2. 5 : 10 : 52
 - 3. 6 : 10 : 49
 - 4. 6 : 10 : 47

Question ID : 26433049605
 Status : Answered
 Chosen Option : 1

Q.3 A person buys some bananas at ₹Y per dozen and sells them at ₹ $\frac{Y}{4}$ per banana. What is his gain percentage?

- Ans
- 1. 200%
 - 2. 50%
 - 3. 80%
 - 4. 100%

Question ID : 26433049326
 Status : Answered
 Chosen Option : 1

Q.4 If $\frac{2x+3}{18 \div 3 \times 4 + 2} = \frac{12 \times 3 + 5}{2 \times 4 \div 2}$, then what is the value of x?

- Ans
- 1. 132.25
 - 2. 131.75
 - 3. 134.35
 - 4. 120.5

Question ID : 26433049614
 Status : Answered
 Chosen Option : 2

Q.5 A toy is in the shape of a cylinder surmounted by a hemisphere. The total height of the toy is 15 cm and the radius of the hemisphere is 6 cm. What is the volume of the toy?

- Ans
- 1. $496\pi \text{ cm}^3$
 - 2. $476\pi \text{ cm}^3$
 - 3. $458\pi \text{ cm}^3$
 - 4. $468\pi \text{ cm}^3$

Question ID : 26433049417
 Status : Answered
 Chosen Option : 4

Q.6 What is the average of the cubes of the first 7 natural numbers?

- Ans
- 1. 84
 - 2. 105
 - 3. 96
 - 4. 112

Question ID : 26433049704
 Status : Answered
 Chosen Option : 4

Q.7 A purchased a book for ₹1,600. A sold it to B at a loss of 10% and B sold it to C at a loss of 20%. At what price did C purchase this book?

- Ans
- 1. ₹1,224
 - 2. ₹1,442
 - 3. ₹1,152
 - 4. ₹1,098

Question ID : 26433049673
 Status : Answered
 Chosen Option : 3

Q.8 The table below shows the number of bags of cements of 5 different brands sold by a shop on a particular day.

Cement	Bags
C1	61
C2	39
C3	19
C4	51
C5	40

The weight of each bag of cement is the same and is equal to 45 kg. What is the total weight of cement of all the bags taken together?

- Ans**
- 1. 9150 kg
 - 2. 8750 kg
 - 3. 9850 kg
 - 4. 9450 kg

Question ID : 26433049815
 Status : Answered
 Chosen Option : 4

Q.9 A alone can do a piece of work in 7 days, while B alone can do it in 10 days. In how many days will they complete the same work if they both work together?

- Ans**
- 1. $\frac{105}{17}$ days
 - 2. $\frac{35}{17}$ days
 - 3. $\frac{70}{17}$ days
 - 4. $\frac{84}{17}$ days

Question ID : 26433049285
 Status : Answered
 Chosen Option : 3

Q.10 What is the least number which when divided by 18, 24 and 36 leaves 3 as a remainder in each case?

- Ans**
- 1. 75
 - 2. 93
 - 3. 111
 - 4. 99

Question ID : 26433049320
 Status : Answered
 Chosen Option : 1

Q.11 A piece of work can be completed by P and Q together in 24 days, and the same piece of work can be completed by R alone in 60 days. If P and R together can do the same work in 36 days, then find the time taken by Q to complete this piece of work alone.

- Ans**
- ✗ 1. $8\frac{4}{5}$ days
 - ✗ 2. $29\frac{9}{13}$ days
 - ✗ 3. $3\frac{6}{7}$ days
 - ✓ 4. $32\frac{8}{11}$ days

Question ID : 26433050085
 Status : Answered
 Chosen Option : 4

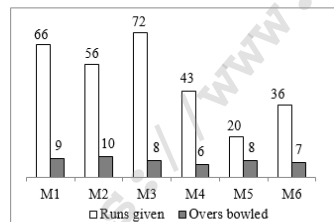
Q.12 If 80% of A is 13 more than 90% of B, and the ratio of 40% of A to 60% of B is 10:9, then what is the value of A – B?

- Ans**
- ✗ 1. 50
 - ✗ 2. 80
 - ✓ 3. 20
 - ✗ 4. 60

Question ID : 26433050075
 Status : Answered
 Chosen Option : 3

Q.13 The following bar chart shows the runs given and overs bowled by a bowler in 6 different matches.

$$\text{Economy rate} = \frac{\text{Runs given}}{\text{Overs bowled}}$$



What will be the economy rate of the bowler for all the 6 matches taken together? [Give your answer correct to 2 decimal places.]

- Ans**
- ✗ 1. 7.22
 - ✗ 2. 5.46
 - ✗ 3. 6.93
 - ✓ 4. 6.10

Question ID : 26433049616
 Status : Answered
 Chosen Option : 4

Q.14 The difference of two numbers is 24 while the sum of those two numbers is 120. Which of the options below can be the ratio of those two numbers?

- Ans
- 1. 3 : 5
 - 2. 3 : 2
 - 3. 4 : 5
 - 4. 5 : 8

Question ID : 26433049806
 Status : Answered
 Chosen Option : 2

Q.15 In a camp, there are tents of the same shape and size. Each tent is cylindrical up to a height of 4 m and conical above it. The diameters of the bases of the cylinder and the cone are both 10.5 m and the slant height of the conical part is 10 m. If a total of 3861 m^2 canvas is used in making all the tents, then how many tents are there in the camp? [Use $\pi = \frac{22}{7}$]

- Ans
- 1. 11
 - 2. 7
 - 3. 19
 - 4. 13

Question ID : 26433050142
 Status : Answered
 Chosen Option : 4

Q.16 The simple interest on a certain sum of money for 2 years at 7% per annum is double the compound interest on ₹1,000 for 2 years at 10% per annum, compounded annually. What is the sum placed on simple interest?

- Ans
- 1. ₹1,000
 - 2. ₹2,000
 - 3. ₹3,000
 - 4. ₹4,000

Question ID : 26433049332
 Status : Answered
 Chosen Option : 3

Q.17 The price of kerosene increases by 10% every year. If the current price of kerosene is ₹50 per litre, then what will be the price of kerosene per litre after 2 years?

- Ans
- 1. ₹65.6
 - 2. ₹60.5
 - 3. ₹52.8
 - 4. ₹55.6

Question ID : 26433049707
 Status : Answered
 Chosen Option : 2

Q.18 In an election between two candidates, the total number of votes polled were 'y'. Out of these, 40% votes were invalid. The winning candidate got 60% of the valid votes, while the other candidate lost by 6000 votes. Find the value of 'y'.

- Ans
- 1. 45000
 - 2. 50000
 - 3. 40000
 - 4. 30000

Question ID : 26433049500
 Status : Answered
 Chosen Option : 2

Q.19 The volume of a cube is 512 cm^3 . What is the length of each side of this cube?

- Ans
- 1. 9 cm
 - 2. 8 cm
 - 3. 6 cm
 - 4. 12 cm

Question ID : 26433049684
 Status : Answered
 Chosen Option : 2

Q.20 Find the average of the numbers appearing on all 6 faces of a cubical die numbered 1 to 6.

- Ans
- 1. 3.4
 - 2. 3.2
 - 3. 3.5
 - 4. 3.6

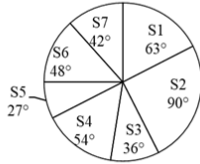
Question ID : 26433050123
 Status : Answered
 Chosen Option : 3

Q.21 A person covers a distance of 7.5 km at a speed of 25 m/sec. What is the time taken by the person to cover the mentioned distance?

- Ans
- 1. 6 min
 - 2. 7.5 min
 - 3. 5 min
 - 4. 8 min

Question ID : 26433049595
 Status : Answered
 Chosen Option : 3

Q.22 The following pie chart shows the sectors representing the shares of the number of bottles sold by each of seven different shops in terms of the central angles (in degrees) with respect to the total number of bottles sold by all the seven shops taken together.



If the total number of bottles sold by all the 7 shops taken together is 1500, then what is the number of bottles sold by S4?

- Ans**
- 1. 180
 - 2. 225
 - 3. 165
 - 4. 240

Question ID : 26433049692
 Status : Answered
 Chosen Option : 2

Q.23 What is the value of $17 \div 34 + 2 \times 12 \div 6 - 5 \times 3 \div 6$?

- Ans**
- 1. 2
 - 2. 3
 - 3. 4.5
 - 4. 3.5

Question ID : 26433049688
 Status : Answered
 Chosen Option : 1

Q.24 $\frac{2}{5}$ of the marked price of an item is equal to $\frac{4}{7}$ of its cost price. If a discount of 15% is given on its sale, then what is the approximate profit percentage earned?

- Ans**
- 1. 19.84%
 - 2. 23.63%
 - 3. 21.43%
 - 4. 14.28%

Question ID : 26433049699
 Status : Answered
 Chosen Option : 3

Q.25 A train crosses a stationary pole completely in 18 seconds and a bridge completely in 44 seconds. If the length of bridge is 650 metres, then what is the length of the train?

- Ans**
- 1. 540 m
 - 2. 360 m
 - 3. 450 m
 - 4. 270 m

Question ID : 26433049796
Status : Answered
Chosen Option : 3

Section : General Awareness

Q.1 Qutub-ud-din Aibak founded which of the following dynasties?

- Ans**
- 1. Tughluq Dynasty
 - 2. Sayyid Dynasty
 - 3. Khilji Dynasty
 - 4. Slave Dynasty

Question ID : 26433046732
Status : Answered
Chosen Option : 3

Q.2 Which of the following types of agriculture is known as Jhum in Assam?

- Ans**
- 1. Intensive Farming
 - 2. Plantation Agriculture
 - 3. Subsistence Farming
 - 4. Shifting Agriculture

Question ID : 26433046727
Status : Answered
Chosen Option : 4

Q.3 Pradhan Mantri Kaushal Vikas Yojana was introduced in 2015 under the _____.

- Ans**
- 1. Ministry of Rural development
 - 2. Ministry of Housing and Urban Affairs
 - 3. Ministry of Finance
 - 4. Ministry of Skill Development and Entrepreneurship

Question ID : 26433046805
Status : Answered
Chosen Option : 4

Q.4 Loudness of sound is proportional to the _____ of the amplitude of the vibration producing the sound.

- Ans
- 1. cube root
 - 2. Cube
 - 3. Square
 - 4. square root

Question ID : 26433047198
Status : Answered
Chosen Option : 4

Q.5 Who among the following was a famous Indian choreographer?

- Ans
- 1. Kajol
 - 2. Saroj Khan
 - 3. Shreya Ghoshal
 - 4. Madhuri Dixit

Question ID : 26433046995
Status : Answered
Chosen Option : 2

Q.6 The Annual Financial Statement shows the receipts and payments of Government in the form of _____.

- Ans
- 1. Contingency Fund, Public Account, and Capital Projects
 - 2. Contingency Fund, Public Account, and Consolidated Funds
 - 3. Public Account and Consolidate Funds
 - 4. Contingency Fund and Consolidated Funds

Question ID : 26433047117
Status : Not Answered
Chosen Option : --

Q.7 Which British governor ended the Dual System of Government in Bengal?

- Ans
- 1. Robert Clive
 - 2. Warren Hastings
 - 3. John Shore
 - 4. William Bentinck

Question ID : 26433047083
Status : Answered
Chosen Option : 2

Q.8 Which of the following is the world's largest inland sea?

- Ans 1. Azov Sea
 2. Red Sea
 3. Mediterranean Sea
 4. Caspian Sea

Question ID : 26433046726
Status : Answered
Chosen Option : 3

Q.9 Name the PETA India Person of the Year for 2021.

- Ans 1. Anushka Sharma
 2. Alia Bhatt
 3. Deepika Padukone
 4. Kiara Advani

Question ID : 26433047094
Status : Answered
Chosen Option : 3

Q.10 Which of the following contains ascorbic acid (vitamin C) in the highest quantity?

- Ans 1. Dates
 2. Wheat
 3. Guava
 4. Peanut

Question ID : 26433046999
Status : Answered
Chosen Option : 3

Q.11 How many players are there in a Field Hockey team?

- Ans 1. 7
 2. 11
 3. 15
 4. 19

Question ID : 26433046916
Status : Answered
Chosen Option : 2

Q.12 Who is the first trans woman to win a Padma Shri award for Bharatanatyam?

- Ans 1. Bishesh Huirem
 2. Narthaki Nataraj
 3. Sruthy Sithara
 4. Sadhana Mishra

Question ID : 26433047087
Status : Answered
Chosen Option : 4

Q.13 Which of the following fundamental rights implies the prohibition of traffic in human beings, begar and other forms of forced labour?

- Ans 1. Right against Exploitation
 2. Cultural and Educational Rights
 3. Right to Constitutional Remedies
 4. Right to Freedom of Religion

Question ID : 26433046738
Status : Not Answered
Chosen Option : --

Q.14 Who among the following led the Battle of Buxar on behalf of British East India Company?

- Ans 1. Charles Stuart
 2. Robert Clive
 3. Hector Munro
 4. John William Fortescue

Question ID : 26433047009
Status : Answered
Chosen Option : 3

Q.15 Which of the following sports was NOT played at the 2020 Summer Olympic Games (played in 2021)?

- Ans 1. Boxing
 2. Wrestling
 3. Weightlifting
 4. Wushu

Question ID : 26433047491
Status : Answered
Chosen Option : 4

Q.16 Which of the following minerals is responsible for synthesis of thyroxine hormone?

- Ans 1. Iron
 2. Cobalt
 3. Calcium
 4. Iodine

Question ID : 26433047075
Status : Answered
Chosen Option : 4

Q.17 Assam and most of the Peninsular states have ____ population densities.

- Ans
- 1. high to very high
 - 2. very low
 - 3. moderate
 - 4. moderate to high

Question ID : 26433047530
Status : Answered
Chosen Option : 3

Q.18 The Governor of a state is appointed by the ____.

- Ans
- 1. Chief Minister of that state
 - 2. President of India
 - 3. Advocate General of India
 - 4. Prime Minister of India

Question ID : 26433047089
Status : Answered
Chosen Option : 2

Q.19 Freedom in Exile is the autobiography of ____.

- Ans
- 1. Nelson Mandela
 - 2. APJ Abdul Kalam
 - 3. Dalai Lama
 - 4. Mahatma Gandhi

Question ID : 26433047110
Status : Answered
Chosen Option : 3

Q.20 To which state of India is the Hornbill festival related?

- Ans
- 1. Kerala
 - 2. Karnataka
 - 3. Nagaland
 - 4. Bihar

Question ID : 26433047196
Status : Answered
Chosen Option : 3

Q.21 Dr N Rajam is known for playing the ____.

- Ans
- 1. veena
 - 2. guitar
 - 3. violin
 - 4. flute

Question ID : 26433047111
Status : Not Answered
Chosen Option : --

Q.22 The Delhi Municipal Corporation (Amendment) Bill, 2022, was introduced In Lok Sabha on 25th March 2022 by _____.

- Ans
- 1. Ramesh Bidhuri
 - 2. Narendra Modi
 - 3. Amit Shah
 - 4. Nirmala Sitharaman

Question ID : 26433046718
Status : Answered
Chosen Option : 3

Q.23 The ancient Neemrana Baori is located in which of the following districts of Rajasthan?

- Ans
- 1. Ajmer
 - 2. Alwar
 - 3. Bikaner
 - 4. Jaipur

Question ID : 26433046722
Status : Not Answered
Chosen Option : --

Q.24 The iron implement site of Hastinapur was found in which present day state of India?

- Ans
- 1. Bihar
 - 2. Uttar Pradesh
 - 3. Haryana
 - 4. Madhya Pradesh

Question ID : 26433047106
Status : Not Answered
Chosen Option : --

Q.25 Which winds are also known by the name of 'Roaring Forties'?

- Ans
- 1. Polar easterlies
 - 2. westerly winds
 - 3. Polar winds
 - 4. Trade winds

Question ID : 26433047078
Status : Answered
Chosen Option : 4